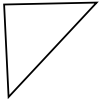


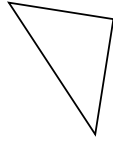


Determinar si el triángulo mostrado es un triángulo recto (sí) o no (no).

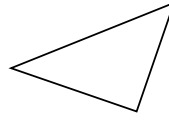
1)



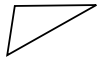
2)



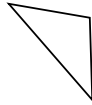
3)



4)



5)



6)



7)



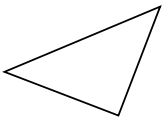
8)



9)



10)



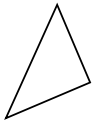
11)



12)



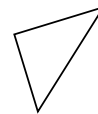
13)



14)



15)



**Respuestas**

1. \_\_\_\_\_

2. \_\_\_\_\_

3. \_\_\_\_\_

4. \_\_\_\_\_

5. \_\_\_\_\_

6. \_\_\_\_\_

7. \_\_\_\_\_

8. \_\_\_\_\_

9. \_\_\_\_\_

10. \_\_\_\_\_

11. \_\_\_\_\_

12. \_\_\_\_\_

13. \_\_\_\_\_

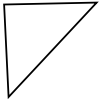
14. \_\_\_\_\_

15. \_\_\_\_\_

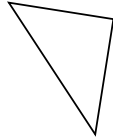


Determinar si el triángulo mostrado es un triángulo recto (sí) o no (no).

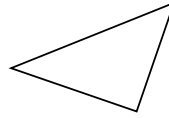
1)



2)



3)



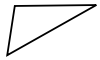
**Respuestas**

1.     **si**    

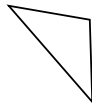
2.     **si**    

3.     **si**    

4)



5)



6)




4.     **no**    

5.     **no**    

6.     **si**    

7)



8)



9)

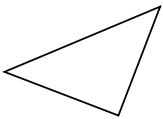


7.     **no**    

8.     **no**    

9.     **si**    

10)



11)



12)



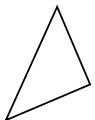
10.     **si**    

11.     **no**    

12.     **no**    

13.     **si**    

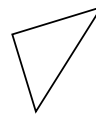
13)



14)



15)



14.     **no**    

15.     **si**