



Determinar si el triángulo mostrado es un triángulo recto (sí) o no (no).

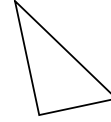
1)



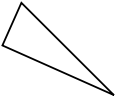
2)



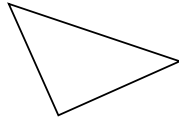
3)



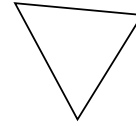
4)



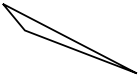
5)



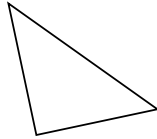
6)



7)



8)



9)



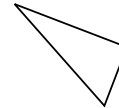
10)



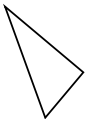
11)



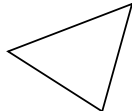
12)



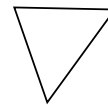
13)



14)



15)



Respuestas

1. _____

2. _____

3. _____

4. _____

5. _____

6. _____

7. _____

8. _____

9. _____

10. _____

11. _____

12. _____

13. _____

14. _____

15. _____



Determinar si el triángulo mostrado es un triángulo recto (sí) o no (no).

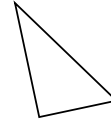
1)



2)



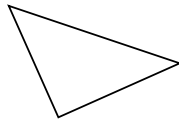
3)



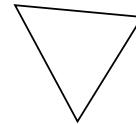
4)



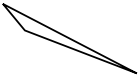
5)



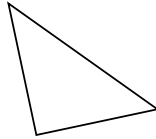
6)



7)



8)



9)



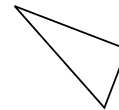
10)



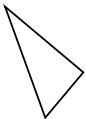
11)



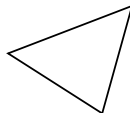
12)



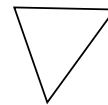
13)



14)



15)



Respuestas

1. no

2. si

3. si

4. si

5. si

6. no

7. no

8. si

9. no

10. no

11. no

12. si

13. si

14. no

15. no