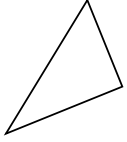


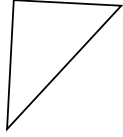


Determinar si el triángulo mostrado es un triángulo recto (sí) o no (no).

1)



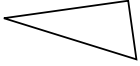
2)



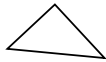
3)




4)



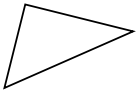
5)



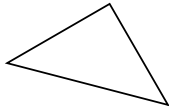
6)



7)



8)



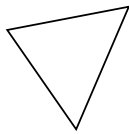
9)



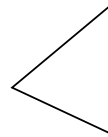
10)



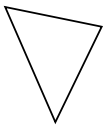
11)



12)



13)



14)



15)



Respuestas

1. _____

2. _____

3. _____

4. _____

5. _____

6. _____

7. _____

8. _____

9. _____

10. _____

11. _____

12. _____

13. _____

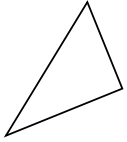
14. _____

15. _____

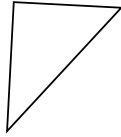


Determinar si el triángulo mostrado es un triángulo recto (sí) o no (no).

1)



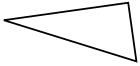
2)



3)




4)



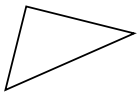
5)



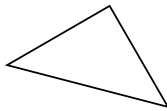
6)



7)



8)



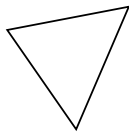
9)



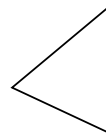
10)



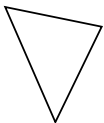
11)



12)



13)



14)



15)



Respuestas

1. **si**

2. **si**

3. **no**

4. **si**

5. **si**

6. **si**

7. **si**

8. **si**

9. **no**

10. **no**

11. **no**

12. **no**

13. **no**

14. **no**

15. **si**