



Determinar si el triángulo mostrado es un triángulo recto (sí) o no (no).

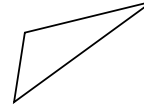
1)



2)



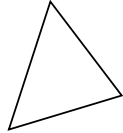
3)



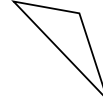
4)



5)



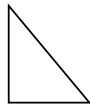
6)



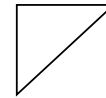
7)



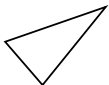
8)



9)



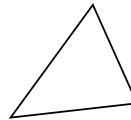
10)



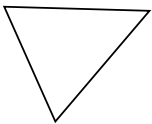
11)



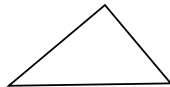
12)




13)



14)



15)



Respuestas

1. _____

2. _____

3. _____

4. _____

5. _____

6. _____

7. _____

8. _____

9. _____

10. _____

11. _____

12. _____

13. _____

14. _____

15. _____



Determinar si el triángulo mostrado es un triángulo recto (sí) o no (no).

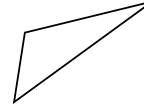
1)



2)



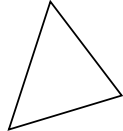
3)



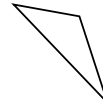
4)



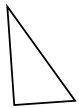
5)



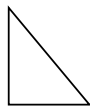
6)



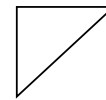
7)



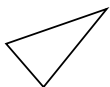
8)



9)



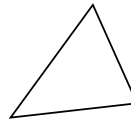
10)



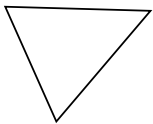
11)



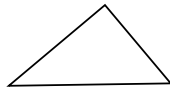
12)




13)



14)



15)



Respuestas

1. **si**

2. **no**

3. **no**

4. **no**

5. **no**

6. **no**

7. **si**

8. **si**

9. **si**

10. **no**

11. **no**

12. **no**

13. **no**

14. **si**

15. **no**