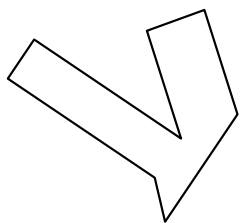





Identificar el tipo de forma mostrado.

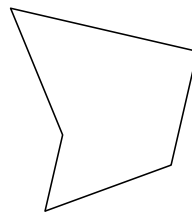
1)



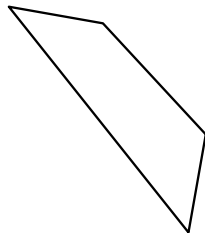
2)



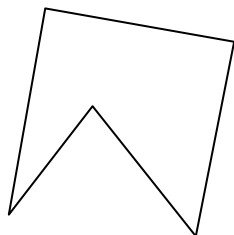
3)




4)



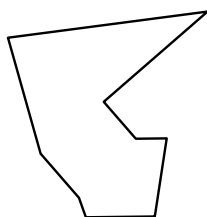
5)



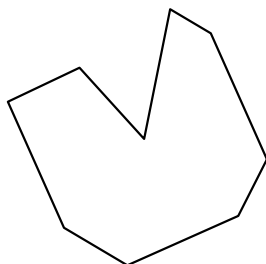
6)



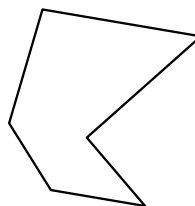
7)



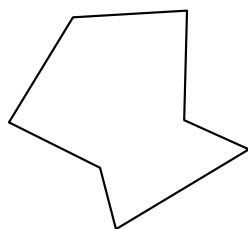
8)




9)



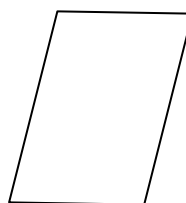
10)



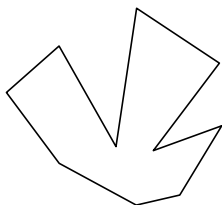
11)



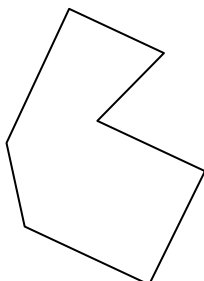
12)



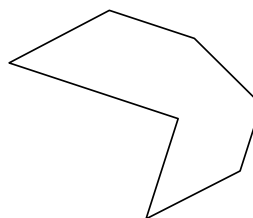
13)



14)



15)



Respuestas

1. _____

2. _____

3. _____

4. _____

5. _____

6. _____

7. _____

8. _____

9. _____

10. _____

11. _____

12. _____

13. _____

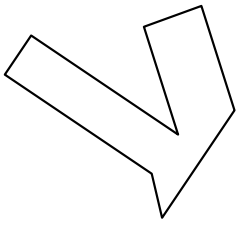
14. _____

15. _____




Identificar el tipo de forma mostrado.

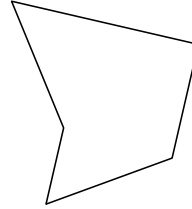
1)



2)



3)



Respuestas

1. octágono

2. heptágono

3. pentágono

4. cuadrilátero

5. pentágono

6. cuadrilátero

7. nonagono

8. nonagono

9. hexágono

10. heptágono

11. nonagono

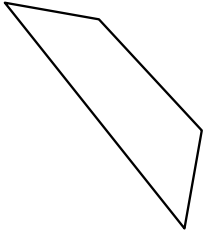
12. cuadrilátero

13. decágono

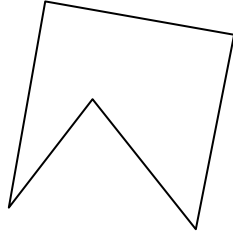
14. heptágono

15. heptágono


4)



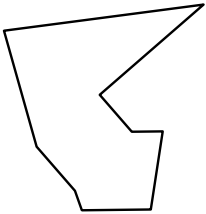
5)



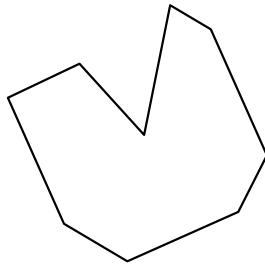
6)



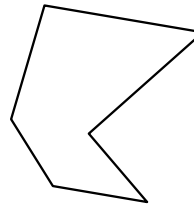
7)



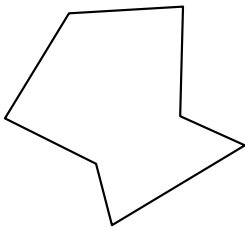
8)



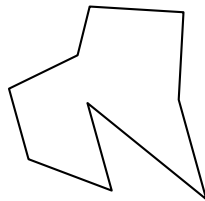
9)



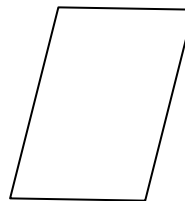
10)



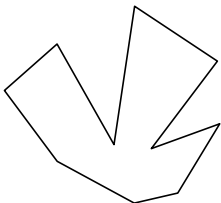
11)



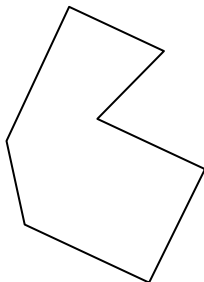
12)



13)



14)



15)

