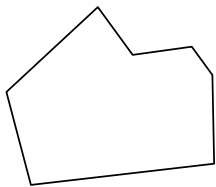


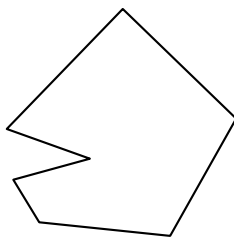


Identificar el tipo de forma mostrado.

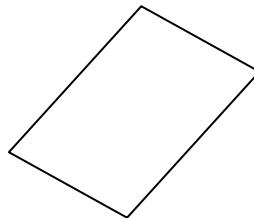
1)



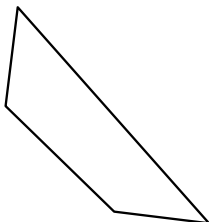
2)




3)




4)



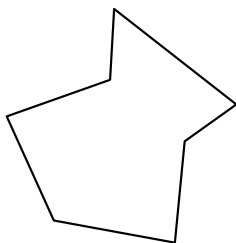
5)



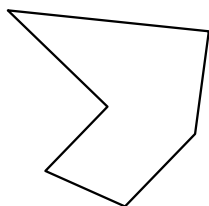
6)




7)



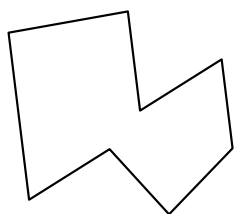
8)



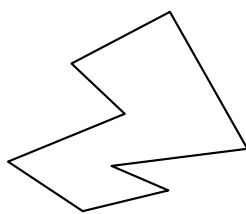
9)



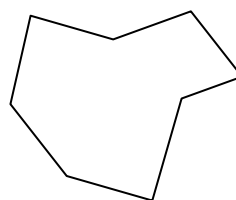
10)



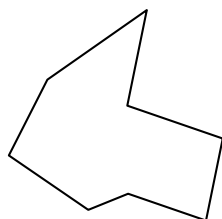
11)



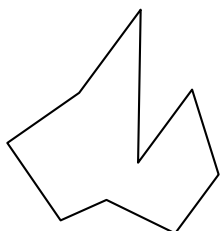
12)



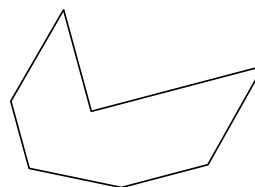
13)



14)



15)



Respuestas

1. _____

2. _____

3. _____

4. _____

5. _____

6. _____

7. _____

8. _____

9. _____

10. _____

11. _____

12. _____

13. _____

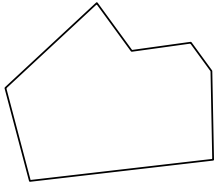
14. _____

15. _____

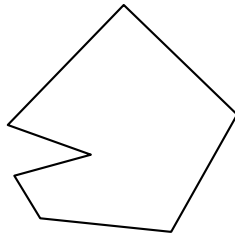


Identificar el tipo de forma mostrado.

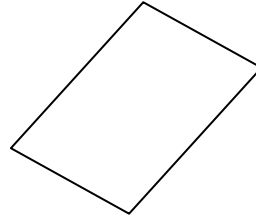
1)



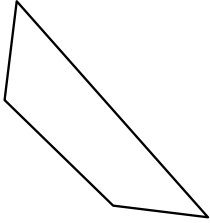
2)




3)



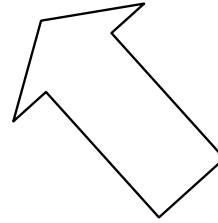
4)



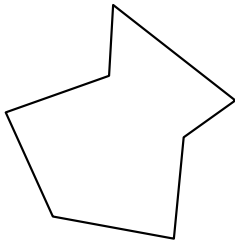
5)



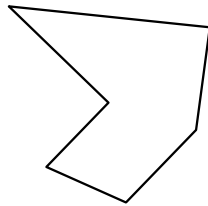
6)




7)



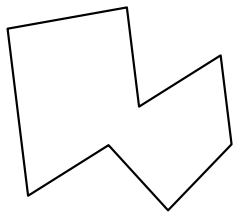
8)



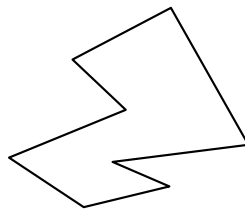
9)



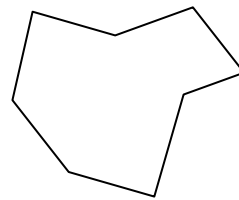
10)



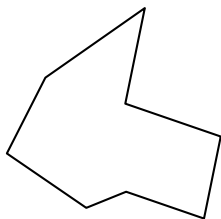
11)



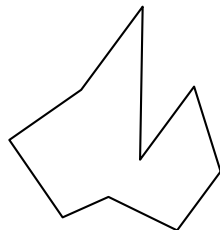
12)



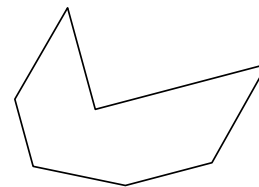
13)



14)



15)



Respuestas

1. heptágono

2. heptágono

3. cuadrilátero

4. cuadrilátero

5. decágono

6. heptágono

7. heptágono

8. hexágono

9. decágono

10. octágonos

11. octágonos

12. octágonos

13. octágonos

14. nonagono

15. heptágono