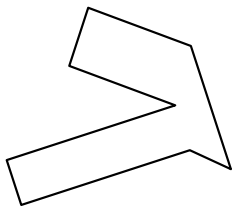


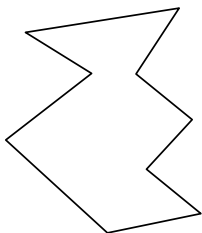


Identificar el tipo de forma mostrado.

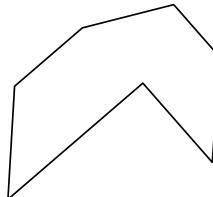
1)



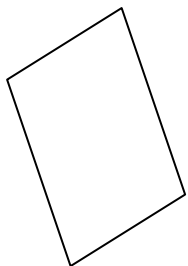
2)



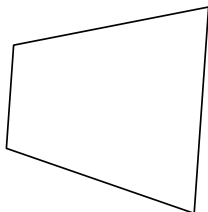
3)



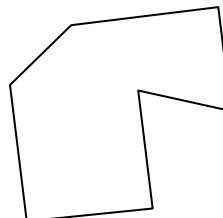
4)



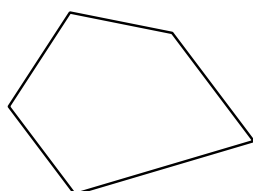
5)



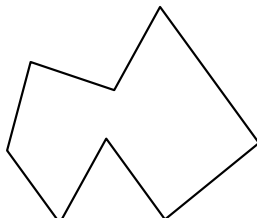
6)



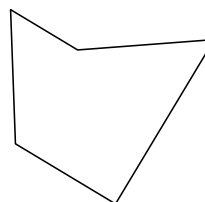
7)




8)



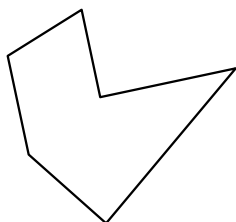
9)



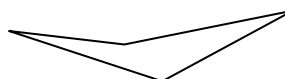
10)



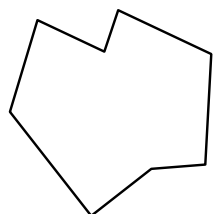
11)




12)



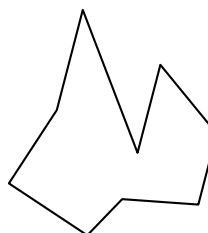
13)



14)



15)



Respuestas

1. _____

2. _____

3. _____

4. _____

5. _____

6. _____

7. _____

8. _____

9. _____

10. _____

11. _____

12. _____

13. _____

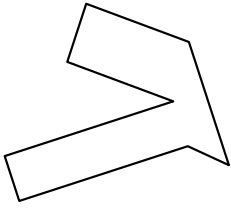
14. _____

15. _____




Identificar el tipo de forma mostrado.

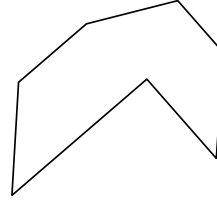
1)



2)



3)



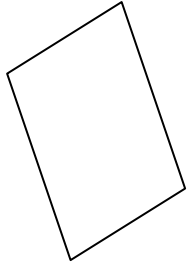
Respuestas

1. octágonos

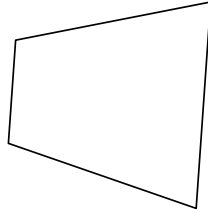
2. decágono

3. heptágono

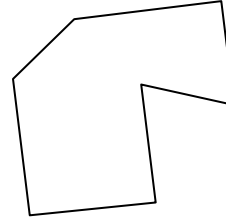
4)



5)



6)

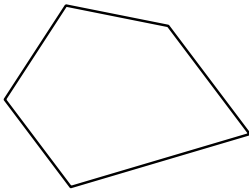


4. cuadrilátero

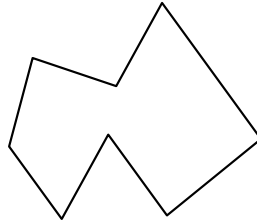
5. cuadrilátero

6. heptágono

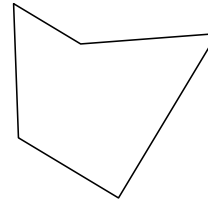
7)



8)



9)




7. pentágono

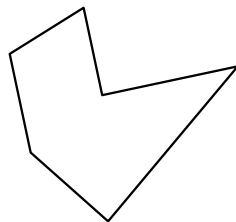
8. octágonos

9. pentágono

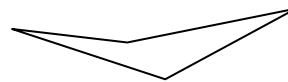
10)



11)



12)



10. cuadrilátero

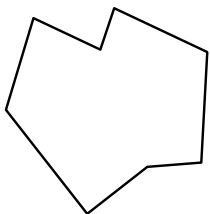
11. hexágono

12. cuadrilátero

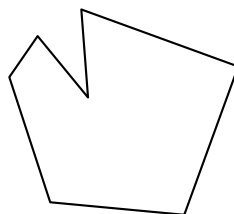
13. octágonos

14. heptágono

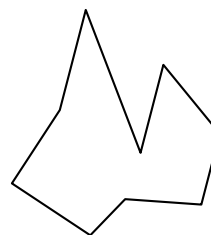
13)



14)



15)



15. nonagono