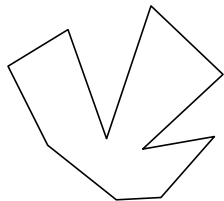





Identificar el tipo de forma mostrado.

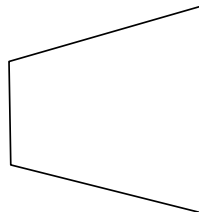
1)




2)




3)



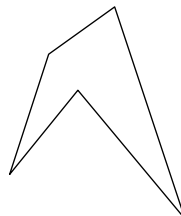
4)



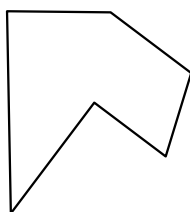
5)



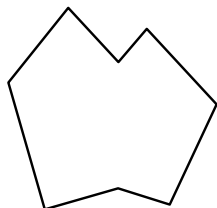
6)



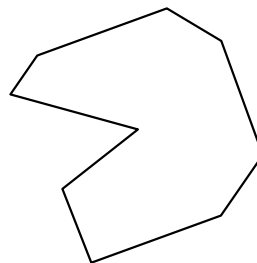
7)



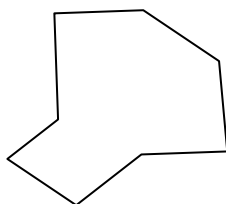
8)



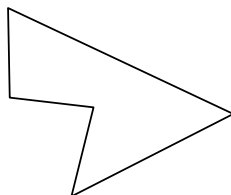
9)




10)



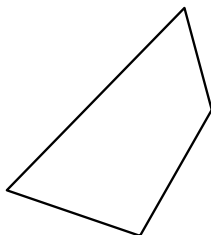
11)



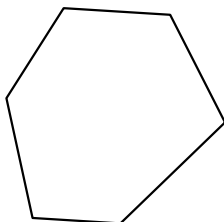
12)




13)



14)



15)



Respuestas

1. _____

2. _____

3. _____

4. _____

5. _____

6. _____

7. _____

8. _____

9. _____

10. _____

11. _____

12. _____

13. _____

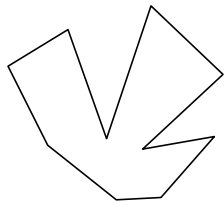
14. _____

15. _____




Identificar el tipo de forma mostrado.

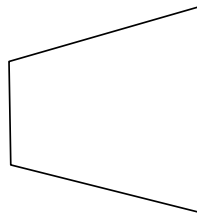
1)




2)




3)



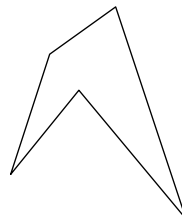
4)



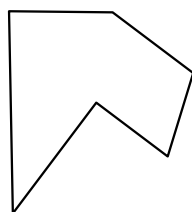
5)



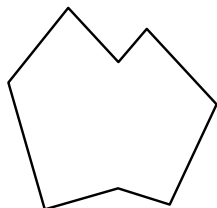
6)



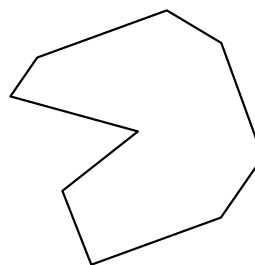
7)



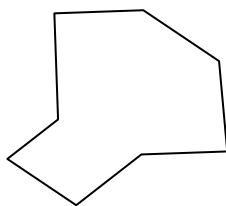
8)



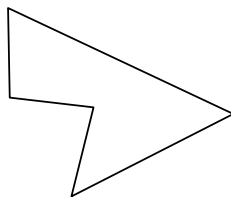
9)




10)



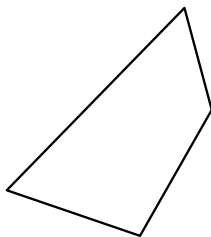
11)



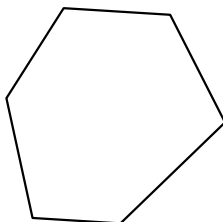
12)




13)



14)



15)



Respuestas

1. decágono

2. octágonos

3. cuadrilátero

4. hexágono

5. octágonos

6. pentágono

7. hexágono

8. octágonos

9. nonagono

10. octágonos

11. pentágono

12. decágono

13. cuadrilátero

14. hexágono

15. cuadrilátero