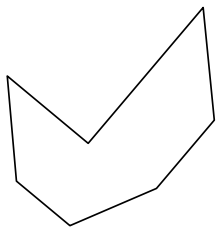





Identificar el tipo de forma mostrado.


1)



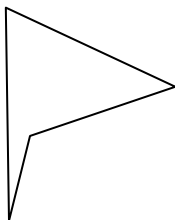
2)



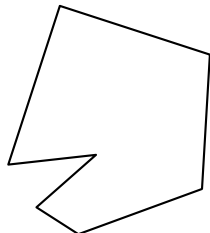
3)



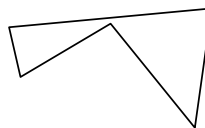
4)



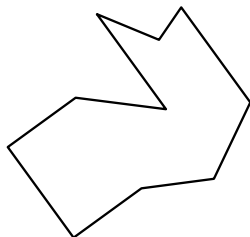
5)



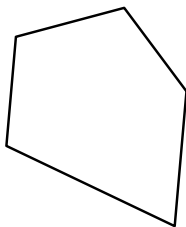
6)



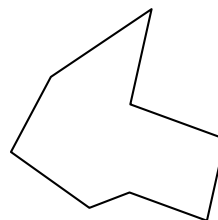
7)



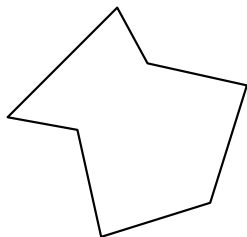
8)



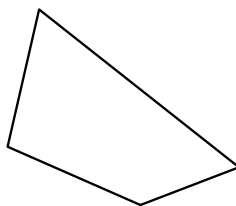
9)



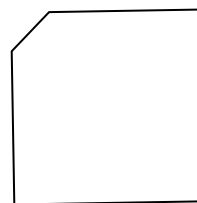
10)



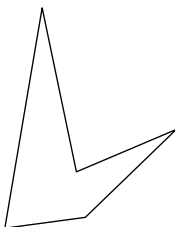
11)



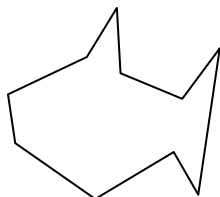
12)



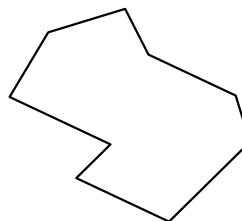
13)



14)



15)



Respuestas

1. _____

2. _____

3. _____

4. _____

5. _____

6. _____

7. _____

8. _____

9. _____

10. _____

11. _____

12. _____

13. _____

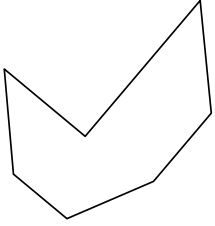
14. _____

15. _____




Identificar el tipo de forma mostrado.

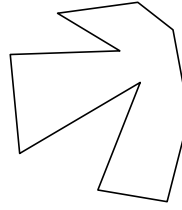
1)



2)



3)



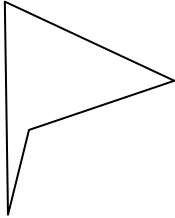
Respuestas

1. heptágono


2. decágono

3. decágono

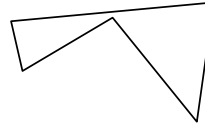
4)



5)



6)

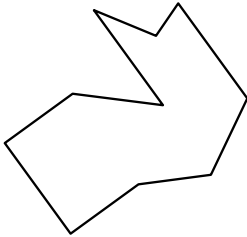


4. cuadrilátero

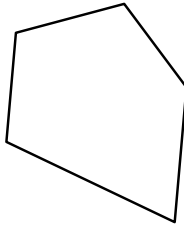
5. heptágono

6. pentágono

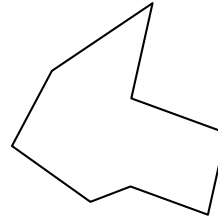
7)



8)



9)

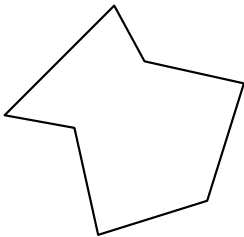


7. decágono

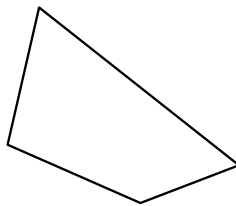
8. pentágono

9. octágonos

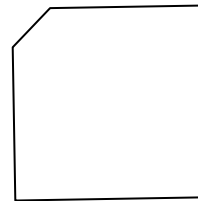
10)



11)



12)



10. heptágono

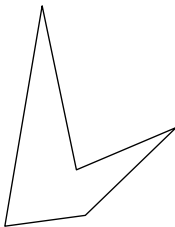
11. cuadrilátero

12. pentágono

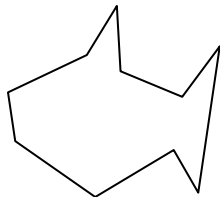
13. pentágono

14. decágono

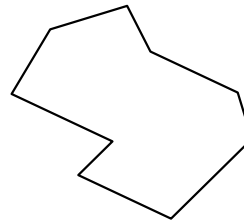
13)



14)



15)



15. nonagono