


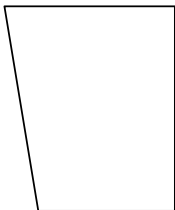


Identificar el tipo de forma mostrado.

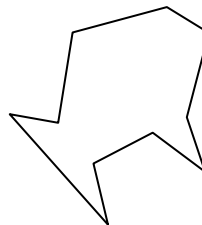
1)



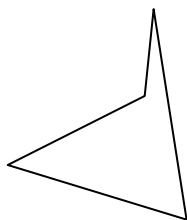
2)



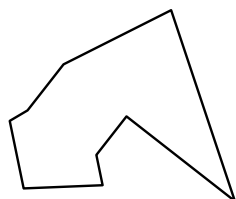
3)




4)



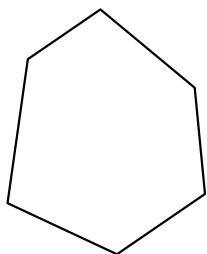
5)



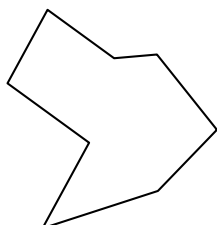
6)



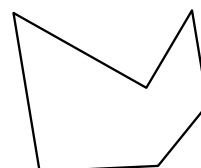
7)



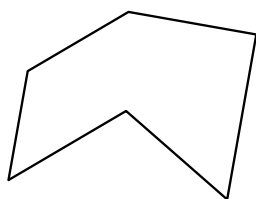
8)



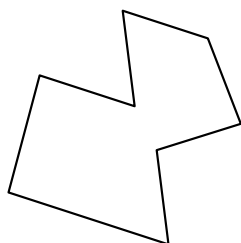
9)




10)



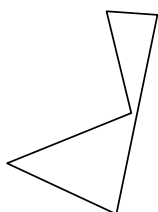
11)



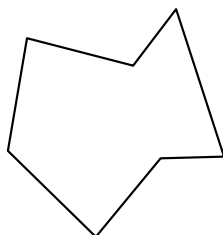
12)



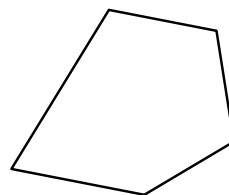
13)



14)



15)



Respuestas

1. _____

2. _____

3. _____

4. _____

5. _____

6. _____

7. _____

8. _____

9. _____

10. _____

11. _____

12. _____

13. _____


14. _____

15. _____

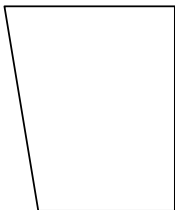


Identificar el tipo de forma mostrado.

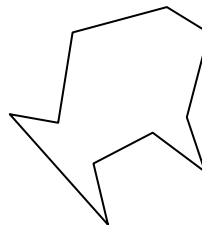
1)



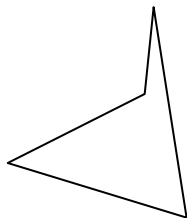
2)



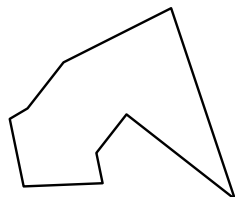
3)




4)



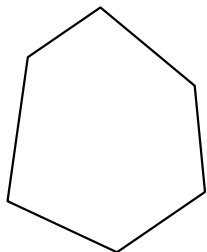
5)



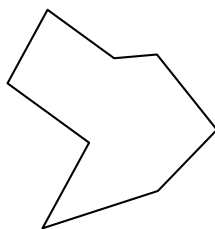
6)



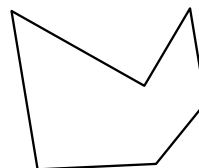
7)



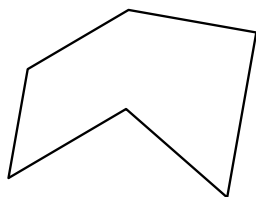
8)



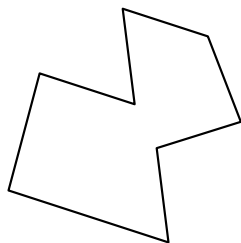
9)




10)



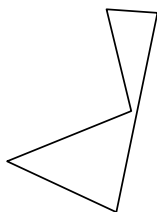
11)



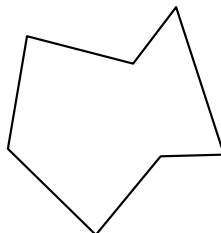
12)



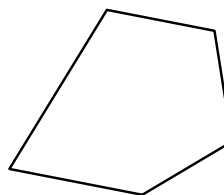
13)



14)



15)



Respuestas

1. decágono
2. cuadrilátero
3. decágono
4. cuadrilátero
5. nonagono
6. decágono
7. hexágono
8. octágonos
9. hexágono
10. hexágono
11. octágonos
12. decágono
13. pentágono
14. heptágono
15. pentágono