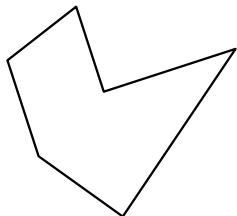


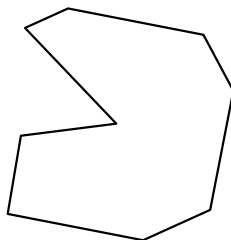


Identificar el tipo de forma mostrado.

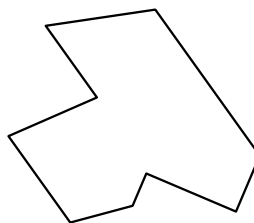
1)



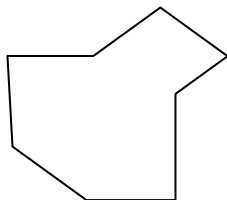
2)



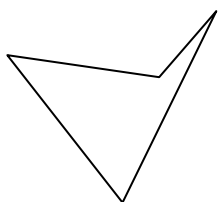
3)



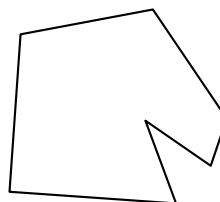
4)



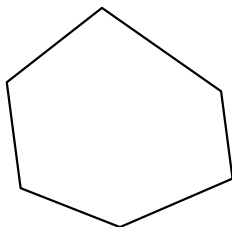
5)



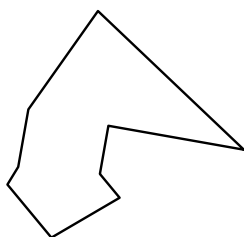
6)



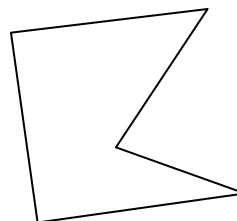
7)



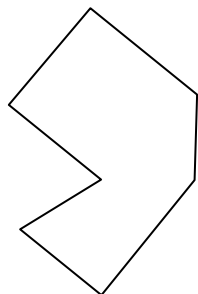
8)



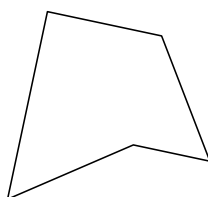
9)



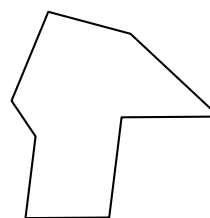
10)



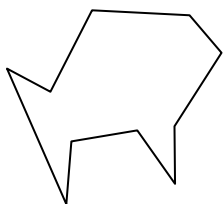
11)



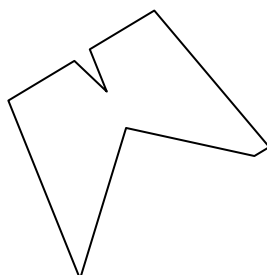
12)



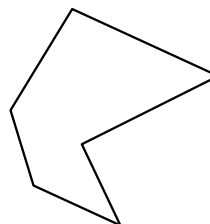
13)



14)



15)



Respuestas

1. _____

2. _____

3. _____

4. _____

5. _____

6. _____

7. _____

8. _____

9. _____

10. _____

11. _____

12. _____

13. _____

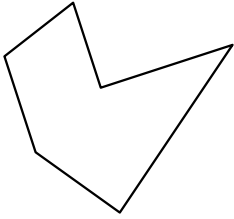
14. _____

15. _____

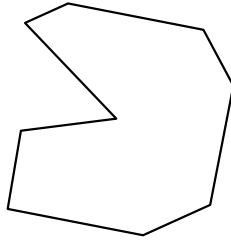


Identificar el tipo de forma mostrado.

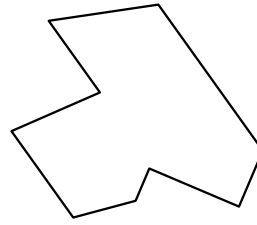
1)



2)



3)



Respuestas

1. hexágono

2. nonagono

3. nonagono

4. octágonos

5. cuadrilátero

6. heptágono

7. hexágono

8. nonagono

9. pentágono

10. heptágono

11. pentágono

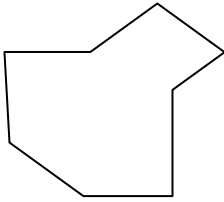
12. octágonos

13. decágono

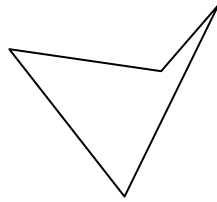
14. nonagono

15. hexágono

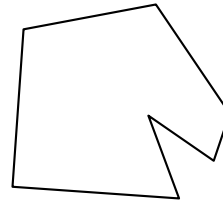
4)



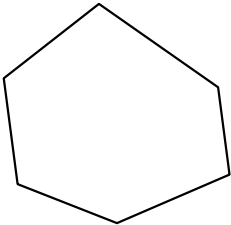
5)



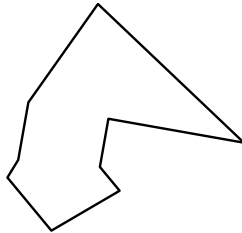
6)



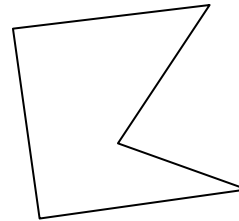
7)



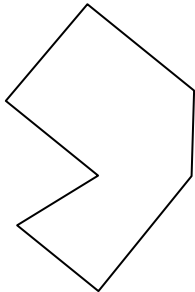
8)



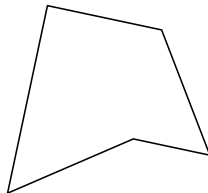
9)



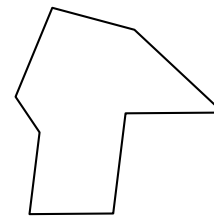
10)



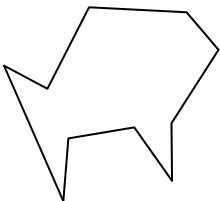
11)



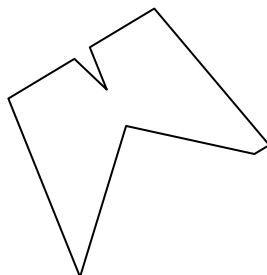
12)



13)



14)



15)

