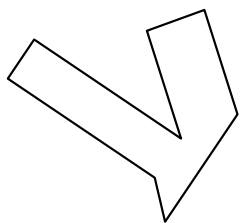





Identificar el tipo de forma mostrado.

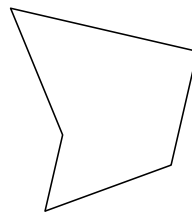
1)



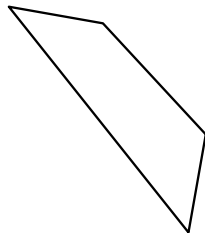
2)



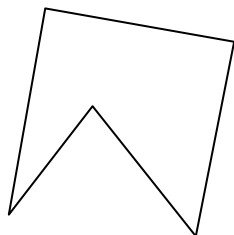
3)




4)



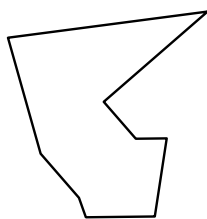
5)



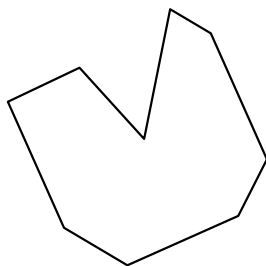
6)



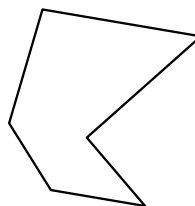
7)



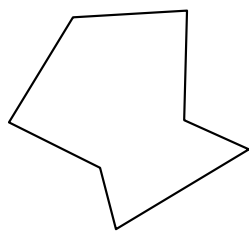
8)




9)



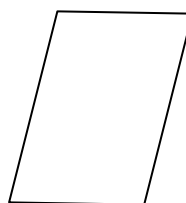
10)



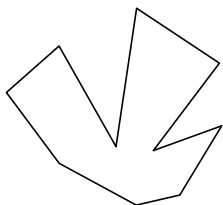
11)



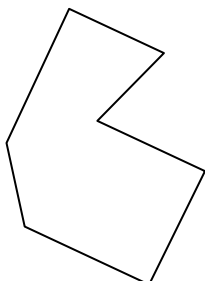
12)



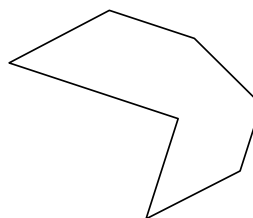
13)



14)



15)



Respuestas

1. _____

2. _____

3. _____

4. _____

5. _____

6. _____

7. _____

8. _____

9. _____

10. _____

11. _____

12. _____

13. _____

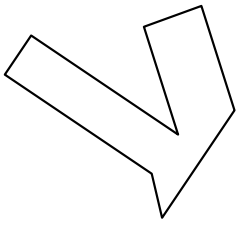
14. _____

15. _____




Identificar el tipo de forma mostrado.

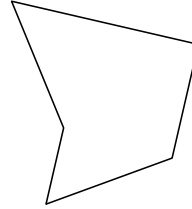
1)



2)



3)



Respuestas

1. octágonos

2. heptágono

3. pentágono

4. cuadrilátero

5. pentágono

6. cuadrilátero

7. nonagono

8. nonagono

9. hexágono

10. heptágono

11. nonagono

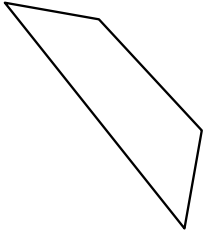
12. cuadrilátero

13. decágono

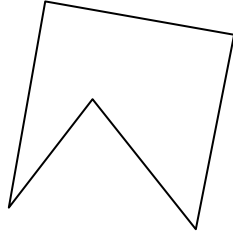
14. heptágono

15. heptágono


4)



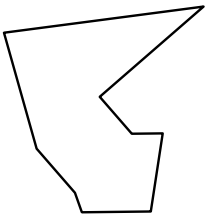
5)



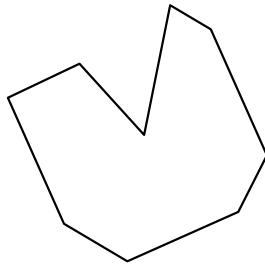
6)



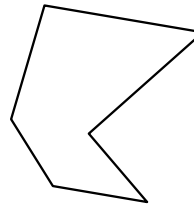
7)



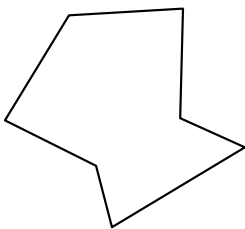
8)



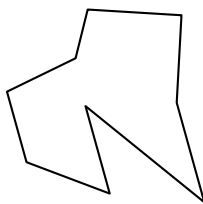
9)



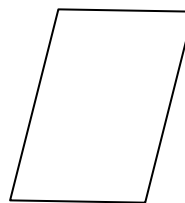
10)



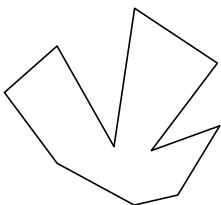
11)



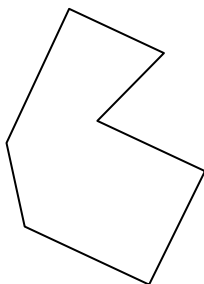
12)



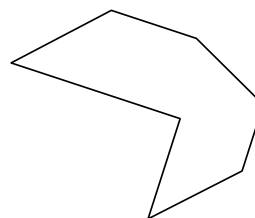
13)



14)




15)






Identificar el tipo de forma mostrado.

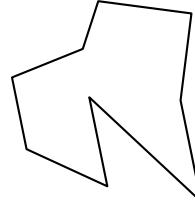
1)



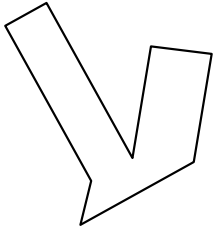
2)



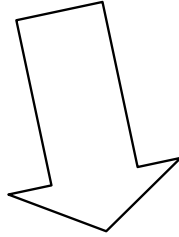
3)



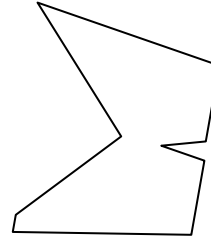
4)



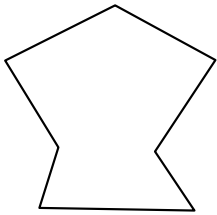
5)



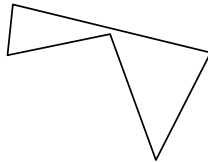
6)



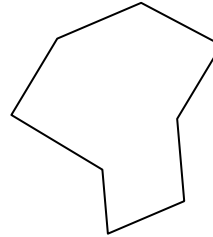
7)



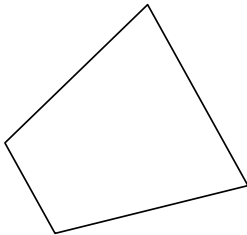
8)



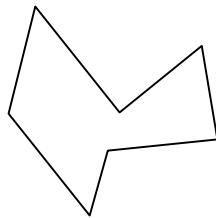
9)



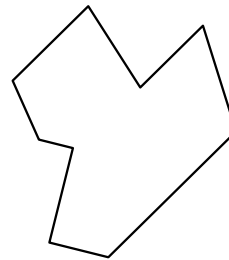
10)



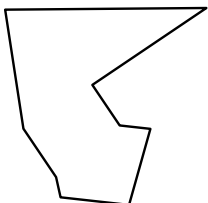
11)



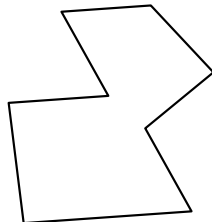
12)




13)



14)



15)



Respuestas

1. _____

2. _____

3. _____

4. _____

5. _____

6. _____

7. _____

8. _____

9. _____

10. _____

11. _____

12. _____

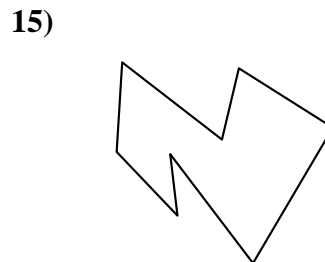
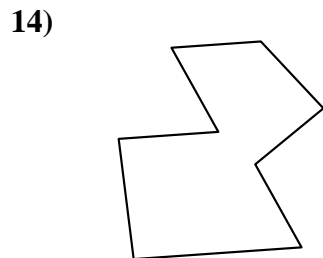
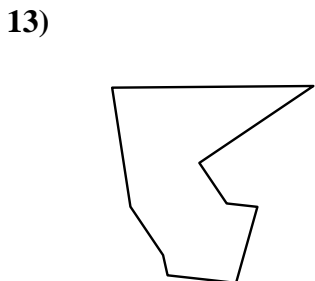
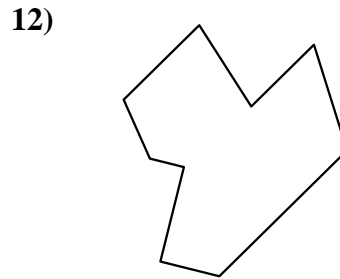
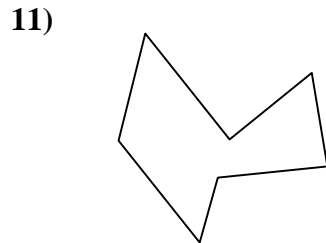
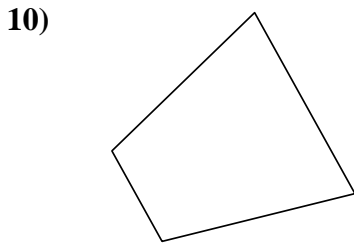
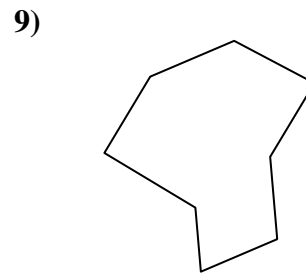
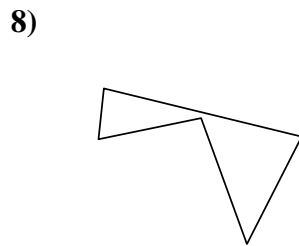
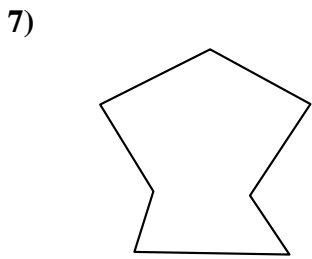
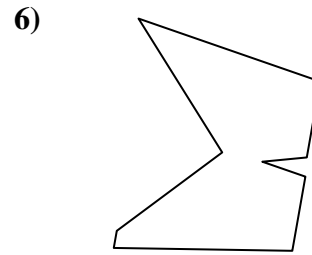
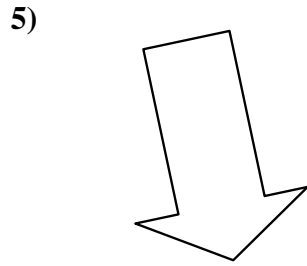
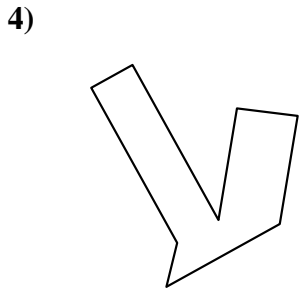
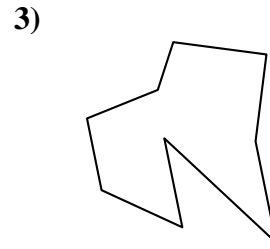
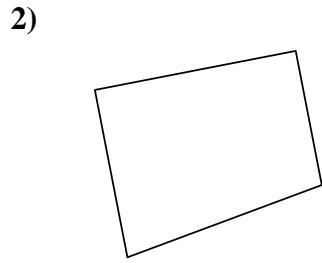
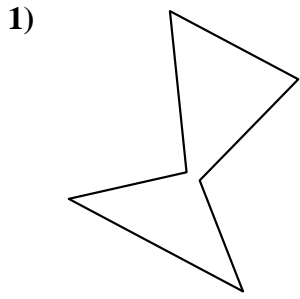
13. _____

14. _____

15. _____



Identificar el tipo de forma mostrado.



Respuestas

1. hexágono

2. cuadrilátero

3. nonagono

4. octágonos

5. heptágono

6. nonagono

7. heptágono

8. pentágono

9. octágonos

10. cuadrilátero

11. heptágono

12. nonagono

13. nonagono

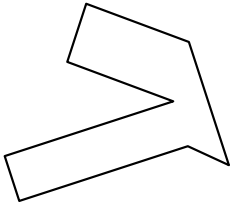
14. octágonos

15. octágonos




Identificar el tipo de forma mostrado.

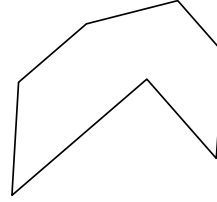
1)



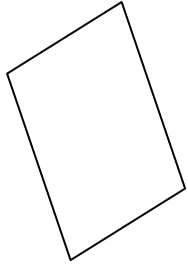
2)



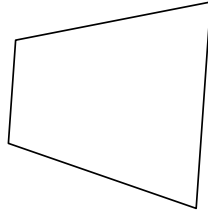
3)



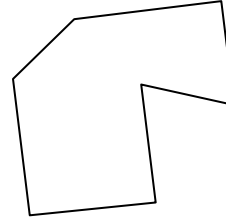
4)



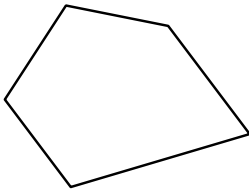
5)



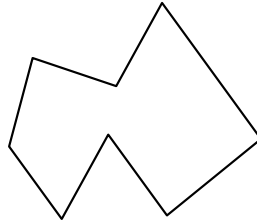
6)



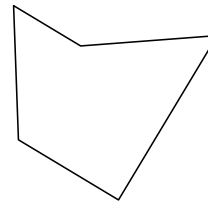
7)




8)



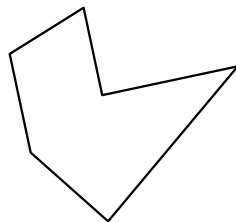
9)



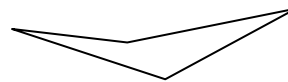
10)



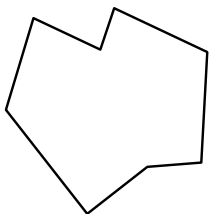
11)



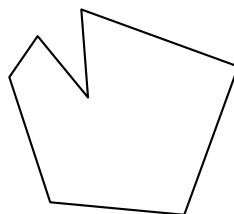
12)



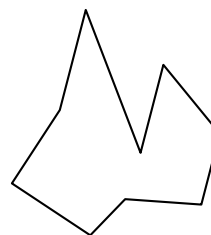
13)



14)



15)



Respuestas

1. _____

2. _____

3. _____

4. _____

5. _____

6. _____

7. _____

8. _____

9. _____

10. _____

11. _____

12. _____

13. _____

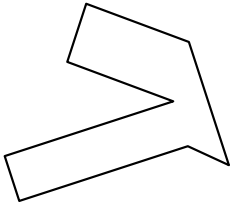
14. _____

15. _____




Identificar el tipo de forma mostrado.

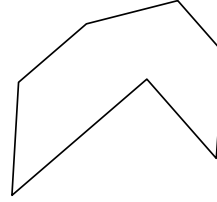
1)



2)



3)



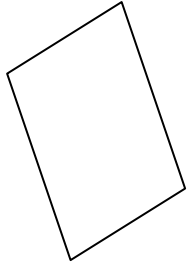
Respuestas

1. octágonos

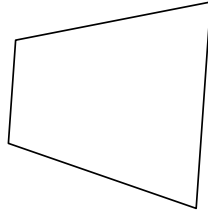
2. decágono

3. heptágono

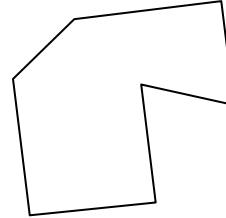
4)



5)



6)

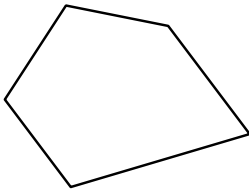


4. cuadrilátero

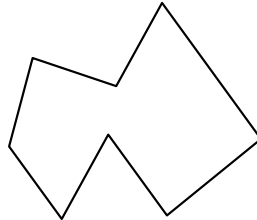
5. cuadrilátero

6. heptágono

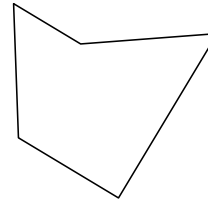
7)



8)



9)




7. pentágono

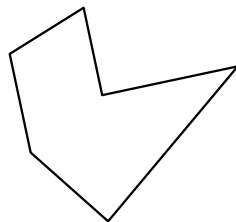
8. octágonos

9. pentágono

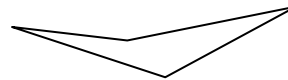
10)



11)



12)



10. cuadrilátero

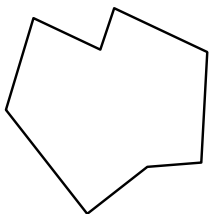
11. hexágono

12. cuadrilátero

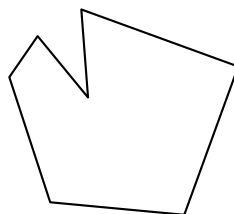
13. octágonos

14. heptágono

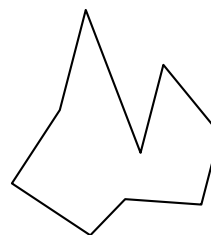
13)



14)



15)

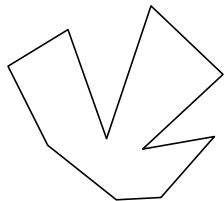


15. nonagono




Identificar el tipo de forma mostrado.

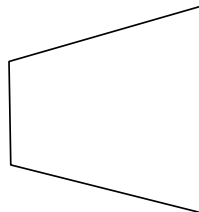
1)




2)




3)



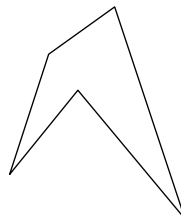
4)



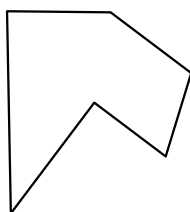
5)



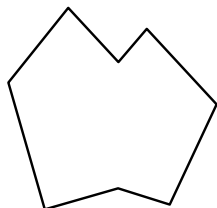
6)



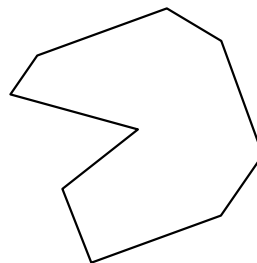
7)



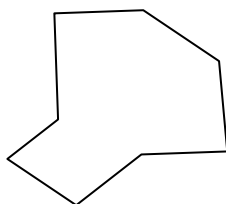
8)



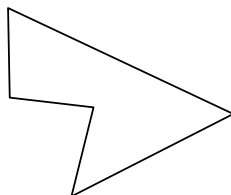
9)




10)



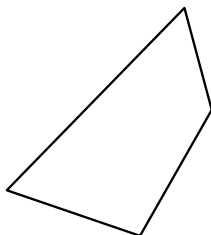
11)



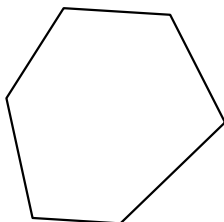
12)




13)



14)



15)



Respuestas

1. _____

2. _____

3. _____

4. _____

5. _____

6. _____

7. _____

8. _____

9. _____

10. _____

11. _____

12. _____

13. _____

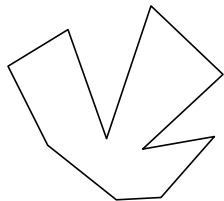
14. _____

15. _____




Identificar el tipo de forma mostrado.

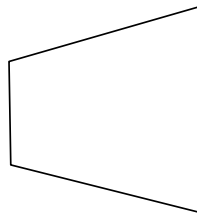
1)




2)




3)



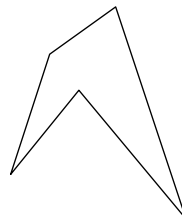
4)



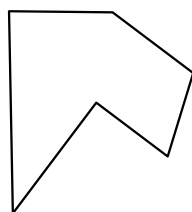
5)



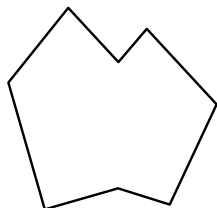
6)



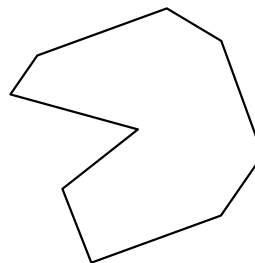
7)



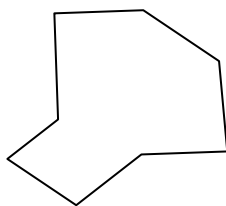
8)



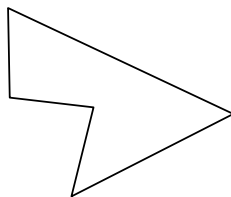
9)




10)



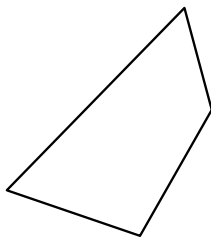
11)



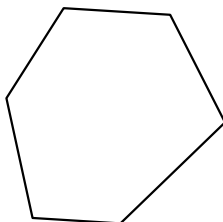
12)




13)



14)



15)



Respuestas

1. decágono

2. octágonos

3. cuadrilátero

4. hexágono

5. octágonos

6. pentágono

7. hexágono

8. octágonos

9. nonagono

10. octágonos

11. pentágono

12. decágono

13. cuadrilátero

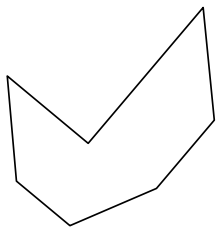
14. hexágono

15. cuadrilátero




Identificar el tipo de forma mostrado.


1)



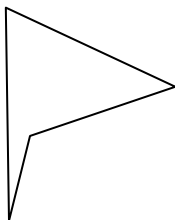
2)




3)



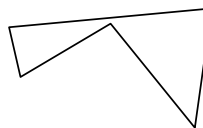
4)



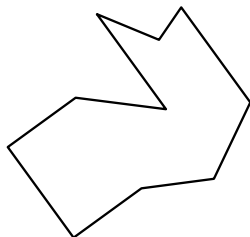
5)



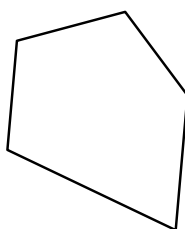
6)



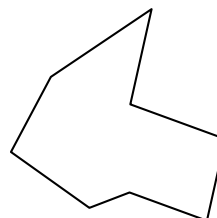
7)



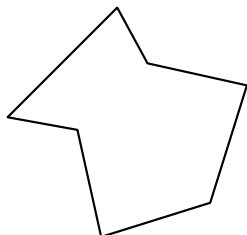
8)



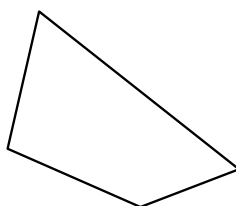
9)



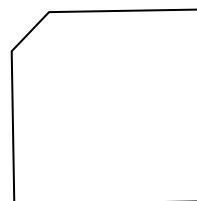
10)



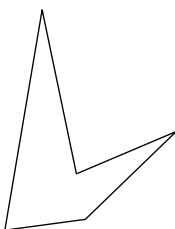
11)



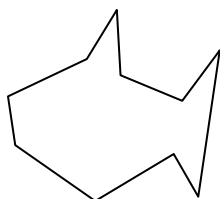
12)



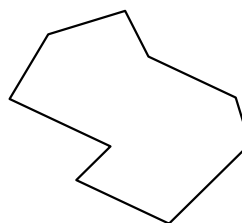
13)



14)



15)



Respuestas

1. _____

2. _____

3. _____

4. _____

5. _____

6. _____

7. _____

8. _____

9. _____

10. _____

11. _____

12. _____

13. _____

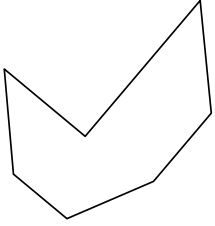
14. _____

15. _____




Identificar el tipo de forma mostrado.

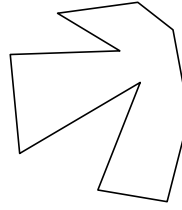
1)



2)



3)



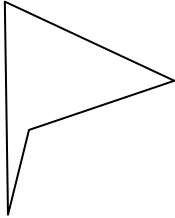
Respuestas

1. heptágono


2. decágono

3. decágono

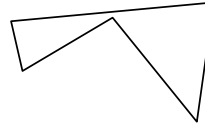
4)



5)



6)

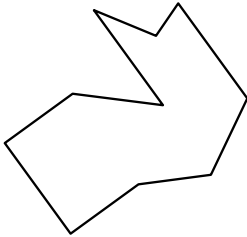


4. cuadrilátero

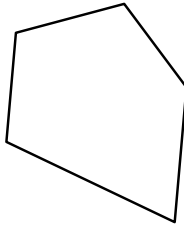
5. heptágono

6. pentágono

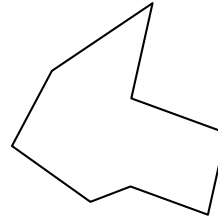
7)



8)



9)

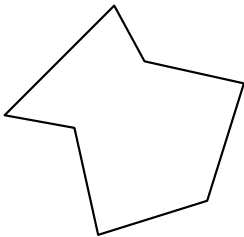


7. decágono

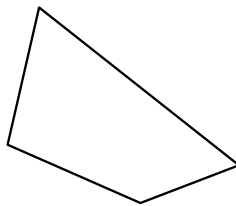
8. pentágono

9. octágonos

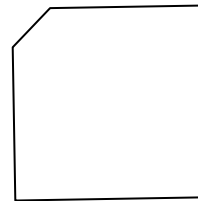
10)



11)



12)



10. heptágono

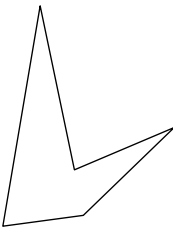
11. cuadrilátero

12. pentágono

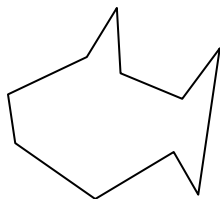
13. pentágono

14. decágono

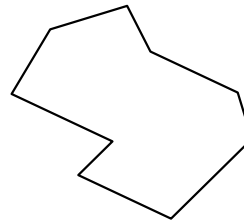
13)



14)



15)




15. nonagono

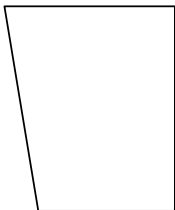


Identificar el tipo de forma mostrado.

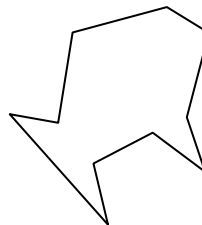
1)



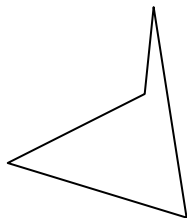
2)



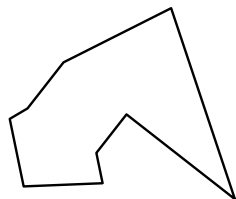
3)




4)



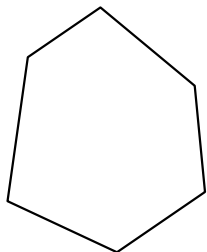
5)



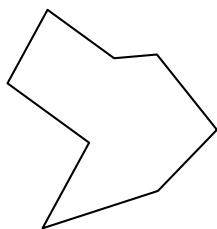
6)



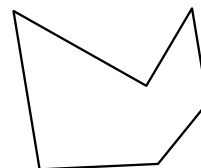
7)



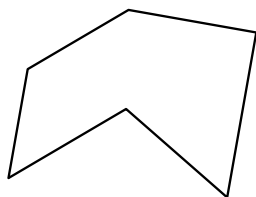
8)



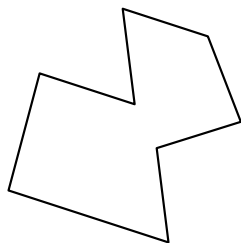
9)




10)



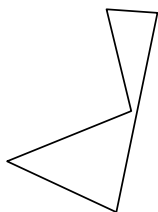
11)



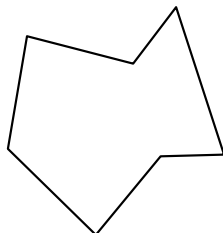
12)



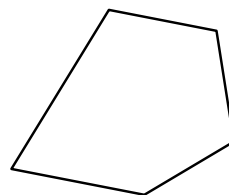
13)



14)



15)



Respuestas

1. _____

2. _____

3. _____

4. _____

5. _____

6. _____

7. _____

8. _____

9. _____

10. _____

11. _____

12. _____

13. _____


14. _____

15. _____

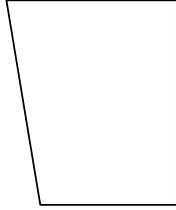


Identificar el tipo de forma mostrado.

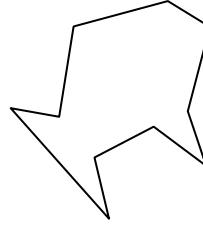
1)



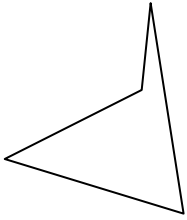
2)



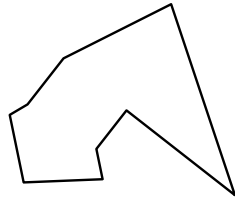
3)




4)



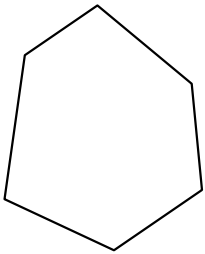
5)



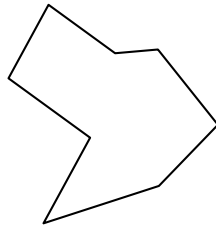
6)



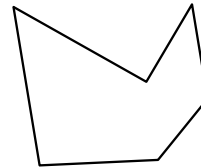
7)



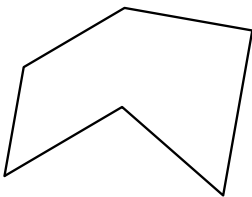
8)




9)




10)



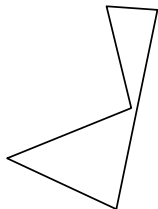
11)



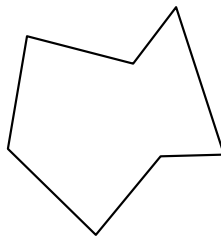
12)



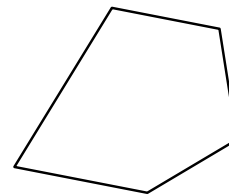
13)



14)



15)



Respuestas

1. decágono

2. cuadrilátero

3. decágono

4. cuadrilátero

5. nonagono

6. decágono

7. hexágono

8. octágonos

9. hexágono

10. hexágono

11. octágonos

12. decágono

13. pentágono

14. heptágono

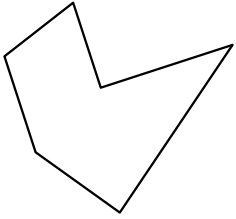
15. pentágono



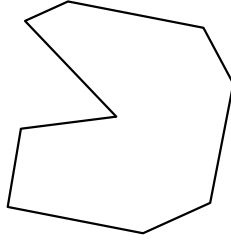
Identificar el tipo de forma mostrado.

Respuestas

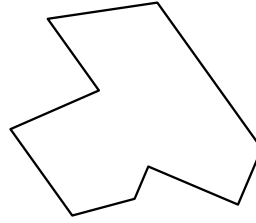
1)



2)

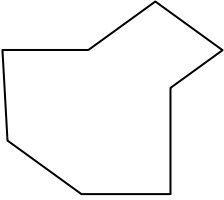


3)

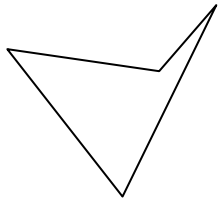


1. _____

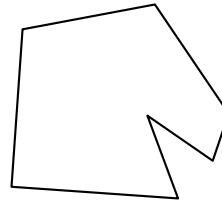
4)



5)

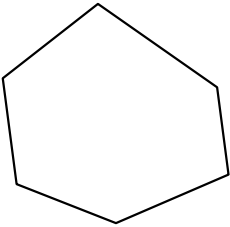


6)

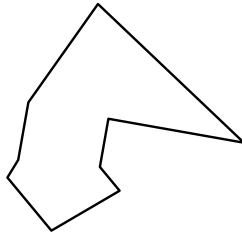


2. _____

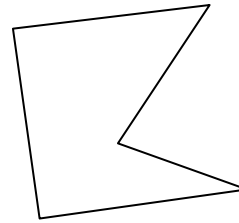
7)



8)

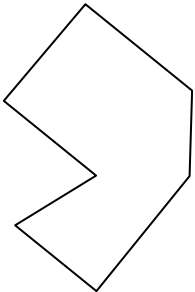


9)

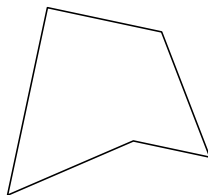


3. _____

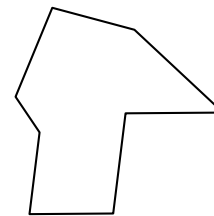
10)



11)

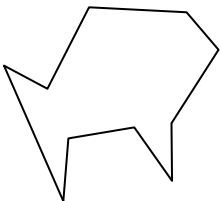


12)

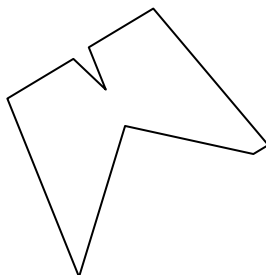


4. _____

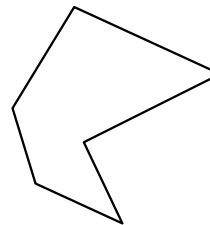
13)



14)



15)



5. _____

6. _____

7. _____

8. _____

9. _____

10. _____

11. _____

12. _____

13. _____

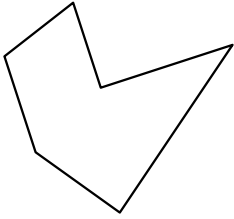
14. _____

15. _____

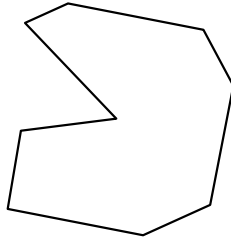


Identificar el tipo de forma mostrado.

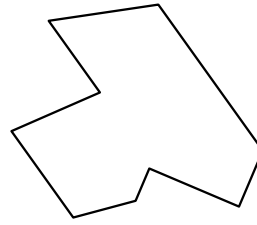
1)



2)



3)



Respuestas

1. hexágono

2. nonagono

3. nonagono

4. octágonos

5. cuadrilátero

6. heptágono

7. hexágono

8. nonagono

9. pentágono

10. heptágono

11. pentágono

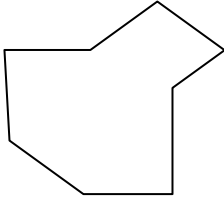
12. octágonos

13. decágono

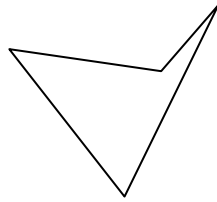
14. nonagono

15. hexágono

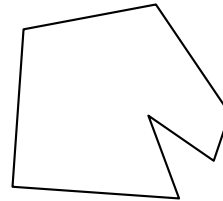
4)



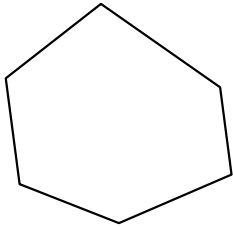
5)



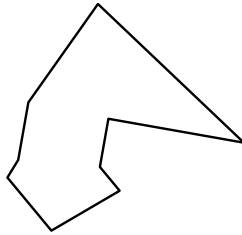
6)



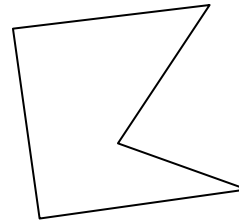
7)



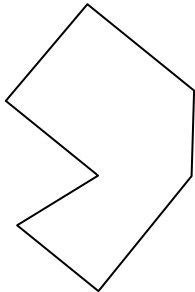
8)



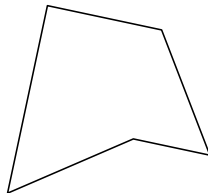
9)



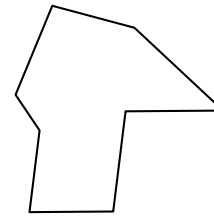
10)



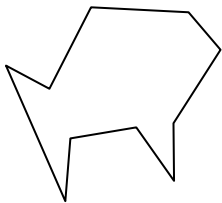
11)



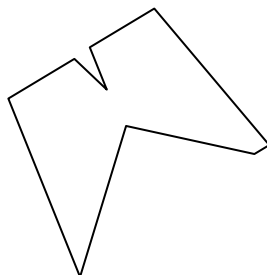
12)



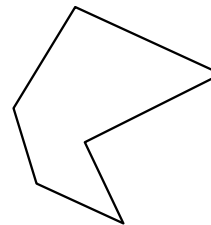
13)



14)

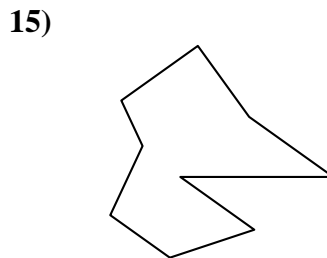
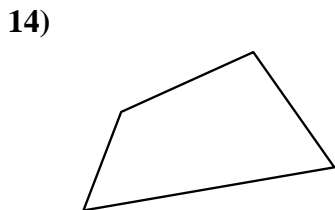
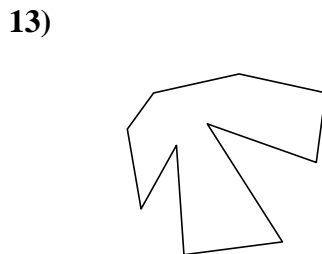
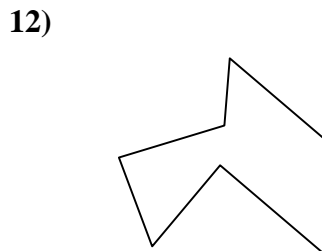
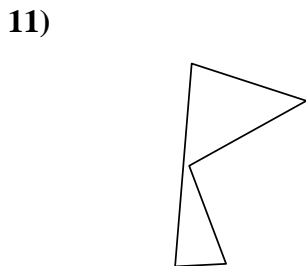
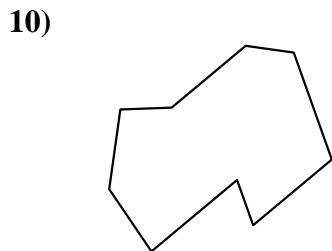
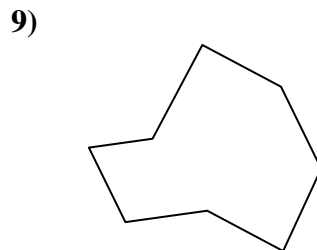
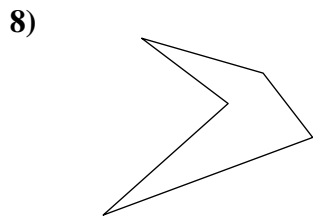
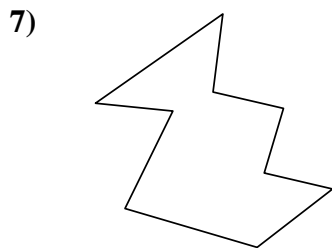
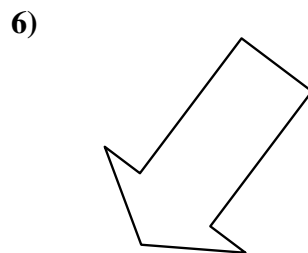
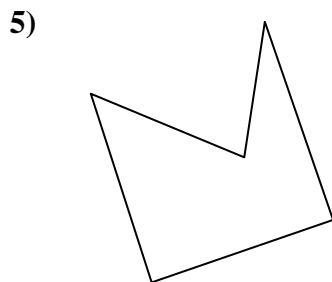
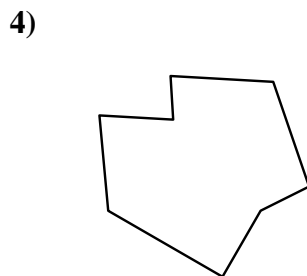
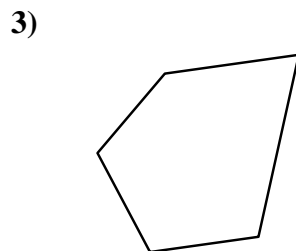
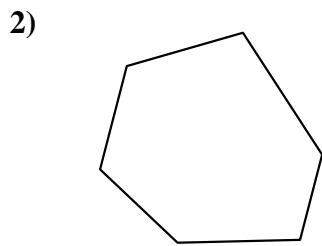
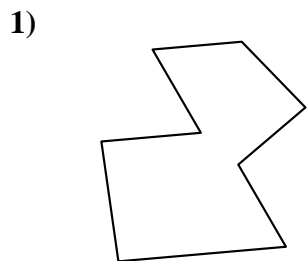


15)





Identificar el tipo de forma mostrado.



Respuestas

1. _____

2. _____

3. _____

4. _____

5. _____

6. _____

7. _____

8. _____

9. _____

10. _____

11. _____

12. _____

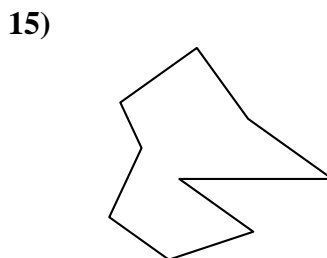
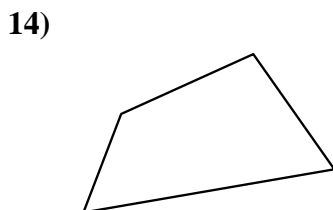
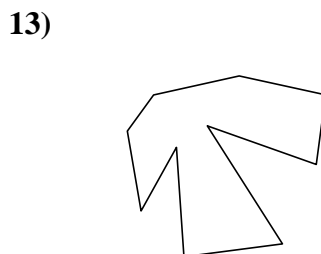
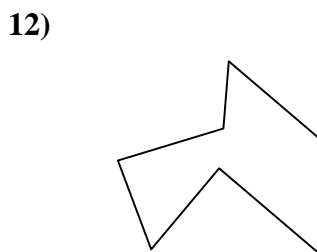
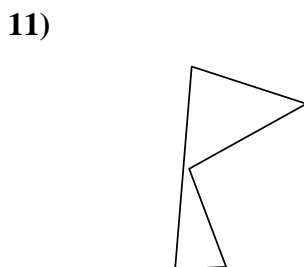
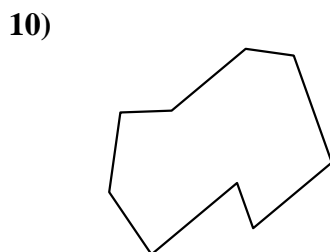
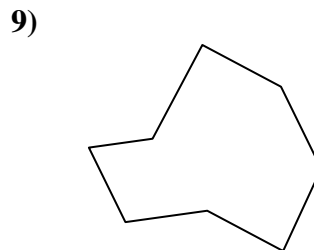


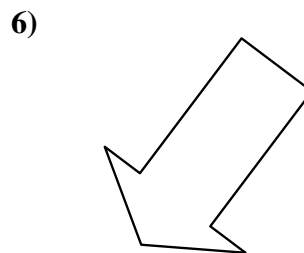
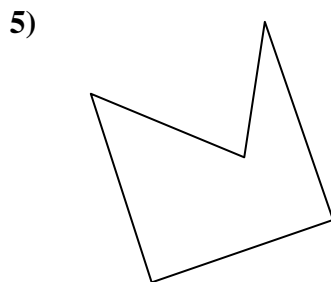
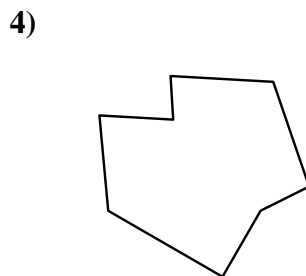
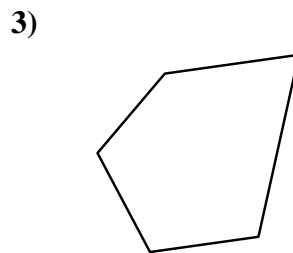
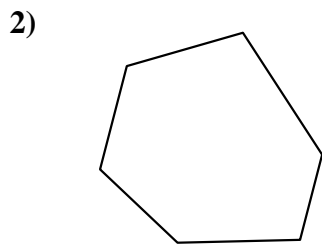
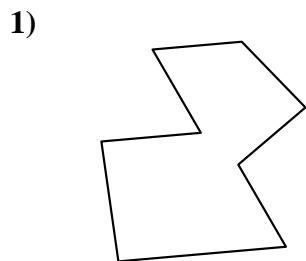
13. _____

14. _____

15. _____



Identificar el tipo de forma mostrado.



Respuestas

1. octágonos

2. hexágono

3. pentágono

4. octágonos

5. pentágono

6. heptágono

7. decágono

8. pentágono

9. octágonos

10. nonagono

11. pentágono

12. heptágono

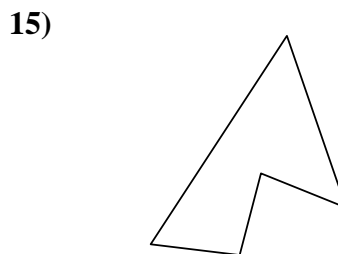
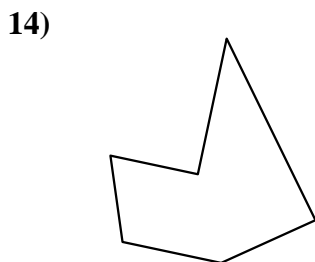
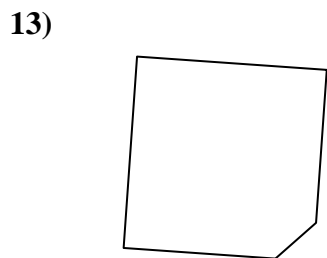
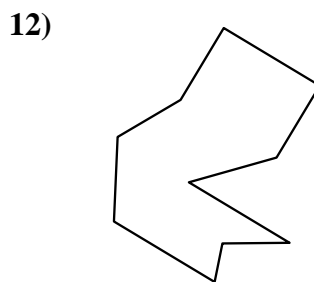
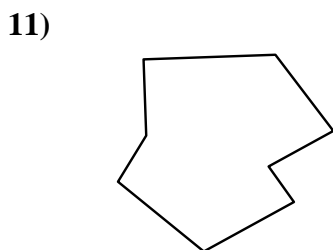
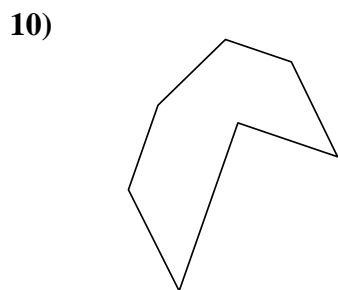
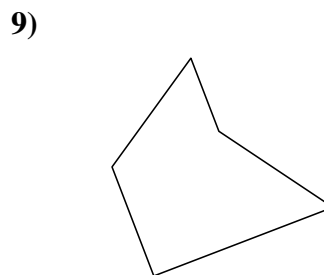
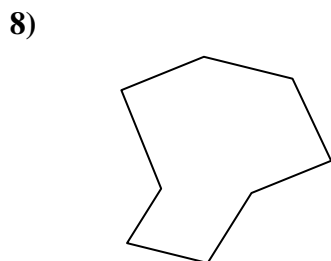
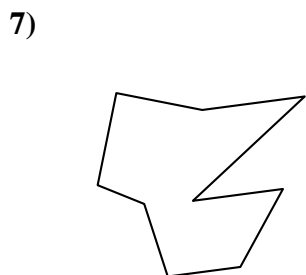
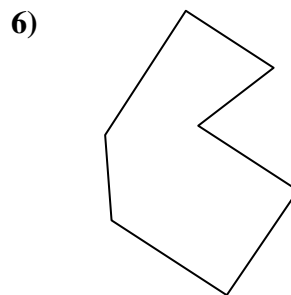


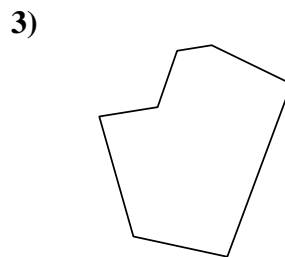
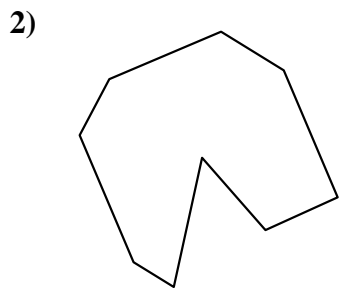
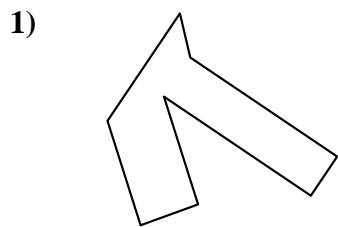
13. decágono

14. cuadrilátero

15. nonagono



Identificar el tipo de forma mostrado.



Respuestas

1. _____

2. _____

3. _____

4. _____

5. _____

6. _____

7. _____

8. _____

9. _____

10. _____

11. _____

12. _____

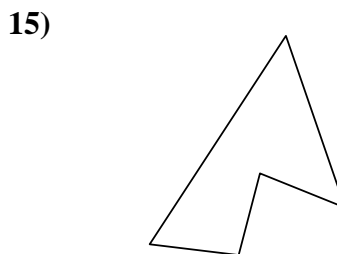
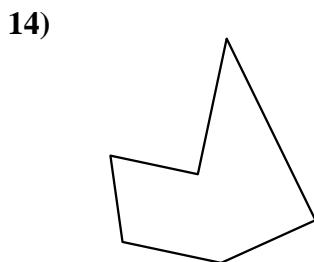
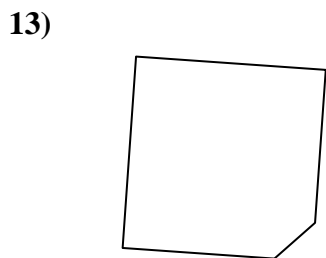
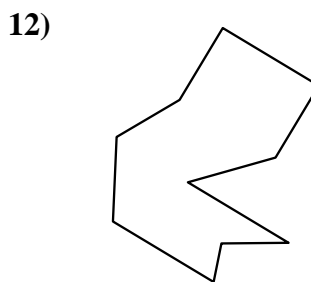
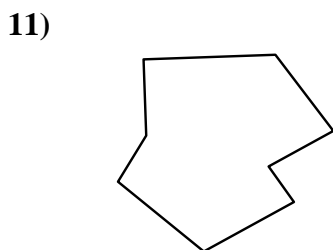
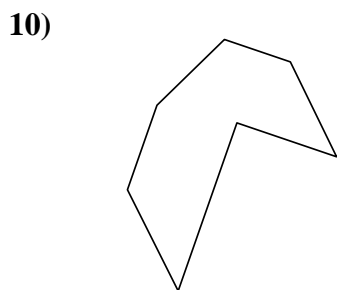
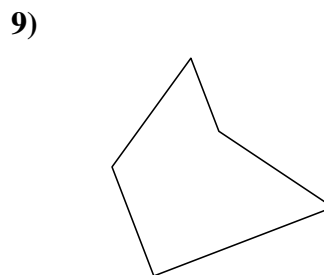
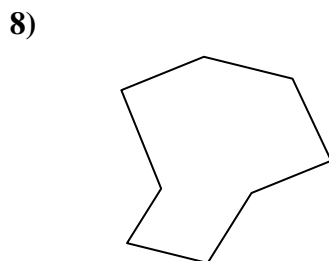
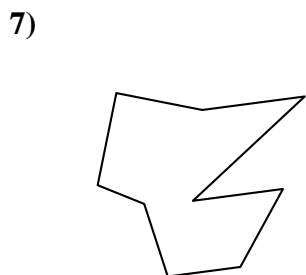
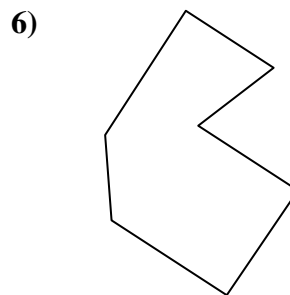


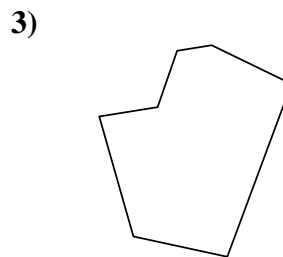
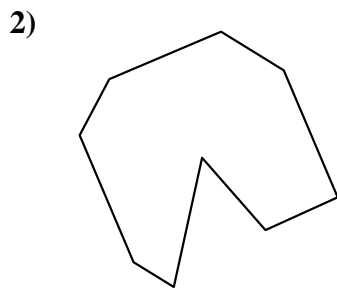
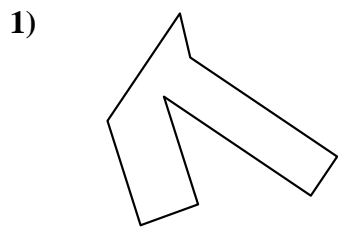
13. _____

14. _____

15. _____



Identificar el tipo de forma mostrado.



Respuestas

1. octágonos

2. nonagono

3. heptágono

4. decágono

5. cuadrilátero

6. heptágono

7. nonagono

8. octágonos

9. pentágono

10. heptágono

11. octágonos

12. decágono

13. pentágono

14. hexágono

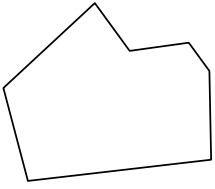
15. pentágono



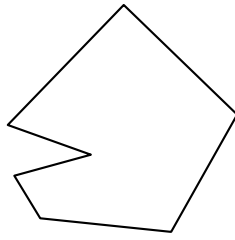
Identificar el tipo de forma mostrado.

Respuestas

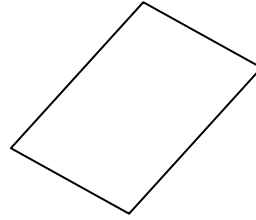
1)



2)

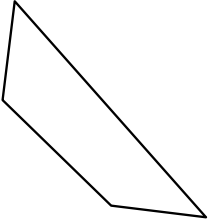


3)

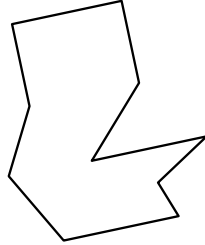


1. _____

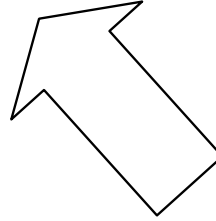
4)



5)



6)



2. _____

3. _____

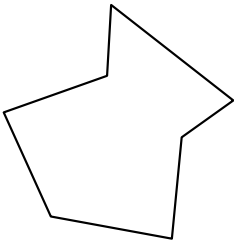
4. _____

5. _____

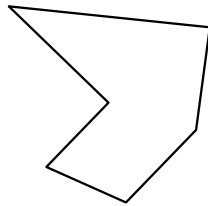
6. _____

7. _____


7)



8)



9)



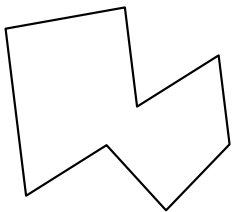
8. _____

9. _____

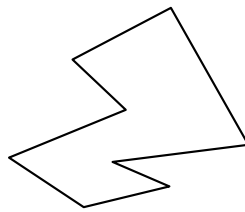
10. _____

11. _____

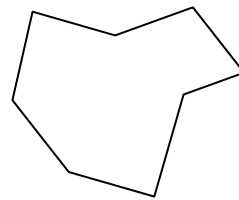
10)



11)



12)



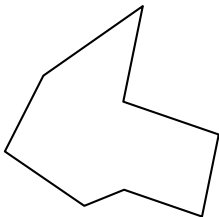
12. _____

13. _____

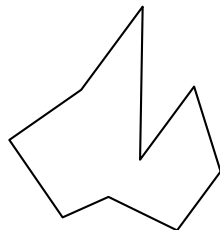
14. _____

15. _____

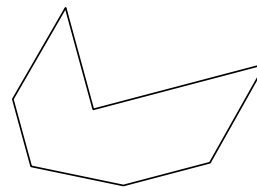
13)



14)



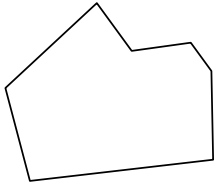
15)



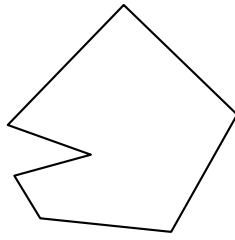


Identificar el tipo de forma mostrado.

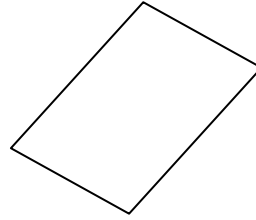
1)



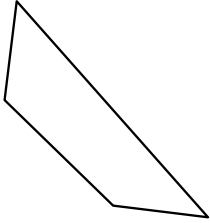
2)




3)



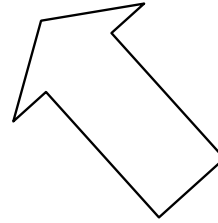
4)



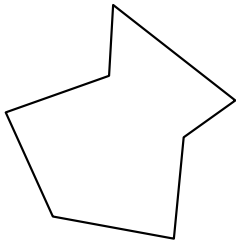
5)



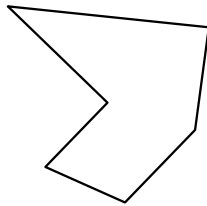
6)




7)



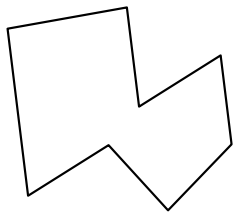
8)



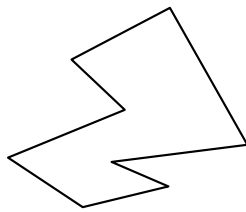
9)



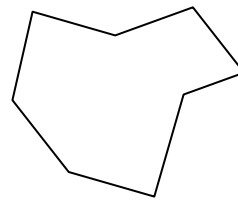
10)



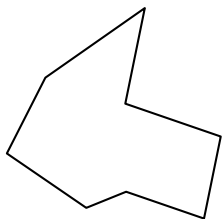
11)



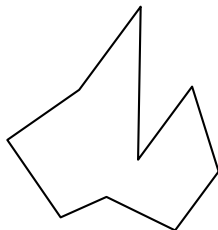
12)



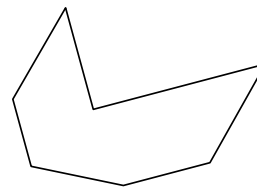
13)



14)



15)



Respuestas

1. heptágono

2. heptágono

3. cuadrilátero

4. cuadrilátero

5. decágono

6. heptágono

7. heptágono

8. hexágono

9. decágono

10. octágonos

11. octágonos

12. octágonos

13. octágonos

14. nonagono

15. heptágono