




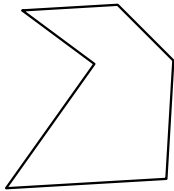
Identificar el tipo de forma mostrado.

Respuestas

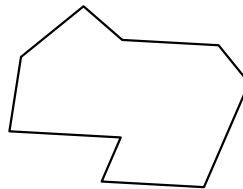
1)



2)



3)



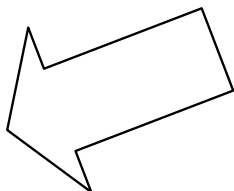
1. \_\_\_\_\_

2. \_\_\_\_\_

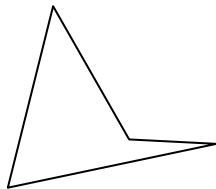
3. \_\_\_\_\_

4. \_\_\_\_\_

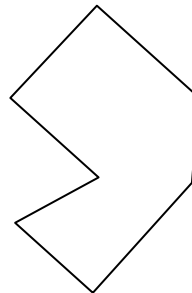
4)



5)



6)



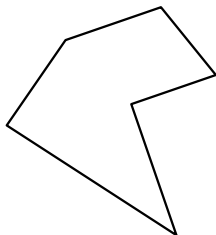
5. \_\_\_\_\_

6. \_\_\_\_\_


7. \_\_\_\_\_

8. \_\_\_\_\_

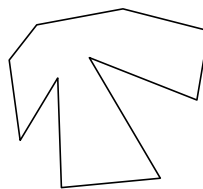
7)



8)



9)



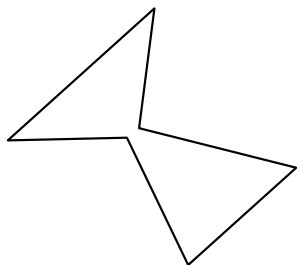
9. \_\_\_\_\_

10. \_\_\_\_\_

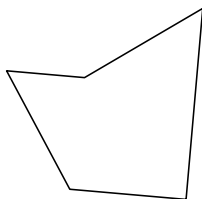
11. \_\_\_\_\_

12. \_\_\_\_\_

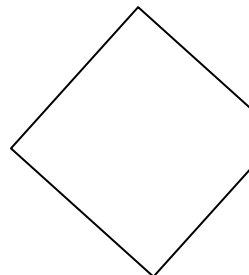
10)



11)



12)

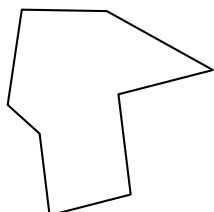


13. \_\_\_\_\_

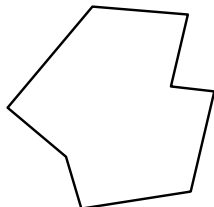
14. \_\_\_\_\_

15. \_\_\_\_\_


13)



14)




15)



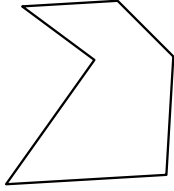


Identificar el tipo de forma mostrado.

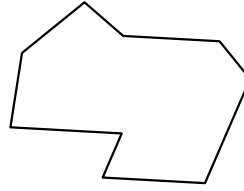
1)



2)



3)



**Respuestas**

1. decágono

2. hexágono

3. nonagono

4. heptágono

5. cuadrilátero

6. heptágono

7. hexágono

8. octágonos

9. decágono

10. hexágono

11. pentágono

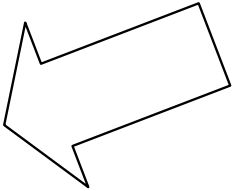
12. pentágono

13. octágonos

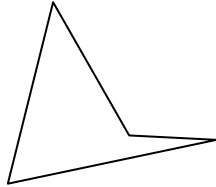
14. octágonos

15. nonagono

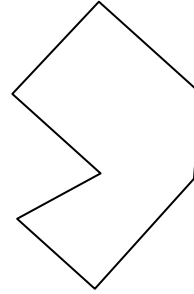
4)



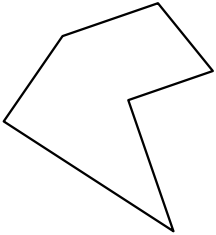
5)




6)



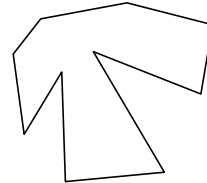
7)



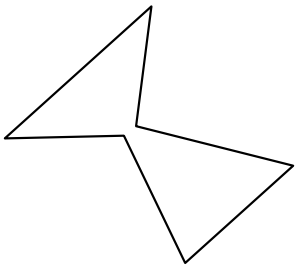
8)



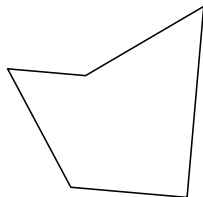
9)



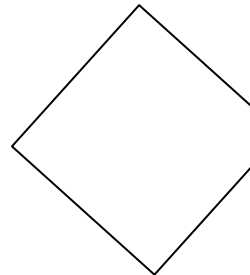
10)



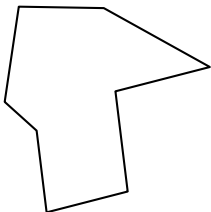
11)



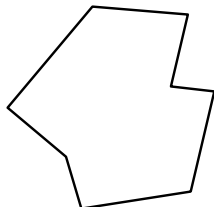
12)



13)



14)



15)

