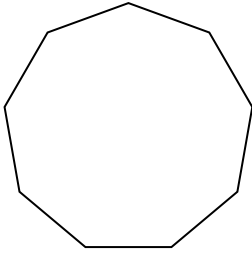


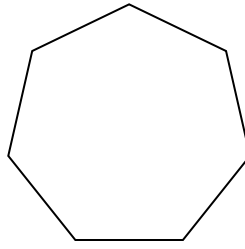


Identificar el tipo de forma mostrada.

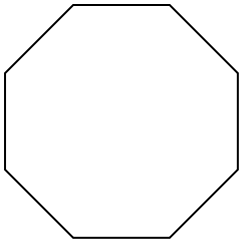
1)



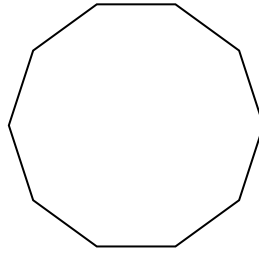
2)



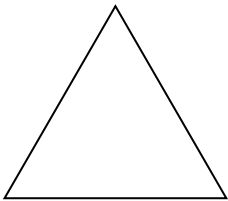
3)



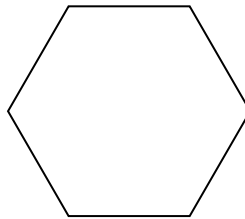
4)



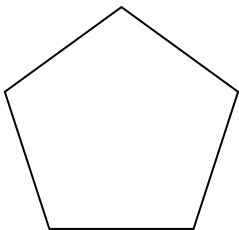
5)




6)



7)



8)



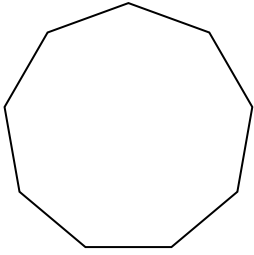
Respuestas

- 1. _____
- 2. _____
- 3. _____
- 4. _____
- 5. _____
- 6. _____
- 7. _____
- 8. _____

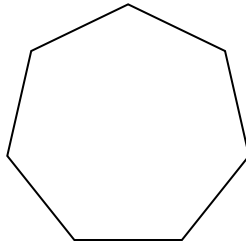


Identificar el tipo de forma mostrada.

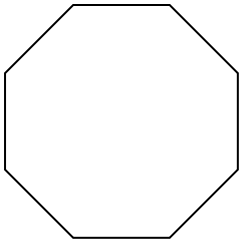
1)



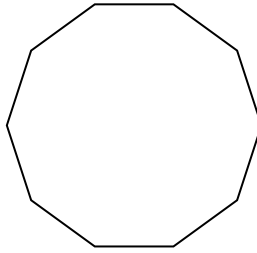
2)



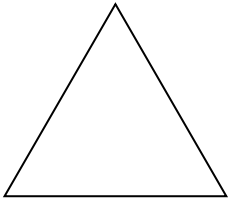
3)



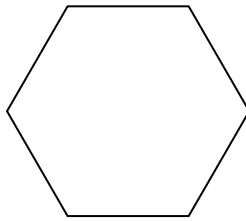
4)



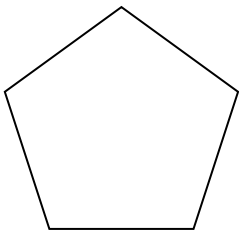
5)




6)



7)



8)



Respuestas

1. nonagono

2. heptágono

3. octágonos

4. decágono

5. triangle

6. hexágono

7. pentágono

8. cuadrilátero