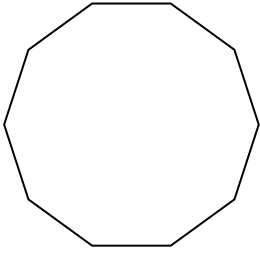


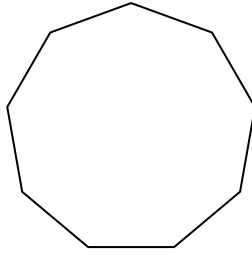


Identificar el tipo de forma mostrada.

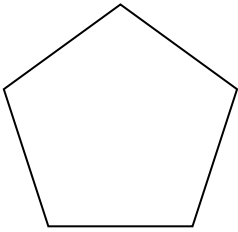
1)



2)



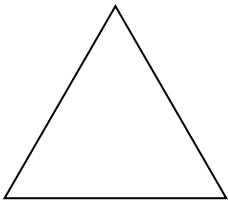
3)



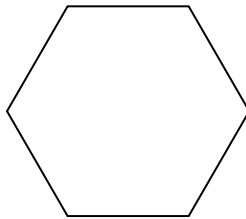
4)



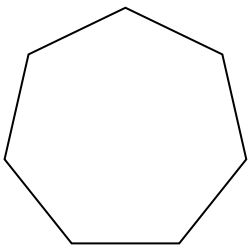
5)



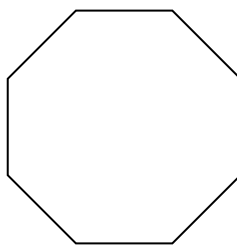
6)



7)



8)



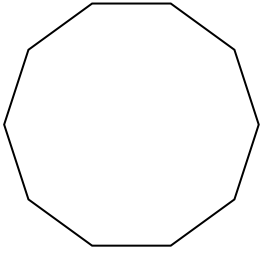
**Respuestas**

- 1. \_\_\_\_\_
- 2. \_\_\_\_\_
- 3. \_\_\_\_\_
- 4. \_\_\_\_\_
- 5. \_\_\_\_\_
- 6. \_\_\_\_\_
- 7. \_\_\_\_\_
- 8. \_\_\_\_\_

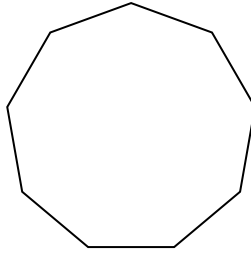


Identificar el tipo de forma mostrada.

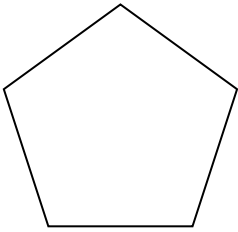
1)




2)



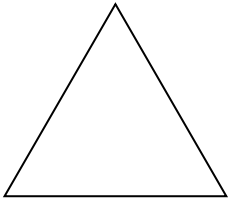
3)



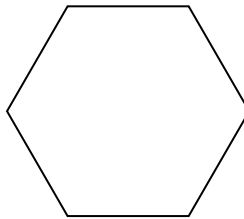
4)



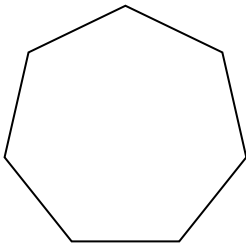
5)



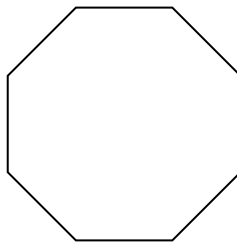
6)



7)



8)



Respuestas

1. decágono
2. nonagono
3. pentágono
4. cuadrilátero
5. triangle
6. hexágono
7. heptágono
8. octágonos