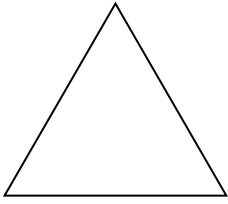


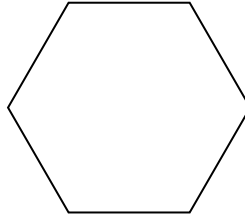


Identificar el tipo de forma mostrada.


1)



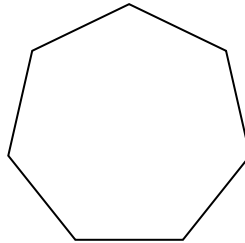
2)



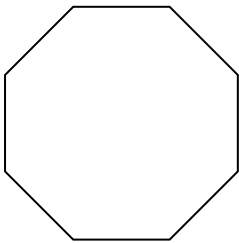
3)



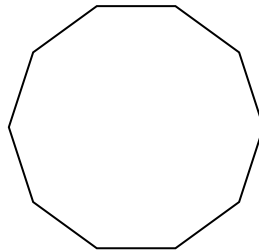
4)



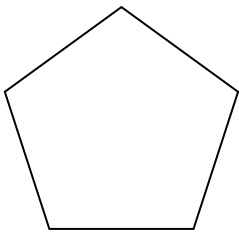
5)



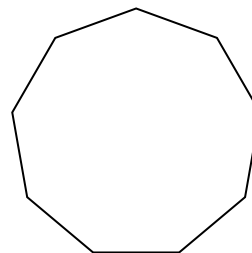
6)



7)



8)



**Respuestas**

1. \_\_\_\_\_

2. \_\_\_\_\_

3. \_\_\_\_\_

4. \_\_\_\_\_

5. \_\_\_\_\_

6. \_\_\_\_\_

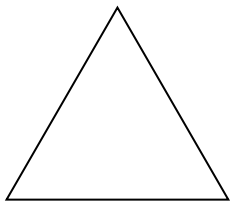
7. \_\_\_\_\_

8. \_\_\_\_\_

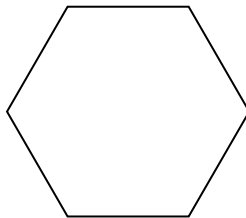


Identificar el tipo de forma mostrada.


1)



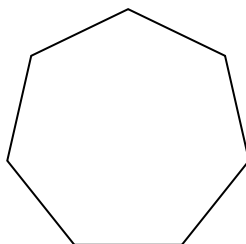
2)



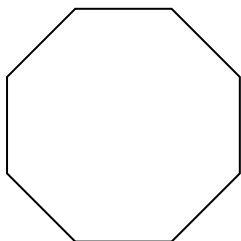
3)



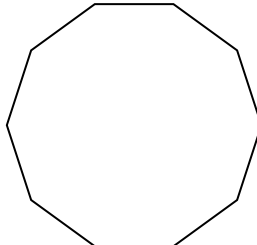
4)



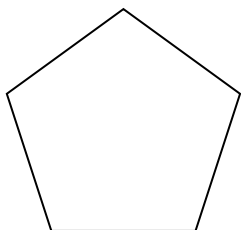
5)



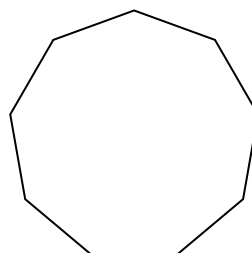
6)



7)



8)




Respuestas

- 1. triangle
- 2. hexágono
- 3. cuadrilátero
- 4. heptágono
- 5. octágonos
- 6. decágono
- 7. pentágono
- 8. nonagono

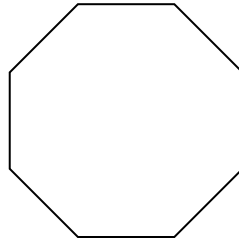


Identificar el tipo de forma mostrada.

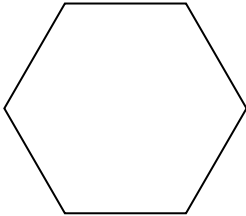
1)



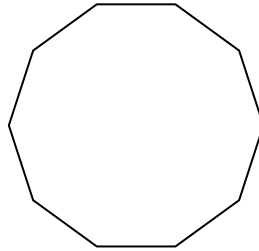
2)



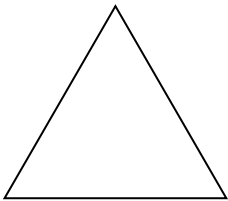
3)



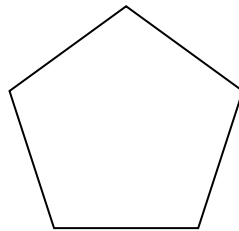
4)



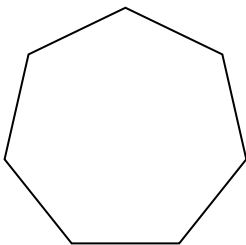
5)



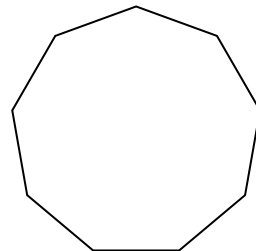
6)



7)



8)



**Respuestas**

1. \_\_\_\_\_

2. \_\_\_\_\_

3. \_\_\_\_\_

4. \_\_\_\_\_

5. \_\_\_\_\_

6. \_\_\_\_\_


7. \_\_\_\_\_

8. \_\_\_\_\_

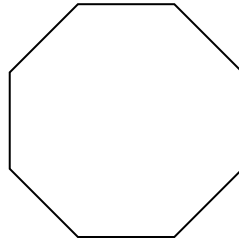


Identificar el tipo de forma mostrada.

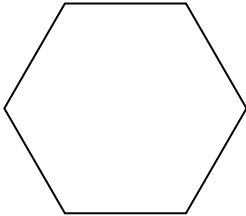
1)



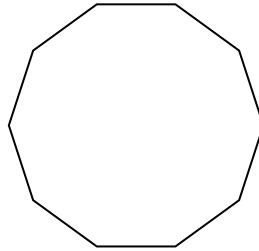
2)



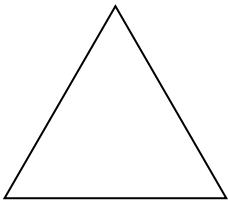
3)



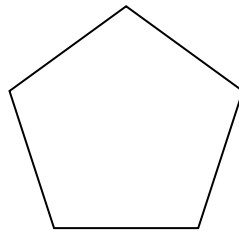
4)



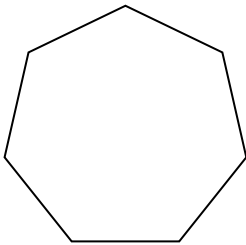
5)



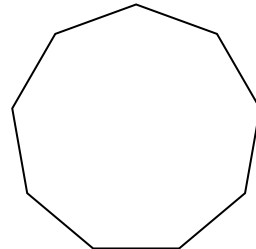
6)



7)



8)



Respuestas

1. cuadrilátero

2. octágonos

3. hexágono

4. decágono

5. triangle

6. pentágono

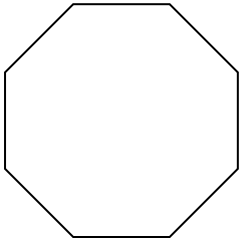
7. heptágono

8. nonagono

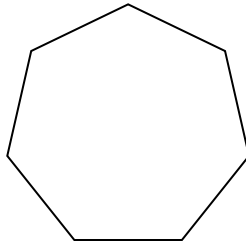


Identificar el tipo de forma mostrada.

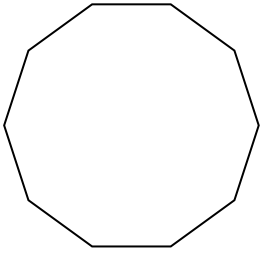
1)



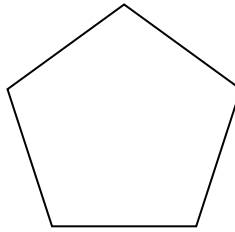
2)



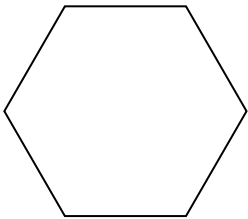
3)




4)



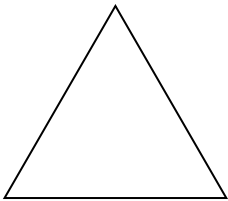
5)



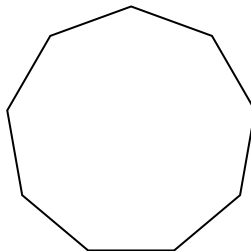
6)



7)



8)



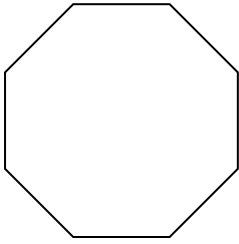
**Respuestas**

- 1. \_\_\_\_\_
- 2. \_\_\_\_\_
- 3. \_\_\_\_\_
- 4. \_\_\_\_\_
- 5. \_\_\_\_\_
- 6. \_\_\_\_\_
- 7. \_\_\_\_\_
- 8. \_\_\_\_\_

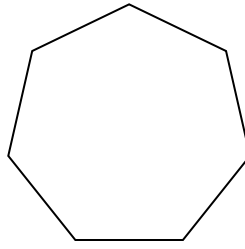


Identificar el tipo de forma mostrada.

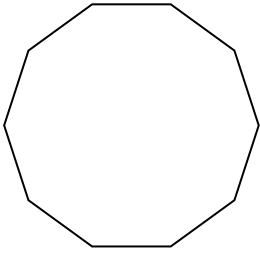
1)



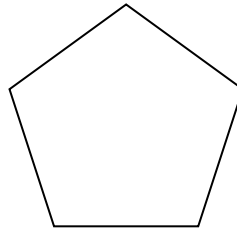
2)



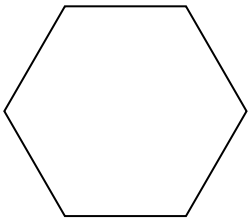
3)




4)



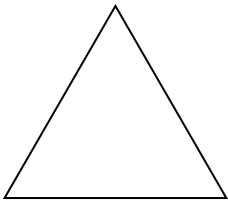
5)



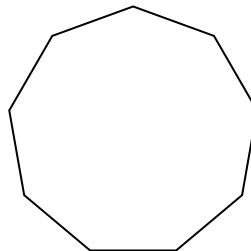
6)



7)



8)



**Respuestas**

1. octágonos

2. heptágono

3. decágono

4. pentágono

5. hexágono

6. cuadrilátero

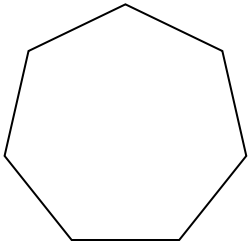
7. triangle

8. nonagono

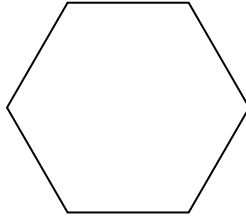


Identificar el tipo de forma mostrada.


1)



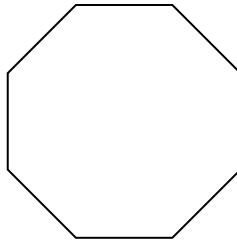
2)



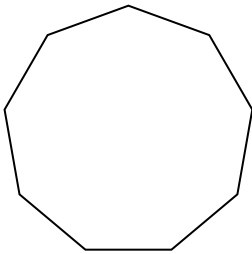
3)



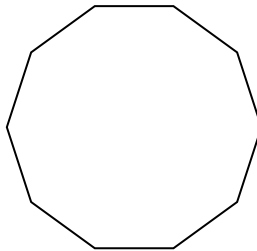
4)



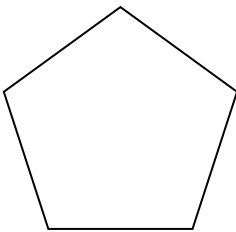
5)



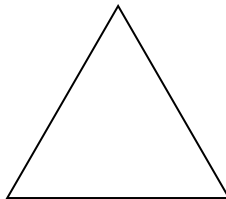
6)



7)



8)



**Respuestas**

1. \_\_\_\_\_

2. \_\_\_\_\_

3. \_\_\_\_\_

4. \_\_\_\_\_

5. \_\_\_\_\_

6. \_\_\_\_\_

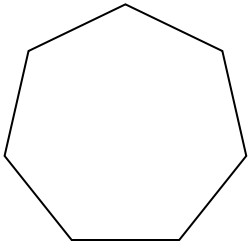
7. \_\_\_\_\_

8. \_\_\_\_\_

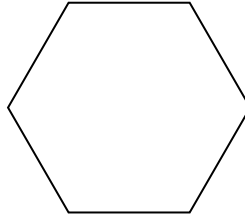


Identificar el tipo de forma mostrada.


1)



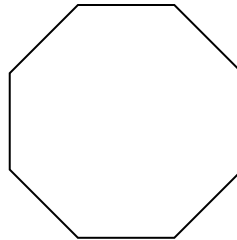
2)



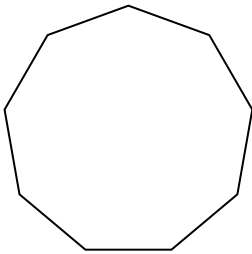
3)



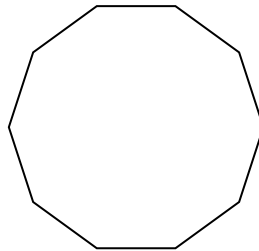
4)



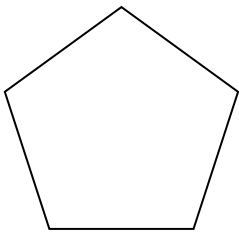
5)



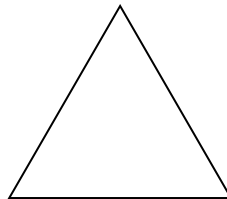
6)



7)



8)



Respuestas

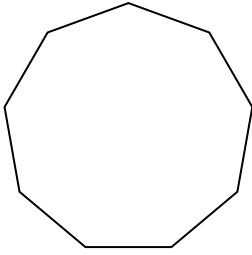
1. heptágono
2. hexágono
3. cuadrilátero
4. octágonos
5. nonagono
6. decágono
7. pentágono
8. triangle



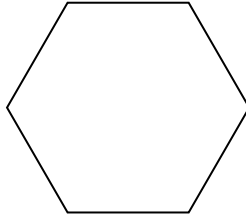


Identificar el tipo de forma mostrada.


1)



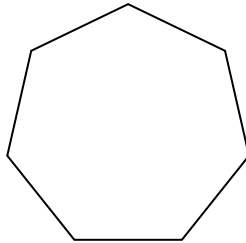
2)



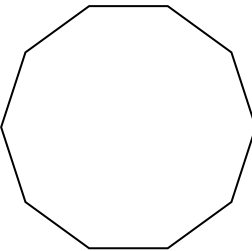
3)



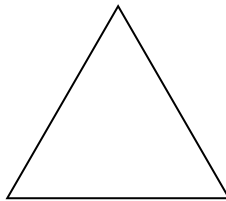
4)



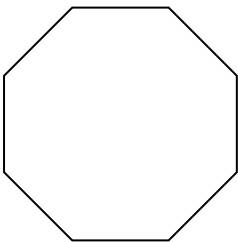
5)



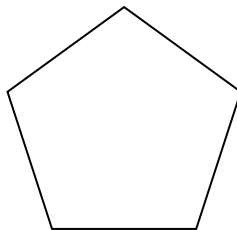
6)



7)



8)



**Respuestas**

1. \_\_\_\_\_

2. \_\_\_\_\_

3. \_\_\_\_\_

4. \_\_\_\_\_

5. \_\_\_\_\_

6. \_\_\_\_\_

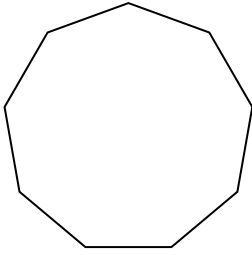
7. \_\_\_\_\_

8. \_\_\_\_\_

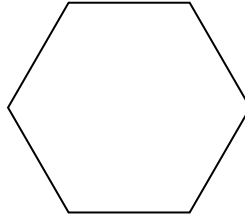


Identificar el tipo de forma mostrada.


1)



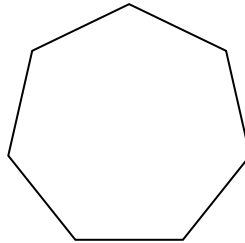
2)



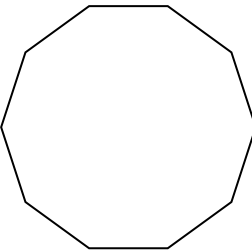
3)



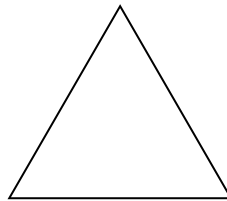
4)



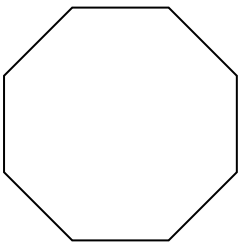
5)



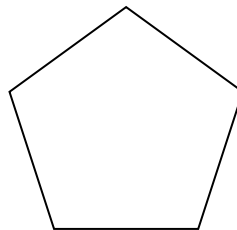
6)



7)



8)



Respuestas

1. nonágono

2. hexágono

3. cuadrilátero

4. heptágono

5. decágono

6. triangle

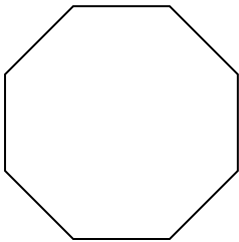
7. octágonos

8. pentágono




Identificar el tipo de forma mostrada.

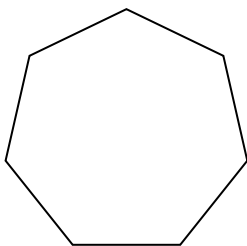
1)



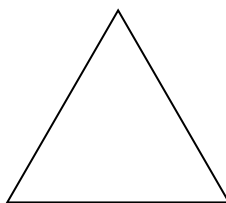
2)



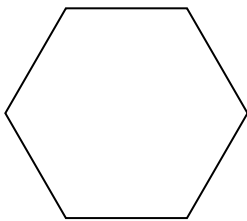
3)



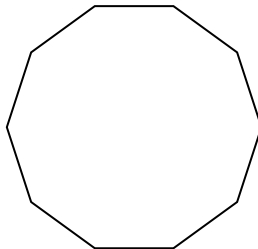
4)



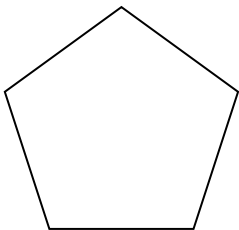
5)



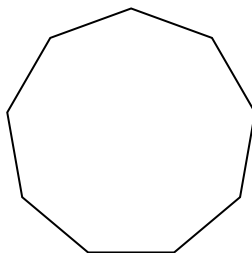
6)



7)



8)



**Respuestas**

1. \_\_\_\_\_

2. \_\_\_\_\_

3. \_\_\_\_\_

4. \_\_\_\_\_

5. \_\_\_\_\_

6. \_\_\_\_\_

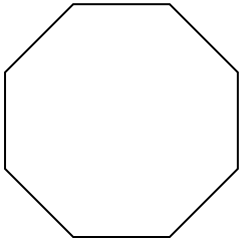
7. \_\_\_\_\_

8. \_\_\_\_\_



Identificar el tipo de forma mostrada.

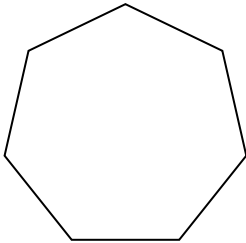
1)



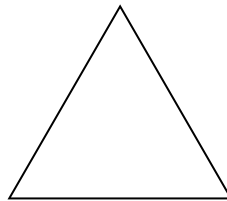
2)



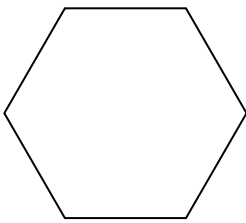
3)



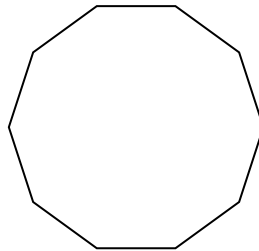
4)



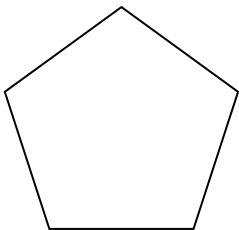
5)



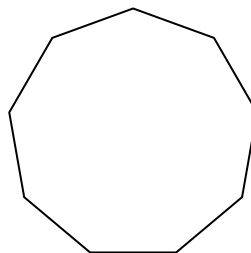
6)



7)



8)



**Respuestas**

1. octágonos

2. cuadrilátero

3. heptágono

4. triangle

5. hexágono

6. decágono

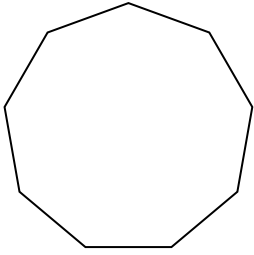
7. pentágono

8. nonagono

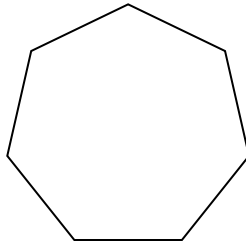


Identificar el tipo de forma mostrada.

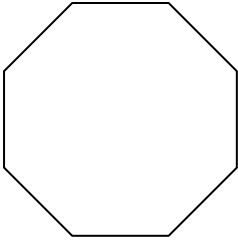
1)



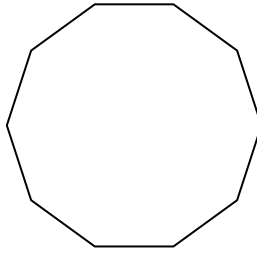
2)



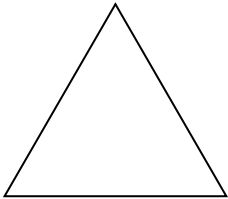
3)



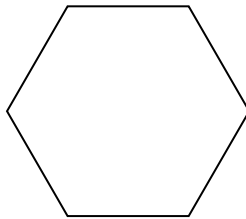
4)



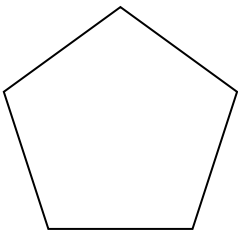
5)




6)



7)



8)



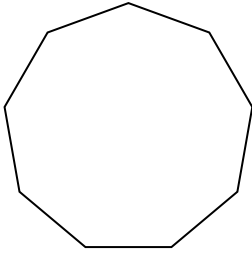
**Respuestas**

- 1. \_\_\_\_\_
- 2. \_\_\_\_\_
- 3. \_\_\_\_\_
- 4. \_\_\_\_\_
- 5. \_\_\_\_\_
- 6. \_\_\_\_\_
- 7. \_\_\_\_\_
- 8. \_\_\_\_\_

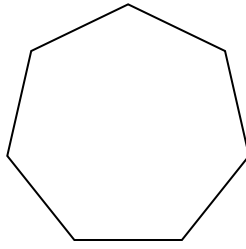


Identificar el tipo de forma mostrada.

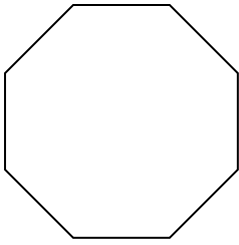
1)



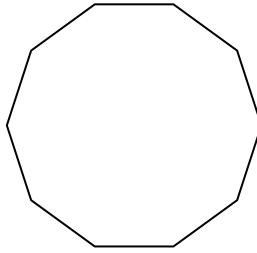
2)



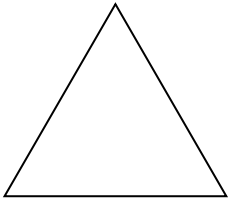
3)



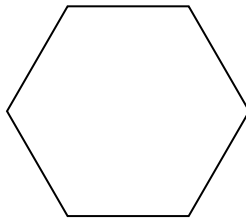
4)



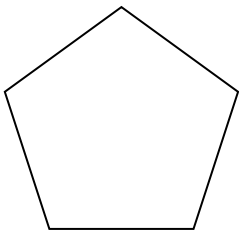
5)




6)



7)



8)



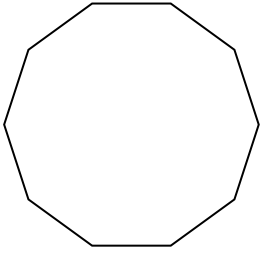
**Respuestas**

- 1. nonagono
- 2. heptágono
- 3. octágonos
- 4. decágono
- 5. triangle
- 6. hexágono
- 7. pentágono
- 8. cuadrilátero

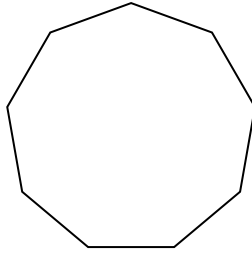


Identificar el tipo de forma mostrada.

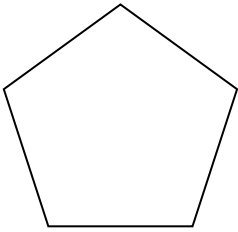
1)




2)



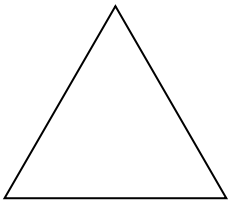
3)



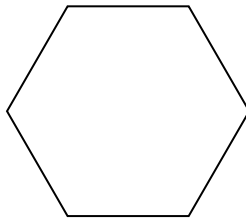
4)



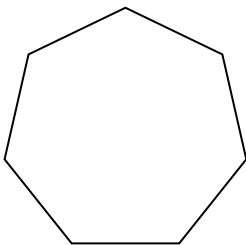
5)



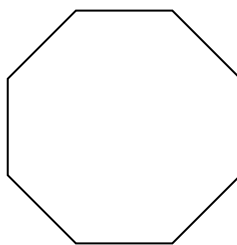
6)



7)



8)



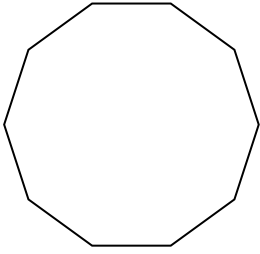
**Respuestas**

- 1. \_\_\_\_\_
- 2. \_\_\_\_\_
- 3. \_\_\_\_\_
- 4. \_\_\_\_\_
- 5. \_\_\_\_\_
- 6. \_\_\_\_\_
- 7. \_\_\_\_\_
- 8. \_\_\_\_\_

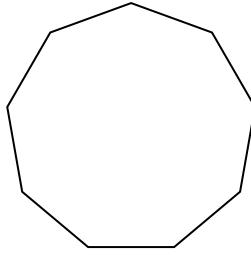


Identificar el tipo de forma mostrada.

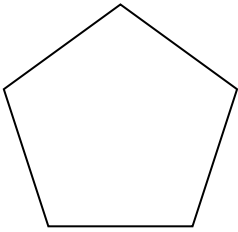
1)




2)



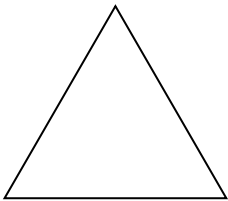
3)



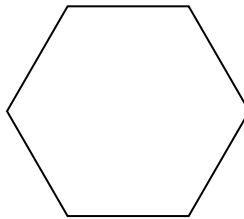
4)



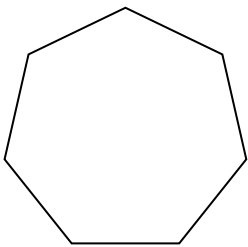
5)



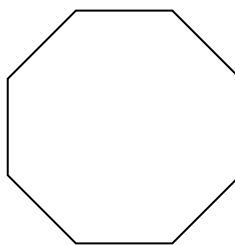
6)



7)



8)



Respuestas

1. decágono

2. nonagono

3. pentágono

4. cuadrilátero

5. triangle

6. hexágono

7. heptágono

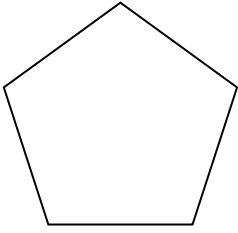
8. octágonos



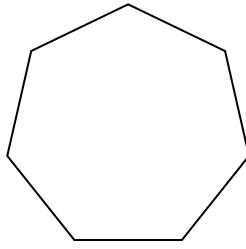


Identificar el tipo de forma mostrada.

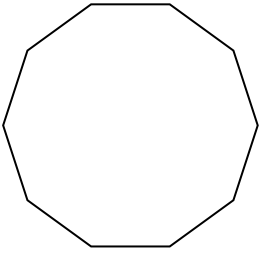
1)




2)



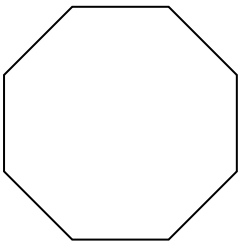
3)



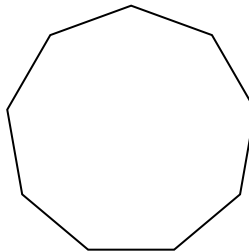
4)



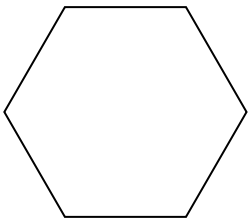
5)



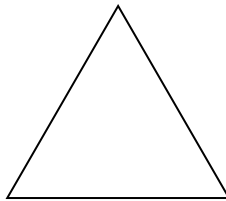
6)



7)



8)



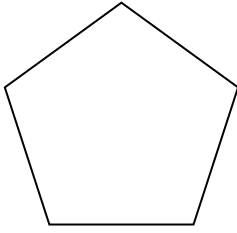
**Respuestas**

- 1. \_\_\_\_\_
- 2. \_\_\_\_\_
- 3. \_\_\_\_\_
- 4. \_\_\_\_\_
- 5. \_\_\_\_\_
- 6. \_\_\_\_\_
- 7. \_\_\_\_\_
- 8. \_\_\_\_\_

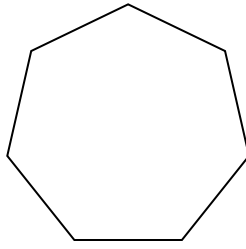


Identificar el tipo de forma mostrada.

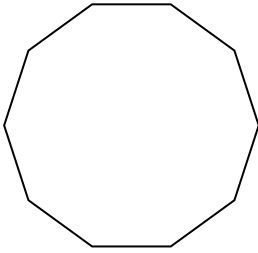
1)




2)



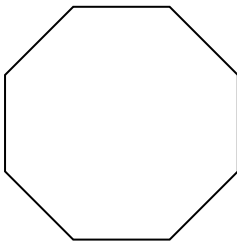
3)



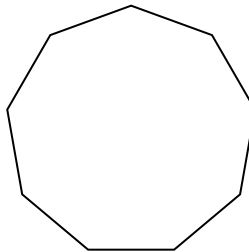
4)



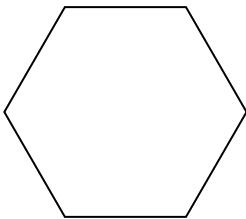
5)



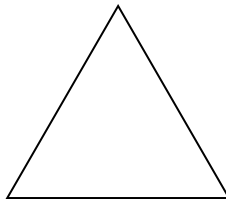
6)



7)



8)



Respuestas

1. pentágono

2. heptágono

3. decágono

4. cuadrilátero

5. octágonos

6. nonagono

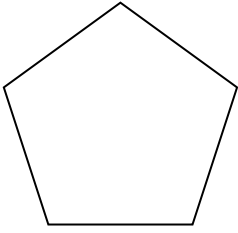
7. hexágono

8. triangle

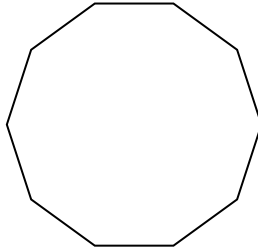


Identificar el tipo de forma mostrada.


1)



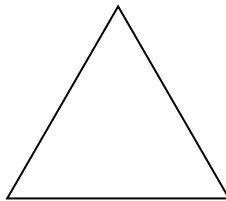
2)



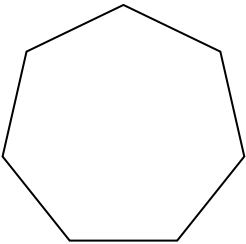
3)



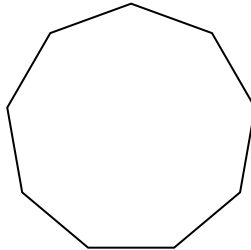
4)



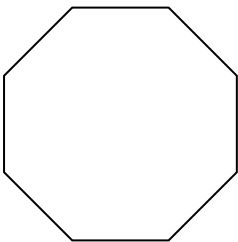
5)



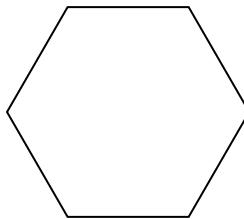
6)



7)



8)



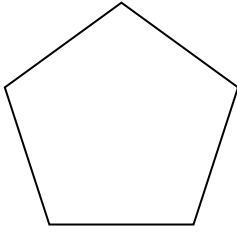
**Respuestas**

- 1. \_\_\_\_\_
- 2. \_\_\_\_\_
- 3. \_\_\_\_\_
- 4. \_\_\_\_\_
- 5. \_\_\_\_\_
- 6. \_\_\_\_\_
- 7. \_\_\_\_\_
- 8. \_\_\_\_\_

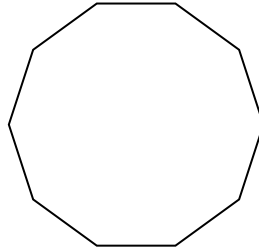


Identificar el tipo de forma mostrada.


1)



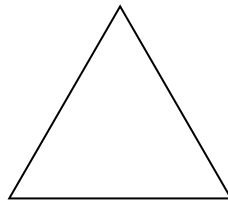
2)



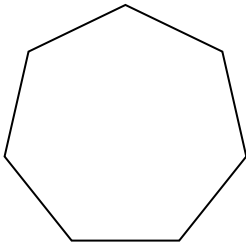
3)



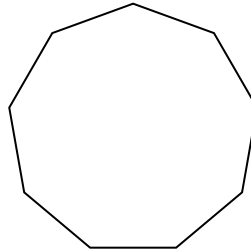
4)



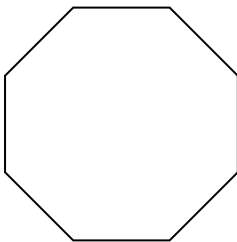
5)



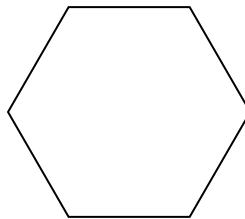
6)



7)



8)



Respuestas

1. pentágono

2. decágono

3. cuadrilátero

4. triangle

5. heptágono

6. nonagono

7. octágonos

8. hexágono