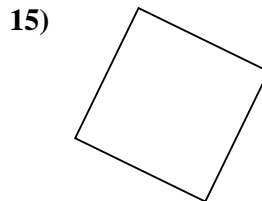
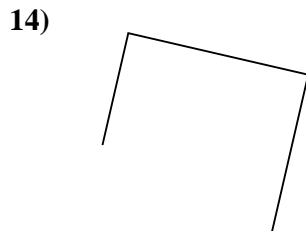
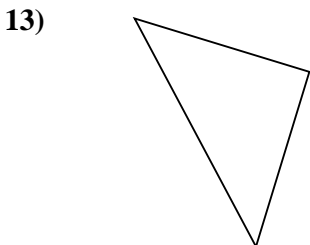
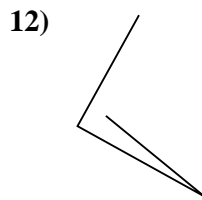
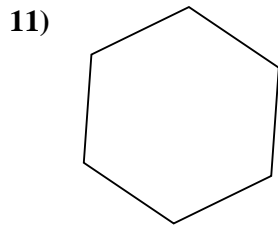
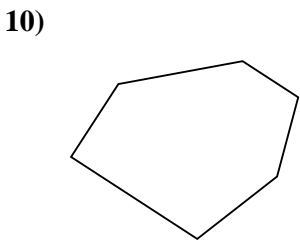
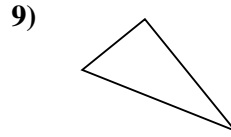
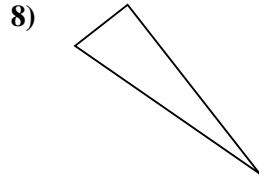
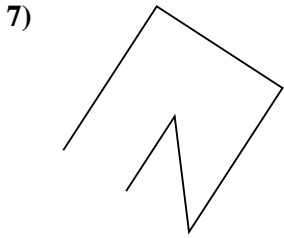
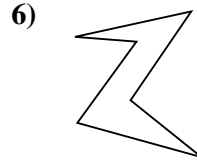
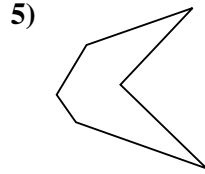
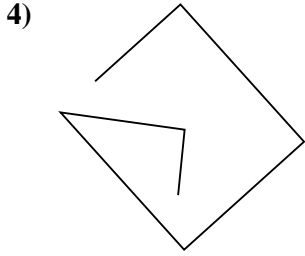
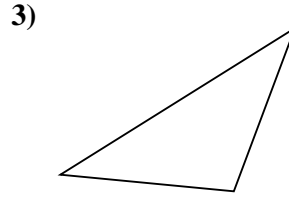
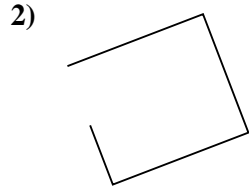
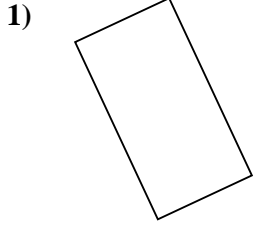




Determinar si la forma mostrada es un Triángulo, Cuadrado, Rectángulo, Hexágono u Otra.

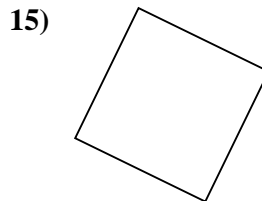
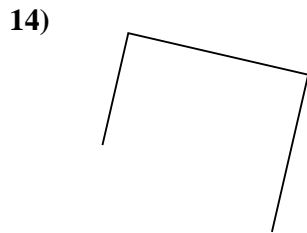
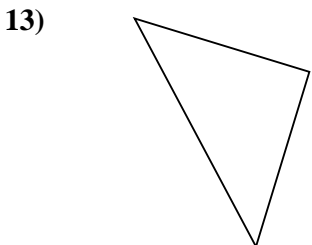
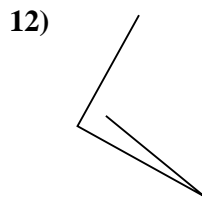
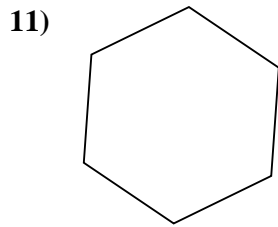
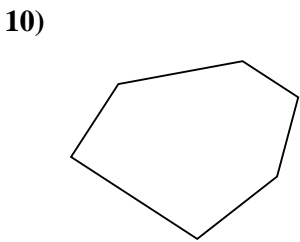
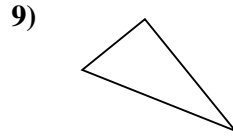
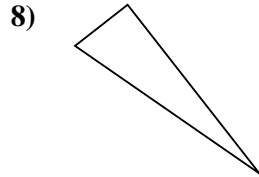
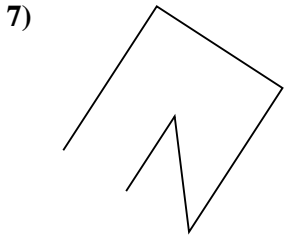
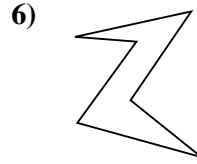
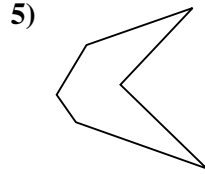
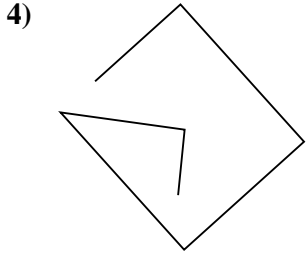
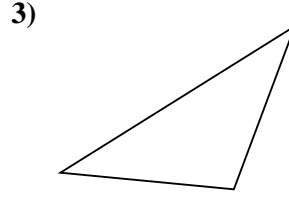
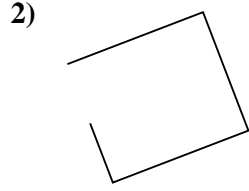
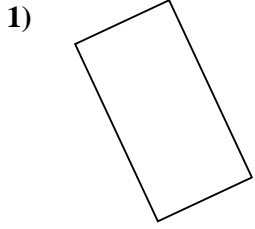


**Respuestas**

- 1. \_\_\_\_\_
- 2. \_\_\_\_\_
- 3. \_\_\_\_\_
- 4. \_\_\_\_\_
- 5. \_\_\_\_\_
- 6. \_\_\_\_\_
- 7. \_\_\_\_\_
- 8. \_\_\_\_\_
- 9. \_\_\_\_\_
- 10. \_\_\_\_\_
- 11. \_\_\_\_\_
- 12. \_\_\_\_\_
- 13. \_\_\_\_\_
- 14. \_\_\_\_\_
- 15. \_\_\_\_\_



Determinar si la forma mostrada es un Triángulo, Cuadrado, Rectángulo, Hexágono u Otra.



**Respuestas**

1. Rectángulo

2. Otra

3. Triángulo

4. Otra

5. Hexágono

6. Hexágono

7. Otra

8. Triángulo

9. Triángulo

10. Hexágono

11. Hexágono

12. Otra

13. Triángulo

14. Otra

15. Cuadrado