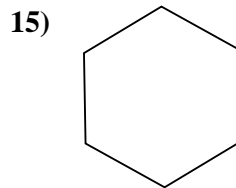
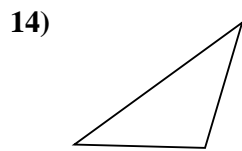
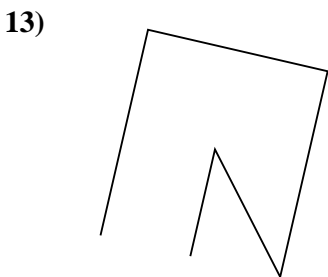
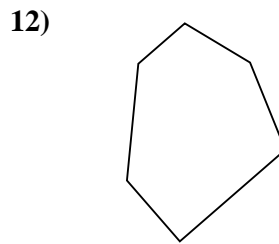
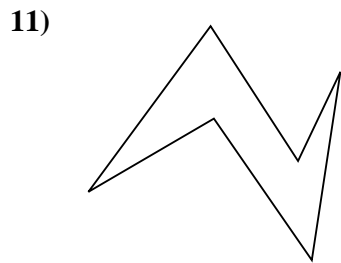
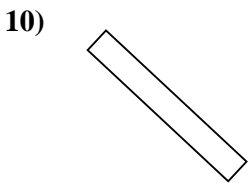
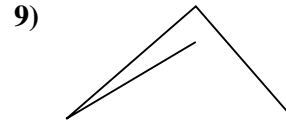
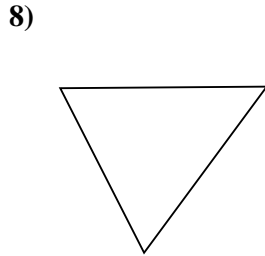
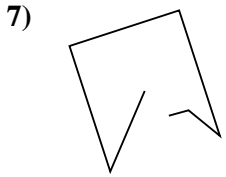
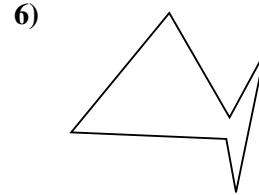
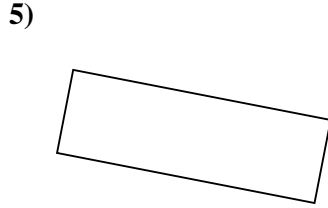
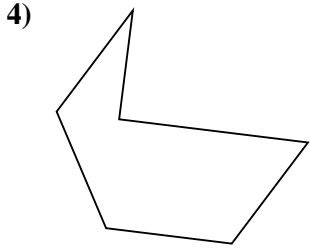
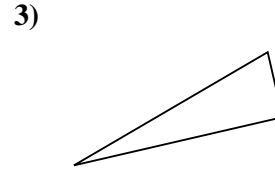

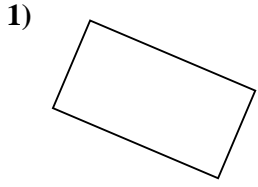




Determinar si la forma mostrada es un Triángulo, Cuadrado, Rectángulo, Hexágono u Otra.

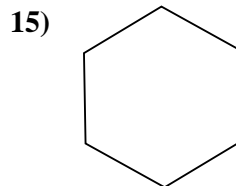
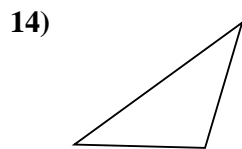
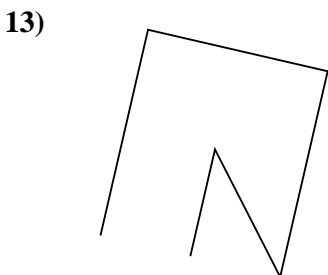
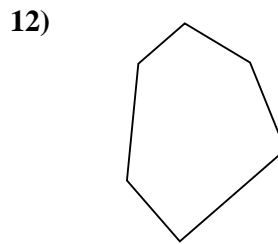
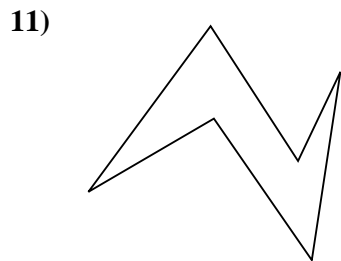
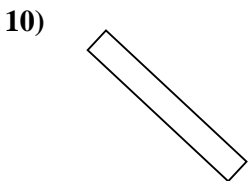
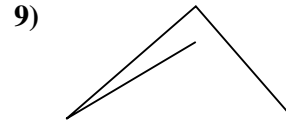
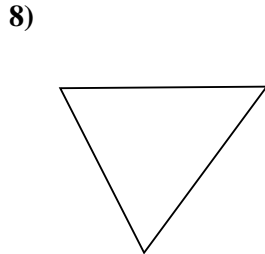
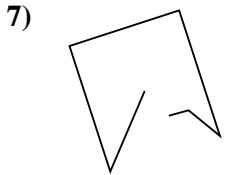
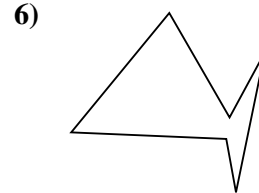
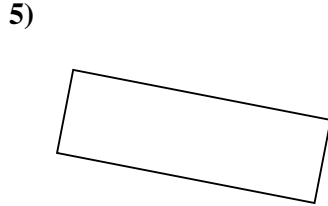
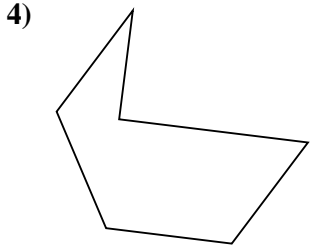
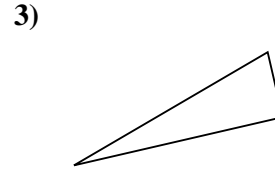

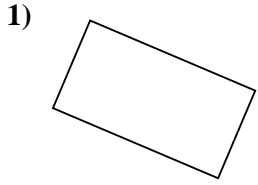


Respuestas

- 1. _____
- 2. _____
- 3. _____
- 4. _____
- 5. _____
- 6. _____
- 7. _____
- 8. _____
- 9. _____
- 10. _____
- 11. _____
- 12. _____
- 13. _____
- 14. _____
- 15. _____



Determinar si la forma mostrada es un Triángulo, Cuadrado, Rectángulo, Hexágono u Otra.



Respuestas

1. Rectángulo

2. Otra

3. Triángulo

4. Hexágono

5. Rectángulo

6. Hexágono

7. Otra

8. Triángulo

9. Otra

10. Rectángulo

11. Hexágono

12. Hexágono

13. Otra

14. Triángulo

15. Hexágono