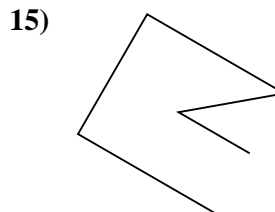
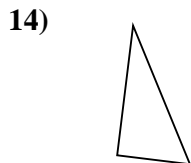
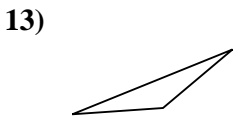
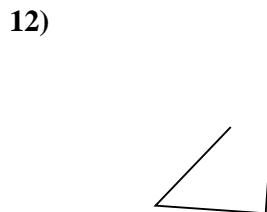
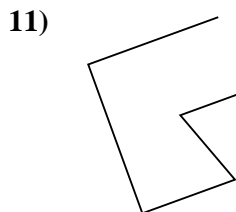
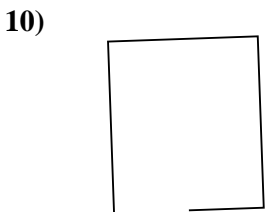

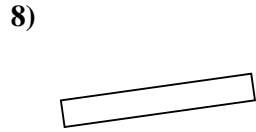
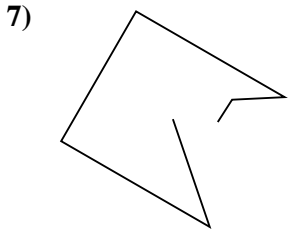
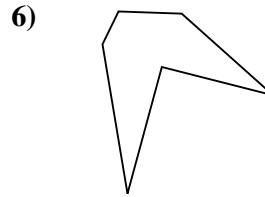
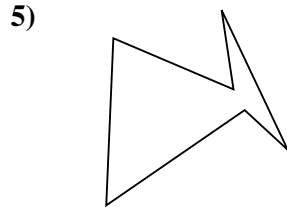
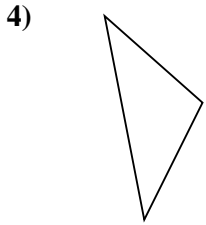
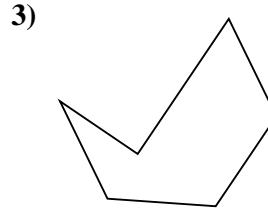
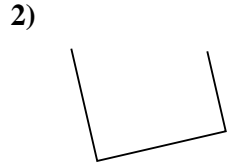
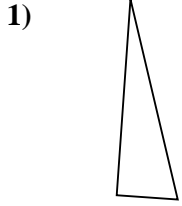




Determinar si la forma mostrada es un Triángulo, Cuadrado, Rectángulo, Hexágono u Otra.

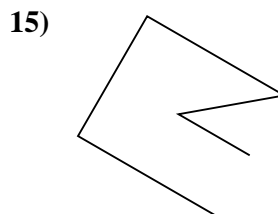
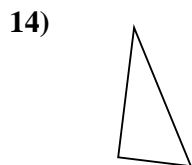
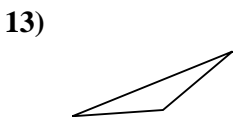
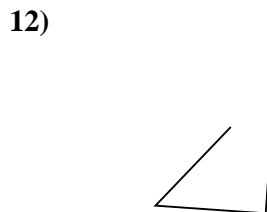
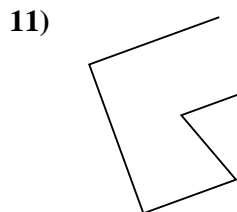
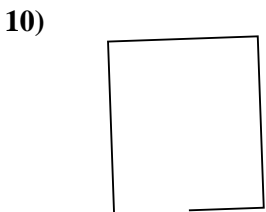

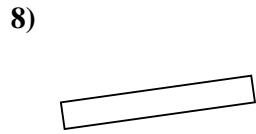
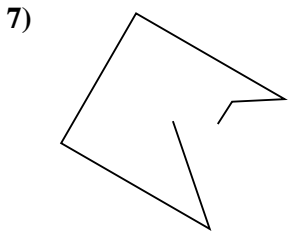
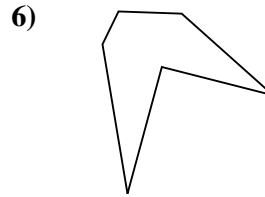

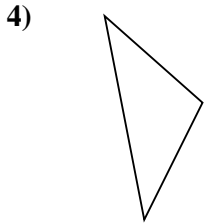
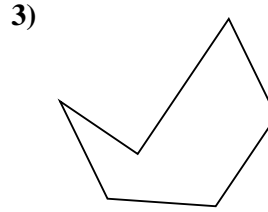
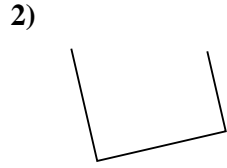
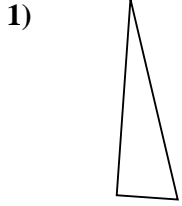


Respuestas

- 1. _____
- 2. _____
- 3. _____
- 4. _____
- 5. _____
- 6. _____
- 7. _____
- 8. _____
- 9. _____
- 10. _____
- 11. _____
- 12. _____
- 13. _____
- 14. _____
- 15. _____



Determinar si la forma mostrada es un Triángulo, Cuadrado, Rectángulo, Hexágono u Otra.



Respuestas

1. Triángulo

2. Otra

3. Hexágono

4. Triángulo

5. Hexágono

6. Hexágono

7. Otra

8. Rectángulo

9. Otra

10. Otra

11. Otra

12. Otra

13. Triángulo

14. Triángulo

15. Otra