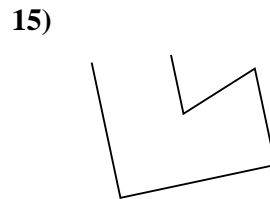
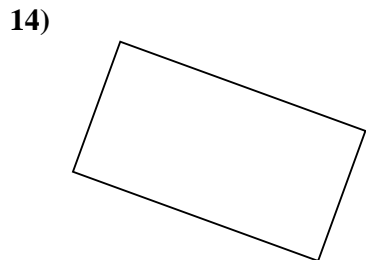
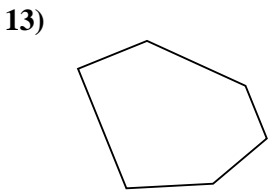
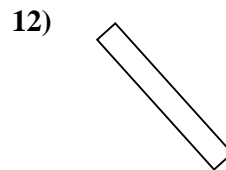
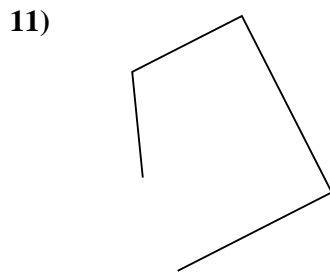
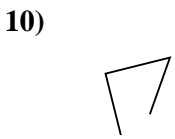
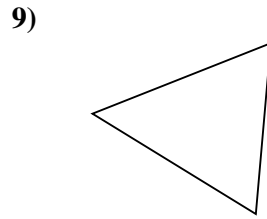
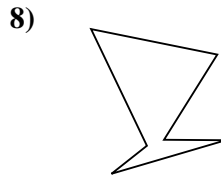
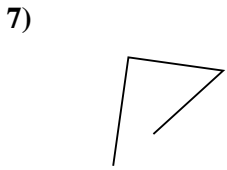
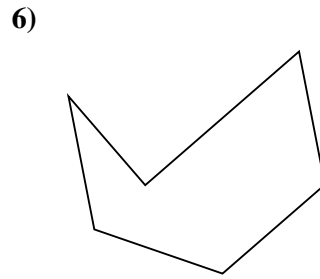
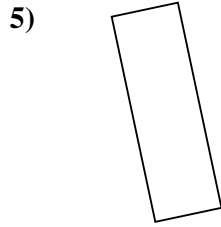
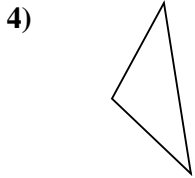
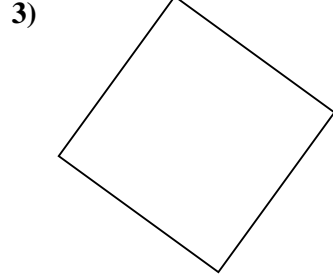
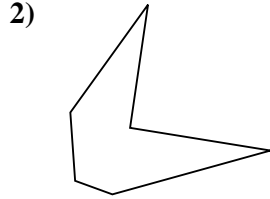
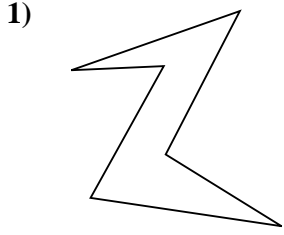




Determinar si la forma mostrada es un Triángulo, Cuadrado, Rectángulo, Hexágono u Otra.

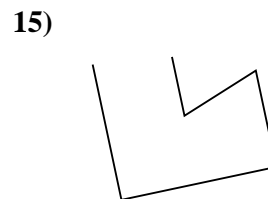
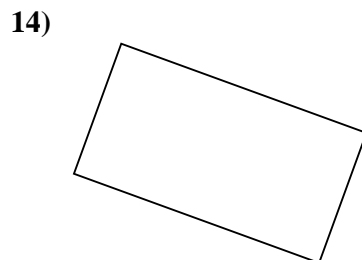
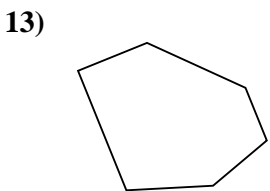
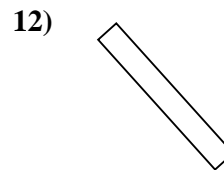
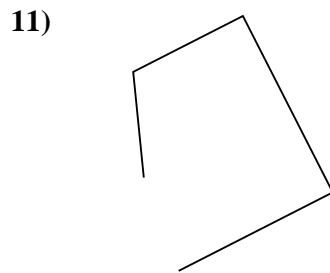
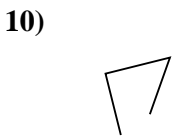
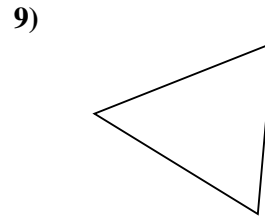
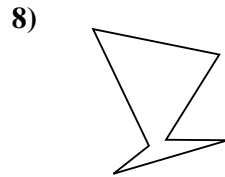
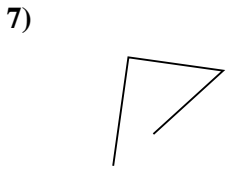
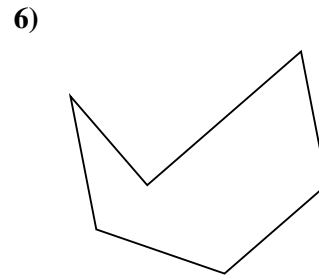
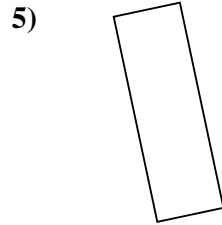
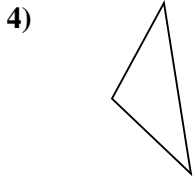
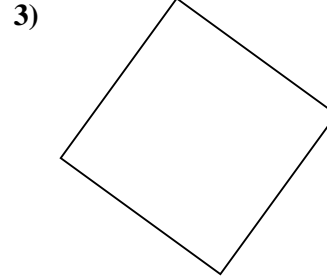
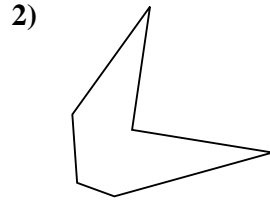
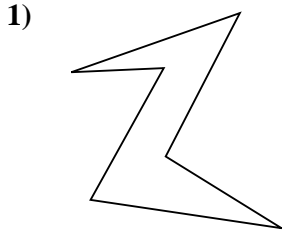


Respuestas

- 1. _____
- 2. _____
- 3. _____
- 4. _____
- 5. _____
- 6. _____
- 7. _____
- 8. _____
- 9. _____
- 10. _____
- 11. _____
- 12. _____
- 13. _____
- 14. _____
- 15. _____



Determinar si la forma mostrada es un Triángulo, Cuadrado, Rectángulo, Hexágono u Otra.



Respuestas

1. Hexágono

2. Hexágono

3. Cuadrado

4. Triángulo

5. Rectángulo

6. Hexágono

7. Otra

8. Hexágono

9. Triángulo

10. Otra

11. Otra

12. Rectángulo

13. Hexágono

14. Rectángulo

15. Otra