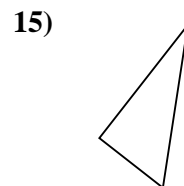
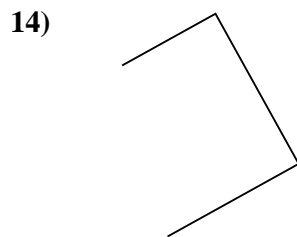
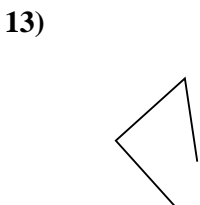
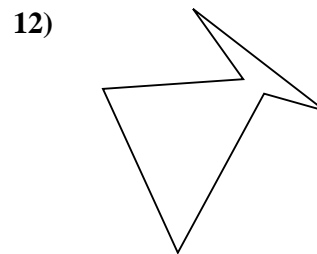
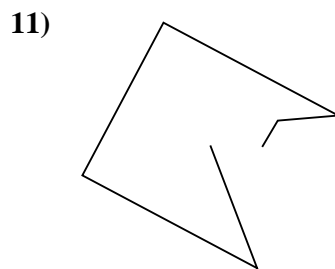
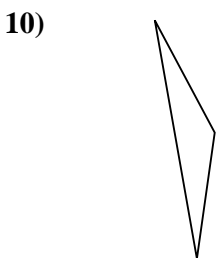
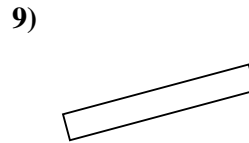
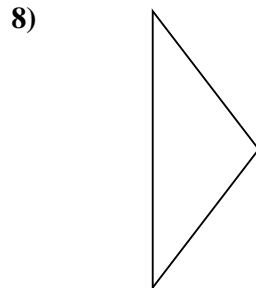
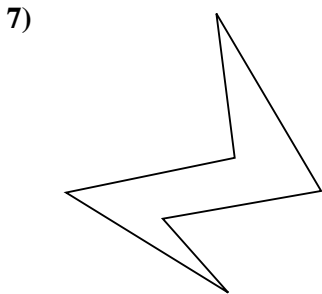
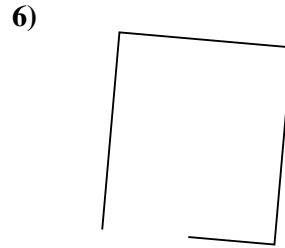
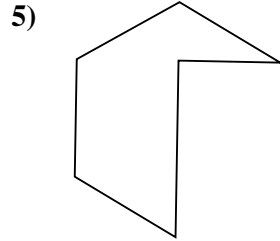

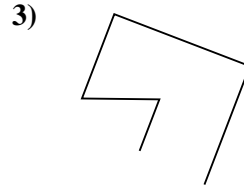
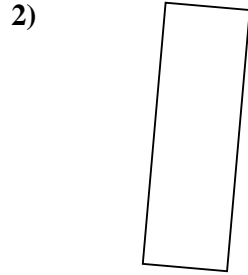
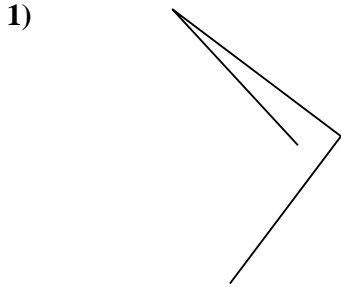




Determinar si la forma mostrada es un Triángulo, Cuadrado, Rectángulo, Hexágono u Otra.



**Respuestas**

1. \_\_\_\_\_

2. \_\_\_\_\_

3. \_\_\_\_\_

4. \_\_\_\_\_

5. \_\_\_\_\_

6. \_\_\_\_\_

7. \_\_\_\_\_

8. \_\_\_\_\_

9. \_\_\_\_\_

10. \_\_\_\_\_

11. \_\_\_\_\_

12. \_\_\_\_\_

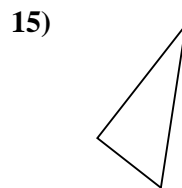
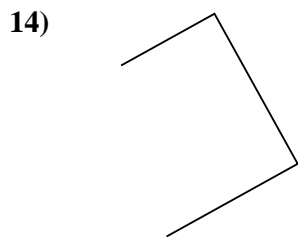
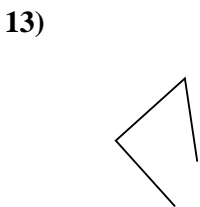
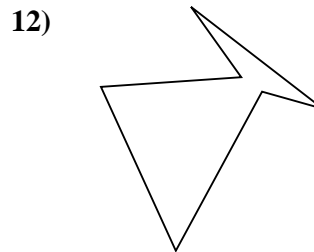
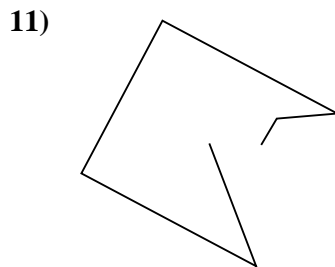
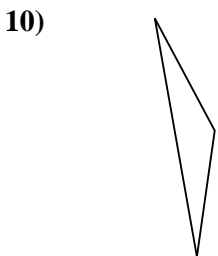
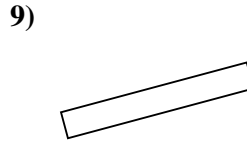
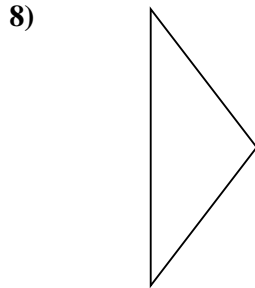
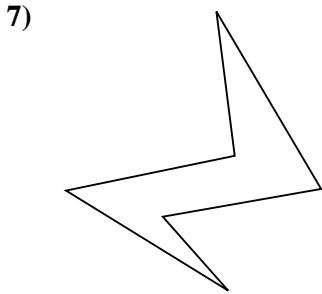
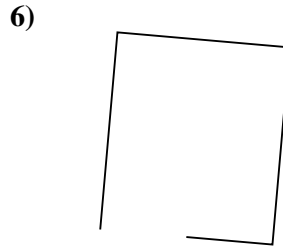
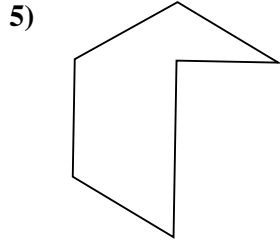

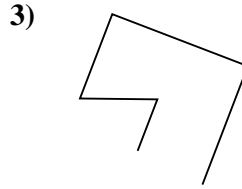
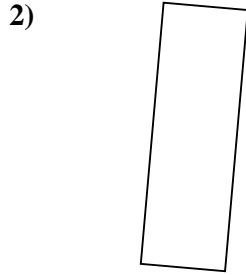
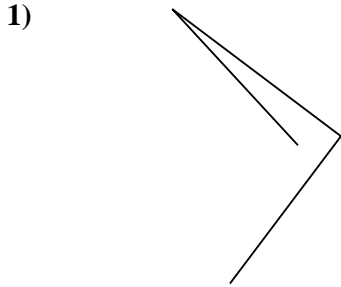
13. \_\_\_\_\_

14. \_\_\_\_\_

15. \_\_\_\_\_



Determinar si la forma mostrada es un Triángulo, Cuadrado, Rectángulo, Hexágono u Otra.



**Respuestas**

1. Otra

2. Rectángulo

3. Otra

4. Rectángulo

5. Hexágono

6. Otra

7. Hexágono

8. Triángulo

9. Rectángulo

10. Triángulo

11. Otra

12. Hexágono

13. Otra

14. Otra

15. Triángulo