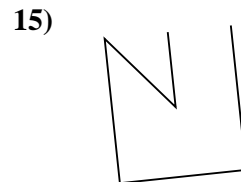
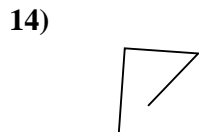
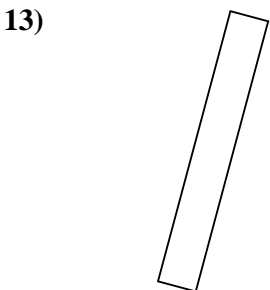
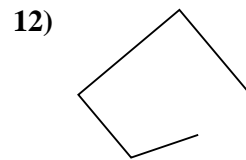
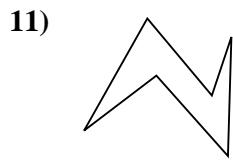
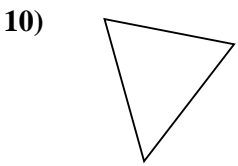
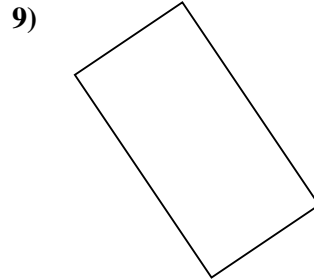
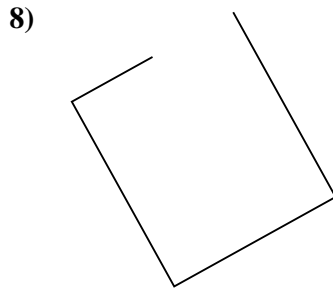
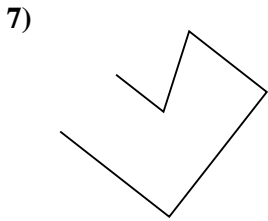

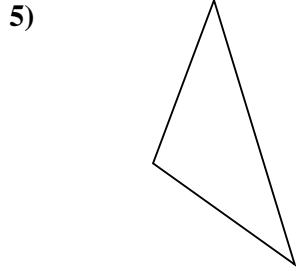
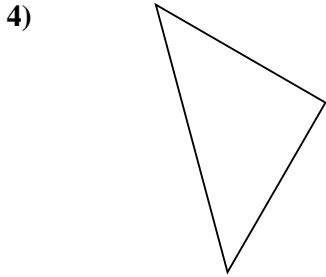
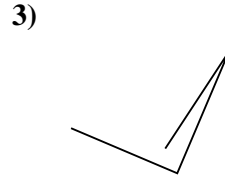
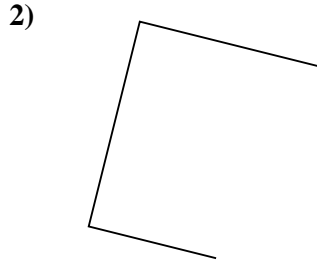
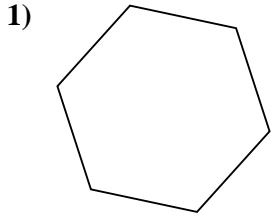




Determinar si la forma mostrada es un Triángulo, Cuadrado, Rectángulo, Hexágono u Otra.

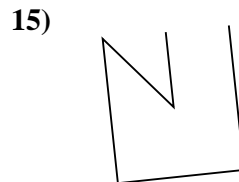
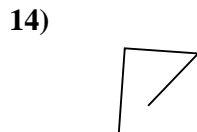
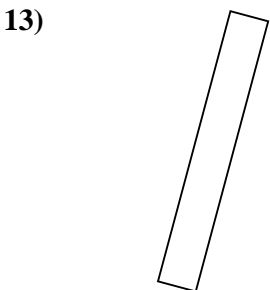
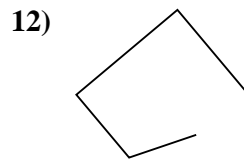
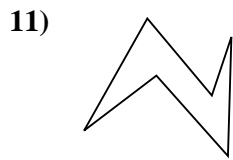
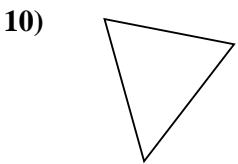
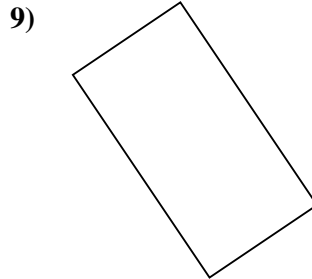
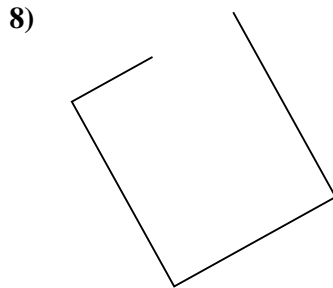
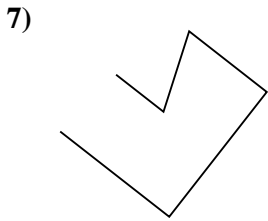

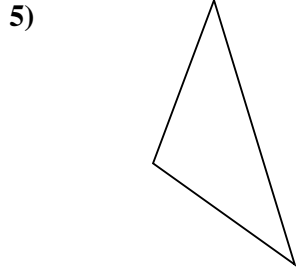
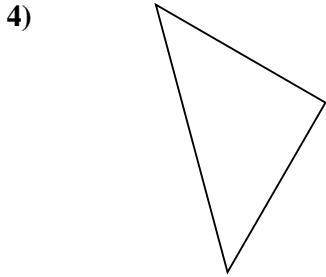
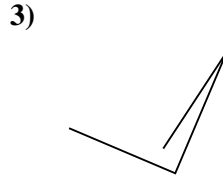
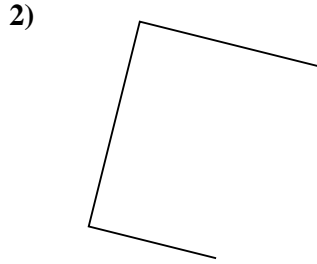
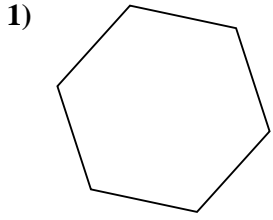


Respuestas

- 1. _____
- 2. _____
- 3. _____
- 4. _____
- 5. _____
- 6. _____
- 7. _____
- 8. _____
- 9. _____
- 10. _____
- 11. _____
- 12. _____
- 13. _____
- 14. _____
- 15. _____



Determinar si la forma mostrada es un Triángulo, Cuadrado, Rectángulo, Hexágono u Otra.



Respuestas

1. Hexágono

2. Otra

3. Otra

4. Triángulo

5. Triángulo

6. Hexágono

7. Otra

8. Otra

9. Rectángulo

10. Triángulo

11. Hexágono

12. Otra

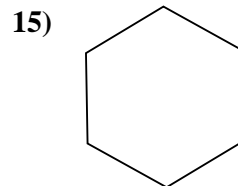
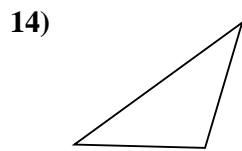
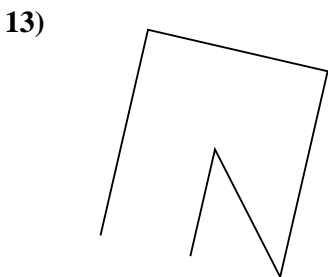
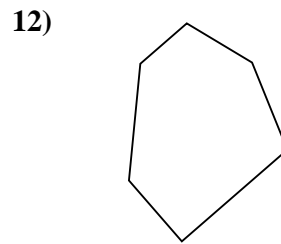
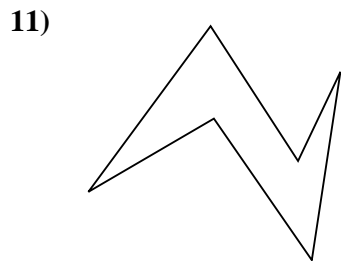
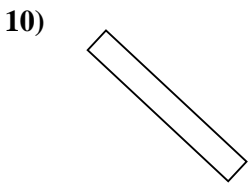
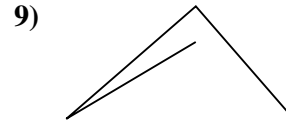
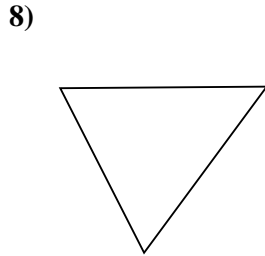
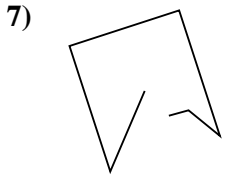
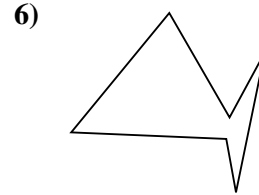
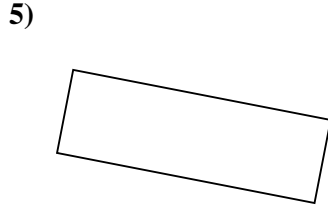
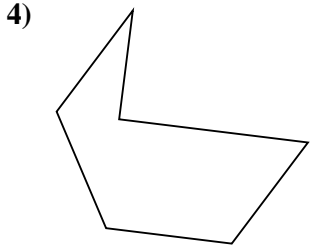
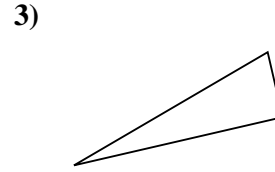

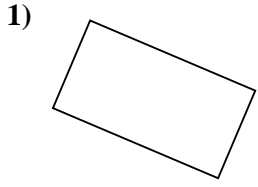
13. Rectángulo

14. Otra

15. Otra



Determinar si la forma mostrada es un Triángulo, Cuadrado, Rectángulo, Hexágono u Otra.

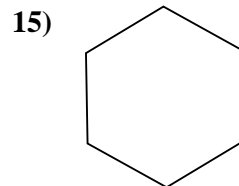
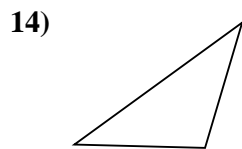
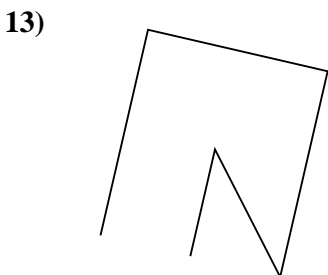
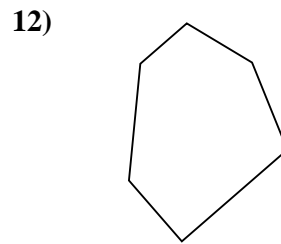
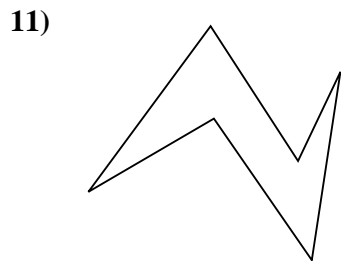
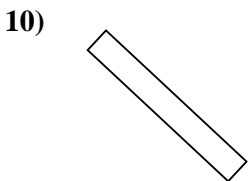
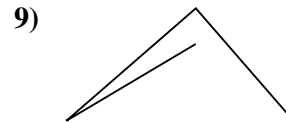
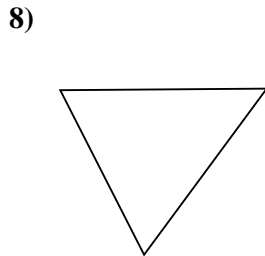
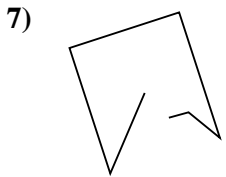
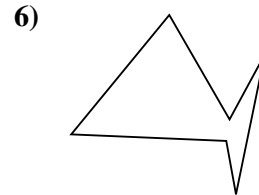
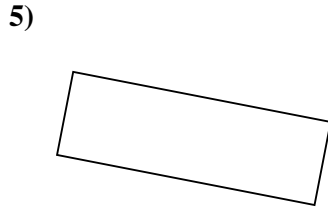
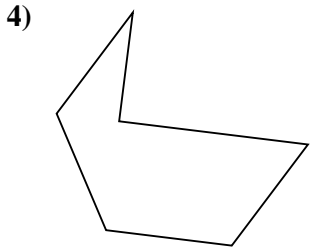
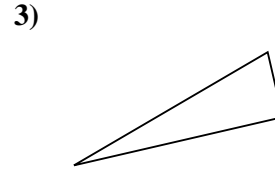

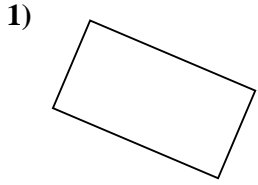


Respuestas

- 1. _____
- 2. _____
- 3. _____
- 4. _____
- 5. _____
- 6. _____
- 7. _____
- 8. _____
- 9. _____
- 10. _____
- 11. _____
- 12. _____
- 13. _____
- 14. _____
- 15. _____



Determinar si la forma mostrada es un Triángulo, Cuadrado, Rectángulo, Hexágono u Otra.



Respuestas

1. Rectángulo

2. Otra

3. Triángulo

4. Hexágono

5. Rectángulo

6. Hexágono

7. Otra

8. Triángulo

9. Otra

10. Rectángulo

11. Hexágono

12. Hexágono

13. Otra

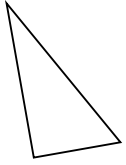
14. Triángulo

15. Hexágono

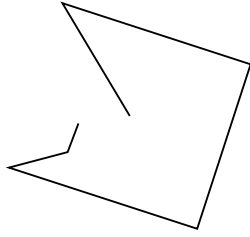


Determinar si la forma mostrada es un Triángulo, Cuadrado, Rectángulo, Hexágono u Otra.

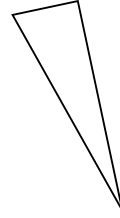
1)



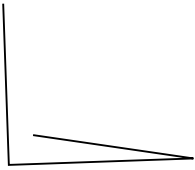
2)



3)



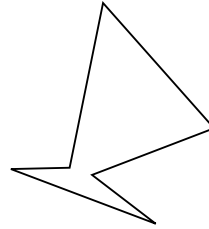
4)




5)



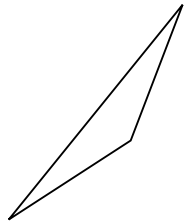
6)



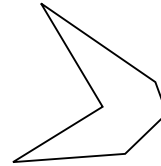
7)



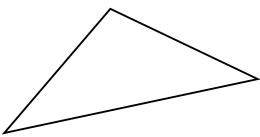
8)



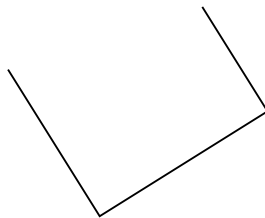
9)



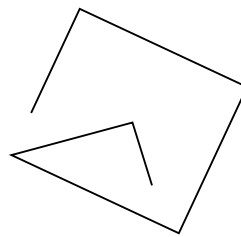
10)




11)



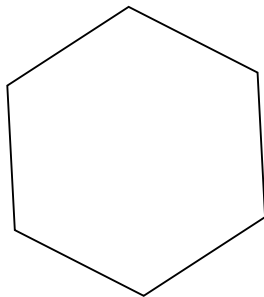
12)



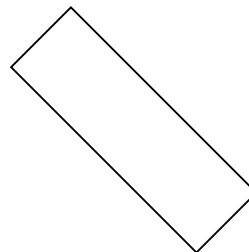
13)



14)



15)



Respuestas

1. _____

2. _____

3. _____

4. _____

5. _____

6. _____

7. _____

8. _____

9. _____

10. _____

11. _____

12. _____

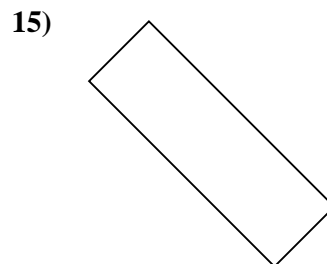
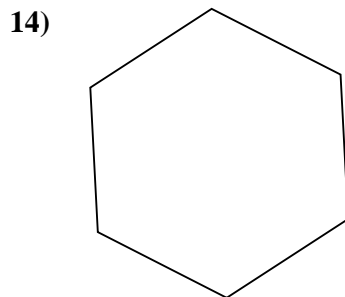
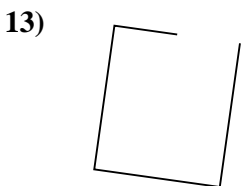
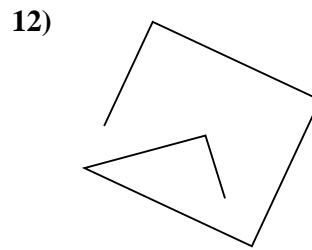
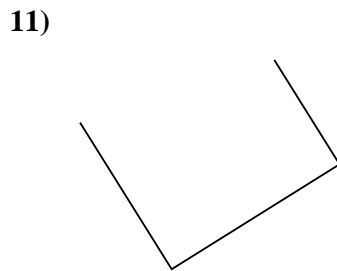
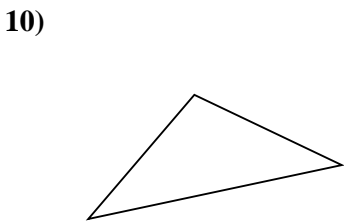
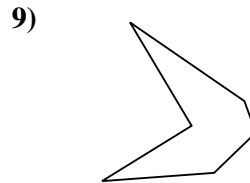
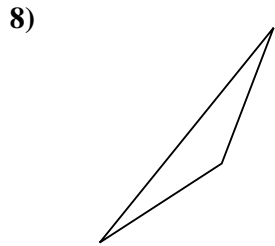
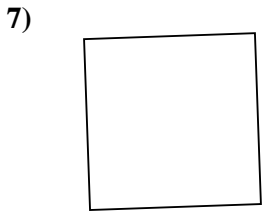
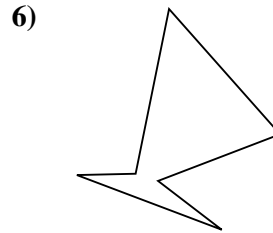
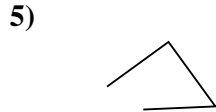
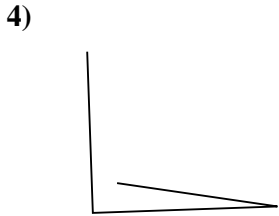
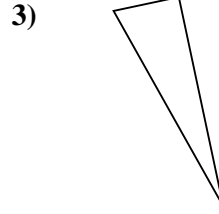
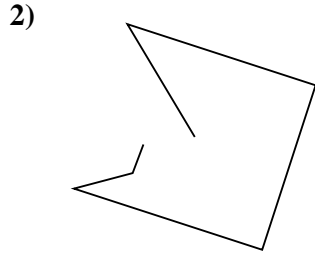
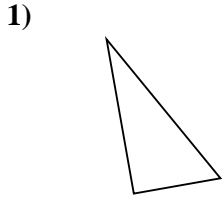
13. _____

14. _____

15. _____



Determinar si la forma mostrada es un Triángulo, Cuadrado, Rectángulo, Hexágono u Otra.



Respuestas

1. Triángulo

2. Otra

3. Triángulo

4. Otra

5. Otra

6. Hexágono

7. Cuadrado

8. Triángulo

9. Hexágono

10. Triángulo

11. Otra

12. Otra

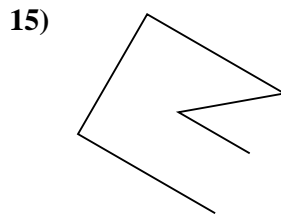
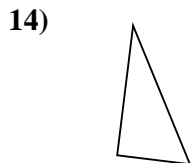
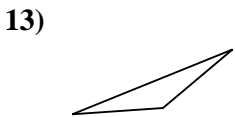
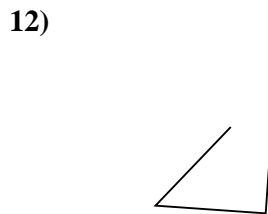
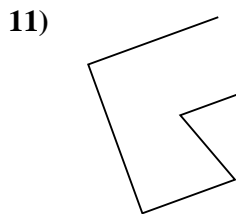
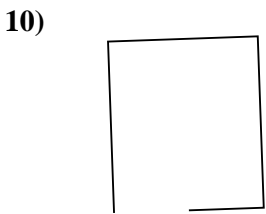

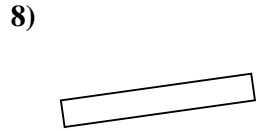
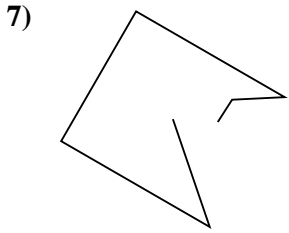
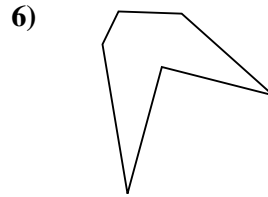

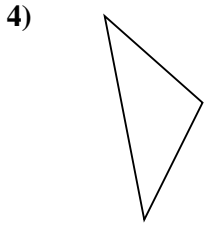
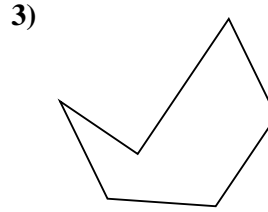
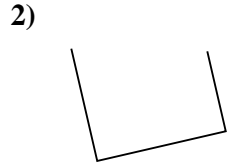
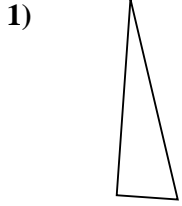
13. Otra

14. Hexágono

15. Rectángulo



Determinar si la forma mostrada es un Triángulo, Cuadrado, Rectángulo, Hexágono u Otra.

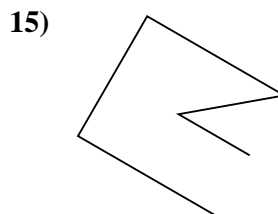
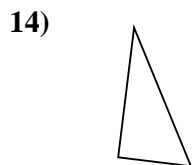
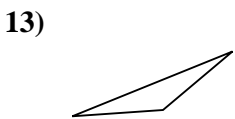
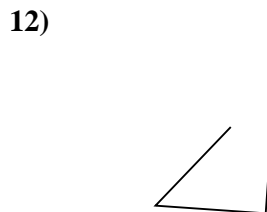
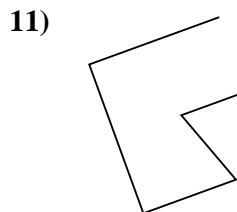
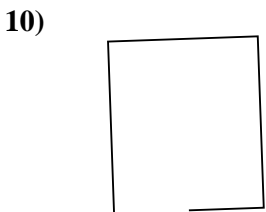

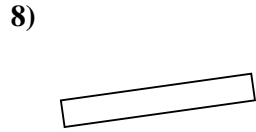
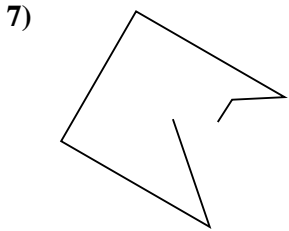
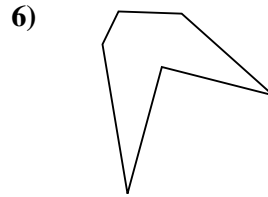
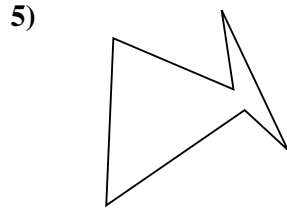
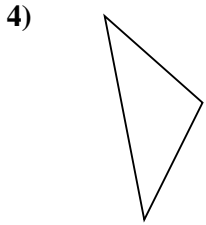
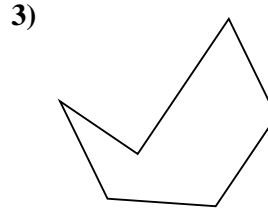
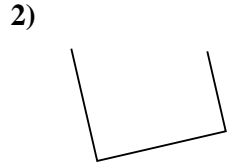
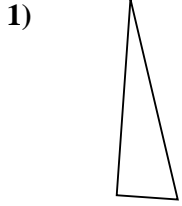


Respuestas

- 1. _____
- 2. _____
- 3. _____
- 4. _____
- 5. _____
- 6. _____
- 7. _____
- 8. _____
- 9. _____
- 10. _____
- 11. _____
- 12. _____
- 13. _____
- 14. _____
- 15. _____



Determinar si la forma mostrada es un Triángulo, Cuadrado, Rectángulo, Hexágono u Otra.



Respuestas

1. Triángulo

2. Otra

3. Hexágono

4. Triángulo

5. Hexágono

6. Hexágono

7. Otra

8. Rectángulo

9. Otra

10. Otra

11. Otra

12. Otra

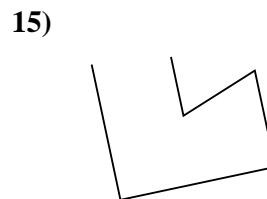
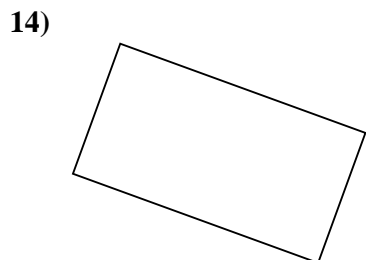
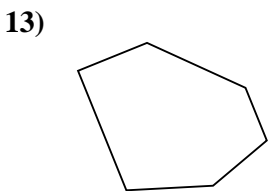
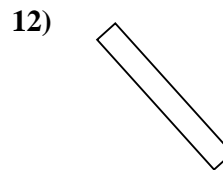
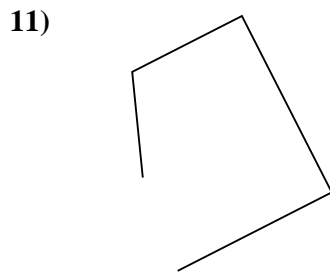
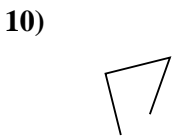
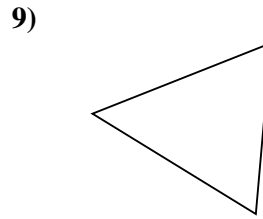
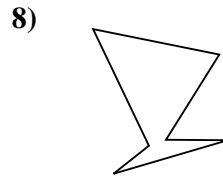
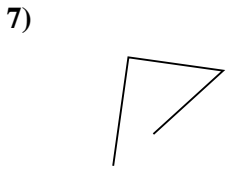
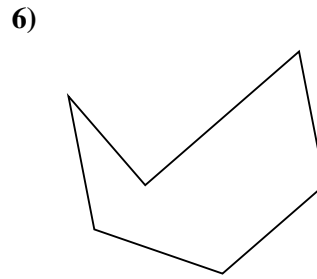
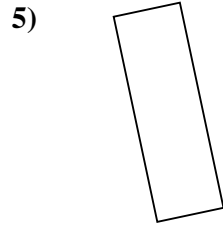
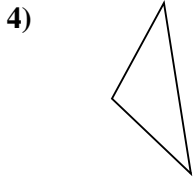
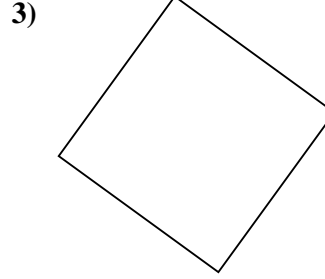
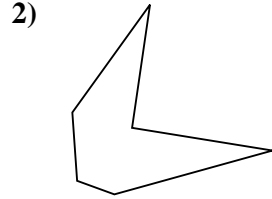
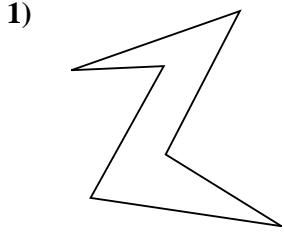
13. Triángulo

14. Triángulo

15. Otra



Determinar si la forma mostrada es un Triángulo, Cuadrado, Rectángulo, Hexágono u Otra.

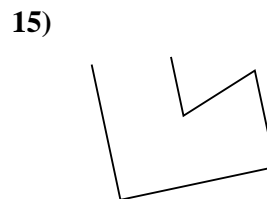
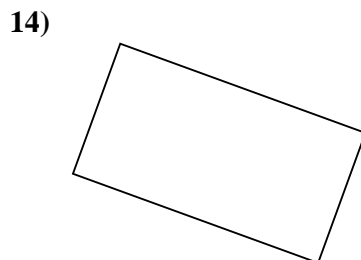
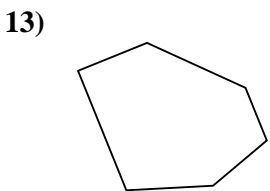
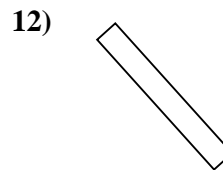
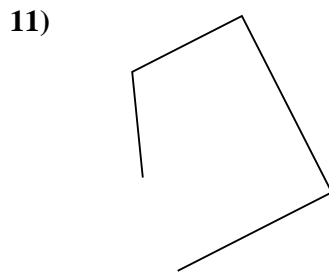
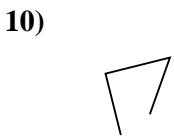
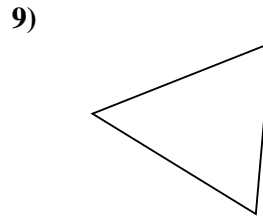
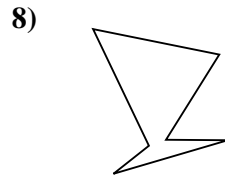
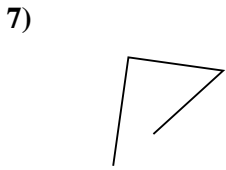
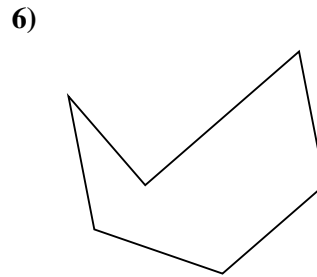
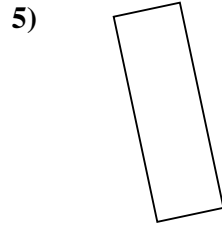
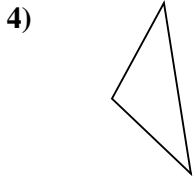
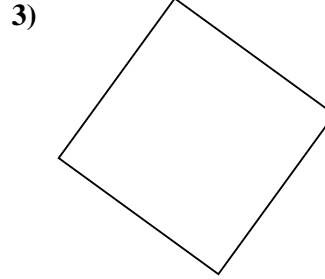
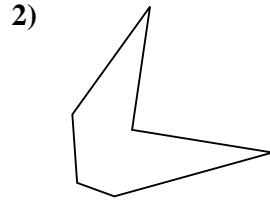
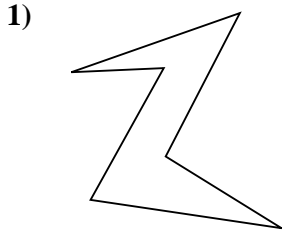


Respuestas

- 1. _____
- 2. _____
- 3. _____
- 4. _____
- 5. _____
- 6. _____
- 7. _____
- 8. _____
- 9. _____
- 10. _____
- 11. _____
- 12. _____
- 13. _____
- 14. _____
- 15. _____



Determinar si la forma mostrada es un Triángulo, Cuadrado, Rectángulo, Hexágono u Otra.



Respuestas

1. Hexágono

2. Hexágono

3. Cuadrado

4. Triángulo

5. Rectángulo

6. Hexágono

7. Otra

8. Hexágono

9. Triángulo

10. Otra

11. Otra

12. Rectángulo

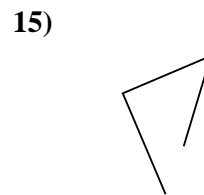

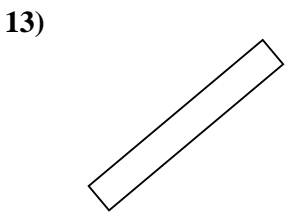
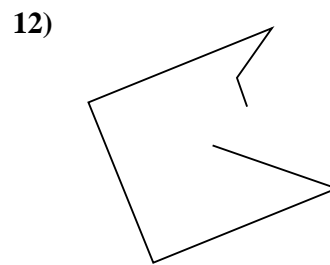
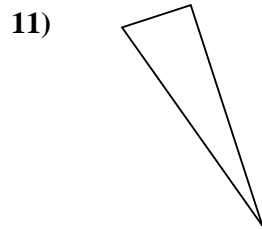
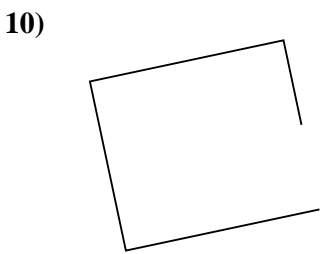
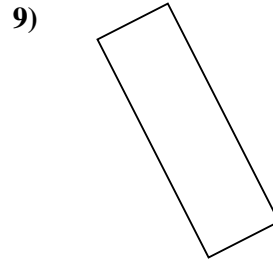
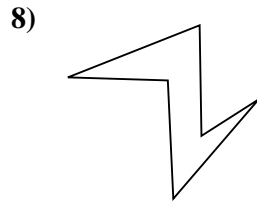
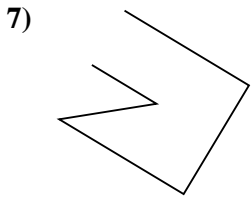
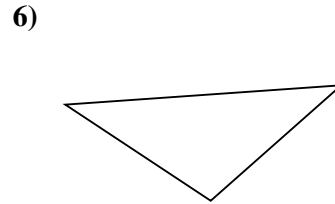
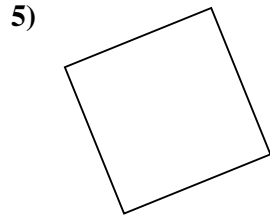

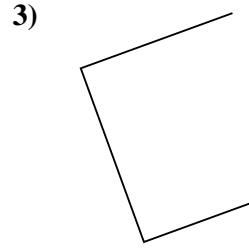
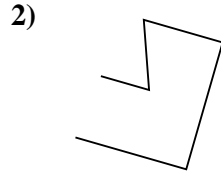
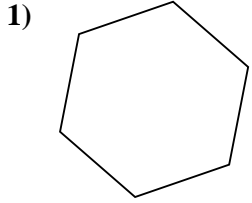
13. Hexágono

14. Rectángulo

15. Otra



Determinar si la forma mostrada es un Triángulo, Cuadrado, Rectángulo, Hexágono u Otra.

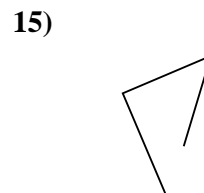

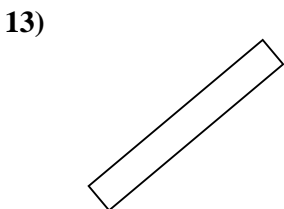
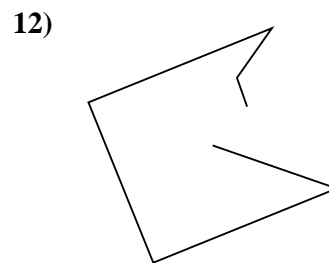
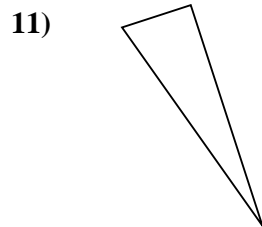
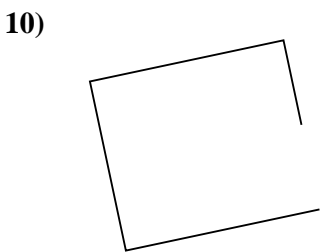
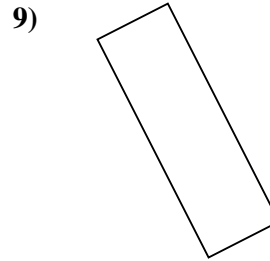
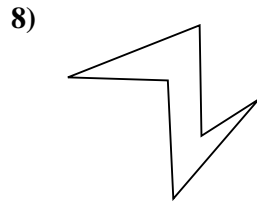
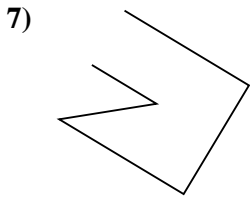
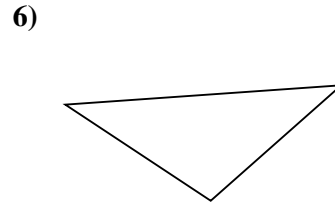
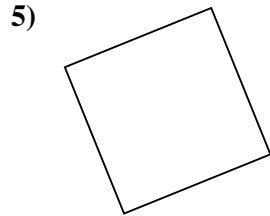
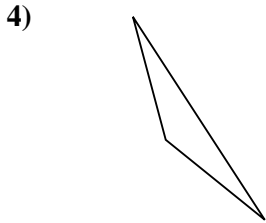
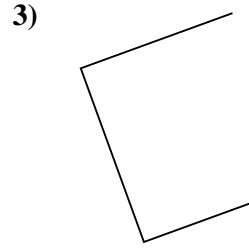
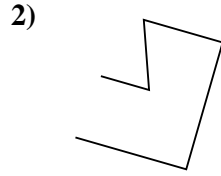
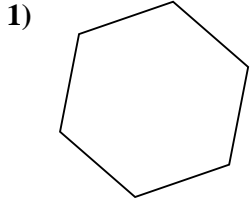


Respuestas

- 1. _____
- 2. _____
- 3. _____
- 4. _____
- 5. _____
- 6. _____
- 7. _____
- 8. _____
- 9. _____
- 10. _____
- 11. _____
- 12. _____
- 13. _____
- 14. _____
- 15. _____



Determinar si la forma mostrada es un Triángulo, Cuadrado, Rectángulo, Hexágono u Otra.



Respuestas

1. Hexágono

2. Otra

3. Otra

4. Triángulo

5. Cuadrado

6. Triángulo

7. Otra

8. Hexágono

9. Rectángulo

10. Otra

11. Triángulo

12. Otra

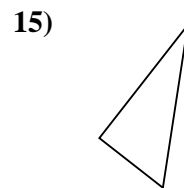
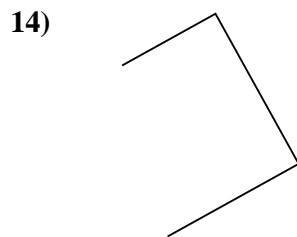
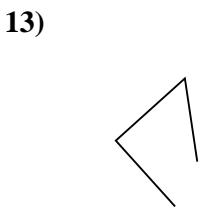
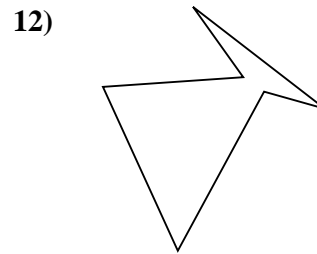
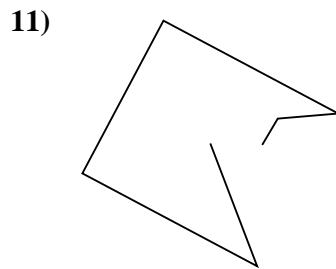
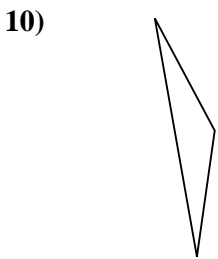
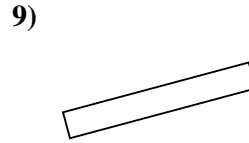
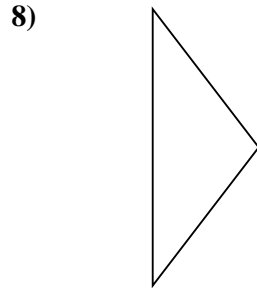
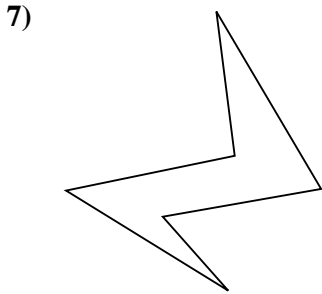
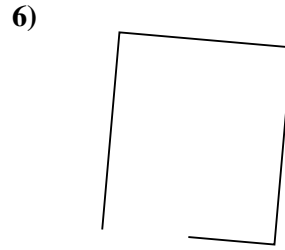
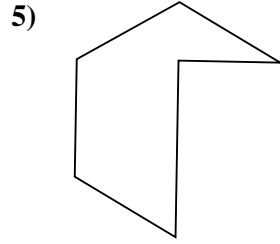

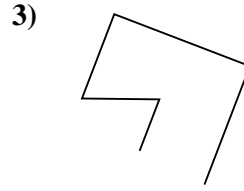
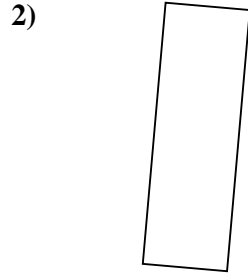
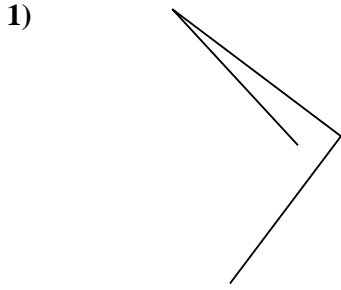
13. Rectángulo

14. Rectángulo

15. Otra



Determinar si la forma mostrada es un Triángulo, Cuadrado, Rectángulo, Hexágono u Otra.



Respuestas

1. _____

2. _____

3. _____

4. _____

5. _____

6. _____

7. _____

8. _____

9. _____

10. _____

11. _____

12. _____

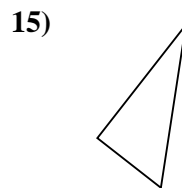
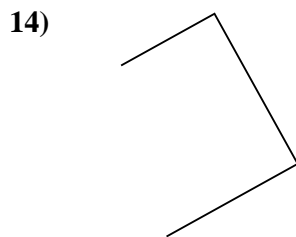
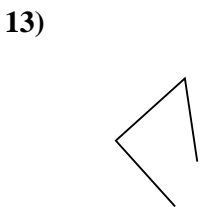
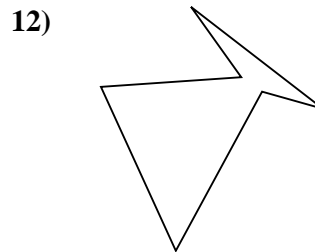
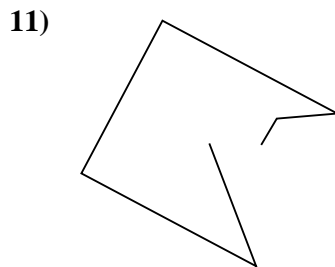
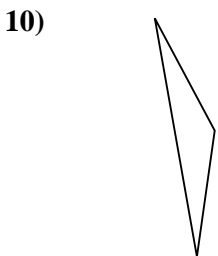
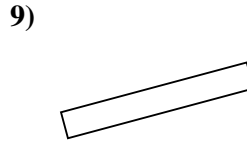
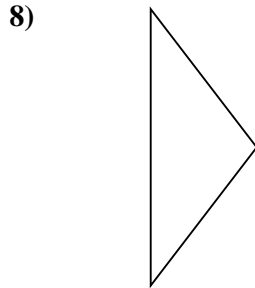
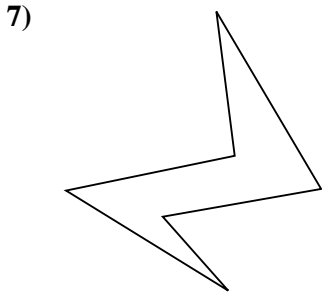
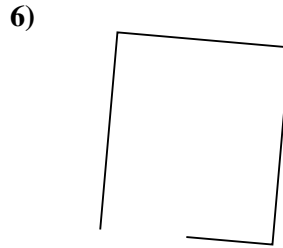
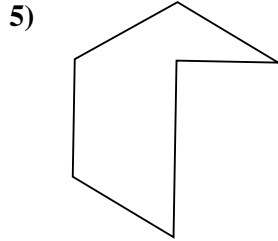

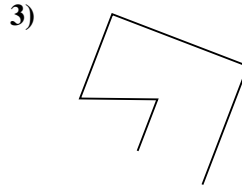
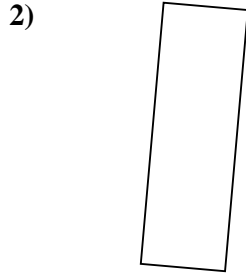
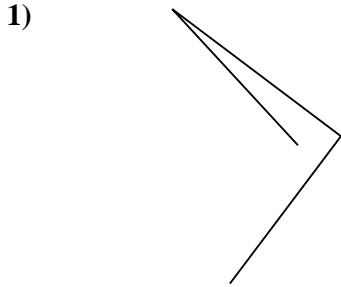
13. _____

14. _____

15. _____



Determinar si la forma mostrada es un Triángulo, Cuadrado, Rectángulo, Hexágono u Otra.



Respuestas

1. Otra

2. Rectángulo

3. Otra

4. Rectángulo

5. Hexágono

6. Otra

7. Hexágono

8. Triángulo

9. Rectángulo

10. Triángulo

11. Otra

12. Hexágono

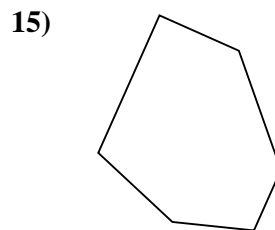
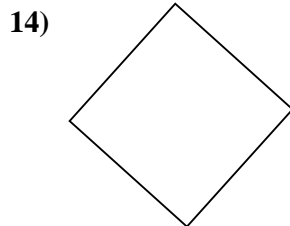
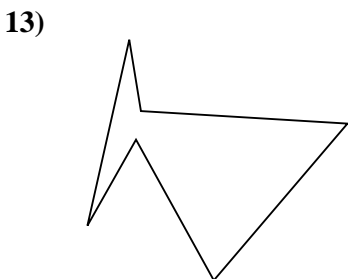
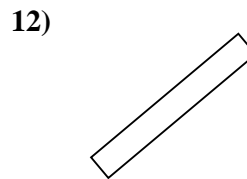
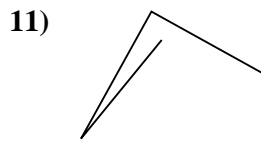
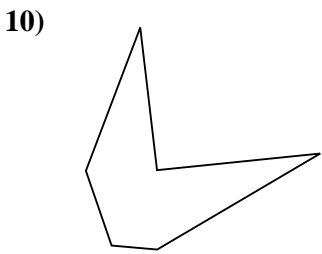
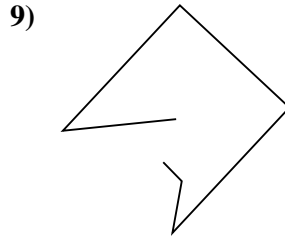
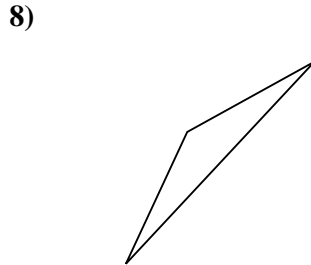
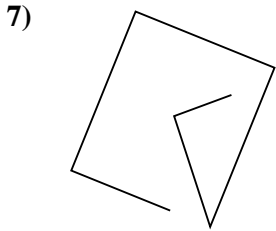
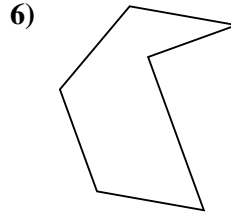
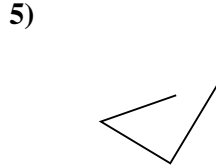
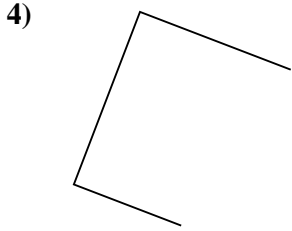
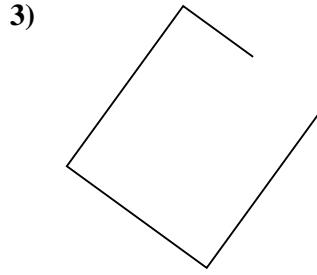
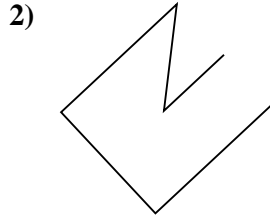
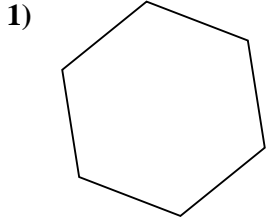
13. Otra

14. Otra

15. Triángulo



Determinar si la forma mostrada es un Triángulo, Cuadrado, Rectángulo, Hexágono u Otra.

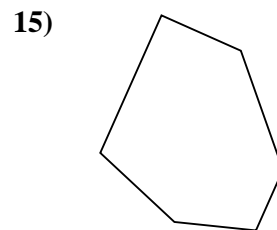
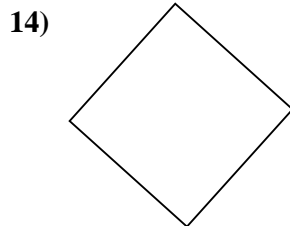
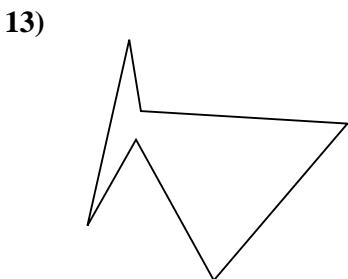
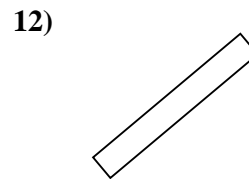
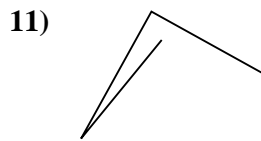
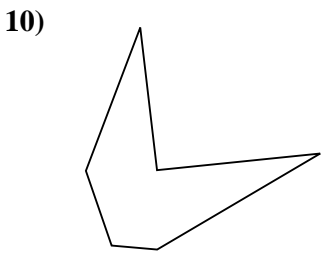
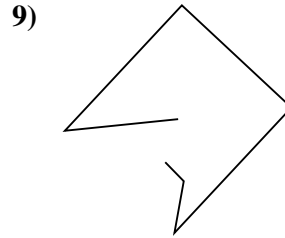
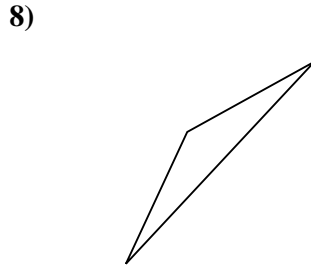
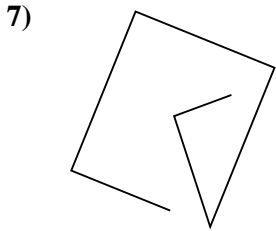
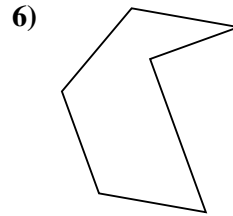
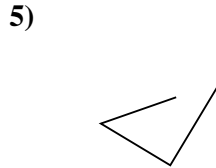
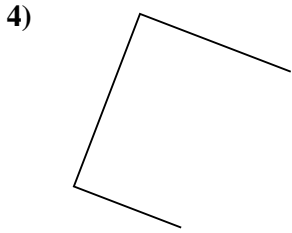
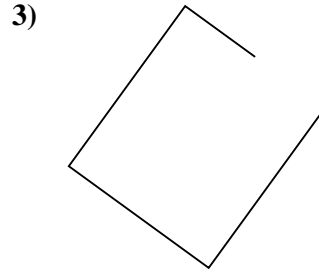
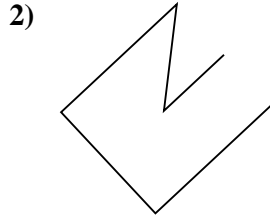
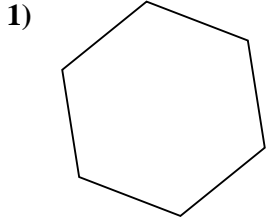


Respuestas

- 1. _____
- 2. _____
- 3. _____
- 4. _____
- 5. _____
- 6. _____
- 7. _____
- 8. _____
- 9. _____
- 10. _____
- 11. _____
- 12. _____
- 13. _____
- 14. _____
- 15. _____



Determinar si la forma mostrada es un Triángulo, Cuadrado, Rectángulo, Hexágono u Otra.



Respuestas

1. Hexágono

2. Otra

3. Otra

4. Otra

5. Otra

6. Hexágono

7. Otra

8. Triángulo

9. Otra

10. Hexágono

11. Otra

12. Rectángulo

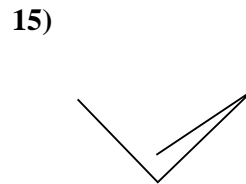
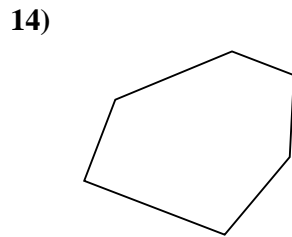
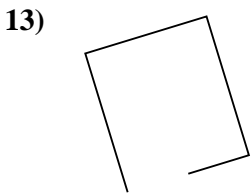
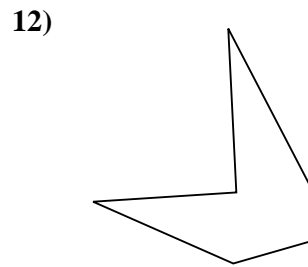
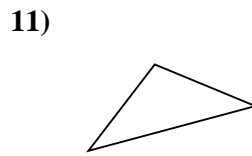
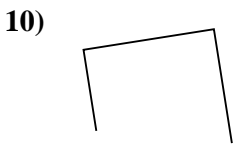
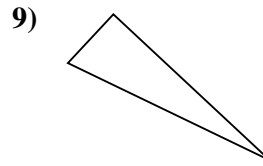
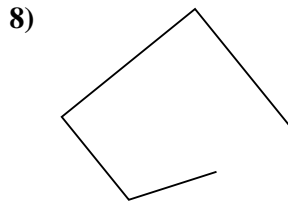
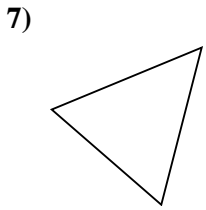
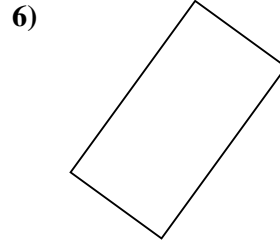
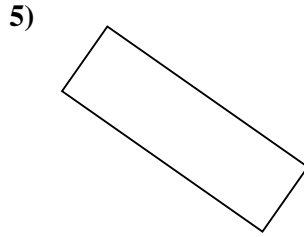
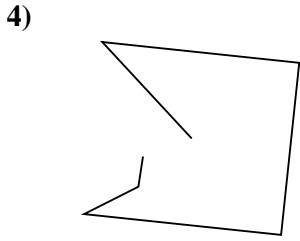
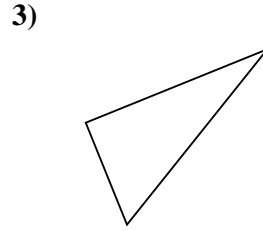
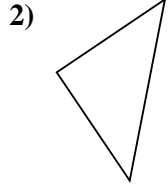
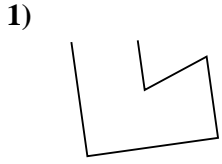
13. Hexágono

14. Cuadrado

15. Hexágono



Determinar si la forma mostrada es un Triángulo, Cuadrado, Rectángulo, Hexágono u Otra.



Respuestas

1. _____

2. _____

3. _____

4. _____

5. _____

6. _____

7. _____

8. _____

9. _____

10. _____

11. _____

12. _____

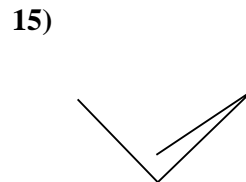
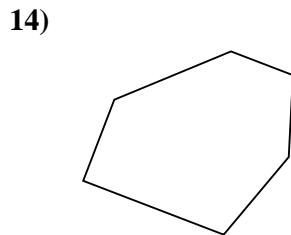
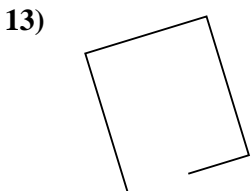
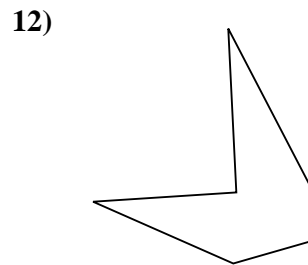
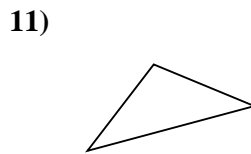
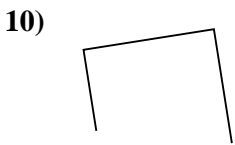
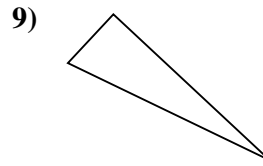
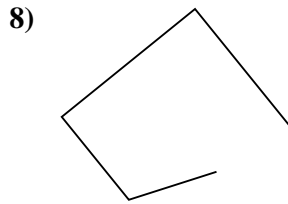
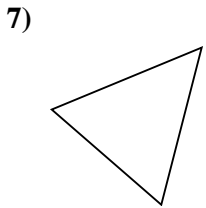
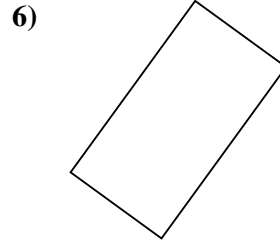
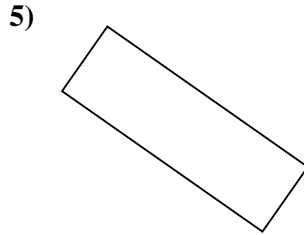
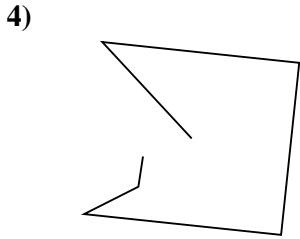
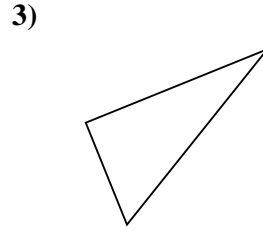
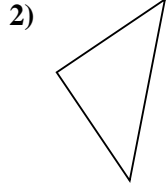
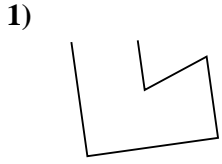
13. _____

14. _____

15. _____



Determinar si la forma mostrada es un Triángulo, Cuadrado, Rectángulo, Hexágono u Otra.



Respuestas

1. Otra

2. Triángulo

3. Triángulo

4. Otra

5. Rectángulo

6. Rectángulo

7. Triángulo

8. Otra

9. Triángulo

10. Otra

11. Triángulo

12. Hexágono

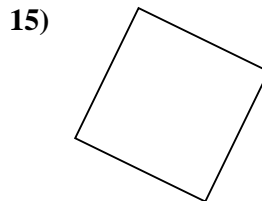
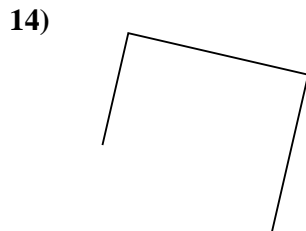
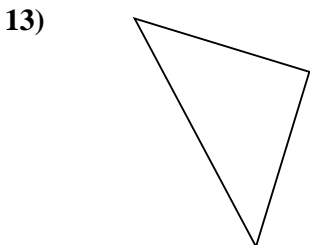
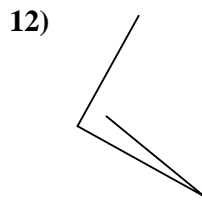
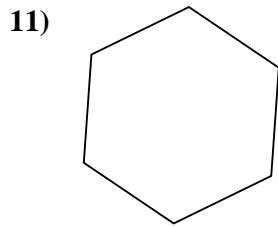
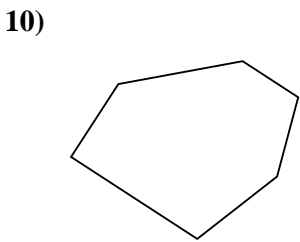
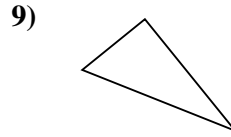
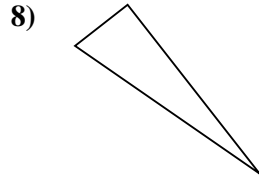
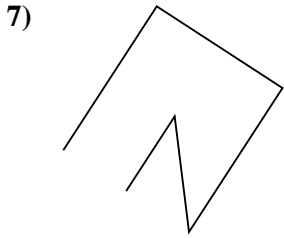
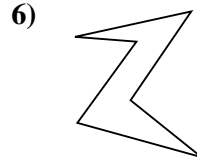
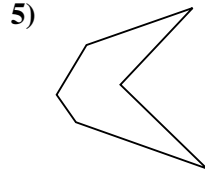
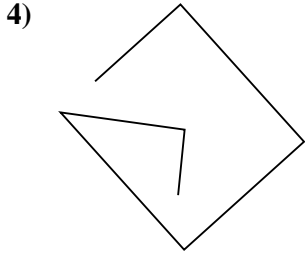
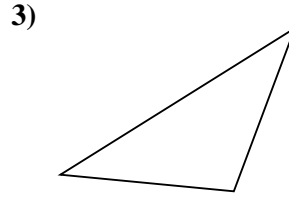
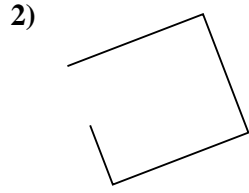
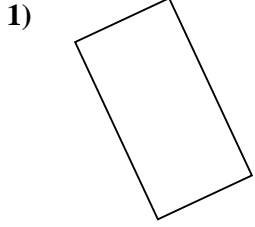
13. Otra

14. Hexágono

15. Otra



Determinar si la forma mostrada es un Triángulo, Cuadrado, Rectángulo, Hexágono u Otra.



Respuestas

1. _____

2. _____

3. _____

4. _____

5. _____

6. _____

7. _____

8. _____

9. _____

10. _____

11. _____

12. _____

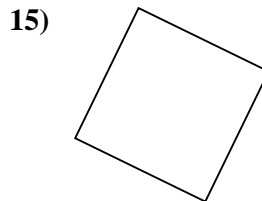
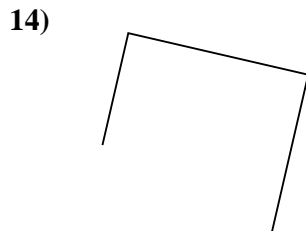
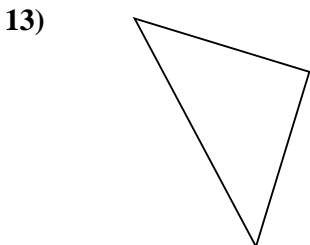
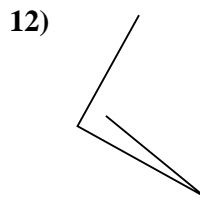
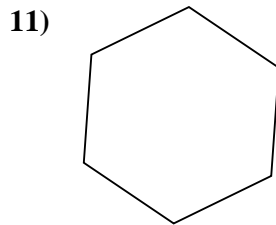
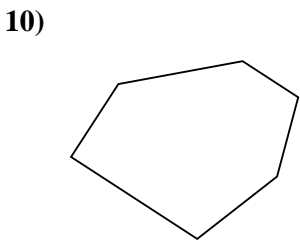
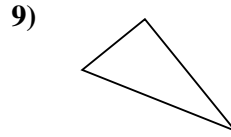
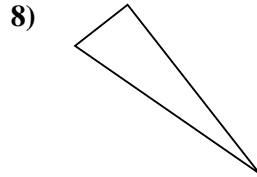
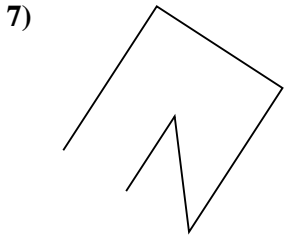
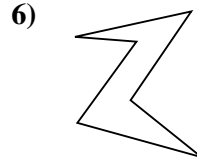
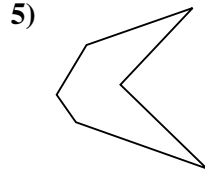
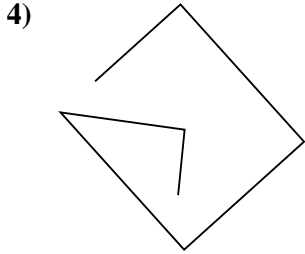
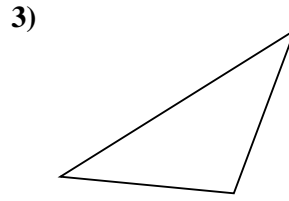
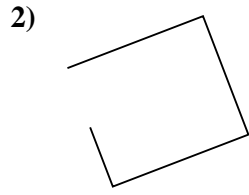
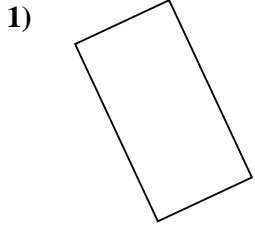
13. _____

14. _____

15. _____



Determinar si la forma mostrada es un Triángulo, Cuadrado, Rectángulo, Hexágono u Otra.



Respuestas

1. Rectángulo

2. Otra

3. Triángulo

4. Otra

5. Hexágono

6. Hexágono

7. Otra

8. Triángulo

9. Triángulo

10. Hexágono

11. Hexágono

12. Otra

13. Triángulo

14. Otra

15. Cuadrado

