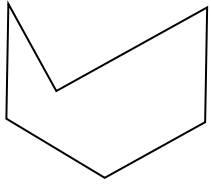


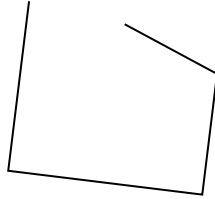


Determinar si la forma mostrada es un Triángulo, Cuadrado, Rectángulo, Hexágono u Otra.

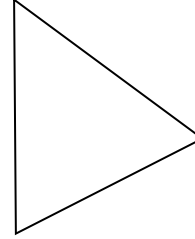
**Respuestas**



2)



3)

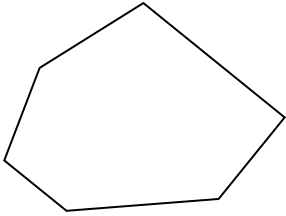


1. \_\_\_\_\_

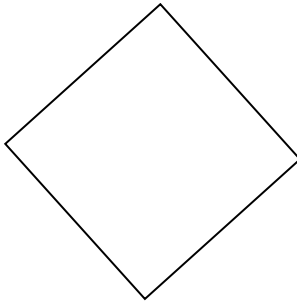
2. \_\_\_\_\_

3. \_\_\_\_\_

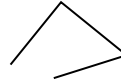
4)



5)



6)



4. \_\_\_\_\_

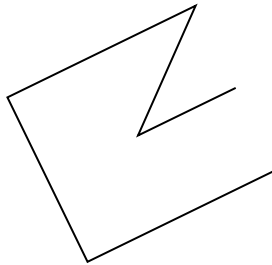
5. \_\_\_\_\_

6. \_\_\_\_\_

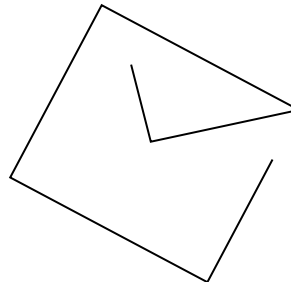
7)



8)



9)



7. \_\_\_\_\_

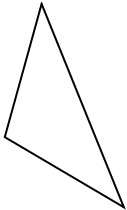
8. \_\_\_\_\_

9. \_\_\_\_\_

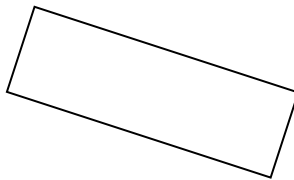
10. \_\_\_\_\_

11. \_\_\_\_\_


10)



11)



12)




12. \_\_\_\_\_

13. \_\_\_\_\_

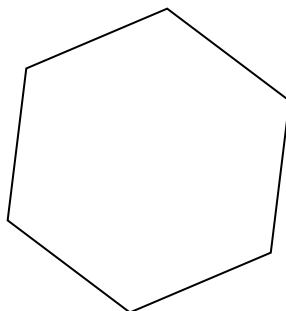
14. \_\_\_\_\_

15. \_\_\_\_\_

13)



14)



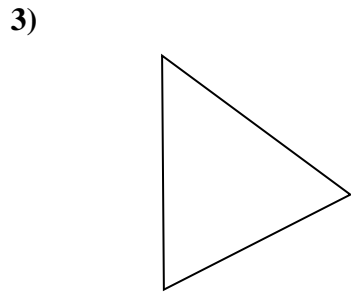
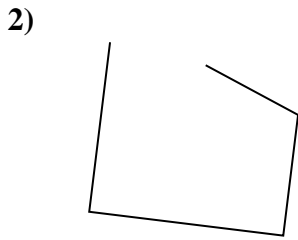
15)





Determinar si la forma mostrada es un Triángulo, Cuadrado, Rectángulo, Hexágono u Otra.

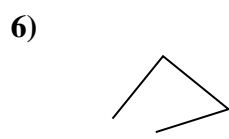
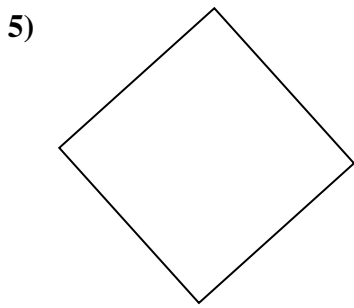
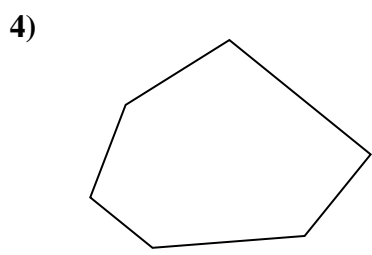
Respuestas



1. Hexágono

2. Otra

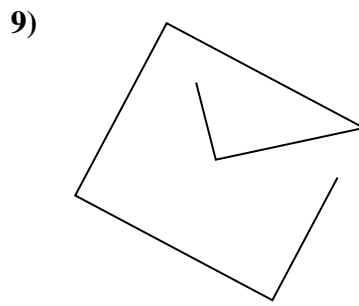
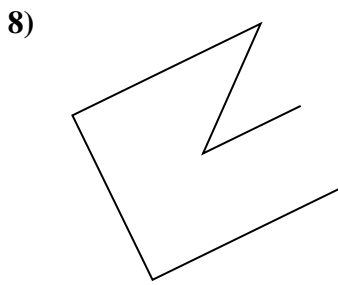
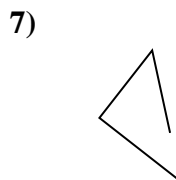
3. Triángulo



4. Hexágono

5. Cuadrado

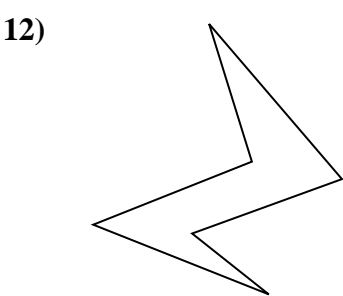
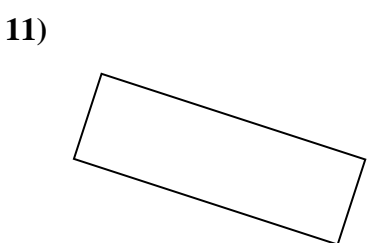
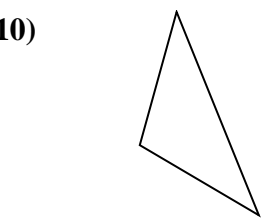
6. Otra



7. Otra

8. Otra

9. Otra

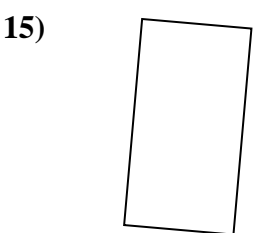
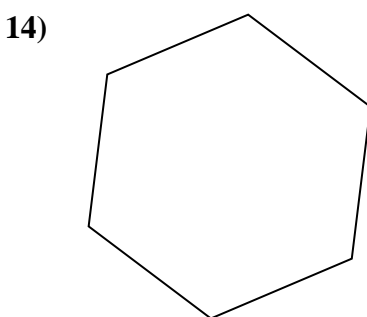
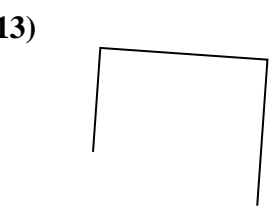


10. Triángulo

11. Rectángulo

12. Hexágono

13. Otra



14. Hexágono

15. Rectángulo