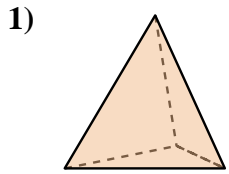
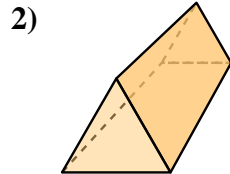




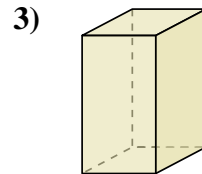
Determinar cuál de las opciones describe mejor la forma mostrada.



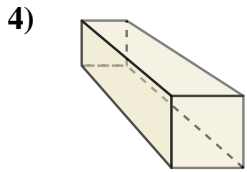
- 1) A. Cubo
- B. Esfera
- C. Triangular Prisma
- D. Triangular Pirámide



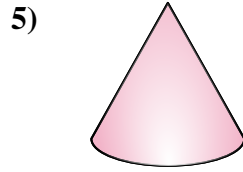
- 2) A. Esfera
- B. Triangular Pirámide
- C. Triangular Prisma
- D. Cono



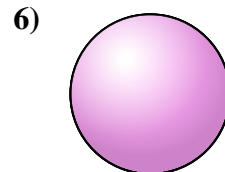
- 3) A. Prisma Rectangular
- B. Esfera
- C. Cubo
- D. Triangular Pirámide



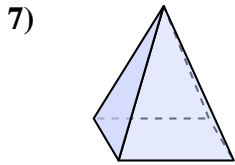
- 4) A. Triangular Pirámide
- B. Esfera
- C. Pirámide Rectangular
- D. Prisma Rectangular



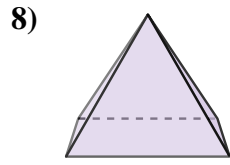
- 5) A. Cono
- B. Pirámide Rectangular
- C. Triangular Prisma
- D. Triangular Pirámide



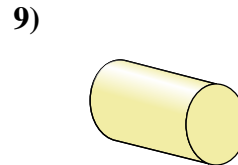
- 6) A. Cubo
- B. Triangular Pirámide
- C. Pirámide Rectangular
- D. Esfera



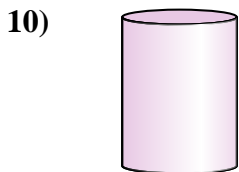
- 7) A. Cilindro
- B. Cono
- C. Triangular Prisma
- D. Pirámide Rectangular



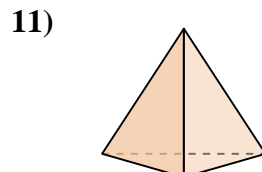
- 8) A. Triangular Pirámide
- B. Cubo
- C. Pirámide Rectangular
- D. Esfera



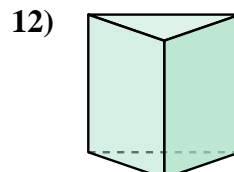
- 9) A. Triangular Pirámide
- B. Cubo
- C. Prisma Rectangular
- D. Cilindro



- 10) A. Esfera
- B. Cilindro
- C. Pirámide Rectangular
- D. Prisma Rectangular



- 11) A. Pirámide Rectangular
- B. Triangular Prisma
- C. Prisma Rectangular
- D. Triangular Pirámide



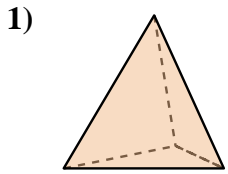
- 12) A. Cubo
- B. Triangular Pirámide
- C. Triangular Prisma
- D. Cilindro

Respuestas

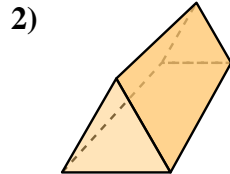
- 1. _____
- 2. _____
- 3. _____
- 4. _____
- 5. _____
- 6. _____
- 7. _____
- 8. _____
- 9. _____
- 10. _____
- 11. _____
- 12. _____



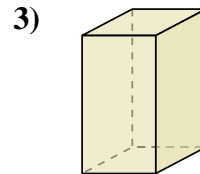
Determinar cuál de las opciones describe mejor la forma mostrada.



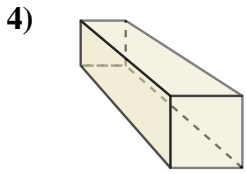
- A. Cubo
- B. Esfera
- C. Triangular Prisma
- D. Triangular Pirámide



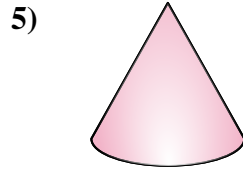
- A. Esfera
- B. Triangular Pirámide
- C. Triangular Prisma
- D. Cono



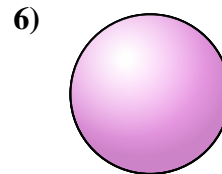
- A. Prisma Rectangular
- B. Esfera
- C. Cubo
- D. Triangular Pirámide



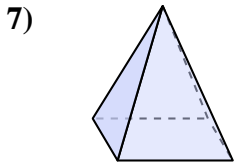
- A. Triangular Pirámide
- B. Esfera
- C. Pirámide Rectangular
- D. Prisma Rectangular



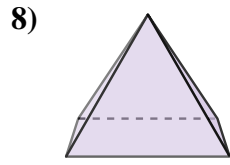
- A. Cono
- B. Pirámide Rectangular
- C. Triangular Prisma
- D. Triangular Pirámide



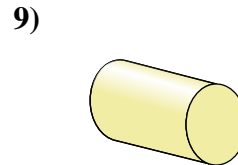
- A. Cubo
- B. Triangular Pirámide
- C. Pirámide Rectangular
- D. Esfera



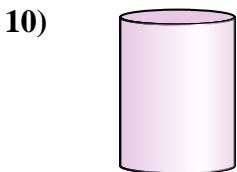
- A. Cilindro
- B. Cono
- C. Triangular Prisma
- D. Pirámide Rectangular



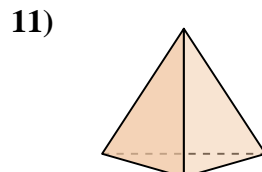
- A. Triangular Pirámide
- B. Cubo
- C. Pirámide Rectangular
- D. Esfera



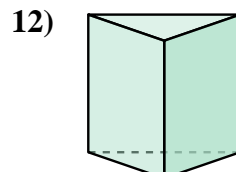
- A. Triangular Pirámide
- B. Cubo
- C. Prisma Rectangular
- D. Cilindro



- A. Esfera
- B. Cilindro
- C. Pirámide Rectangular
- D. Prisma Rectangular



- A. Pirámide Rectangular
- B. Triangular Prisma
- C. Prisma Rectangular
- D. Triangular Pirámide



- A. Cubo
- B. Triangular Pirámide
- C. Triangular Prisma
- D. Cilindro

Respuestas

- 1. **D**
- 2. **C**
- 3. **A**
- 4. **D**
- 5. **A**
- 6. **D**
- 7. **D**
- 8. **C**
- 9. **D**
- 10. **B**
- 11. **D**
- 12. **C**