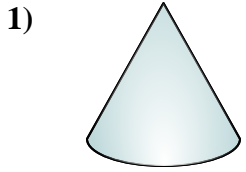
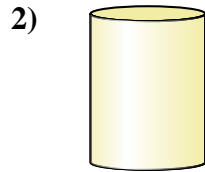




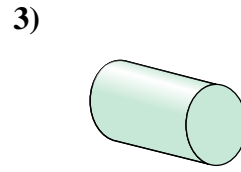
Determinar cuál de las opciones describe mejor la forma mostrada.



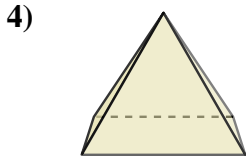
- 1) A. Cilindro
- B. Prisma Rectangular
- C. Cono
- D. Pirámide Rectangular



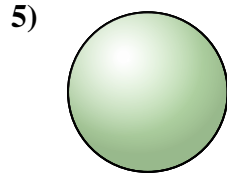
- 2) A. Cubo
- B. Triangular Prisma
- C. Cilindro
- D. Esfera



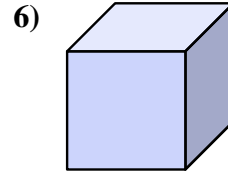
- 3) A. Triangular Pirámide
- B. Esfera
- C. Triangular Prisma
- D. Cilindro



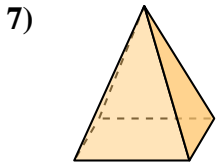
- 4) A. Esfera
- B. Pirámide Rectangular
- C. Triangular Pirámide
- D. Cono



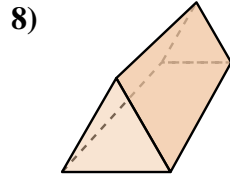
- 5) A. Pirámide Rectangular
- B. Triangular Prisma
- C. Esfera
- D. Prisma Rectangular



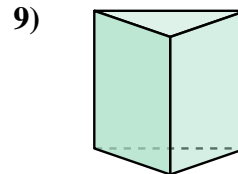
- 6) A. Prisma Rectangular
- B. Cono
- C. Pirámide Rectangular
- D. Cubo



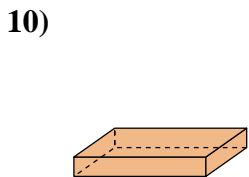
- 7) A. Triangular Pirámide
- B. Pirámide Rectangular
- C. Cubo
- D. Esfera



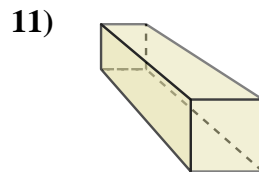
- 8) A. Prisma Rectangular
- B. Esfera
- C. Triangular Prisma
- D. Cubo



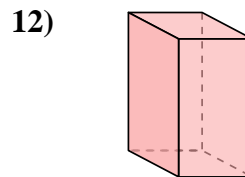
- 9) A. Cono
- B. Triangular Pirámide
- C. Triangular Prisma
- D. Cubo



- 10) A. Cono
- B. Pirámide Rectangular
- C. Triangular Prisma
- D. Prisma Rectangular



- 11) A. Cilindro
- B. Esfera
- C. Prisma Rectangular
- D. Triangular Pirámide



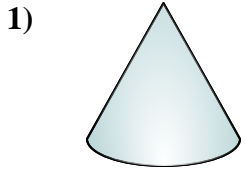
- 12) A. Triangular Prisma
- B. Cilindro
- C. Prisma Rectangular
- D. Triangular Pirámide

**Respuestas**

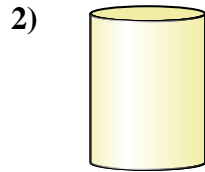
- 1. \_\_\_\_\_
- 2. \_\_\_\_\_
- 3. \_\_\_\_\_
- 4. \_\_\_\_\_
- 5. \_\_\_\_\_
- 6. \_\_\_\_\_
- 7. \_\_\_\_\_
- 8. \_\_\_\_\_
- 9. \_\_\_\_\_
- 10. \_\_\_\_\_
- 11. \_\_\_\_\_
- 12. \_\_\_\_\_



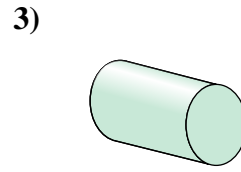
Determinar cuál de las opciones describe mejor la forma mostrada.



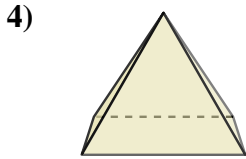
- A. Cilindro
- B. Prisma Rectangular
- C. Cono
- D. Pirámide Rectangular



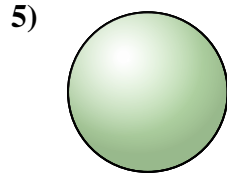
- A. Cubo
- B. Triangular Prisma
- C. Cilindro
- D. Esfera



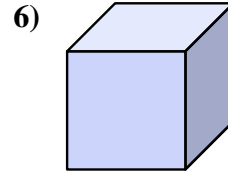
- A. Triangular Pirámide
- B. Esfera
- C. Triangular Prisma
- D. Cilindro



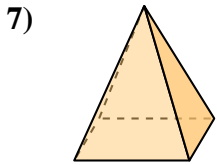
- A. Esfera
- B. Pirámide Rectangular
- C. Triangular Pirámide
- D. Cono



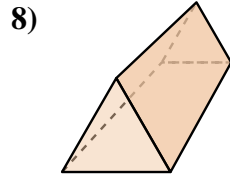
- A. Pirámide Rectangular
- B. Triangular Prisma
- C. Esfera
- D. Prisma Rectangular



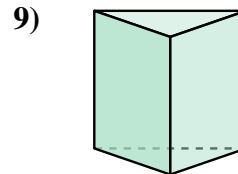
- A. Prisma Rectangular
- B. Cono
- C. Pirámide Rectangular
- D. Cubo



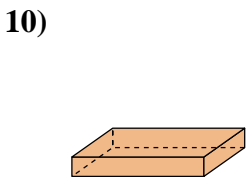
- A. Triangular Pirámide
- B. Pirámide Rectangular
- C. Cubo
- D. Esfera



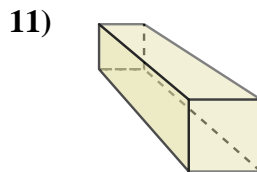
- A. Prisma Rectangular
- B. Esfera
- C. Triangular Prisma
- D. Cubo



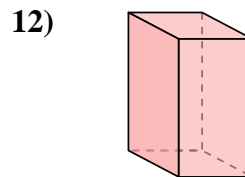
- A. Cono
- B. Triangular Pirámide
- C. Triangular Prisma
- D. Cubo



- A. Cono
- B. Pirámide Rectangular
- C. Triangular Prisma
- D. Prisma Rectangular



- A. Cilindro
- B. Esfera
- C. Prisma Rectangular
- D. Triangular Pirámide



- A. Triangular Prisma
- B. Cilindro
- C. Prisma Rectangular
- D. Triangular Pirámide

**Respuestas**

- 1.           **C**
- 2.           **C**
- 3.           **D**
- 4.           **B**
- 5.           **C**
- 6.           **D**
- 7.           **B**
- 8.           **C**
- 9.           **C**
- 10.          **D**
- 11.           **C**
- 12.           **C**