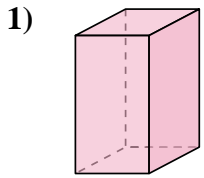
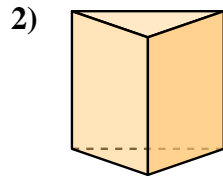




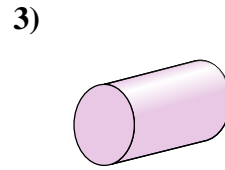
Determinar cuál de las opciones describe mejor la forma mostrada.



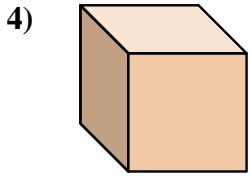
- 1) A. Prisma Rectangular
- B. Cilindro
- C. Cubo
- D. Cono



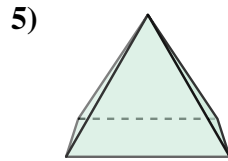
- 2) A. Prisma Rectangular
- B. Pirámide Rectangular
- C. Cilindro
- D. Triangular Prisma



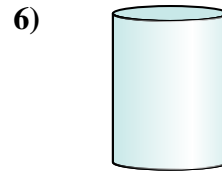
- 3) A. Cubo
- B. Pirámide Rectangular
- C. Cilindro
- D. Prisma Rectangular



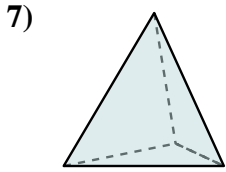
- 4) A. Cono
- B. Triangular Prisma
- C. Cubo
- D. Pirámide Rectangular



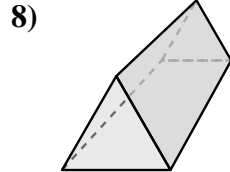
- 5) A. Triangular Pirámide
- B. Esfera
- C. Pirámide Rectangular
- D. Cono



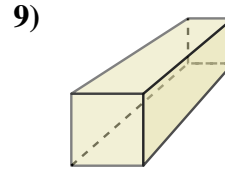
- 6) A. Cono
- B. Triangular Prisma
- C. Triangular Pirámide
- D. Cilindro



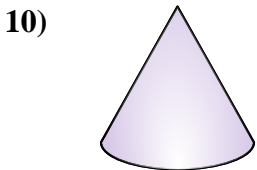
- 7) A. Prisma Rectangular
- B. Esfera
- C. Cono
- D. Triangular Pirámide



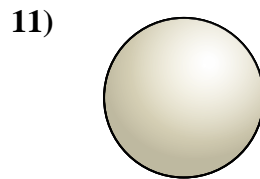
- 8) A. Prisma Rectangular
- B. Esfera
- C. Triangular Prisma
- D. Cilindro



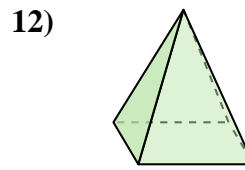
- 9) A. Prisma Rectangular
- B. Cono
- C. Triangular Prisma
- D. Esfera



- 10) A. Cono
- B. Cubo
- C. Prisma Rectangular
- D. Triangular Prisma



- 11) A. Esfera
- B. Prisma Rectangular
- C. Cilindro
- D. Cono



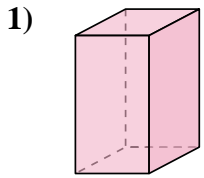
- 12) A. Pirámide Rectangular
- B. Cilindro
- C. Cono
- D. Cubo

Respuestas

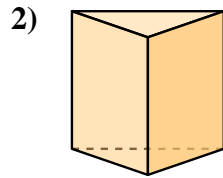
- 1. _____
- 2. _____
- 3. _____
- 4. _____
- 5. _____
- 6. _____
- 7. _____
- 8. _____
- 9. _____
- 10. _____
- 11. _____
- 12. _____



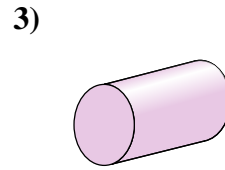
Determinar cuál de las opciones describe mejor la forma mostrada.



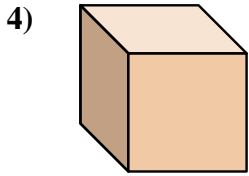
- 1) A. Prisma Rectangular
- B. Cilindro
- C. Cubo
- D. Cono



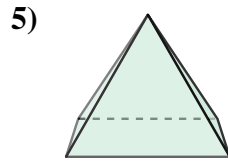
- 2) A. Prisma Rectangular
- B. Pirámide Rectangular
- C. Cilindro
- D. Triangular Prisma



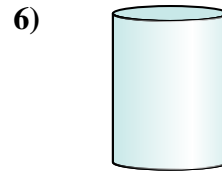
- 3) A. Cubo
- B. Pirámide Rectangular
- C. Cilindro
- D. Prisma Rectangular



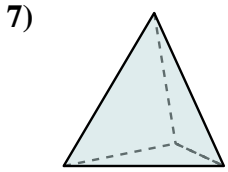
- 4) A. Cono
- B. Triangular Prisma
- C. Cubo
- D. Pirámide Rectangular



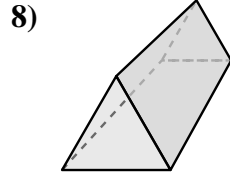
- 5) A. Triangular Pirámide
- B. Esfera
- C. Pirámide Rectangular
- D. Cono



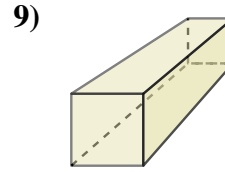
- 6) A. Cono
- B. Triangular Prisma
- C. Triangular Pirámide
- D. Cilindro



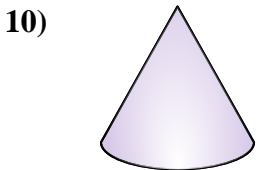
- 7) A. Prisma Rectangular
- B. Esfera
- C. Cono
- D. Triangular Pirámide



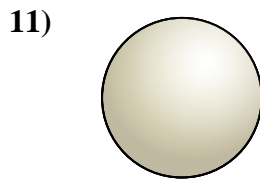
- 8) A. Prisma Rectangular
- B. Esfera
- C. Triangular Prisma
- D. Cilindro



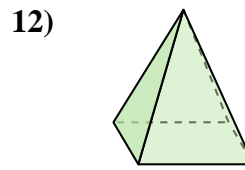
- 9) A. Prisma Rectangular
- B. Cono
- C. Triangular Prisma
- D. Esfera



- 10) A. Cono
- B. Cubo
- C. Prisma Rectangular
- D. Triangular Prisma



- 11) A. Esfera
- B. Prisma Rectangular
- C. Cilindro
- D. Cono



- 12) A. Pirámide Rectangular
- B. Cilindro
- C. Cono
- D. Cubo

Respuestas

1. **A**

2. **D**

3. **C**

4. **C**

5. **C**

6. **D**

7. **D**

8. **C**

9. **A**

10. **A**

11. **A**

12. **A**