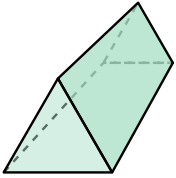




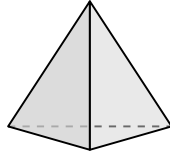
Determinar cuál de las opciones describe mejor la forma mostrada.

1)



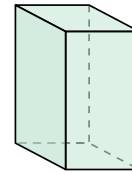
- A. Cilindro
- B. Triangular Prisma
- C. Cubo
- D. Prisma Rectangular

2)



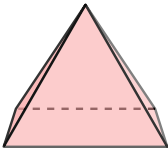
- A. Triangular Pirámide
- B. Pirámide Rectangular
- C. Cono
- D. Esfera

3)



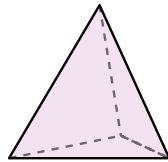
- A. Triangular Prisma
- B. Prisma Rectangular
- C. Esfera
- D. Triangular Pirámide

4)



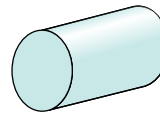
- A. Pirámide Rectangular
- B. Esfera
- C. Cilindro
- D. Cono

5)




- A. Esfera
- B. Cubo
- C. Prisma Rectangular
- D. Triangular Pirámide

6)



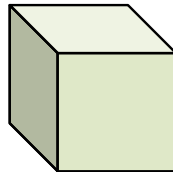
- A. Cono
- B. Cubo
- C. Cilindro
- D. Triangular Pirámide

7)



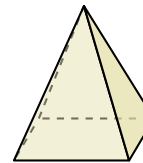
- A. Pirámide Rectangular
- B. Esfera
- C. Triangular Prisma
- D. Cono

8)



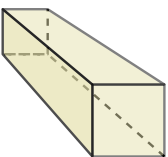
- A. Cono
- B. Cubo
- C. Prisma Rectangular
- D. Triangular Pirámide

9)



- A. Esfera
- B. Triangular Pirámide
- C. Cono
- D. Pirámide Rectangular

10)



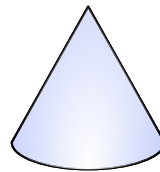
- A. Prisma Rectangular
- B. Esfera
- C. Triangular Pirámide
- D. Cono

11)



- A. Triangular Pirámide
- B. Triangular Prisma
- C. Cilindro
- D. Prisma Rectangular

12)



- A. Prisma Rectangular
- B. Cono
- C. Triangular Prisma
- D. Cilindro

Respuestas

1. _____

2. _____

3. _____

4. _____

5. _____

6. _____

7. _____

8. _____

9. _____

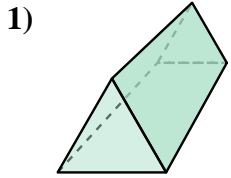
10. _____

11. _____

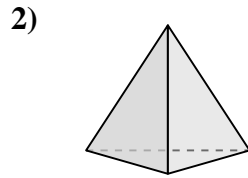
12. _____



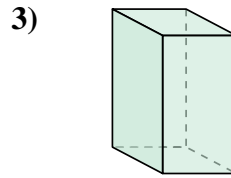
Determinar cuál de las opciones describe mejor la forma mostrada.



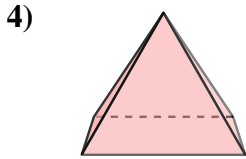
- 1) A. Cilindro
- B. Triangular Prisma
- C. Cubo
- D. Prisma Rectangular



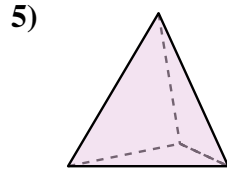
- 2) A. Triangular Pirámide
- B. Pirámide Rectangular
- C. Cono
- D. Esfera



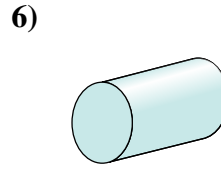
- 3) A. Triangular Prisma
- B. Prisma Rectangular
- C. Esfera
- D. Triangular Pirámide



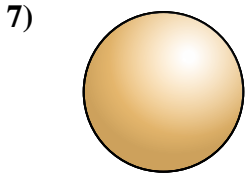
- 4) A. Pirámide Rectangular
- B. Esfera
- C. Cilindro
- D. Cono



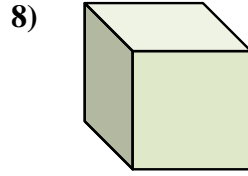
- 5) A. Esfera
- B. Cubo
- C. Prisma Rectangular
- D. Triangular Pirámide



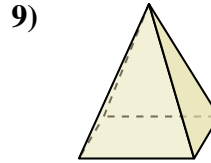
- 6) A. Cono
- B. Cubo
- C. Cilindro
- D. Triangular Pirámide



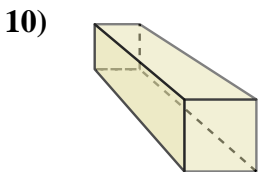
- 7) A. Pirámide Rectangular
- B. Esfera
- C. Triangular Prisma
- D. Cono



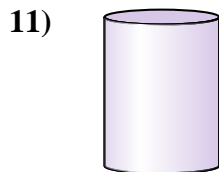
- 8) A. Cono
- B. Cubo
- C. Prisma Rectangular
- D. Triangular Pirámide



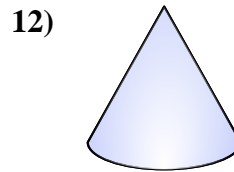
- 9) A. Esfera
- B. Triangular Pirámide
- C. Cono
- D. Pirámide Rectangular



- 10) A. Prisma Rectangular
- B. Esfera
- C. Triangular Pirámide
- D. Cono



- 11) A. Triangular Pirámide
- B. Triangular Prisma
- C. Cilindro
- D. Prisma Rectangular



- 12) A. Prisma Rectangular
- B. Cono
- C. Triangular Prisma
- D. Cilindro

Respuestas

- 1. **B**
- 2. **A**
- 3. **B**
- 4. **A**
- 5. **D**
- 6. **C**
- 7. **B**
- 8. **B**
- 9. **D**
- 10. **A**
- 11. **C**
- 12. **B**