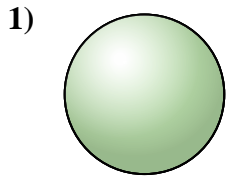
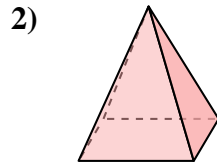




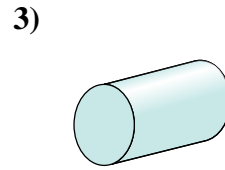
Determinar cuál de las opciones describe mejor la forma mostrada.



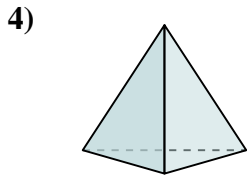
- 1) A. Cono
- B. Prisma Rectangular
- C. Esfera
- D. Pirámide Rectangular



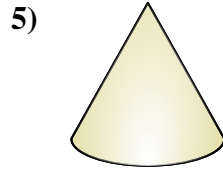
- 2) A. Triangular Prisma
- B. Cilindro
- C. Triangular Pirámide
- D. Pirámide Rectangular



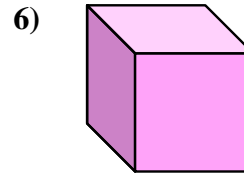
- 3) A. Cilindro
- B. Pirámide Rectangular
- C. Triangular Prisma
- D. Esfera



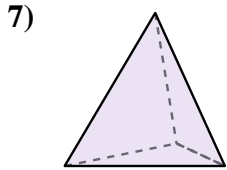
- 4) A. Triangular Pirámide
- B. Esfera
- C. Cubo
- D. Prisma Rectangular



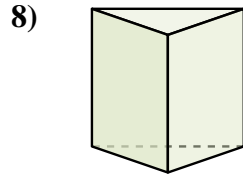
- 5) A. Cono
- B. Cilindro
- C. Pirámide Rectangular
- D. Cubo



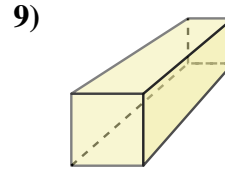
- 6) A. Prisma Rectangular
- B. Triangular Prisma
- C. Cono
- D. Cubo



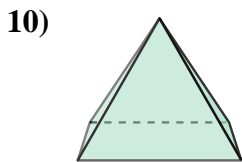
- 7) A. Cubo
- B. Triangular Pirámide
- C. Cono
- D. Esfera



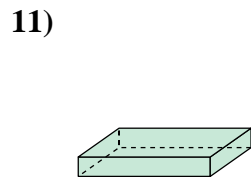
- 8) A. Cilindro
- B. Triangular Prisma
- C. Esfera
- D. Pirámide Rectangular



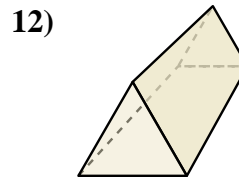
- 9) A. Prisma Rectangular
- B. Triangular Pirámide
- C. Cilindro
- D. Pirámide Rectangular



- 10) A. Prisma Rectangular
- B. Pirámide Rectangular
- C. Triangular Pirámide
- D. Esfera



- 11) A. Triangular Prisma
- B. Triangular Pirámide
- C. Prisma Rectangular
- D. Cono



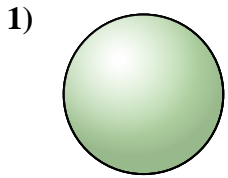
- 12) A. Triangular Pirámide
- B. Triangular Prisma
- C. Prisma Rectangular
- D. Cubo

Respuestas

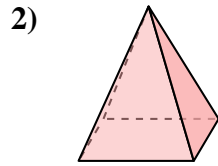
- 1. _____
- 2. _____
- 3. _____
- 4. _____
- 5. _____
- 6. _____
- 7. _____
- 8. _____
- 9. _____
- 10. _____
- 11. _____
- 12. _____



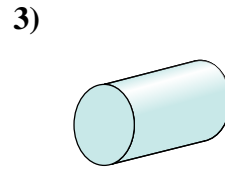
Determinar cuál de las opciones describe mejor la forma mostrada.



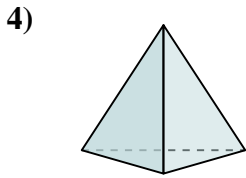
- A. Cono
- B. Prisma Rectangular
- C. Esfera
- D. Pirámide Rectangular



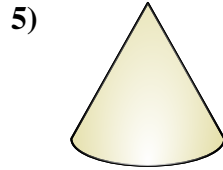
- A. Triangular Prisma
- B. Cilindro
- C. Triangular Pirámide
- D. Pirámide Rectangular



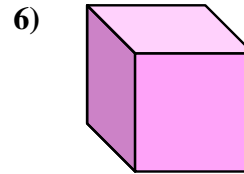
- A. Cilindro
- B. Pirámide Rectangular
- C. Triangular Prisma
- D. Esfera



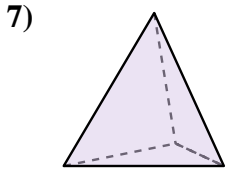
- A. Triangular Pirámide
- B. Esfera
- C. Cubo
- D. Prisma Rectangular



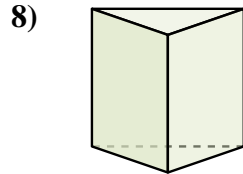
- A. Cono
- B. Cilindro
- C. Pirámide Rectangular
- D. Cubo



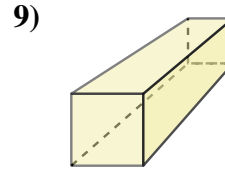
- A. Prisma Rectangular
- B. Triangular Prisma
- C. Cono
- D. Cubo



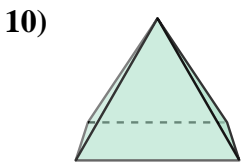
- A. Cubo
- B. Triangular Pirámide
- C. Cono
- D. Esfera



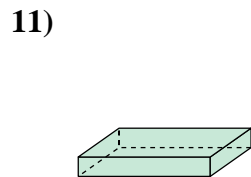
- A. Cilindro
- B. Triangular Prisma
- C. Esfera
- D. Pirámide Rectangular



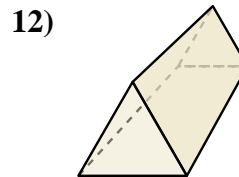
- A. Prisma Rectangular
- B. Triangular Pirámide
- C. Cilindro
- D. Pirámide Rectangular



- A. Prisma Rectangular
- B. Pirámide Rectangular
- C. Triangular Pirámide
- D. Esfera



- A. Triangular Prisma
- B. Triangular Pirámide
- C. Prisma Rectangular
- D. Cono



- A. Triangular Pirámide
- B. Triangular Prisma
- C. Prisma Rectangular
- D. Cubo

Respuestas

- 1. **C**
- 2. **D**
- 3. **A**
- 4. **A**
- 5. **A**
- 6. **D**
- 7. **B**
- 8. **B**
- 9. **A**
- 10. **B**
- 11. **C**
- 12. **B**