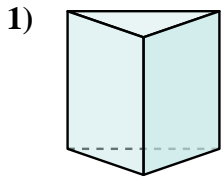


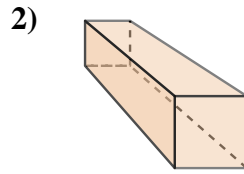


Determinar cuál de las opciones describe mejor la forma mostrada.

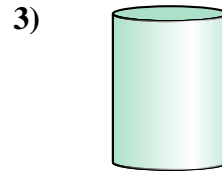
Respuestas



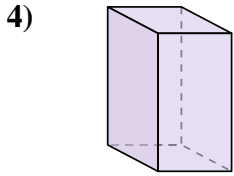
- A. Cono
- B. Triangular Prisma
- C. Triangular Pirámide
- D. Cubo



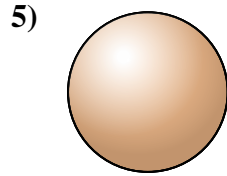
- A. Cilindro
- B. Pirámide Rectangular
- C. Prisma Rectangular
- D. Cono



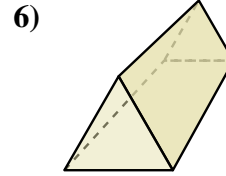
- A. Esfera
- B. Cubo
- C. Pirámide Rectangular
- D. Cilindro



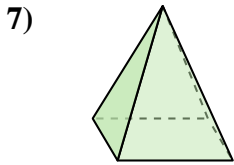
- A. Cubo
- B. Cilindro
- C. Prisma Rectangular
- D. Triangular Prisma



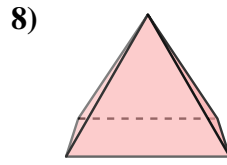
- A. Triangular Pirámide
- B. Cubo
- C. Esfera
- D. Cono



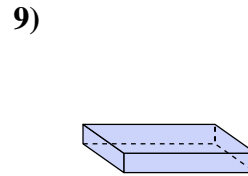
- A. Cilindro
- B. Triangular Prisma
- C. Esfera
- D. Triangular Pirámide



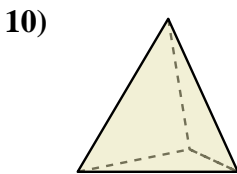
- A. Triangular Prisma
- B. Pirámide Rectangular
- C. Cubo
- D. Esfera



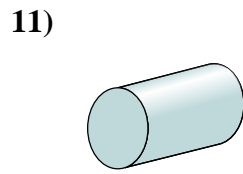
- A. Pirámide Rectangular
- B. Cilindro
- C. Cubo
- D. Prisma Rectangular



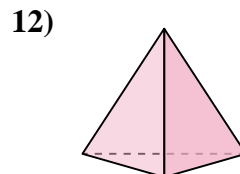
- A. Cilindro
- B. Triangular Prisma
- C. Prisma Rectangular
- D. Cubo



- A. Esfera
- B. Prisma Rectangular
- C. Triangular Pirámide
- D. Cubo



- A. Esfera
- B. Cilindro
- C. Prisma Rectangular
- D. Cubo



- A. Triangular Prisma
- B. Triangular Pirámide
- C. Pirámide Rectangular
- D. Cilindro

1. _____

2. _____

3. _____

4. _____

5. _____

6. _____

7. _____

8. _____

9. _____

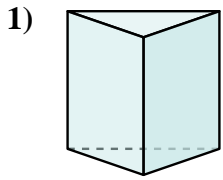
10. _____

11. _____

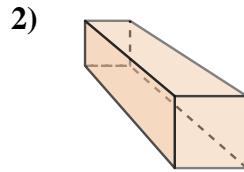
12. _____



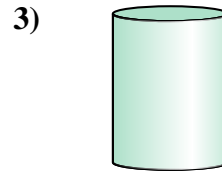
Determinar cuál de las opciones describe mejor la forma mostrada.



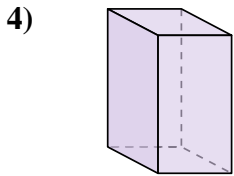
- A. Cono
- B. Triangular Prisma
- C. Triangular Pirámide
- D. Cubo



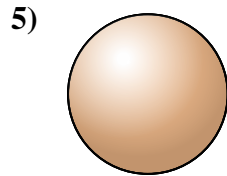
- A. Cilindro
- B. Pirámide Rectangular
- C. Prisma Rectangular
- D. Cono



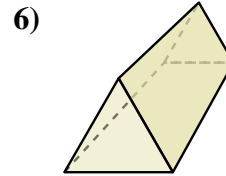
- A. Esfera
- B. Cubo
- C. Pirámide Rectangular
- D. Cilindro



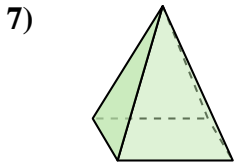
- A. Cubo
- B. Cilindro
- C. Prisma Rectangular
- D. Triangular Prisma



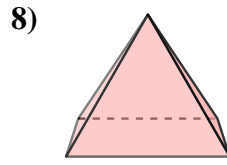
- A. Triangular Pirámide
- B. Cubo
- C. Esfera
- D. Cono



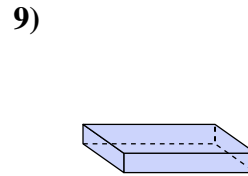
- A. Cilindro
- B. Triangular Prisma
- C. Esfera
- D. Triangular Pirámide



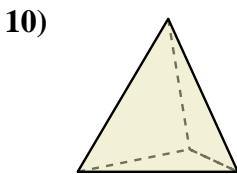
- A. Triangular Prisma
- B. Pirámide Rectangular
- C. Cubo
- D. Esfera



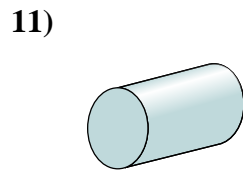
- A. Pirámide Rectangular
- B. Cilindro
- C. Cubo
- D. Prisma Rectangular



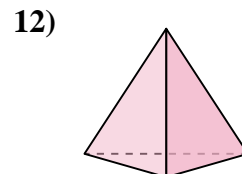
- A. Cilindro
- B. Triangular Prisma
- C. Prisma Rectangular
- D. Cubo



- A. Esfera
- B. Prisma Rectangular
- C. Triangular Pirámide
- D. Cubo



- A. Esfera
- B. Cilindro
- C. Prisma Rectangular
- D. Cubo



- A. Triangular Prisma
- B. Triangular Pirámide
- C. Pirámide Rectangular
- D. Cilindro

Respuestas

- 1. **B**
- 2. **C**
- 3. **D**
- 4. **C**
- 5. **C**
- 6. **B**
- 7. **B**
- 8. **A**
- 9. **C**
- 10. **C**
- 11. **B**
- 12. **B**