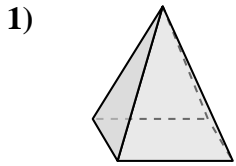


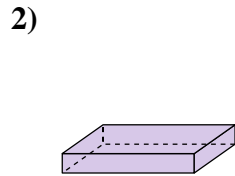


Determinar cuál de las opciones describe mejor la forma mostrada.

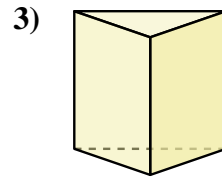
**Respuestas**



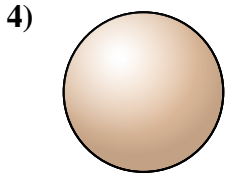
- 1) A. Prisma Rectangular
- B. Pirámide Rectangular
- C. Triangular Pirámide
- D. Esfera



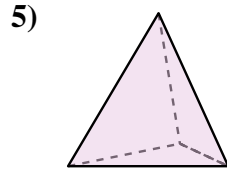
- 2) A. Prisma Rectangular
- B. Triangular Prisma
- C. Pirámide Rectangular
- D. Cono



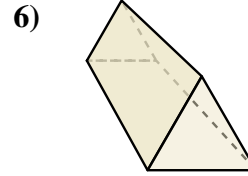
- 3) A. Cono
- B. Triangular Prisma
- C. Esfera
- D. Triangular Pirámide



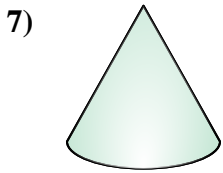
- 4) A. Esfera
- B. Cubo
- C. Prisma Rectangular
- D. Triangular Pirámide



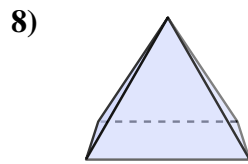
- 5) A. Cilindro
- B. Cono
- C. Triangular Pirámide
- D. Esfera



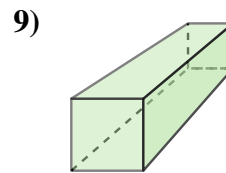
- 6) A. Prisma Rectangular
- B. Triangular Prisma
- C. Cilindro
- D. Triangular Pirámide



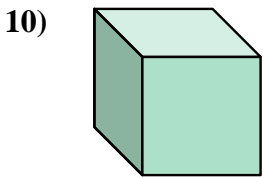
- 7) A. Triangular Prisma
- B. Prisma Rectangular
- C. Cono
- D. Triangular Pirámide



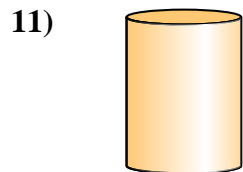
- 8) A. Prisma Rectangular
- B. Esfera
- C. Pirámide Rectangular
- D. Cono



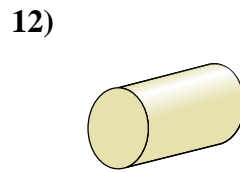
- 9) A. Cubo
- B. Prisma Rectangular
- C. Pirámide Rectangular
- D. Esfera



- 10) A. Cubo
- B. Cilindro
- C. Pirámide Rectangular
- D. Prisma Rectangular



- 11) A. Cono
- B. Esfera
- C. Cilindro
- D. Pirámide Rectangular



- 12) A. Pirámide Rectangular
- B. Triangular Prisma
- C. Prisma Rectangular
- D. Cilindro

1. \_\_\_\_\_

2. \_\_\_\_\_

3. \_\_\_\_\_

4. \_\_\_\_\_

5. \_\_\_\_\_

6. \_\_\_\_\_

7. \_\_\_\_\_

8. \_\_\_\_\_

9. \_\_\_\_\_

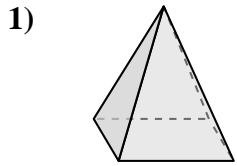
10. \_\_\_\_\_

11. \_\_\_\_\_

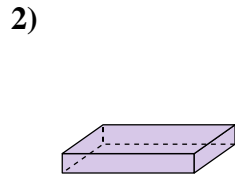
12. \_\_\_\_\_



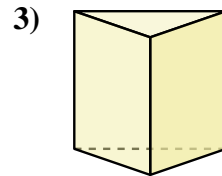
Determinar cuál de las opciones describe mejor la forma mostrada.



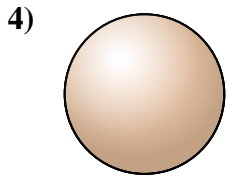
- A. Prisma Rectangular
- B. Pirámide Rectangular
- C. Triangular Pirámide
- D. Esfera



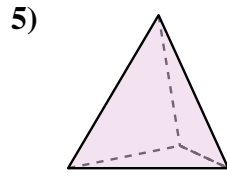
- A. Prisma Rectangular
- B. Triangular Prisma
- C. Pirámide Rectangular
- D. Cono



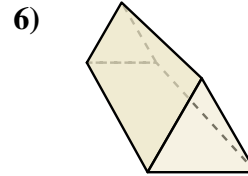
- A. Cono
- B. Triangular Prisma
- C. Esfera
- D. Triangular Pirámide



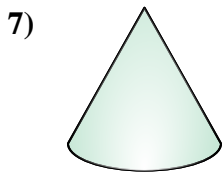
- A. Esfera
- B. Cubo
- C. Prisma Rectangular
- D. Triangular Pirámide



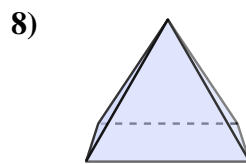
- A. Cilindro
- B. Cono
- C. Triangular Pirámide
- D. Esfera



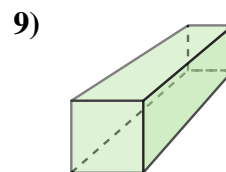
- A. Prisma Rectangular
- B. Triangular Prisma
- C. Cilindro
- D. Triangular Pirámide



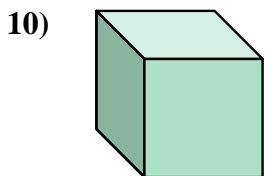
- A. Triangular Prisma
- B. Prisma Rectangular
- C. Cono
- D. Triangular Pirámide



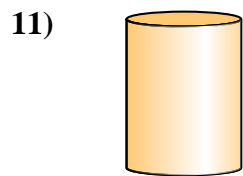
- A. Prisma Rectangular
- B. Esfera
- C. Pirámide Rectangular
- D. Cono



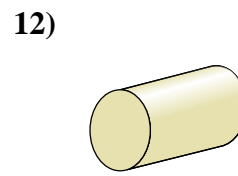
- A. Cubo
- B. Prisma Rectangular
- C. Pirámide Rectangular
- D. Esfera



- A. Cubo
- B. Cilindro
- C. Pirámide Rectangular
- D. Prisma Rectangular



- A. Cono
- B. Esfera
- C. Cilindro
- D. Pirámide Rectangular



- A. Pirámide Rectangular
- B. Triangular Prisma
- C. Prisma Rectangular
- D. Cilindro

**Respuestas**

1. **B**

2. **A**

3. **B**

4. **A**

5. **C**

6. **B**

7. **C**

8. **C**

9. **B**

10. **A**

11. **C**

12. **D**