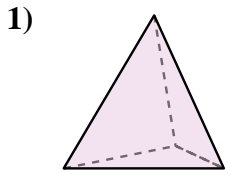
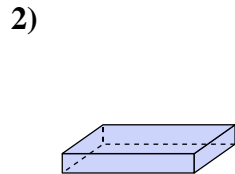




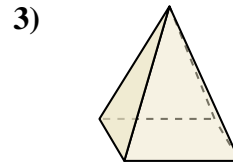
Determinar cuál de las opciones describe mejor la forma mostrada.



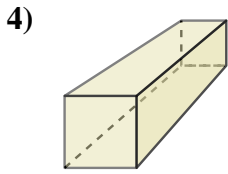
- A. Cilindro
- B. Prisma Rectangular
- C. Triangular Pirámide
- D. Cubo



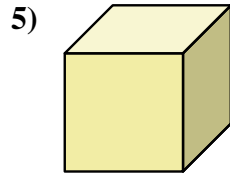
- A. Prisma Rectangular
- B. Triangular Prisma
- C. Cilindro
- D. Cono



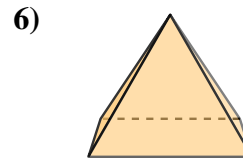
- A. Cubo
- B. Cono
- C. Pirámide Rectangular
- D. Triangular Prisma



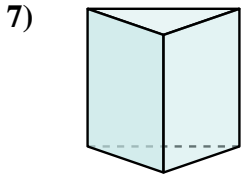
- A. Prisma Rectangular
- B. Triangular Prisma
- C. Cubo
- D. Cilindro



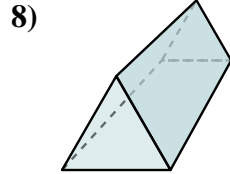
- A. Cubo
- B. Triangular Pirámide
- C. Triangular Prisma
- D. Prisma Rectangular



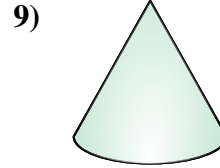
- A. Cono
- B. Triangular Pirámide
- C. Prisma Rectangular
- D. Pirámide Rectangular



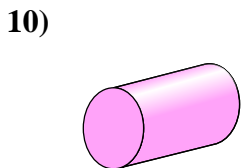
- A. Triangular Pirámide
- B. Triangular Prisma
- C. Pirámide Rectangular
- D. Cubo



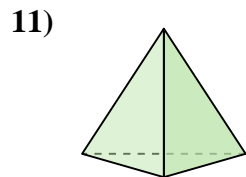
- A. Prisma Rectangular
- B. Pirámide Rectangular
- C. Triangular Pirámide
- D. Triangular Prisma



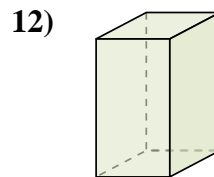
- A. Esfera
- B. Prisma Rectangular
- C. Pirámide Rectangular
- D. Cono



- A. Pirámide Rectangular
- B. Cilindro
- C. Esfera
- D. Triangular Prisma



- A. Esfera
- B. Pirámide Rectangular
- C. Triangular Pirámide
- D. Cono



- A. Pirámide Rectangular
- B. Prisma Rectangular
- C. Esfera
- D. Triangular Prisma

Respuestas

1. _____

2. _____

3. _____

4. _____

5. _____

6. _____

7. _____

8. _____

9. _____

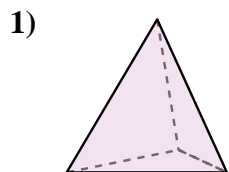
10. _____

11. _____

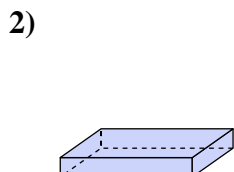
12. _____



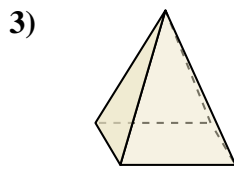
Determinar cuál de las opciones describe mejor la forma mostrada.



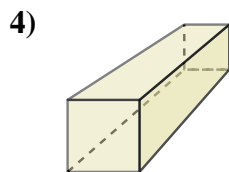
- A. Cilindro
- B. Prisma Rectangular
- C. Triangular Pirámide
- D. Cubo



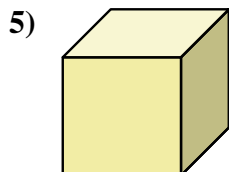
- A. Prisma Rectangular
- B. Triangular Prisma
- C. Cilindro
- D. Cono



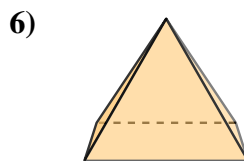
- A. Cubo
- B. Cono
- C. Pirámide Rectangular
- D. Triangular Prisma



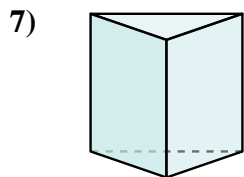
- A. Prisma Rectangular
- B. Triangular Prisma
- C. Cubo
- D. Cilindro



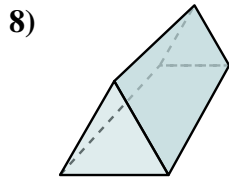
- A. Cubo
- B. Triangular Pirámide
- C. Triangular Prisma
- D. Prisma Rectangular



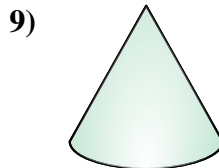
- A. Cono
- B. Triangular Pirámide
- C. Prisma Rectangular
- D. Pirámide Rectangular



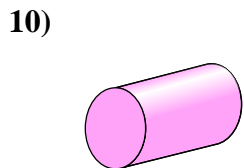
- A. Triangular Pirámide
- B. Triangular Prisma
- C. Pirámide Rectangular
- D. Cubo



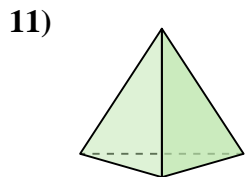
- A. Prisma Rectangular
- B. Pirámide Rectangular
- C. Triangular Pirámide
- D. Triangular Prisma



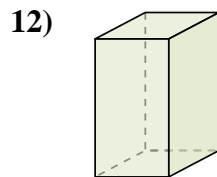
- A. Esfera
- B. Prisma Rectangular
- C. Pirámide Rectangular
- D. Cono



- A. Pirámide Rectangular
- B. Cilindro
- C. Esfera
- D. Triangular Prisma



- A. Esfera
- B. Pirámide Rectangular
- C. Triangular Pirámide
- D. Cono



- A. Pirámide Rectangular
- B. Prisma Rectangular
- C. Esfera
- D. Triangular Prisma

Respuestas

1. **C**

2. **A**

3. **C**

4. **A**

5. **A**

6. **D**

7. **B**

8. **D**

9. **D**

10. **B**

11. **C**

12. **B**