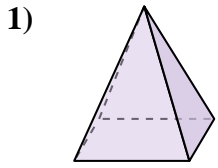


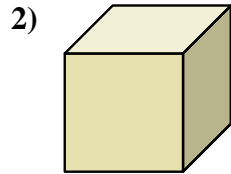


Determinar cuál de las opciones describe mejor la forma mostrada.

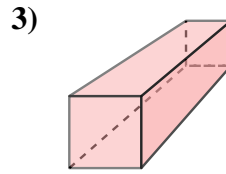
**Respuestas**




- A. Cono
- B. Esfera
- C. Prisma Rectangular
- D. Pirámide Rectangular



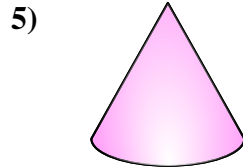
- A. Cubo
- B. Triangular Pirámide
- C. Cilindro
- D. Pirámide Rectangular



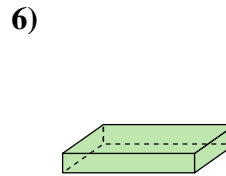
- A. Cilindro
- B. Cubo
- C. Prisma Rectangular
- D. Esfera



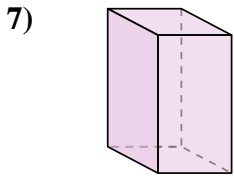
- A. Cubo
- B. Triangular Prisma
- C. Pirámide Rectangular
- D. Cilindro



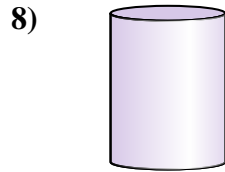
- A. Cono
- B. Cubo
- C. Pirámide Rectangular
- D. Esfera



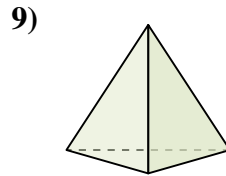
- A. Cubo
- B. Triangular Pirámide
- C. Prisma Rectangular
- D. Esfera



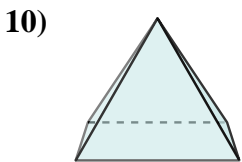
- A. Cono
- B. Triangular Prisma
- C. Prisma Rectangular
- D. Esfera



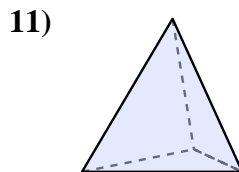
- A. Cilindro
- B. Esfera
- C. Prisma Rectangular
- D. Cono



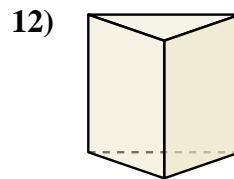
- A. Esfera
- B. Cubo
- C. Triangular Pirámide
- D. Cilindro



- A. Cilindro
- B. Pirámide Rectangular
- C. Triangular Pirámide
- D. Triangular Prisma



- A. Triangular Pirámide
- B. Pirámide Rectangular
- C. Triangular Prisma
- D. Esfera



- A. Triangular Prisma
- B. Esfera
- C. Pirámide Rectangular
- D. Cilindro

1. \_\_\_\_\_

2. \_\_\_\_\_

3. \_\_\_\_\_

4. \_\_\_\_\_

5. \_\_\_\_\_

6. \_\_\_\_\_

7. \_\_\_\_\_

8. \_\_\_\_\_

9. \_\_\_\_\_

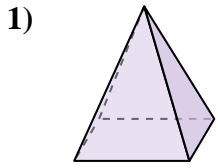
10. \_\_\_\_\_

11. \_\_\_\_\_

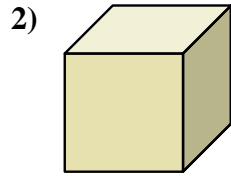
12. \_\_\_\_\_



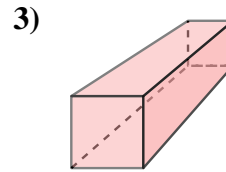
Determinar cuál de las opciones describe mejor la forma mostrada.




- A. Cono
- B. Esfera
- C. Prisma Rectangular
- D. Pirámide Rectangular



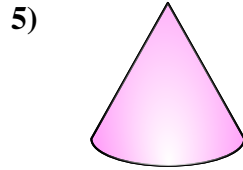
- A. Cubo
- B. Triangular Pirámide
- C. Cilindro
- D. Pirámide Rectangular



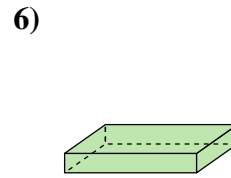
- A. Cilindro
- B. Cubo
- C. Prisma Rectangular
- D. Esfera



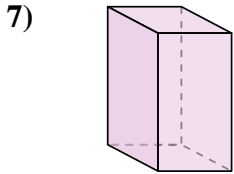
- A. Cubo
- B. Triangular Prisma
- C. Pirámide Rectangular
- D. Cilindro



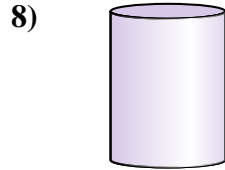
- A. Cono
- B. Cubo
- C. Pirámide Rectangular
- D. Esfera



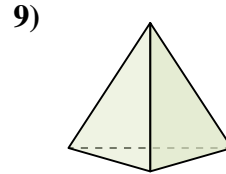
- A. Cubo
- B. Triangular Pirámide
- C. Prisma Rectangular
- D. Esfera



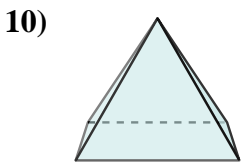
- A. Cono
- B. Triangular Prisma
- C. Prisma Rectangular
- D. Esfera



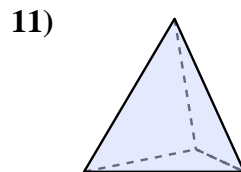
- A. Cilindro
- B. Esfera
- C. Prisma Rectangular
- D. Cono



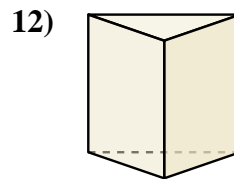
- A. Esfera
- B. Cubo
- C. Triangular Pirámide
- D. Cilindro



- A. Cilindro
- B. Pirámide Rectangular
- C. Triangular Pirámide
- D. Triangular Prisma



- A. Triangular Pirámide
- B. Pirámide Rectangular
- C. Triangular Prisma
- D. Esfera



- A. Triangular Prisma
- B. Esfera
- C. Pirámide Rectangular
- D. Cilindro

**Respuestas**

- 1.     **D**
- 2.     **A**
- 3.     **C**
- 4.     **D**
- 5.     **A**
- 6.     **C**
- 7.     **C**
- 8.     **A**
- 9.     **C**
- 10.     **B**
- 11.     **A**
- 12.     **A**