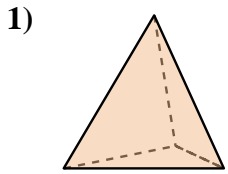
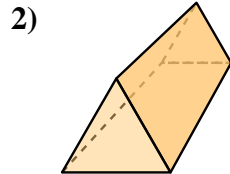




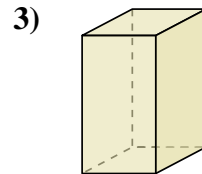
Determinar cuál de las opciones describe mejor la forma mostrada.



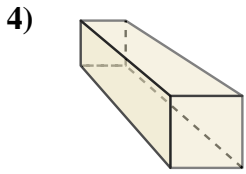
- 1) A. Cubo
- B. Esfera
- C. Triangular Prisma
- D. Triangular Pirámide



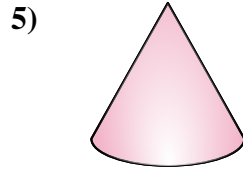
- 2) A. Esfera
- B. Triangular Pirámide
- C. Triangular Prisma
- D. Cono



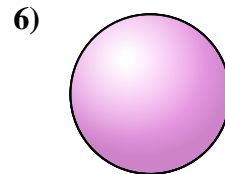
- 3) A. Prisma Rectangular
- B. Esfera
- C. Cubo
- D. Triangular Pirámide



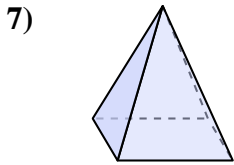
- 4) A. Triangular Pirámide
- B. Esfera
- C. Pirámide Rectangular
- D. Prisma Rectangular



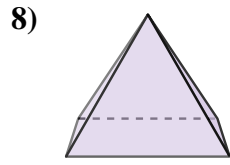
- 5) A. Cono
- B. Pirámide Rectangular
- C. Triangular Prisma
- D. Triangular Pirámide



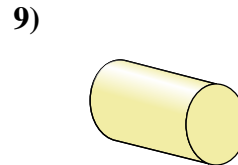
- 6) A. Cubo
- B. Triangular Pirámide
- C. Pirámide Rectangular
- D. Esfera



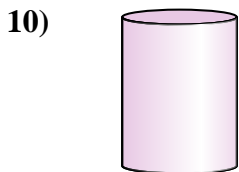
- 7) A. Cilindro
- B. Cono
- C. Triangular Prisma
- D. Pirámide Rectangular



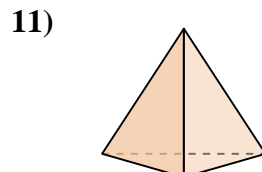
- 8) A. Triangular Pirámide
- B. Cubo
- C. Pirámide Rectangular
- D. Esfera



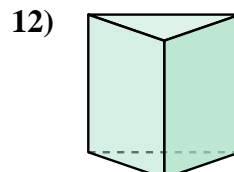
- 9) A. Triangular Pirámide
- B. Cubo
- C. Prisma Rectangular
- D. Cilindro



- 10) A. Esfera
- B. Cilindro
- C. Pirámide Rectangular
- D. Prisma Rectangular



- 11) A. Pirámide Rectangular
- B. Triangular Prisma
- C. Prisma Rectangular
- D. Triangular Pirámide



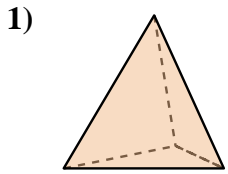
- 12) A. Cubo
- B. Triangular Pirámide
- C. Triangular Prisma
- D. Cilindro

Respuestas

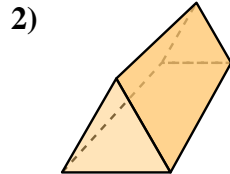
- 1. _____
- 2. _____
- 3. _____
- 4. _____
- 5. _____
- 6. _____
- 7. _____
- 8. _____
- 9. _____
- 10. _____
- 11. _____
- 12. _____



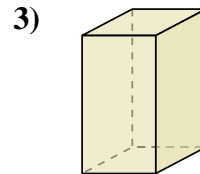
Determinar cuál de las opciones describe mejor la forma mostrada.



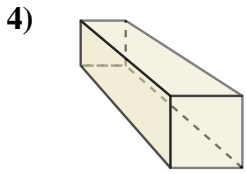
- A. Cubo
- B. Esfera
- C. Triangular Prisma
- D. Triangular Pirámide



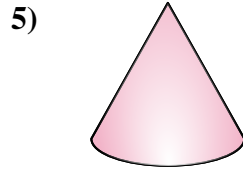
- A. Esfera
- B. Triangular Pirámide
- C. Triangular Prisma
- D. Cono



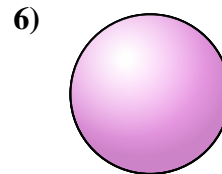
- A. Prisma Rectangular
- B. Esfera
- C. Cubo
- D. Triangular Pirámide



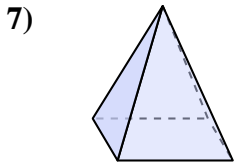
- A. Triangular Pirámide
- B. Esfera
- C. Pirámide Rectangular
- D. Prisma Rectangular



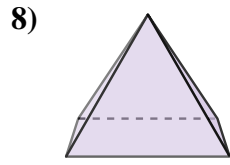
- A. Cono
- B. Pirámide Rectangular
- C. Triangular Prisma
- D. Triangular Pirámide



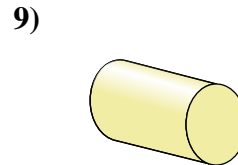
- A. Cubo
- B. Triangular Pirámide
- C. Pirámide Rectangular
- D. Esfera



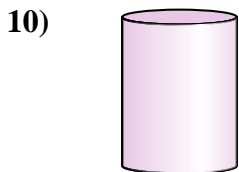
- A. Cilindro
- B. Cono
- C. Triangular Prisma
- D. Pirámide Rectangular



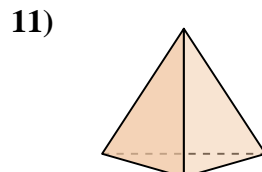
- A. Triangular Pirámide
- B. Cubo
- C. Pirámide Rectangular
- D. Esfera



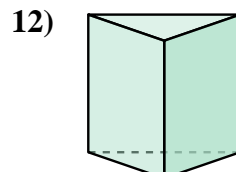
- A. Triangular Pirámide
- B. Cubo
- C. Prisma Rectangular
- D. Cilindro



- A. Esfera
- B. Cilindro
- C. Pirámide Rectangular
- D. Prisma Rectangular



- A. Pirámide Rectangular
- B. Triangular Prisma
- C. Prisma Rectangular
- D. Triangular Pirámide



- A. Cubo
- B. Triangular Pirámide
- C. Triangular Prisma
- D. Cilindro

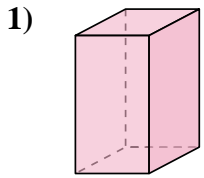
Respuestas

- 1. **D**
- 2. **C**
- 3. **A**
- 4. **D**
- 5. **A**
- 6. **D**
- 7. **D**
- 8. **C**
- 9. **D**
- 10. **B**
- 11. **D**
- 12. **C**

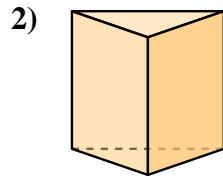


Determinar cuál de las opciones describe mejor la forma mostrada.

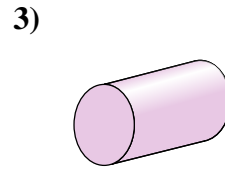
Respuestas



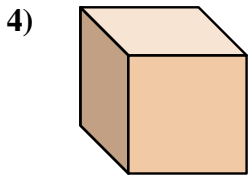
- A. Prisma Rectangular
- B. Cilindro
- C. Cubo
- D. Cono



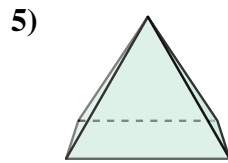
- A. Prisma Rectangular
- B. Pirámide Rectangular
- C. Cilindro
- D. Triangular Prisma



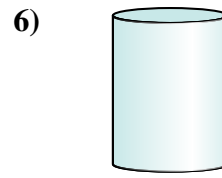
- A. Cubo
- B. Pirámide Rectangular
- C. Cilindro
- D. Prisma Rectangular



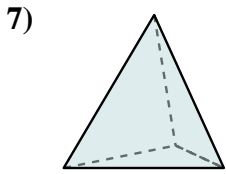
- A. Cono
- B. Triangular Prisma
- C. Cubo
- D. Pirámide Rectangular



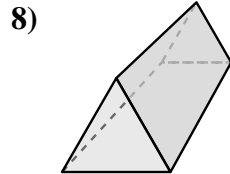
- A. Triangular Pirámide
- B. Esfera
- C. Pirámide Rectangular
- D. Cono



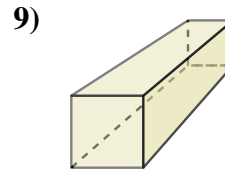
- A. Cono
- B. Triangular Prisma
- C. Triangular Pirámide
- D. Cilindro



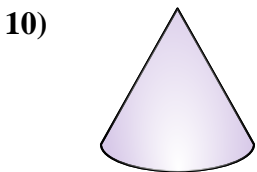
- A. Prisma Rectangular
- B. Esfera
- C. Cono
- D. Triangular Pirámide



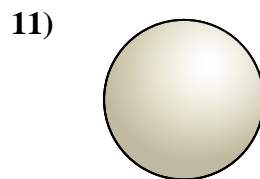
- A. Prisma Rectangular
- B. Esfera
- C. Triangular Prisma
- D. Cilindro



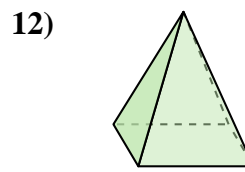
- A. Prisma Rectangular
- B. Cono
- C. Triangular Prisma
- D. Esfera



- A. Cono
- B. Cubo
- C. Prisma Rectangular
- D. Triangular Prisma



- A. Esfera
- B. Prisma Rectangular
- C. Cilindro
- D. Cono



- A. Pirámide Rectangular
- B. Cilindro
- C. Cono
- D. Cubo

1. _____

2. _____

3. _____

4. _____

5. _____

6. _____

7. _____

8. _____

9. _____

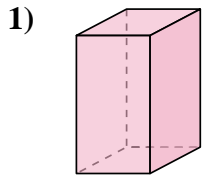
10. _____

11. _____

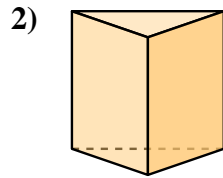
12. _____



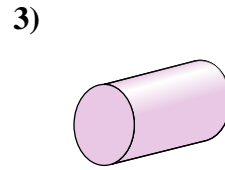
Determinar cuál de las opciones describe mejor la forma mostrada.



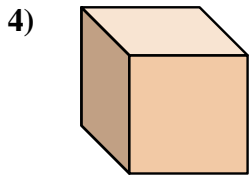
- A. Prisma Rectangular
- B. Cilindro
- C. Cubo
- D. Cono



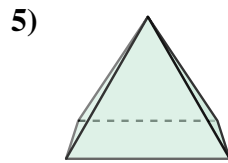
- A. Prisma Rectangular
- B. Pirámide Rectangular
- C. Cilindro
- D. Triangular Prisma



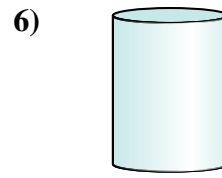
- A. Cubo
- B. Pirámide Rectangular
- C. Cilindro
- D. Prisma Rectangular



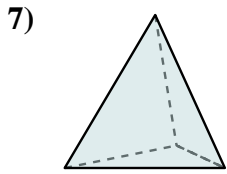
- A. Cono
- B. Triangular Prisma
- C. Cubo
- D. Pirámide Rectangular



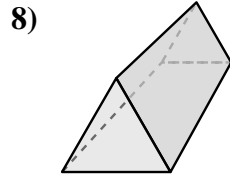
- A. Triangular Pirámide
- B. Esfera
- C. Pirámide Rectangular
- D. Cono



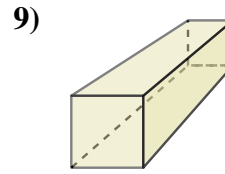
- A. Cono
- B. Triangular Prisma
- C. Triangular Pirámide
- D. Cilindro



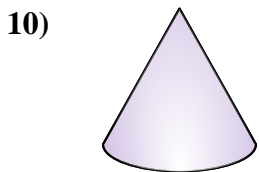
- A. Prisma Rectangular
- B. Esfera
- C. Cono
- D. Triangular Pirámide



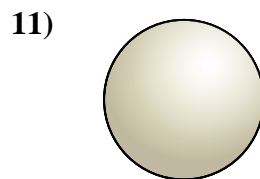
- A. Prisma Rectangular
- B. Esfera
- C. Triangular Prisma
- D. Cilindro



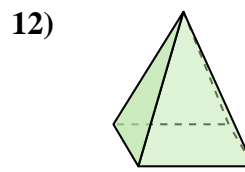
- A. Prisma Rectangular
- B. Cono
- C. Triangular Prisma
- D. Esfera



- A. Cono
- B. Cubo
- C. Prisma Rectangular
- D. Triangular Prisma



- A. Esfera
- B. Prisma Rectangular
- C. Cilindro
- D. Cono



- A. Pirámide Rectangular
- B. Cilindro
- C. Cono
- D. Cubo

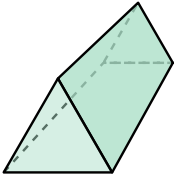
Respuestas

- 1. **A**
- 2. **D**
- 3. **C**
- 4. **C**
- 5. **C**
- 6. **D**
- 7. **D**
- 8. **C**
- 9. **A**
- 10. **A**
- 11. **A**
- 12. **A**



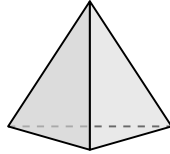
Determinar cuál de las opciones describe mejor la forma mostrada.

1)



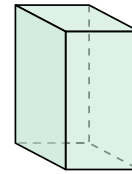
- A. Cilindro
- B. Triangular Prisma
- C. Cubo
- D. Prisma Rectangular

2)



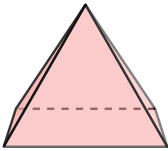
- A. Triangular Pirámide
- B. Pirámide Rectangular
- C. Cono
- D. Esfera

3)



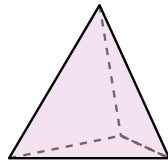
- A. Triangular Prisma
- B. Prisma Rectangular
- C. Esfera
- D. Triangular Pirámide

4)



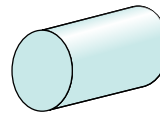
- A. Pirámide Rectangular
- B. Esfera
- C. Cilindro
- D. Cono

5)




- A. Esfera
- B. Cubo
- C. Prisma Rectangular
- D. Triangular Pirámide

6)



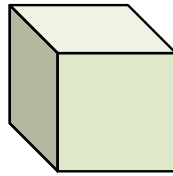
- A. Cono
- B. Cubo
- C. Cilindro
- D. Triangular Pirámide

7)



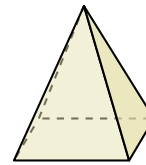
- A. Pirámide Rectangular
- B. Esfera
- C. Triangular Prisma
- D. Cono

8)



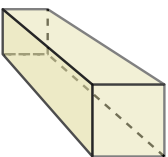
- A. Cono
- B. Cubo
- C. Prisma Rectangular
- D. Triangular Pirámide

9)




- A. Esfera
- B. Triangular Pirámide
- C. Cono
- D. Pirámide Rectangular

10)



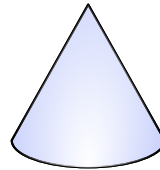
- A. Prisma Rectangular
- B. Esfera
- C. Triangular Pirámide
- D. Cono

11)



- A. Triangular Pirámide
- B. Triangular Prisma
- C. Cilindro
- D. Prisma Rectangular

12)



- A. Prisma Rectangular
- B. Cono
- C. Triangular Prisma
- D. Cilindro

Respuestas

1. _____

2. _____

3. _____

4. _____

5. _____

6. _____

7. _____

8. _____

9. _____

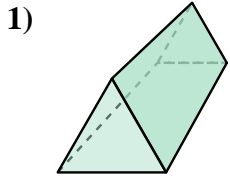
10. _____

11. _____

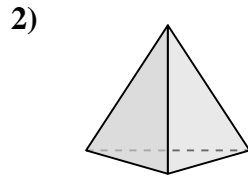
12. _____



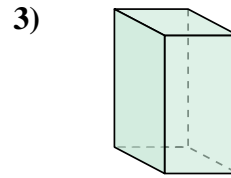
Determinar cuál de las opciones describe mejor la forma mostrada.



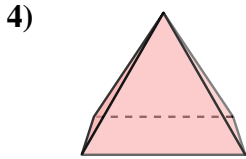
- A. Cilindro
- B. Triangular Prisma
- C. Cubo
- D. Prisma Rectangular



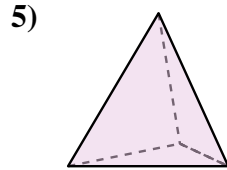
- A. Triangular Pirámide
- B. Pirámide Rectangular
- C. Cono
- D. Esfera



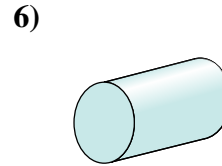
- A. Triangular Prisma
- B. Prisma Rectangular
- C. Esfera
- D. Triangular Pirámide



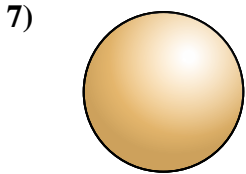
- A. Pirámide Rectangular
- B. Esfera
- C. Cilindro
- D. Cono



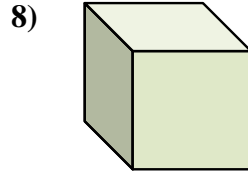
- A. Esfera
- B. Cubo
- C. Prisma Rectangular
- D. Triangular Pirámide



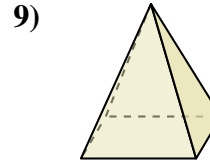
- A. Cono
- B. Cubo
- C. Cilindro
- D. Triangular Pirámide



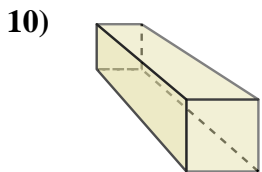
- A. Pirámide Rectangular
- B. Esfera
- C. Triangular Prisma
- D. Cono



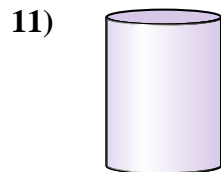
- A. Cono
- B. Cubo
- C. Prisma Rectangular
- D. Triangular Pirámide



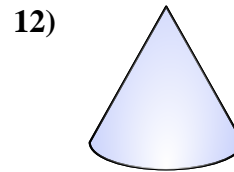
- A. Esfera
- B. Triangular Pirámide
- C. Cono
- D. Pirámide Rectangular



- A. Prisma Rectangular
- B. Esfera
- C. Triangular Pirámide
- D. Cono



- A. Triangular Pirámide
- B. Triangular Prisma
- C. Cilindro
- D. Prisma Rectangular



- A. Prisma Rectangular
- B. Cono
- C. Triangular Prisma
- D. Cilindro

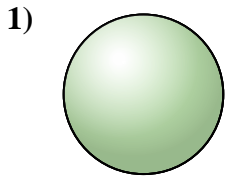
Respuestas

- 1. **B**
- 2. **A**
- 3. **B**
- 4. **A**
- 5. **D**
- 6. **C**
- 7. **B**
- 8. **B**
- 9. **D**
- 10. **A**
- 11. **C**
- 12. **B**

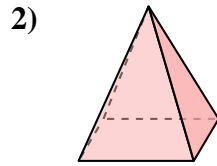


Determinar cuál de las opciones describe mejor la forma mostrada.

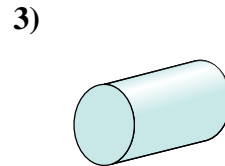
Respuestas



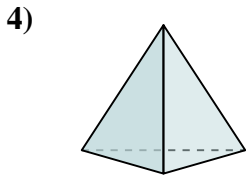
- A. Cono
- B. Prisma Rectangular
- C. Esfera
- D. Pirámide Rectangular



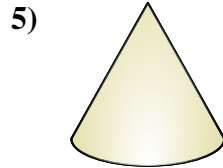
- A. Triangular Prisma
- B. Cilindro
- C. Triangular Pirámide
- D. Pirámide Rectangular



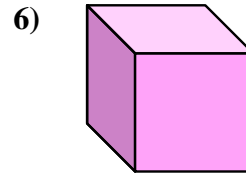
- A. Cilindro
- B. Pirámide Rectangular
- C. Triangular Prisma
- D. Esfera



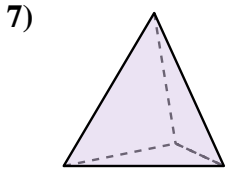
- A. Triangular Pirámide
- B. Esfera
- C. Cubo
- D. Prisma Rectangular



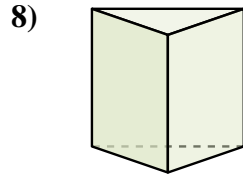
- A. Cono
- B. Cilindro
- C. Pirámide Rectangular
- D. Cubo



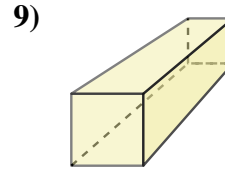
- A. Prisma Rectangular
- B. Triangular Prisma
- C. Cono
- D. Cubo



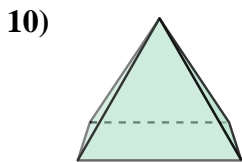
- A. Cubo
- B. Triangular Pirámide
- C. Cono
- D. Esfera



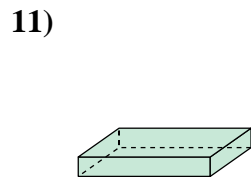
- A. Cilindro
- B. Triangular Prisma
- C. Esfera
- D. Pirámide Rectangular



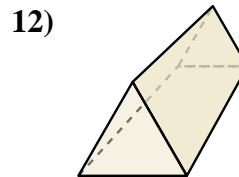
- A. Prisma Rectangular
- B. Triangular Pirámide
- C. Cilindro
- D. Pirámide Rectangular



- A. Prisma Rectangular
- B. Pirámide Rectangular
- C. Triangular Pirámide
- D. Esfera



- A. Triangular Prisma
- B. Triangular Pirámide
- C. Prisma Rectangular
- D. Cono



- A. Triangular Pirámide
- B. Triangular Prisma
- C. Prisma Rectangular
- D. Cubo

1. _____

2. _____

3. _____

4. _____

5. _____

6. _____

7. _____

8. _____

9. _____

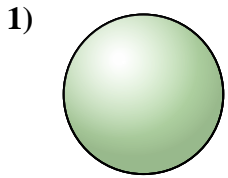
10. _____

11. _____

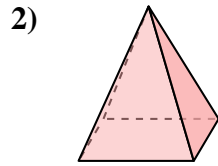
12. _____



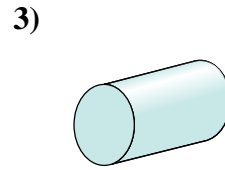
Determinar cuál de las opciones describe mejor la forma mostrada.



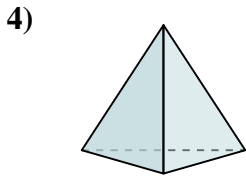
- A. Cono
- B. Prisma Rectangular
- C. Esfera
- D. Pirámide Rectangular



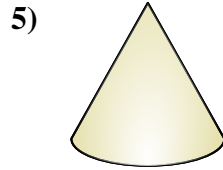
- A. Triangular Prisma
- B. Cilindro
- C. Triangular Pirámide
- D. Pirámide Rectangular



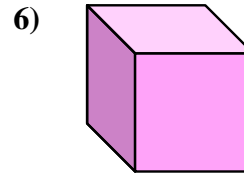
- A. Cilindro
- B. Pirámide Rectangular
- C. Triangular Prisma
- D. Esfera



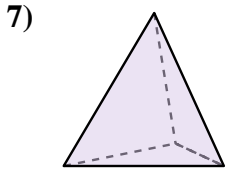
- A. Triangular Pirámide
- B. Esfera
- C. Cubo
- D. Prisma Rectangular



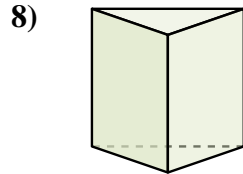
- A. Cono
- B. Cilindro
- C. Pirámide Rectangular
- D. Cubo



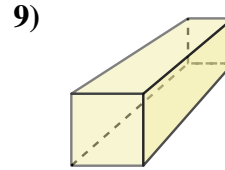
- A. Prisma Rectangular
- B. Triangular Prisma
- C. Cono
- D. Cubo



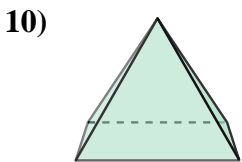
- A. Cubo
- B. Triangular Pirámide
- C. Cono
- D. Esfera



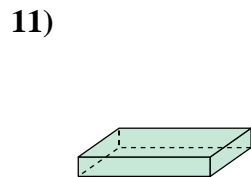
- A. Cilindro
- B. Triangular Prisma
- C. Esfera
- D. Pirámide Rectangular



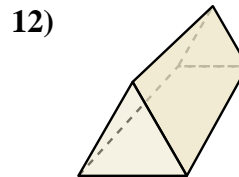
- A. Prisma Rectangular
- B. Triangular Pirámide
- C. Cilindro
- D. Pirámide Rectangular



- A. Prisma Rectangular
- B. Pirámide Rectangular
- C. Triangular Pirámide
- D. Esfera



- A. Triangular Prisma
- B. Triangular Pirámide
- C. Prisma Rectangular
- D. Cono



- A. Triangular Pirámide
- B. Triangular Prisma
- C. Prisma Rectangular
- D. Cubo

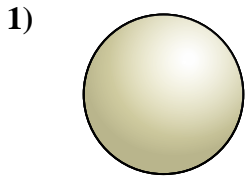
Respuestas

- 1. **C**
- 2. **D**
- 3. **A**
- 4. **A**
- 5. **A**
- 6. **D**
- 7. **B**
- 8. **B**
- 9. **A**
- 10. **B**
- 11. **C**
- 12. **B**

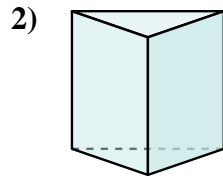


Determinar cuál de las opciones describe mejor la forma mostrada.

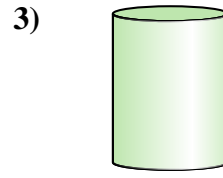
Respuestas



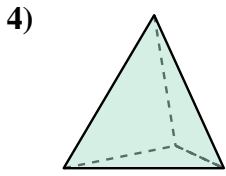
- A. Esfera
- B. Prisma Rectangular
- C. Cono
- D. Cubo



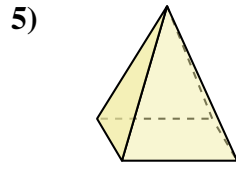
- A. Pirámide Rectangular
- B. Triangular Pirámide
- C. Triangular Prisma
- D. Esfera



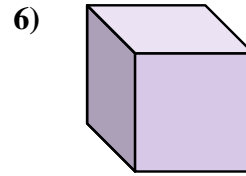
- A. Prisma Rectangular
- B. Esfera
- C. Triangular Prisma
- D. Cilindro



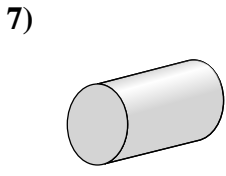
- A. Esfera
- B. Cono
- C. Cubo
- D. Triangular Pirámide



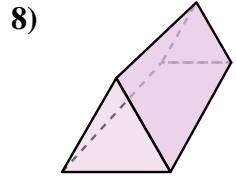
- A. Prisma Rectangular
- B. Pirámide Rectangular
- C. Triangular Prisma
- D. Cono



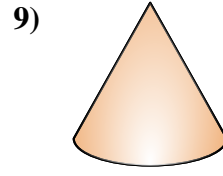
- A. Cubo
- B. Prisma Rectangular
- C. Triangular Pirámide
- D. Triangular Prisma



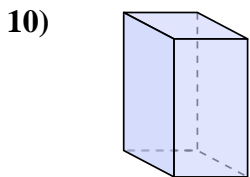
- A. Cilindro
- B. Cubo
- C. Pirámide Rectangular
- D. Cono



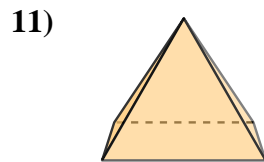
- A. Pirámide Rectangular
- B. Triangular Prisma
- C. Cono
- D. Prisma Rectangular



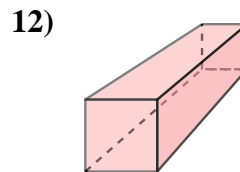
- A. Prisma Rectangular
- B. Cono
- C. Cilindro
- D. Esfera



- A. Cilindro
- B. Triangular Prisma
- C. Cono
- D. Prisma Rectangular



- A. Pirámide Rectangular
- B. Prisma Rectangular
- C. Cilindro
- D. Cubo



- A. Esfera
- B. Prisma Rectangular
- C. Cilindro
- D. Pirámide Rectangular

1. _____

2. _____

3. _____

4. _____

5. _____

6. _____

7. _____

8. _____

9. _____

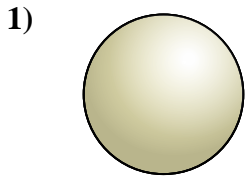
10. _____

11. _____

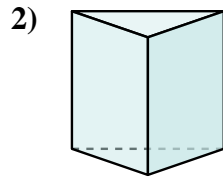
12. _____



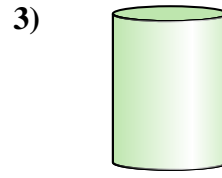
Determinar cuál de las opciones describe mejor la forma mostrada.



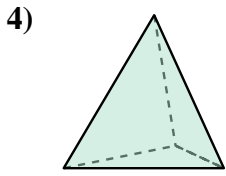
- A. Esfera
- B. Prisma Rectangular
- C. Cono
- D. Cubo



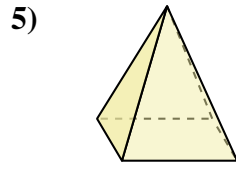
- A. Pirámide Rectangular
- B. Triangular Pirámide
- C. Triangular Prisma
- D. Esfera



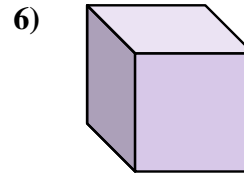
- A. Prisma Rectangular
- B. Esfera
- C. Triangular Prisma
- D. Cilindro



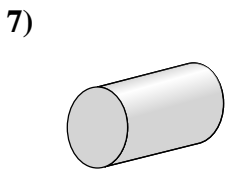
- A. Esfera
- B. Cono
- C. Cubo
- D. Triangular Pirámide



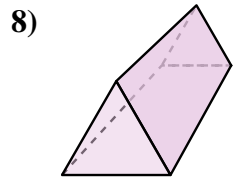
- A. Prisma Rectangular
- B. Pirámide Rectangular
- C. Triangular Prisma
- D. Cono



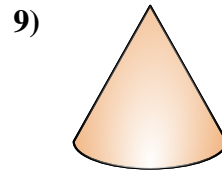
- A. Cubo
- B. Prisma Rectangular
- C. Triangular Pirámide
- D. Triangular Prisma



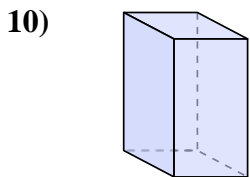
- A. Cilindro
- B. Cubo
- C. Pirámide Rectangular
- D. Cono



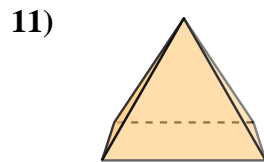
- A. Pirámide Rectangular
- B. Triangular Prisma
- C. Cono
- D. Prisma Rectangular



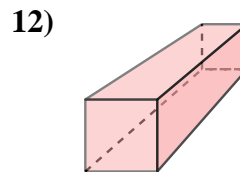
- A. Prisma Rectangular
- B. Cono
- C. Cilindro
- D. Esfera



- A. Cilindro
- B. Triangular Prisma
- C. Cono
- D. Prisma Rectangular



- A. Pirámide Rectangular
- B. Prisma Rectangular
- C. Cilindro
- D. Cubo



- A. Esfera
- B. Prisma Rectangular
- C. Cilindro
- D. Pirámide Rectangular

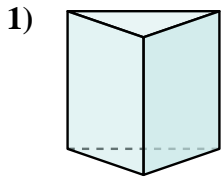
Respuestas

- 1. **A**
- 2. **C**
- 3. **D**
- 4. **D**
- 5. **B**
- 6. **A**
- 7. **A**
- 8. **B**
- 9. **B**
- 10. **D**
- 11. **A**
- 12. **B**

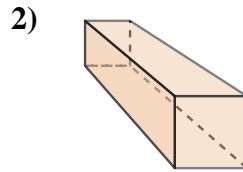


Determinar cuál de las opciones describe mejor la forma mostrada.

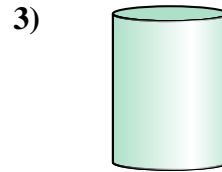
Respuestas



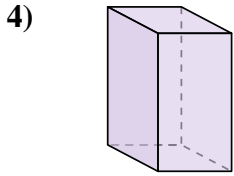
- A. Cono
- B. Triangular Prisma
- C. Triangular Pirámide
- D. Cubo



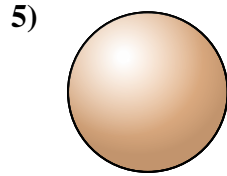
- A. Cilindro
- B. Pirámide Rectangular
- C. Prisma Rectangular
- D. Cono



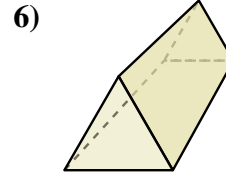
- A. Esfera
- B. Cubo
- C. Pirámide Rectangular
- D. Cilindro



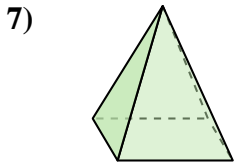
- A. Cubo
- B. Cilindro
- C. Prisma Rectangular
- D. Triangular Prisma



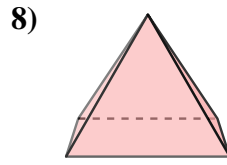
- A. Triangular Pirámide
- B. Cubo
- C. Esfera
- D. Cono



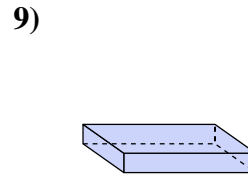
- A. Cilindro
- B. Triangular Prisma
- C. Esfera
- D. Triangular Pirámide



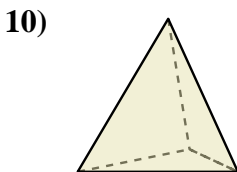
- A. Triangular Prisma
- B. Pirámide Rectangular
- C. Cubo
- D. Esfera



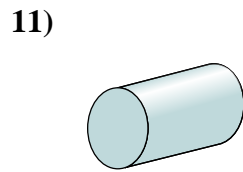
- A. Pirámide Rectangular
- B. Cilindro
- C. Cubo
- D. Prisma Rectangular



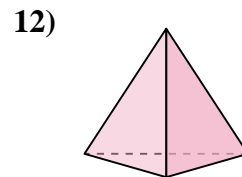
- A. Cilindro
- B. Triangular Prisma
- C. Prisma Rectangular
- D. Cubo



- A. Esfera
- B. Prisma Rectangular
- C. Triangular Pirámide
- D. Cubo



- A. Esfera
- B. Cilindro
- C. Prisma Rectangular
- D. Cubo



- A. Triangular Prisma
- B. Triangular Pirámide
- C. Pirámide Rectangular
- D. Cilindro

1. _____

2. _____

3. _____

4. _____

5. _____

6. _____

7. _____

8. _____

9. _____

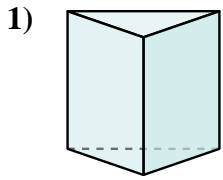
10. _____

11. _____

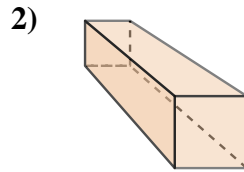
12. _____



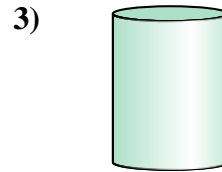
Determinar cuál de las opciones describe mejor la forma mostrada.



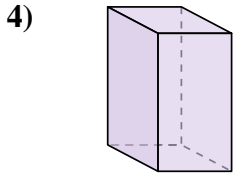
- A. Cono
- B. Triangular Prisma
- C. Triangular Pirámide
- D. Cubo



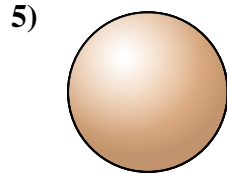
- A. Cilindro
- B. Pirámide Rectangular
- C. Prisma Rectangular
- D. Cono



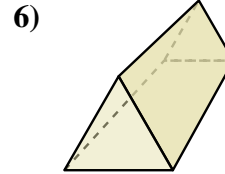
- A. Esfera
- B. Cubo
- C. Pirámide Rectangular
- D. Cilindro



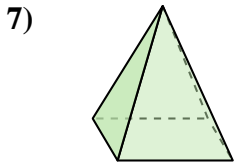
- A. Cubo
- B. Cilindro
- C. Prisma Rectangular
- D. Triangular Prisma



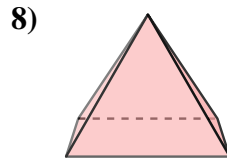
- A. Triangular Pirámide
- B. Cubo
- C. Esfera
- D. Cono



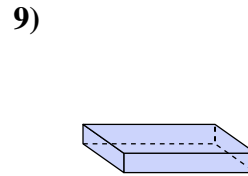
- A. Cilindro
- B. Triangular Prisma
- C. Esfera
- D. Triangular Pirámide



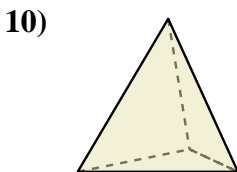
- A. Triangular Prisma
- B. Pirámide Rectangular
- C. Cubo
- D. Esfera



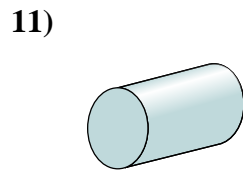
- A. Pirámide Rectangular
- B. Cilindro
- C. Cubo
- D. Prisma Rectangular



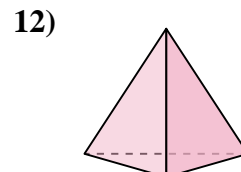
- A. Cilindro
- B. Triangular Prisma
- C. Prisma Rectangular
- D. Cubo



- A. Esfera
- B. Prisma Rectangular
- C. Triangular Pirámide
- D. Cubo



- A. Esfera
- B. Cilindro
- C. Prisma Rectangular
- D. Cubo



- A. Triangular Prisma
- B. Triangular Pirámide
- C. Pirámide Rectangular
- D. Cilindro

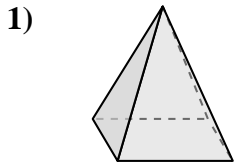
Respuestas

- 1. **B**
- 2. **C**
- 3. **D**
- 4. **C**
- 5. **C**
- 6. **B**
- 7. **B**
- 8. **A**
- 9. **C**
- 10. **C**
- 11. **B**
- 12. **B**

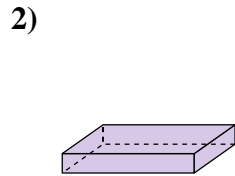


Determinar cuál de las opciones describe mejor la forma mostrada.

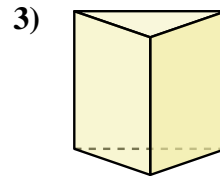
Respuestas



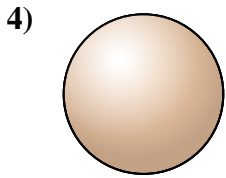
- 1) A. Prisma Rectangular
- B. Pirámide Rectangular
- C. Triangular Pirámide
- D. Esfera



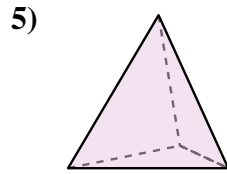
- 2) A. Prisma Rectangular
- B. Triangular Prisma
- C. Pirámide Rectangular
- D. Cono



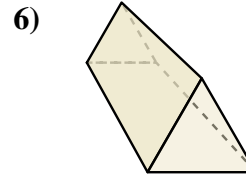
- 3) A. Cono
- B. Triangular Prisma
- C. Esfera
- D. Triangular Pirámide



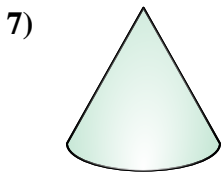
- 4) A. Esfera
- B. Cubo
- C. Prisma Rectangular
- D. Triangular Pirámide



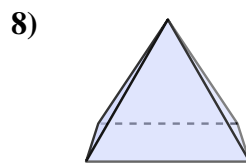
- 5) A. Cilindro
- B. Cono
- C. Triangular Pirámide
- D. Esfera



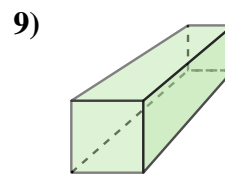
- 6) A. Prisma Rectangular
- B. Triangular Prisma
- C. Cilindro
- D. Triangular Pirámide



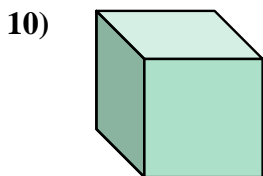
- 7) A. Triangular Prisma
- B. Prisma Rectangular
- C. Cono
- D. Triangular Pirámide



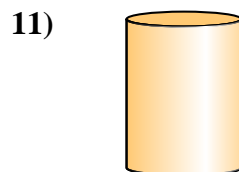
- 8) A. Prisma Rectangular
- B. Esfera
- C. Pirámide Rectangular
- D. Cono



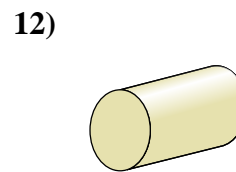
- 9) A. Cubo
- B. Prisma Rectangular
- C. Pirámide Rectangular
- D. Esfera



- 10) A. Cubo
- B. Cilindro
- C. Pirámide Rectangular
- D. Prisma Rectangular



- 11) A. Cono
- B. Esfera
- C. Cilindro
- D. Pirámide Rectangular



- 12) A. Pirámide Rectangular
- B. Triangular Prisma
- C. Prisma Rectangular
- D. Cilindro

1. _____

2. _____

3. _____

4. _____

5. _____

6. _____

7. _____

8. _____

9. _____

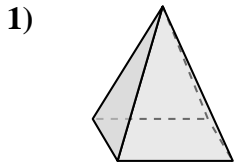
10. _____

11. _____

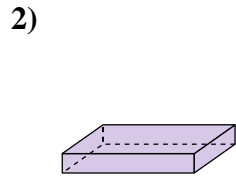
12. _____



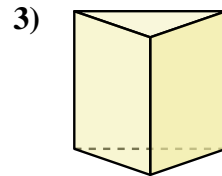
Determinar cuál de las opciones describe mejor la forma mostrada.



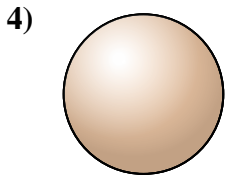
- A. Prisma Rectangular
- B. Pirámide Rectangular
- C. Triangular Pirámide
- D. Esfera



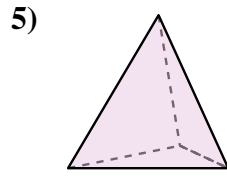
- A. Prisma Rectangular
- B. Triangular Prisma
- C. Pirámide Rectangular
- D. Cono



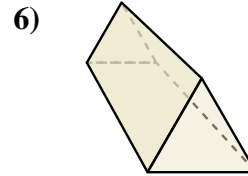
- A. Cono
- B. Triangular Prisma
- C. Esfera
- D. Triangular Pirámide



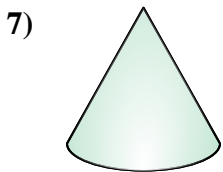
- A. Esfera
- B. Cubo
- C. Prisma Rectangular
- D. Triangular Pirámide



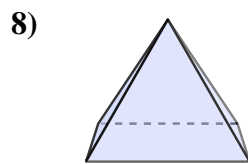
- A. Cilindro
- B. Cono
- C. Triangular Pirámide
- D. Esfera



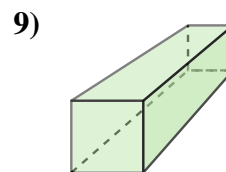
- A. Prisma Rectangular
- B. Triangular Prisma
- C. Cilindro
- D. Triangular Pirámide



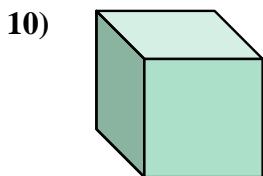
- A. Triangular Prisma
- B. Prisma Rectangular
- C. Cono
- D. Triangular Pirámide



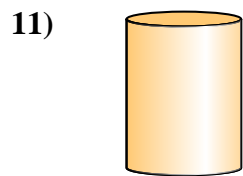
- A. Prisma Rectangular
- B. Esfera
- C. Pirámide Rectangular
- D. Cono



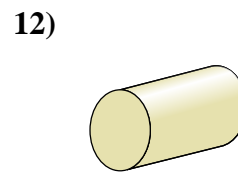
- A. Cubo
- B. Prisma Rectangular
- C. Pirámide Rectangular
- D. Esfera



- A. Cubo
- B. Cilindro
- C. Pirámide Rectangular
- D. Prisma Rectangular



- A. Cono
- B. Esfera
- C. Cilindro
- D. Pirámide Rectangular



- A. Pirámide Rectangular
- B. Triangular Prisma
- C. Prisma Rectangular
- D. Cilindro

Respuestas

1. **B**

2. **A**

3. **B**

4. **A**

5. **C**

6. **B**

7. **C**

8. **C**

9. **B**

10. **A**

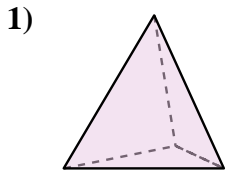
11. **C**

12. **D**

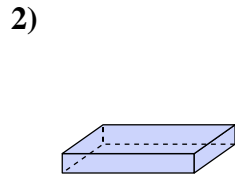


Determinar cuál de las opciones describe mejor la forma mostrada.

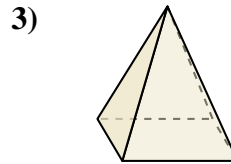
Respuestas



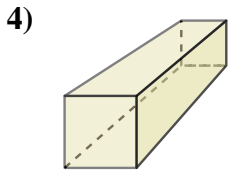
- 1) A. Cilindro
- B. Prisma Rectangular
- C. Triangular Pirámide
- D. Cubo



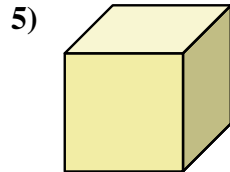
- 2) A. Prisma Rectangular
- B. Triangular Prisma
- C. Cilindro
- D. Cono



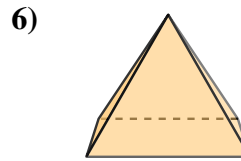
- 3) A. Cubo
- B. Cono
- C. Pirámide Rectangular
- D. Triangular Prisma



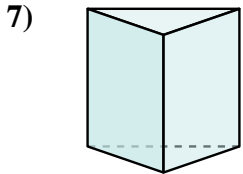
- 4) A. Prisma Rectangular
- B. Triangular Prisma
- C. Cubo
- D. Cilindro



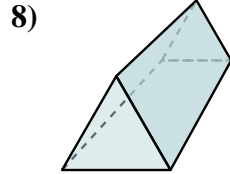
- 5) A. Cubo
- B. Triangular Pirámide
- C. Triangular Prisma
- D. Prisma Rectangular



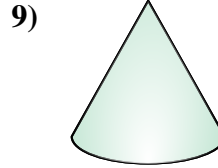
- 6) A. Cono
- B. Triangular Pirámide
- C. Prisma Rectangular
- D. Pirámide Rectangular



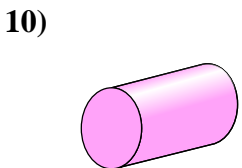
- 7) A. Triangular Pirámide
- B. Triangular Prisma
- C. Pirámide Rectangular
- D. Cubo



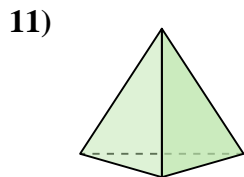
- 8) A. Prisma Rectangular
- B. Pirámide Rectangular
- C. Triangular Pirámide
- D. Triangular Prisma



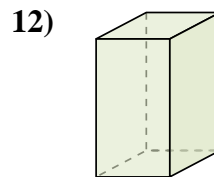
- 9) A. Esfera
- B. Prisma Rectangular
- C. Pirámide Rectangular
- D. Cono



- 10) A. Pirámide Rectangular
- B. Cilindro
- C. Esfera
- D. Triangular Prisma



- 11) A. Esfera
- B. Pirámide Rectangular
- C. Triangular Pirámide
- D. Cono



- 12) A. Pirámide Rectangular
- B. Prisma Rectangular
- C. Esfera
- D. Triangular Prisma

1. _____

2. _____

3. _____

4. _____

5. _____

6. _____

7. _____

8. _____

9. _____

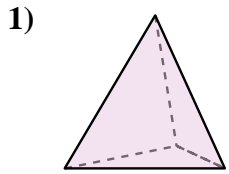
10. _____

11. _____

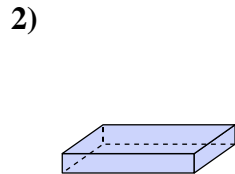
12. _____



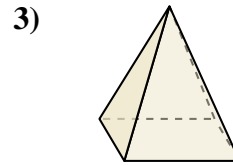
Determinar cuál de las opciones describe mejor la forma mostrada.



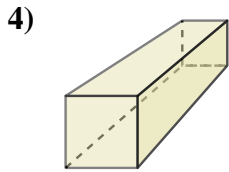
- A. Cilindro
- B. Prisma Rectangular
- C. Triangular Pirámide
- D. Cubo



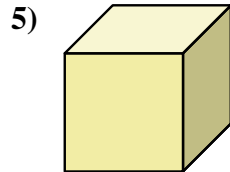
- A. Prisma Rectangular
- B. Triangular Prisma
- C. Cilindro
- D. Cono



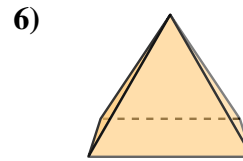
- A. Cubo
- B. Cono
- C. Pirámide Rectangular
- D. Triangular Prisma



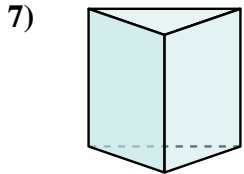
- A. Prisma Rectangular
- B. Triangular Prisma
- C. Cubo
- D. Cilindro



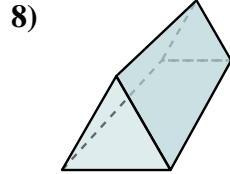
- A. Cubo
- B. Triangular Pirámide
- C. Triangular Prisma
- D. Prisma Rectangular



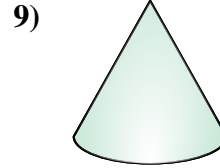
- A. Cono
- B. Triangular Pirámide
- C. Prisma Rectangular
- D. Pirámide Rectangular



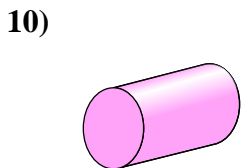
- A. Triangular Pirámide
- B. Triangular Prisma
- C. Pirámide Rectangular
- D. Cubo



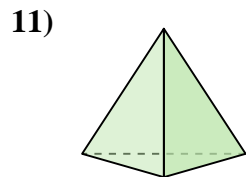
- A. Prisma Rectangular
- B. Pirámide Rectangular
- C. Triangular Pirámide
- D. Triangular Prisma



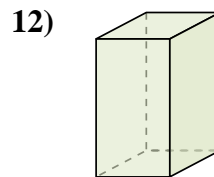
- A. Esfera
- B. Prisma Rectangular
- C. Pirámide Rectangular
- D. Cono



- A. Pirámide Rectangular
- B. Cilindro
- C. Esfera
- D. Triangular Prisma



- A. Esfera
- B. Pirámide Rectangular
- C. Triangular Pirámide
- D. Cono



- A. Pirámide Rectangular
- B. Prisma Rectangular
- C. Esfera
- D. Triangular Prisma

Respuestas

1. **C**

2. **A**

3. **C**

4. **A**

5. **A**

6. **D**

7. **B**

8. **D**

9. **D**

10. **B**

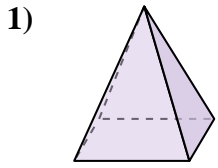
11. **C**

12. **B**

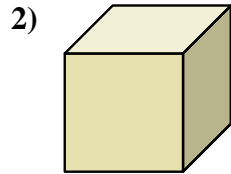


Determinar cuál de las opciones describe mejor la forma mostrada.

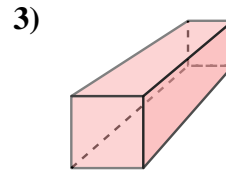
Respuestas




- A. Cono
- B. Esfera
- C. Prisma Rectangular
- D. Pirámide Rectangular



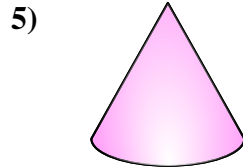
- A. Cubo
- B. Triangular Pirámide
- C. Cilindro
- D. Pirámide Rectangular



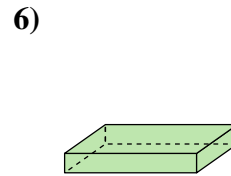
- A. Cilindro
- B. Cubo
- C. Prisma Rectangular
- D. Esfera



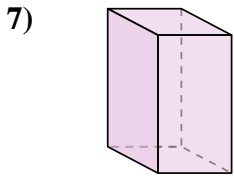
- A. Cubo
- B. Triangular Prisma
- C. Pirámide Rectangular
- D. Cilindro



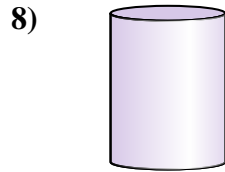
- A. Cono
- B. Cubo
- C. Pirámide Rectangular
- D. Esfera



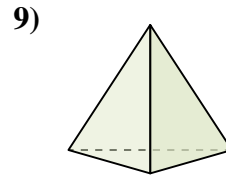
- A. Cubo
- B. Triangular Pirámide
- C. Prisma Rectangular
- D. Esfera



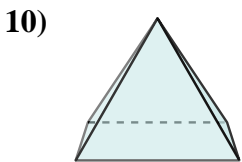
- A. Cono
- B. Triangular Prisma
- C. Prisma Rectangular
- D. Esfera



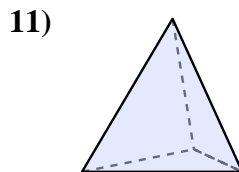
- A. Cilindro
- B. Esfera
- C. Prisma Rectangular
- D. Cono



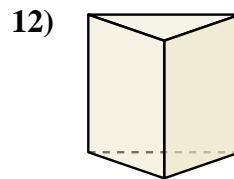
- A. Esfera
- B. Cubo
- C. Triangular Pirámide
- D. Cilindro



- A. Cilindro
- B. Pirámide Rectangular
- C. Triangular Pirámide
- D. Triangular Prisma



- A. Triangular Pirámide
- B. Pirámide Rectangular
- C. Triangular Prisma
- D. Esfera



- A. Triangular Prisma
- B. Esfera
- C. Pirámide Rectangular
- D. Cilindro

1. _____

2. _____

3. _____

4. _____

5. _____

6. _____

7. _____

8. _____

9. _____

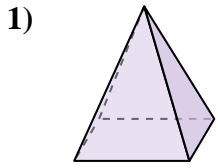
10. _____

11. _____

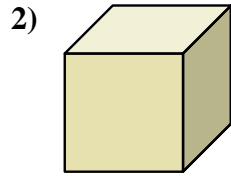
12. _____



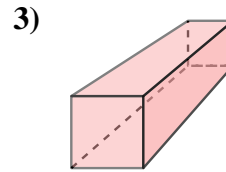
Determinar cuál de las opciones describe mejor la forma mostrada.




- A. Cono
- B. Esfera
- C. Prisma Rectangular
- D. Pirámide Rectangular



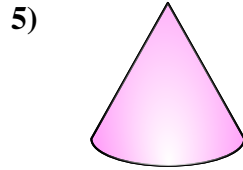
- A. Cubo
- B. Triangular Pirámide
- C. Cilindro
- D. Pirámide Rectangular



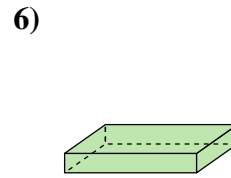
- A. Cilindro
- B. Cubo
- C. Prisma Rectangular
- D. Esfera



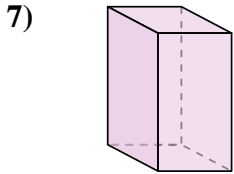
- A. Cubo
- B. Triangular Prisma
- C. Pirámide Rectangular
- D. Cilindro



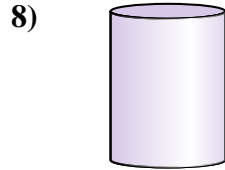
- A. Cono
- B. Cubo
- C. Pirámide Rectangular
- D. Esfera



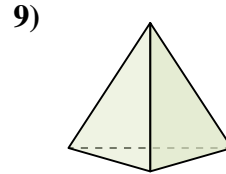
- A. Cubo
- B. Triangular Pirámide
- C. Prisma Rectangular
- D. Esfera



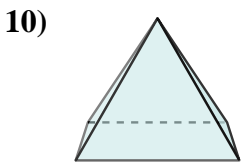
- A. Cono
- B. Triangular Prisma
- C. Prisma Rectangular
- D. Esfera



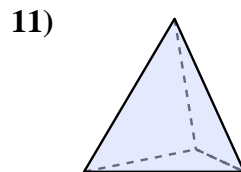
- A. Cilindro
- B. Esfera
- C. Prisma Rectangular
- D. Cono



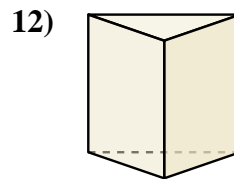
- A. Esfera
- B. Cubo
- C. Triangular Pirámide
- D. Cilindro



- A. Cilindro
- B. Pirámide Rectangular
- C. Triangular Pirámide
- D. Triangular Prisma



- A. Triangular Pirámide
- B. Pirámide Rectangular
- C. Triangular Prisma
- D. Esfera



- A. Triangular Prisma
- B. Esfera
- C. Pirámide Rectangular
- D. Cilindro

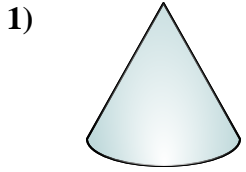
Respuestas

- 1. **D**
- 2. **A**
- 3. **C**
- 4. **D**
- 5. **A**
- 6. **C**
- 7. **C**
- 8. **A**
- 9. **C**
- 10. **B**
- 11. **A**
- 12. **A**

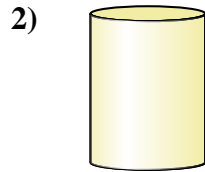


Determinar cuál de las opciones describe mejor la forma mostrada.

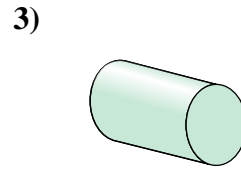
Respuestas



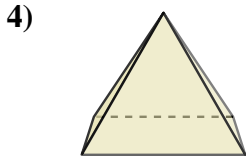
- A. Cilindro
- B. Prisma Rectangular
- C. Cono
- D. Pirámide Rectangular



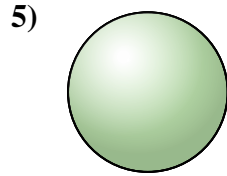
- A. Cubo
- B. Triangular Prisma
- C. Cilindro
- D. Esfera



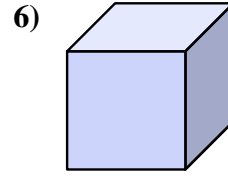
- A. Triangular Pirámide
- B. Esfera
- C. Triangular Prisma
- D. Cilindro



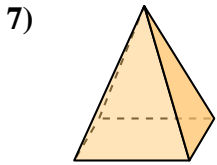
- A. Esfera
- B. Pirámide Rectangular
- C. Triangular Pirámide
- D. Cono



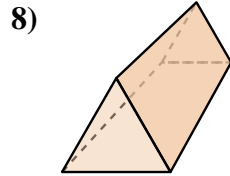
- A. Pirámide Rectangular
- B. Triangular Prisma
- C. Esfera
- D. Prisma Rectangular



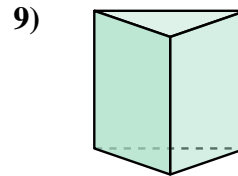
- A. Prisma Rectangular
- B. Cono
- C. Pirámide Rectangular
- D. Cubo



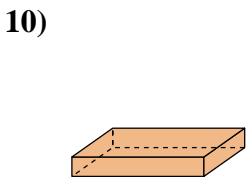
- A. Triangular Pirámide
- B. Pirámide Rectangular
- C. Cubo
- D. Esfera



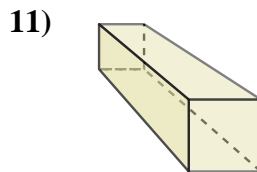
- A. Prisma Rectangular
- B. Esfera
- C. Triangular Prisma
- D. Cubo



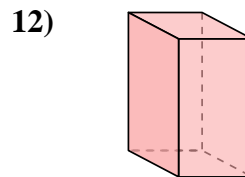
- A. Cono
- B. Triangular Pirámide
- C. Triangular Prisma
- D. Cubo



- A. Cono
- B. Pirámide Rectangular
- C. Triangular Prisma
- D. Prisma Rectangular



- A. Cilindro
- B. Esfera
- C. Prisma Rectangular
- D. Triangular Pirámide



- A. Triangular Prisma
- B. Cilindro
- C. Prisma Rectangular
- D. Triangular Pirámide

1. _____

2. _____

3. _____

4. _____

5. _____

6. _____

7. _____

8. _____

9. _____

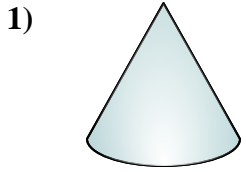
10. _____

11. _____

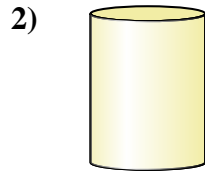
12. _____



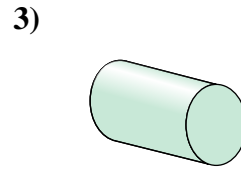
Determinar cuál de las opciones describe mejor la forma mostrada.



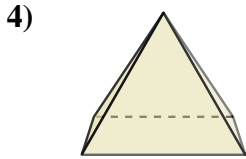
- 1) A. Cilindro
- B. Prisma Rectangular
- C. Cono
- D. Pirámide Rectangular



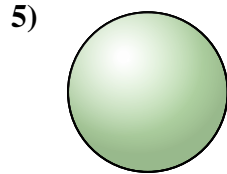
- 2) A. Cubo
- B. Triangular Prisma
- C. Cilindro
- D. Esfera



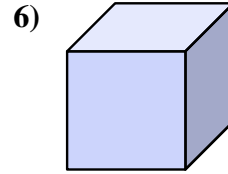
- 3) A. Triangular Pirámide
- B. Esfera
- C. Triangular Prisma
- D. Cilindro



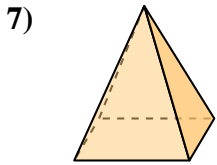
- 4) A. Esfera
- B. Pirámide Rectangular
- C. Triangular Pirámide
- D. Cono



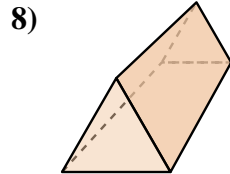
- 5) A. Pirámide Rectangular
- B. Triangular Prisma
- C. Esfera
- D. Prisma Rectangular



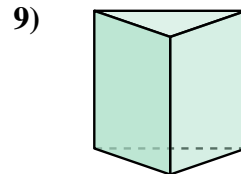
- 6) A. Prisma Rectangular
- B. Cono
- C. Pirámide Rectangular
- D. Cubo



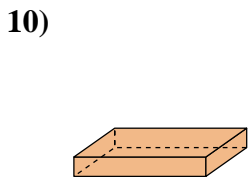
- 7) A. Triangular Pirámide
- B. Pirámide Rectangular
- C. Cubo
- D. Esfera



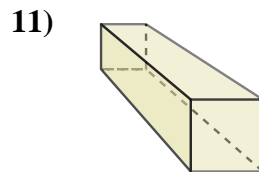
- 8) A. Prisma Rectangular
- B. Esfera
- C. Triangular Prisma
- D. Cubo



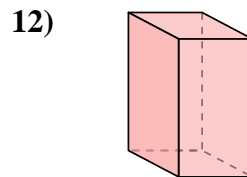
- 9) A. Cono
- B. Triangular Pirámide
- C. Triangular Prisma
- D. Cubo



- 10) A. Cono
- B. Pirámide Rectangular
- C. Triangular Prisma
- D. Prisma Rectangular



- 11) A. Cilindro
- B. Esfera
- C. Prisma Rectangular
- D. Triangular Pirámide



- 12) A. Triangular Prisma
- B. Cilindro
- C. Prisma Rectangular
- D. Triangular Pirámide

Respuestas

- 1. **C**
- 2. **C**
- 3. **D**
- 4. **B**
- 5. **C**
- 6. **D**
- 7. **B**
- 8. **C**
- 9. **C**
- 10. **D**
- 11. **C**
- 12. **C**