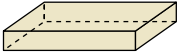




Determinar cuál de las opciones describe mejor la forma mostrada.

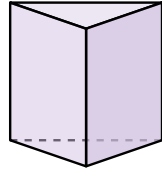
Respuestas

1)



- A. Cubo
- B. Pirámide Rectangular
- C. Prisma Rectangular
- D. Esfera

2)



- A. Triangular Prisma
- B. Pirámide Rectangular
- C. Esfera
- D. Prisma Rectangular

3)



- A. Triangular Pirámide
- B. Pirámide Rectangular
- C. Esfera
- D. Cilindro

1. _____

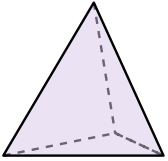
2. _____

3. _____

4. _____


5. _____

4)



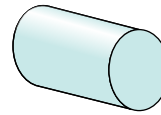
- A. Cilindro
- B. Triangular Prisma
- C. Esfera
- D. Triangular Pirámide

5)



- A. Esfera
- B. Pirámide Rectangular
- C. Cilindro
- D. Cono

6)



- A. Pirámide Rectangular
- B. Cilindro
- C. Cubo
- D. Esfera

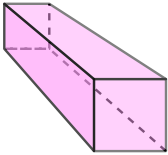
6. _____

7. _____

8. _____

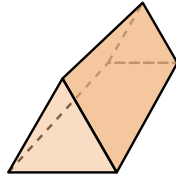
9. _____

7)



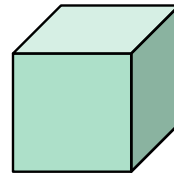
- A. Prisma Rectangular
- B. Pirámide Rectangular
- C. Cono
- D. Triangular Pirámide

8)



- A. Cilindro
- B. Prisma Rectangular
- C. Pirámide Rectangular
- D. Triangular Prisma

9)



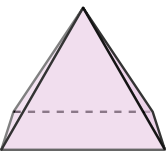
- A. Cubo
- B. Prisma Rectangular
- C. Triangular Prisma
- D. Cono

10. _____

11. _____

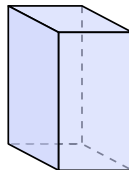
12. _____

10)



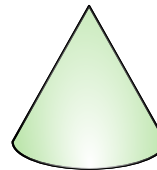
- A. Triangular Prisma
- B. Triangular Pirámide
- C. Esfera
- D. Pirámide Rectangular

11)



- A. Cubo
- B. Prisma Rectangular
- C. Cono
- D. Triangular Prisma

12)



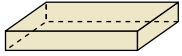
- A. Esfera
- B. Prisma Rectangular
- C. Cilindro
- D. Cono



Determinar cuál de las opciones describe mejor la forma mostrada.

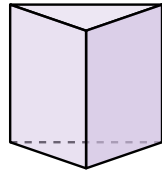
Respuestas

1)



- A. Cubo
- B. Pirámide Rectangular
- C. Prisma Rectangular
- D. Esfera

2)



- A. Triangular Prisma
- B. Pirámide Rectangular
- C. Esfera
- D. Prisma Rectangular

3)



- A. Triangular Pirámide
- B. Pirámide Rectangular
- C. Esfera
- D. Cilindro

1. **C**

2. **A**

3. **D**

4. **D**

5. **A**

6. **B**

7. **A**

8. **D**

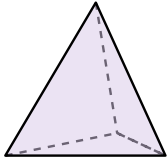
9. **A**

10. **D**

11. **B**


12. **D**

4)



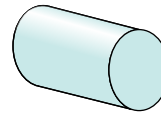
- A. Cilindro
- B. Triangular Prisma
- C. Esfera
- D. Triangular Pirámide

5)



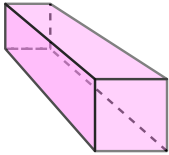
- A. Esfera
- B. Pirámide Rectangular
- C. Cilindro
- D. Cono

6)



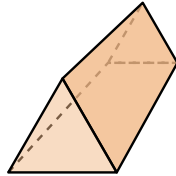
- A. Pirámide Rectangular
- B. Cilindro
- C. Cubo
- D. Esfera

7)



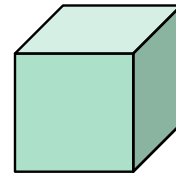
- A. Prisma Rectangular
- B. Pirámide Rectangular
- C. Cono
- D. Triangular Pirámide

8)



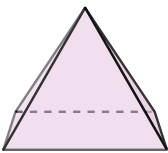
- A. Cilindro
- B. Prisma Rectangular
- C. Pirámide Rectangular
- D. Triangular Prisma

9)



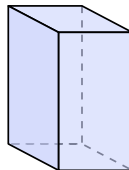
- A. Cubo
- B. Prisma Rectangular
- C. Triangular Prisma
- D. Cono

10)



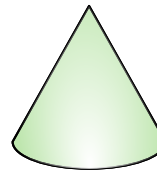
- A. Triangular Prisma
- B. Triangular Pirámide
- C. Esfera
- D. Pirámide Rectangular

11)



- A. Cubo
- B. Prisma Rectangular
- C. Cono
- D. Triangular Prisma

12)



- A. Esfera
- B. Prisma Rectangular
- C. Cilindro
- D. Cono