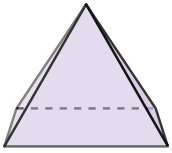




Determinar cuál de las opciones describe mejor la forma mostrada.


Respuestas

1)



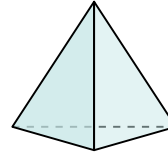
- A. Pirámide Rectangular
- B. Prisma Rectangular
- C. Cubo
- D. Triangular Prisma

2)



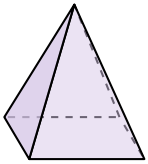
- A. Esfera
- B. Cono
- C. Cilindro
- D. Prisma Rectangular

3)



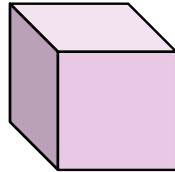
- A. Cono
- B. Triangular Pirámide
- C. Triangular Prisma
- D. Pirámide Rectangular

4)



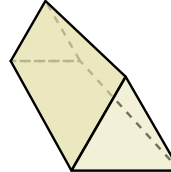
- A. Pirámide Rectangular
- B. Triangular Pirámide
- C. Cubo
- D. Cilindro

5)



- A. Triangular Prisma
- B. Triangular Pirámide
- C. Pirámide Rectangular
- D. Cubo

6)



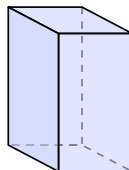
- A. Esfera
- B. Prisma Rectangular
- C. Cono
- D. Triangular Prisma

7)



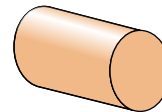
- A. Cubo
- B. Triangular Prisma
- C. Cilindro
- D. Cono

8)



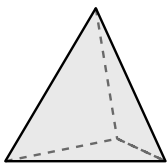
- A. Cilindro
- B. Esfera
- C. Triangular Pirámide
- D. Prisma Rectangular

9)



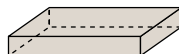
- A. Cono
- B. Cilindro
- C. Triangular Prisma
- D. Triangular Pirámide

10)



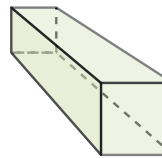
- A. Prisma Rectangular
- B. Cubo
- C. Triangular Pirámide
- D. Esfera

11)



- A. Cilindro
- B. Esfera
- C. Prisma Rectangular
- D. Cubo

12)



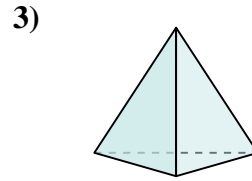
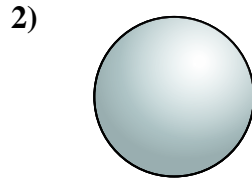
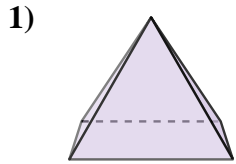
- A. Prisma Rectangular
- B. Pirámide Rectangular
- C. Cilindro
- D. Triangular Pirámide

- 1. _____
- 2. _____
- 3. _____
- 4. _____
- 5. _____
- 6. _____
- 7. _____
- 8. _____
- 9. _____
- 10. _____
- 11. _____
- 12. _____



Determinar cuál de las opciones describe mejor la forma mostrada.

Respuestas



- A. Pirámide Rectangular
- B. Prisma Rectangular
- C. Cubo
- D. Triangular Prisma

- A. Esfera
- B. Cono
- C. Cilindro
- D. Prisma Rectangular

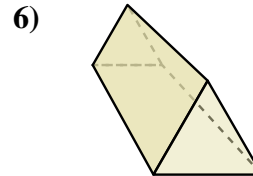
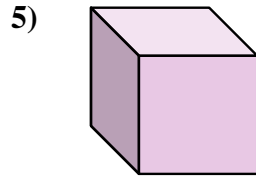
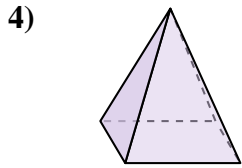
- A. Cono
- B. Triangular Pirámide
- C. Triangular Prisma
- D. Pirámide Rectangular

1. **A**

2. **A**

3. **B**

4. **A**



- A. Pirámide Rectangular
- B. Triangular Pirámide
- C. Cubo
- D. Cilindro

- A. Triangular Prisma
- B. Triangular Pirámide
- C. Pirámide Rectangular
- D. Cubo

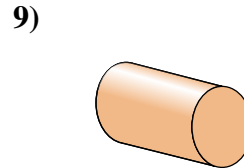
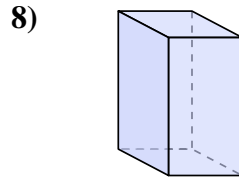
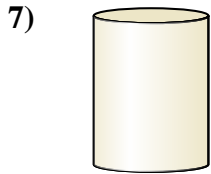
- A. Esfera
- B. Prisma Rectangular
- C. Cono
- D. Triangular Prisma

5. **D**

6. **D**

7. **C**

8. **D**



- A. Cubo
- B. Triangular Prisma
- C. Cilindro
- D. Cono

- A. Cilindro
- B. Esfera
- C. Triangular Pirámide
- D. Prisma Rectangular

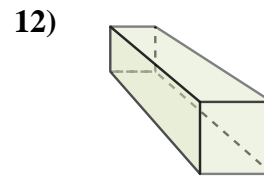
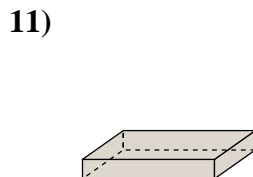
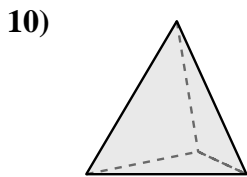
- A. Cono
- B. Cilindro
- C. Triangular Prisma
- D. Triangular Pirámide

9. **B**

10. **C**

11. **C**

12. **A**



- A. Prisma Rectangular
- B. Cubo
- C. Triangular Pirámide
- D. Esfera

- A. Cilindro
- B. Esfera
- C. Prisma Rectangular
- D. Cubo

- A. Prisma Rectangular
- B. Pirámide Rectangular
- C. Cilindro
- D. Triangular Pirámide