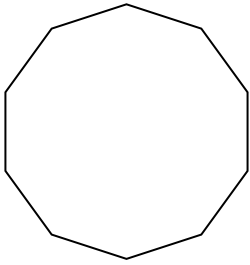


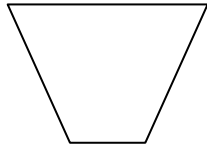


Determinar si la forma mostrada es una forma regular o irregular.

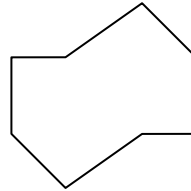
1)




2)



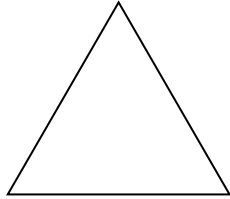
3)



4)



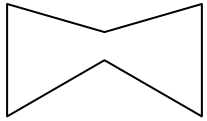
5)




6)



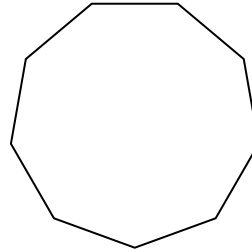
7)



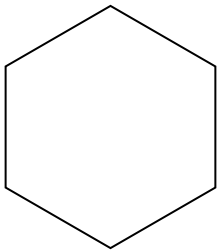
8)




9)



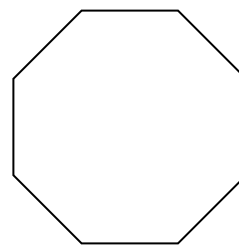
10)



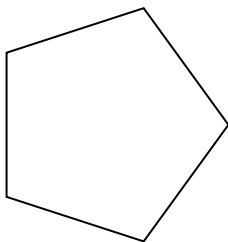
11)




12)



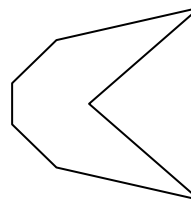
13)



14)



15)



Respuestas

1. _____

2. _____

3. _____

4. _____

5. _____

6. _____

7. _____

8. _____

9. _____

10. _____

11. _____

12. _____

13. _____

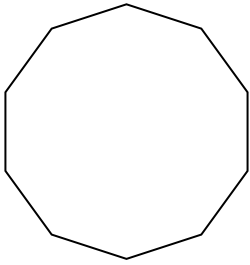
14. _____

15. _____

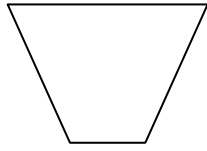


Determinar si la forma mostrada es una forma regular o irregular.

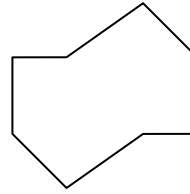
1)




2)



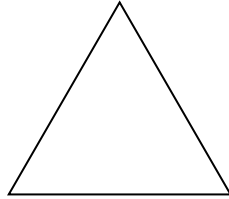
3)



4)



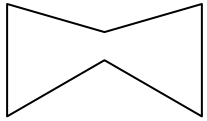
5)




6)



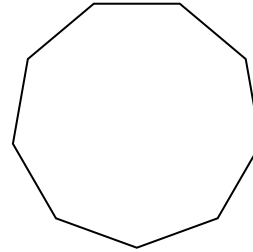
7)



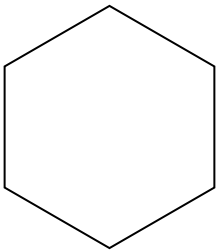
8)




9)



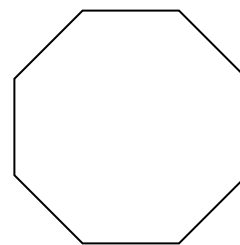
10)



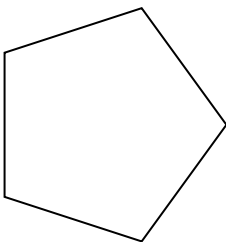
11)




12)



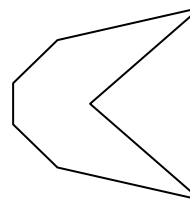
13)



14)



15)



Respuestas

1. regular

2. irregular

3. irregular

4. irregular

5. regular

6. irregular

7. irregular

8. regular

9. regular

10. regular

11. irregular

12. regular

13. regular

14. irregular

15. irregular