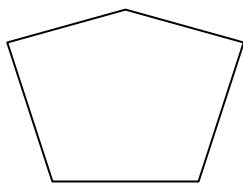


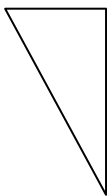


Determinar si la forma mostrada es una forma regular o irregular.

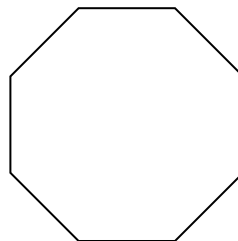
1)




2)



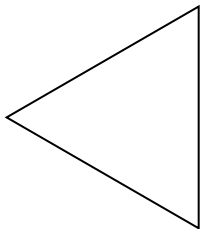
3)



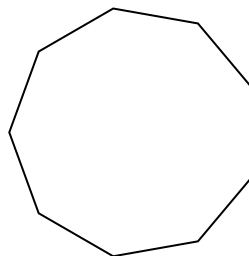
4)



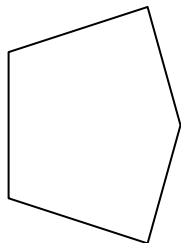
5)




6)



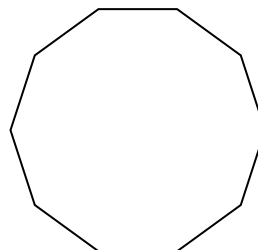
7)



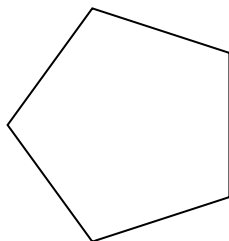
8)



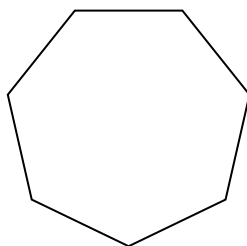
9)




10)



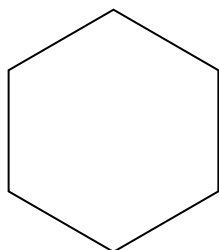
11)




12)




13)



14)



15)



Respuestas

1. _____

2. _____

3. _____

4. _____

5. _____

6. _____

7. _____

8. _____

9. _____

10. _____

11. _____

12. _____

13. _____

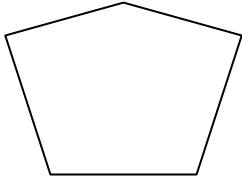
14. _____

15. _____



Determinar si la forma mostrada es una forma regular o irregular.

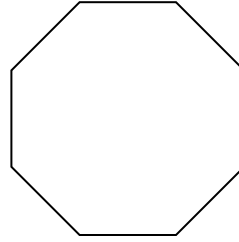
1)



2)



3)




Respuestas

1. irregular

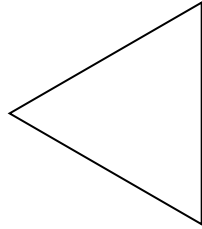
2. irregular

3. regular

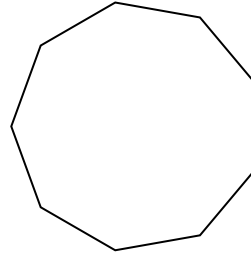
4)



5)



6)

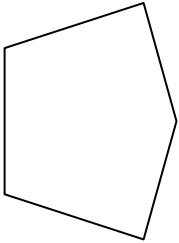


4. irregular


5. regular

6. regular

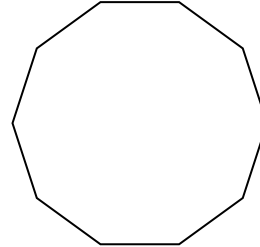
7)



8)



9)

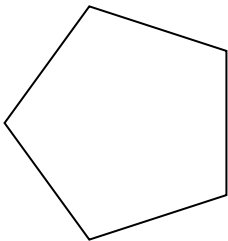


7. irregular

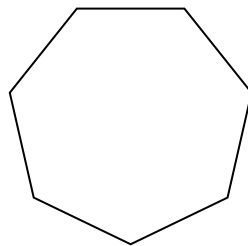
8. irregular

9. regular


10)



11)



12)



10. regular

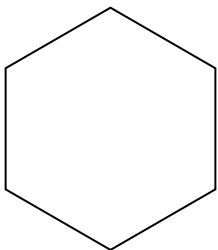
11. regular

12. irregular


13. regular

14. irregular


13)



14)



15)



15. regular