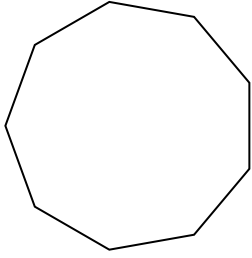





Determinar si la forma mostrada es una forma regular o irregular.

**Respuestas**


1)



2)



3)




1. \_\_\_\_\_

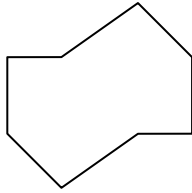
2. \_\_\_\_\_

3. \_\_\_\_\_

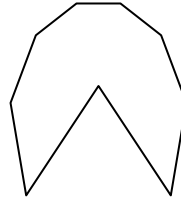
4)



5)



6)




4. \_\_\_\_\_

5. \_\_\_\_\_

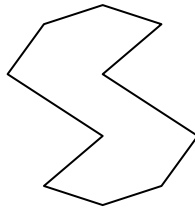
6. \_\_\_\_\_

7. \_\_\_\_\_

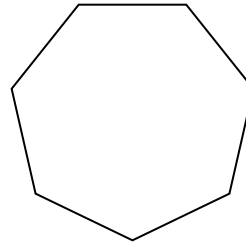
7)



8)



9)



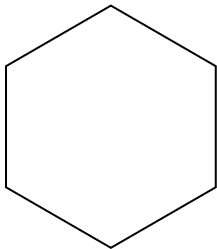
8. \_\_\_\_\_

9. \_\_\_\_\_

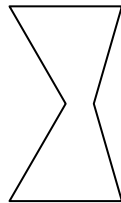
10. \_\_\_\_\_

11. \_\_\_\_\_

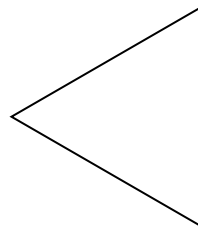
10)



11)



12)




12. \_\_\_\_\_

13. \_\_\_\_\_

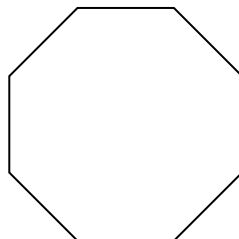
14. \_\_\_\_\_

15. \_\_\_\_\_

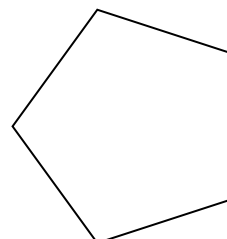
13)



14)



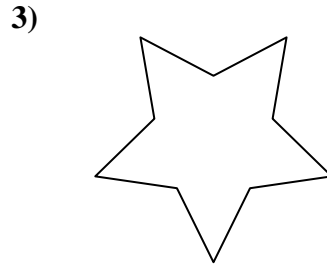

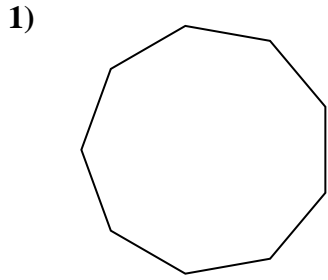
15)



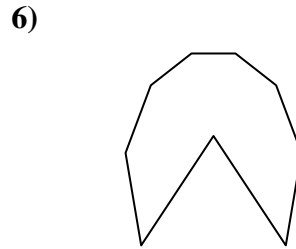
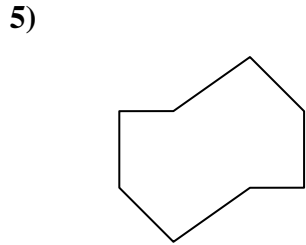



Determinar si la forma mostrada es una forma regular o irregular.

Respuestas



1. Regulare



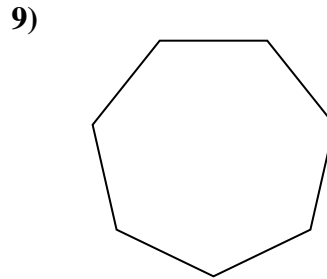
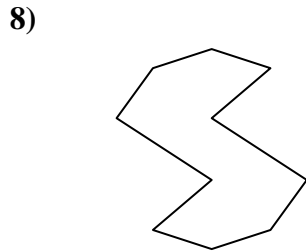
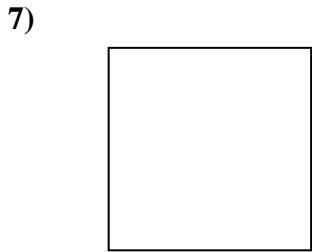
2. IrRegularee

3. IrRegularee

4. IrRegularee

5. IrRegularee

6. IrRegularee



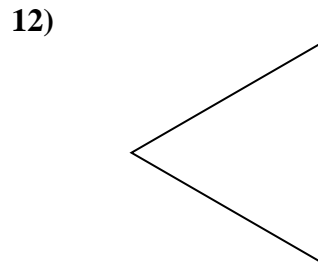
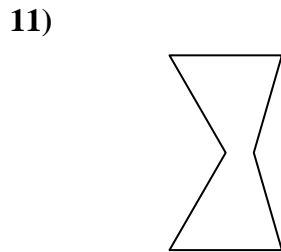
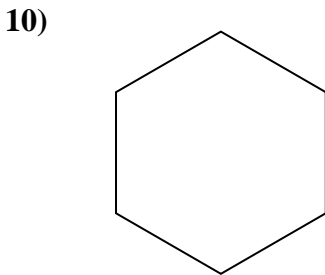
7. Regulare

8. IrRegularee

9. Regulare

10. Regulare

11. IrRegularee



12. Regulare

13. IrRegularee

14. Regulare

15. Regulare

