


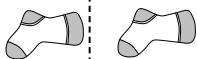


Determinar si la forma se está trasladando (deslizando), rotando (girando) o reflejando (volteando)

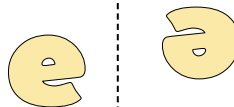
1)



2)



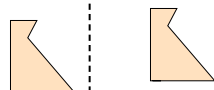
3)



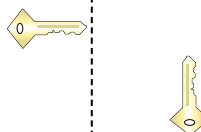
4)




5)




6)



7)



8)



9)



10)



11)



12)



13)



14)



15)



Respuestas

- 1. _____
- 2. _____
- 3. _____
- 4. _____
- 5. _____
- 6. _____
- 7. _____
- 8. _____
- 9. _____
- 10. _____
- 11. _____
- 12. _____
- 13. _____
- 14. _____
- 15. _____

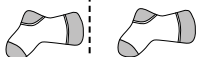


Determinar si la forma se está trasladando (deslizando), rotando (girando) o reflejando (volteando)

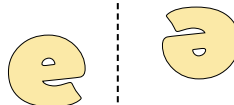
1)



2)



3)

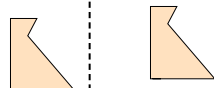


1. **volteando**

4)



5)




6)




2. **deslizando**

7)



8)



9)



3. **girando**

10)



11)



12)



4. **volteando**

5. **deslizando**

6. **girando**

7. **volteando**

8. **deslizando**

9. **girando**

10. **volteando**

11. **deslizando**

12. **girando**

13. **volteando**

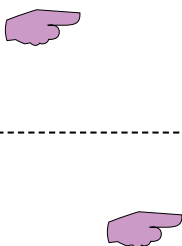
14. **deslizando**

15. **girando**

13)



14)



15)

