



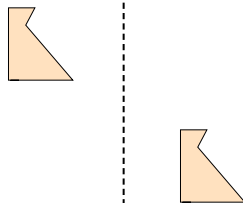
Determinar si la forma se está trasladando (deslizando), rotando (girando) o reflejando (volteando)

Respuestas

1)



2)



3)




1. _____

2. _____


3. _____

4. _____

4)



5)



6)



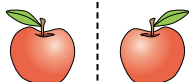
5. _____

6. _____

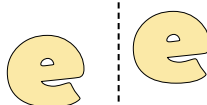
7. _____

8. _____

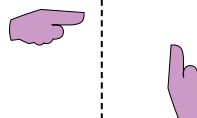
7)



8)



9)



9. _____

10. _____

11. _____

12. _____

10)



11)



12)



13. _____

14. _____

15. _____



13)



14)



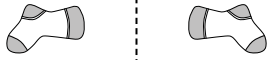
15)



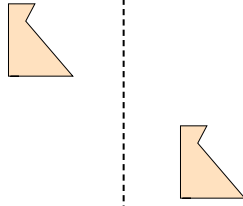


Determinar si la forma se está trasladando (deslizando), rotando (girando) o reflejando (volteando)

1)



2)




3)



4)



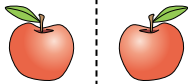
5)



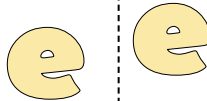
6)



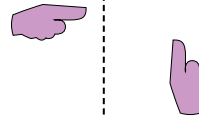
7)



8)




9)



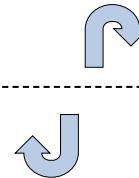
10)



11)



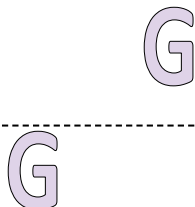
12)



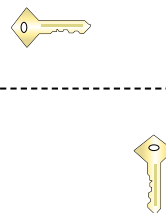
13)



14)



15)



Respuestas

1. volteando
2. deslizando
3. girando
4. volteando
5. deslizando
6. girando
7. volteando
8. deslizando
9. girando
10. volteando
11. deslizando
12. girando
13. volteando
14. deslizando
15. girando