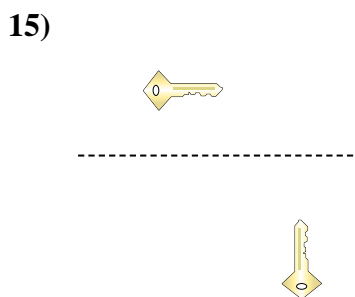
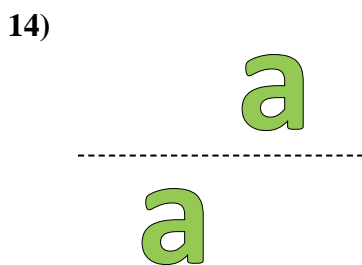

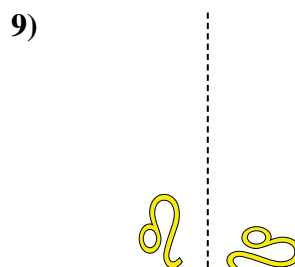
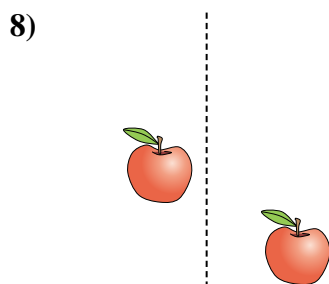
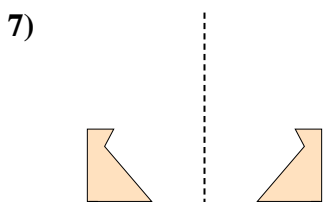
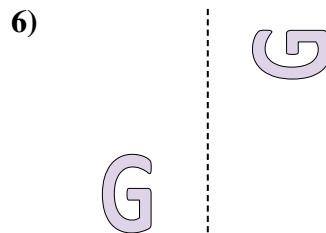

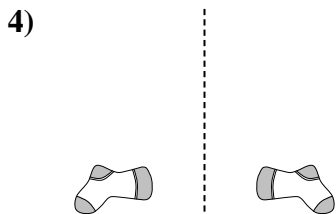





Determinar si la forma se está trasladando (deslizando), rotando (girando) o reflejando (volteando)

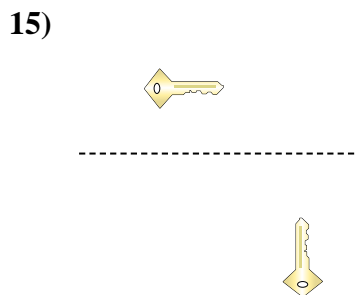
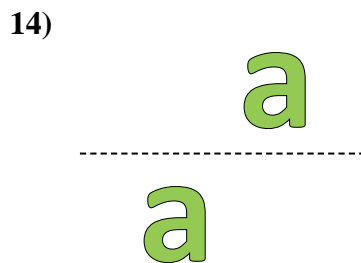

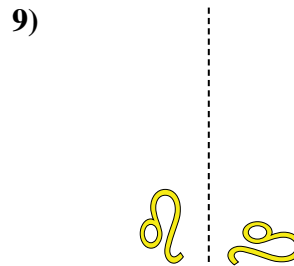
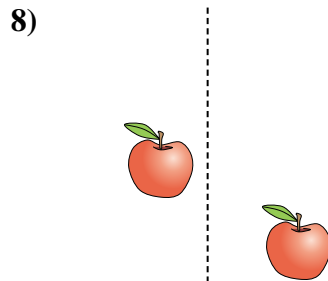
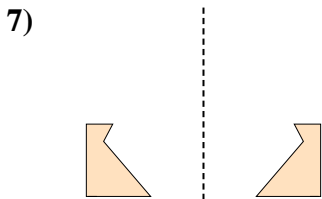
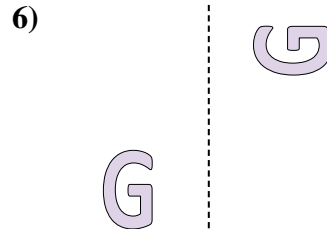

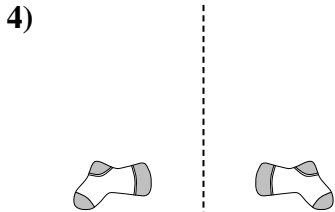



Respuestas

1. _____
2. _____
3. _____
4. _____
5. _____
6. _____
7. _____
8. _____
9. _____
10. _____
11. _____
12. _____
13. _____
14. _____
15. _____



Determinar si la forma se está trasladando (deslizando), rotando (girando) o reflejando (volteando)



Respuestas

1. **volteando**

2. **deslizando**

3. **girando**

4. **volteando**

5. **deslizando**

6. **girando**

7. **volteando**

8. **deslizando**

9. **girando**

10. **volteando**

11. **deslizando**

12. **girando**

13. **volteando**

14. **deslizando**

15. **girando**