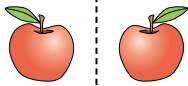


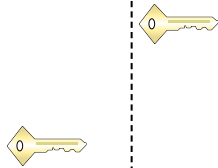


Determinar si la forma se está trasladando (deslizando), rotando (girando) o reflejando (volteando)

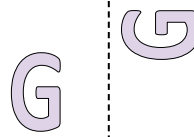
1)




2)



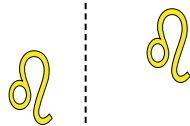
3)




4)




5)




6)



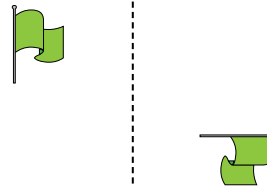
7)



8)



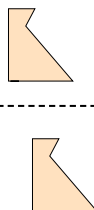
9)




10)




11)




12)



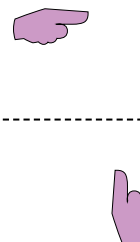
13)



14)



15)

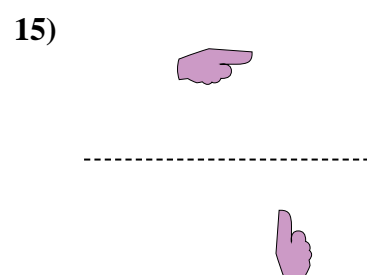
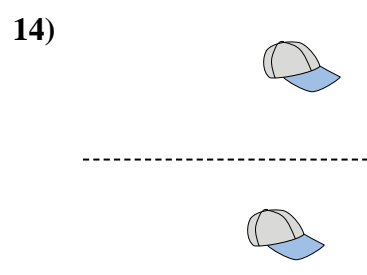
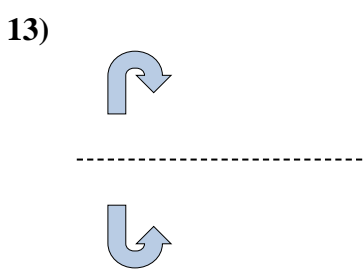
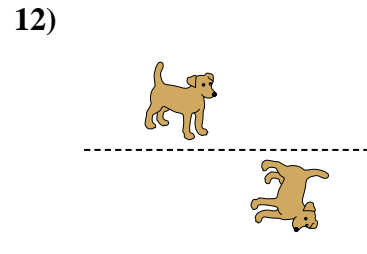
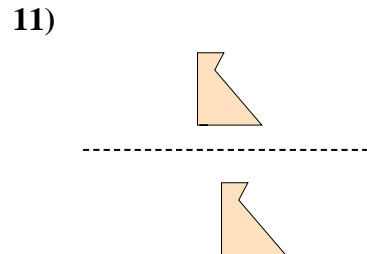
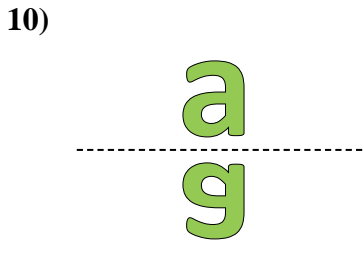
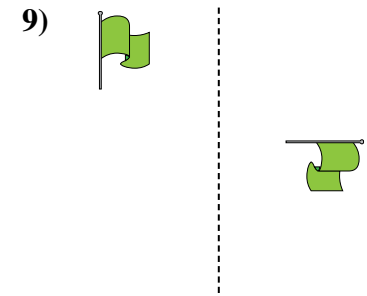
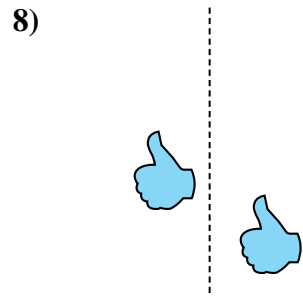
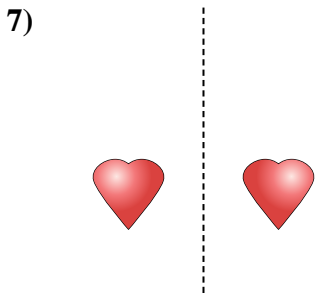
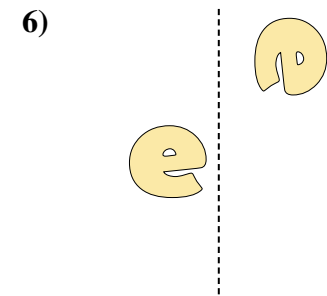
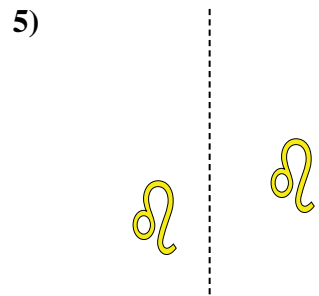
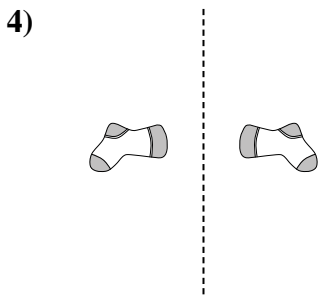
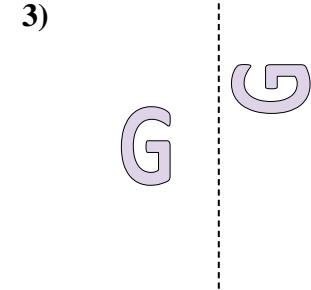
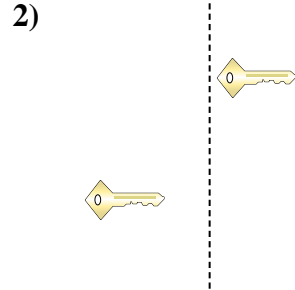
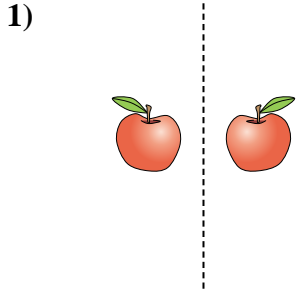


**Respuestas**

1. \_\_\_\_\_
2. \_\_\_\_\_
3. \_\_\_\_\_
4. \_\_\_\_\_
5. \_\_\_\_\_
6. \_\_\_\_\_
7. \_\_\_\_\_
8. \_\_\_\_\_
9. \_\_\_\_\_
10. \_\_\_\_\_
11. \_\_\_\_\_
12. \_\_\_\_\_
13. \_\_\_\_\_
14. \_\_\_\_\_
15. \_\_\_\_\_



Determinar si la forma se está trasladando (deslizando), rotando (girando) o reflejando (volteando)



**Respuestas**

1. volteando
2. deslizando
3. girando
4. volteando
5. deslizando
6. girando
7. volteando
8. deslizando
9. girando
10. volteando
11. deslizando
12. girando
13. volteando
14. deslizando
15. girando