
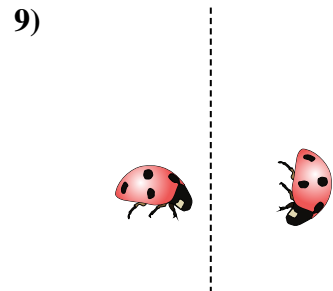
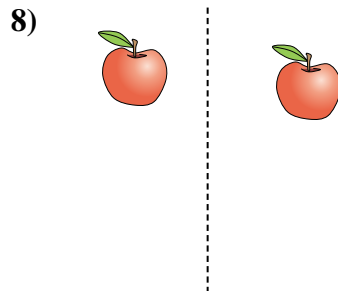
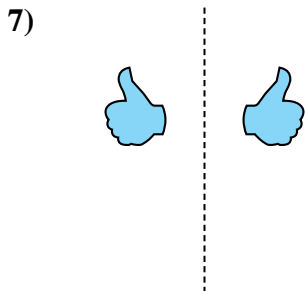
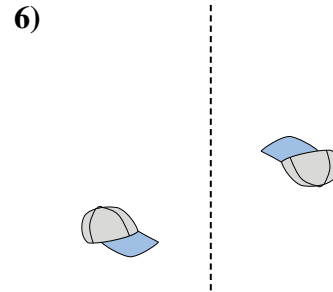
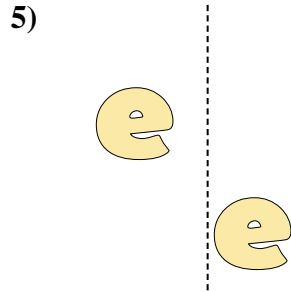
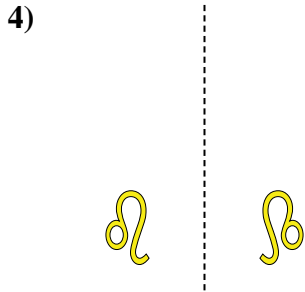
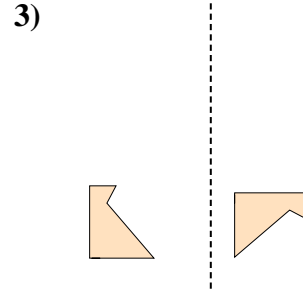
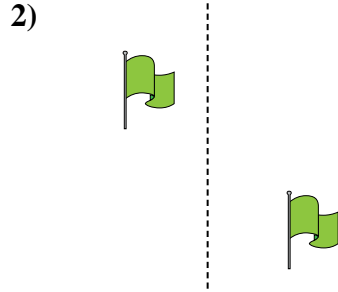
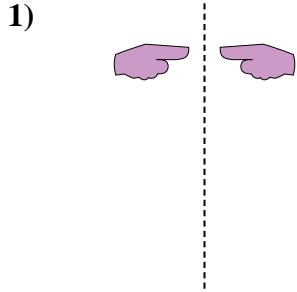




Determinar si la forma se está trasladando (deslizando), rotando (girando) o reflejando (volteando)

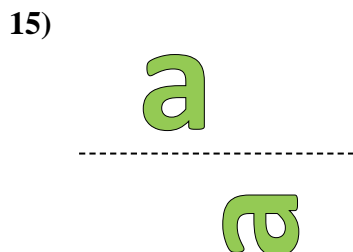
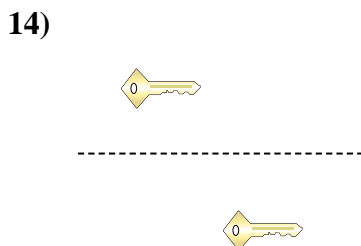
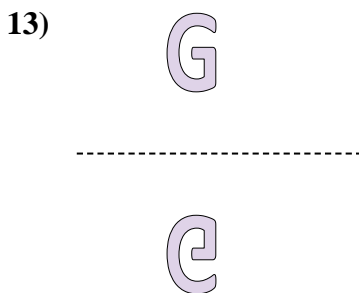



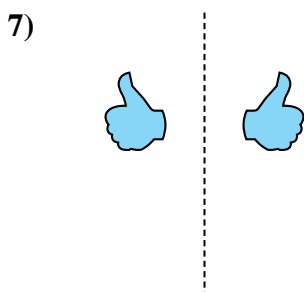
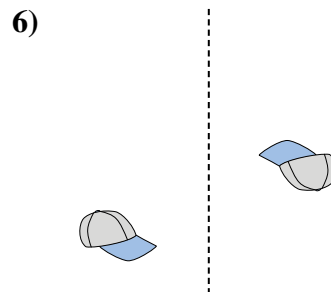
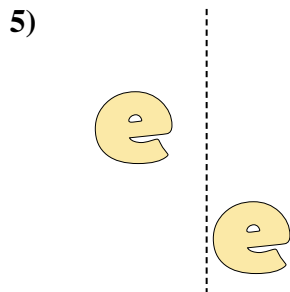
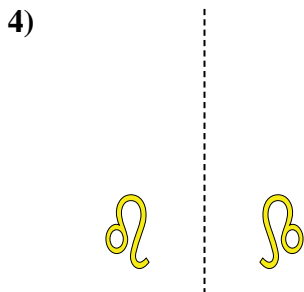
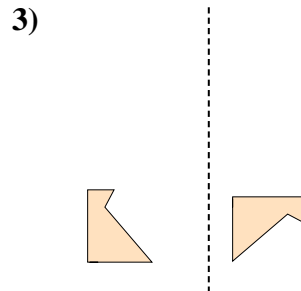
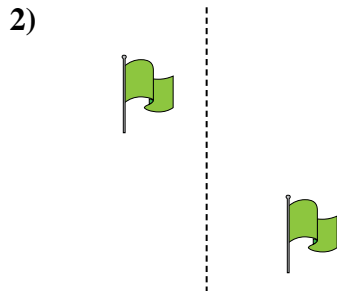
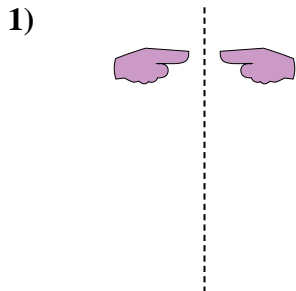


Respuestas

1. \_\_\_\_\_
2. \_\_\_\_\_
3. \_\_\_\_\_
4. \_\_\_\_\_
5. \_\_\_\_\_
6. \_\_\_\_\_
7. \_\_\_\_\_
8. \_\_\_\_\_
9. \_\_\_\_\_
10. \_\_\_\_\_
11. \_\_\_\_\_
12. \_\_\_\_\_
13. \_\_\_\_\_
14. \_\_\_\_\_
15. \_\_\_\_\_



Determinar si la forma se está trasladando (deslizando), rotando (girando) o reflejando (volteando)



Respuestas

1. volteando
2. deslizando
3. girando
4. volteando
5. deslizando
6. girando
7. volteando
8. deslizando
9. girando
10. volteando
11. deslizando
12. girando
13. volteando
14. deslizando
15. girando