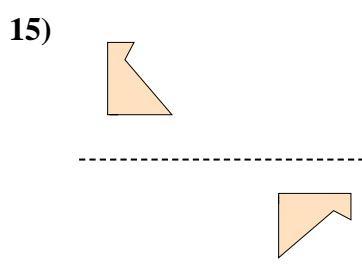
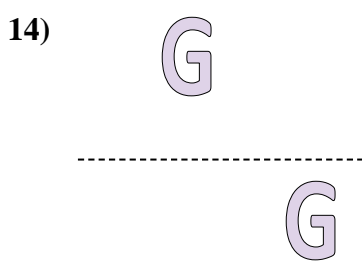


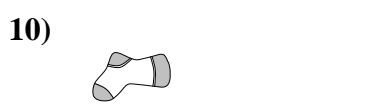
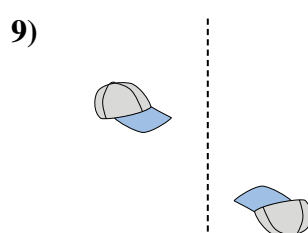
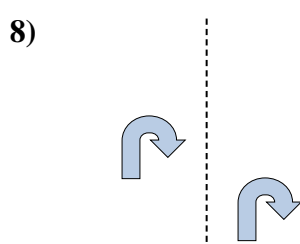
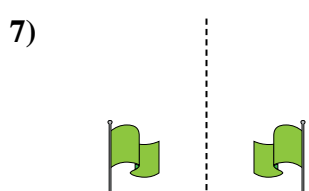
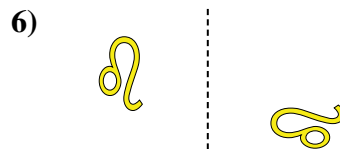
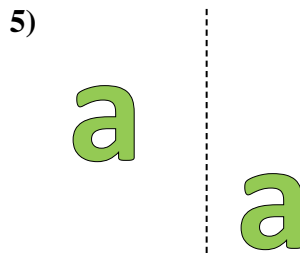
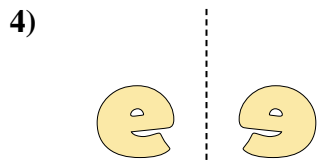
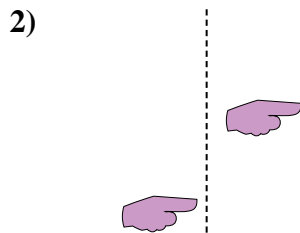





Determinar si la forma se está trasladando (deslizando), rotando (girando) o reflejando (volteando)

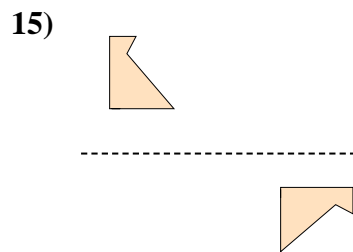
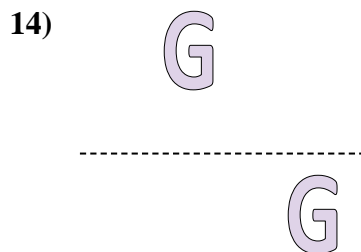
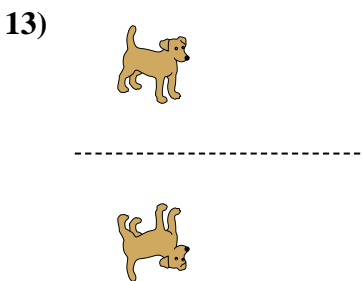
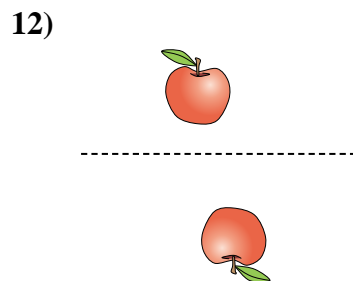
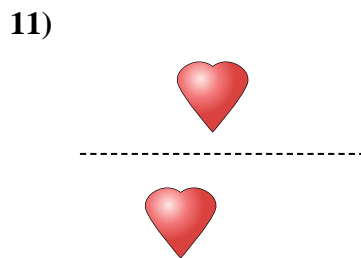
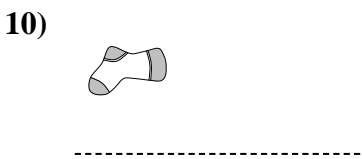
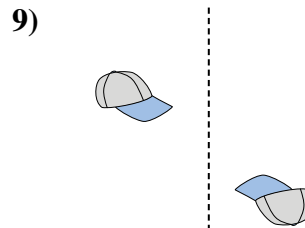
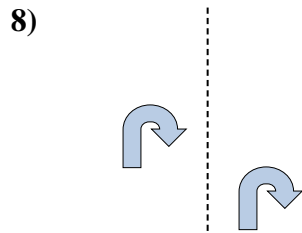
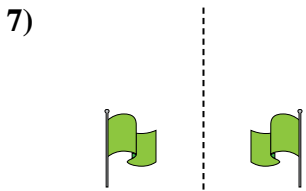
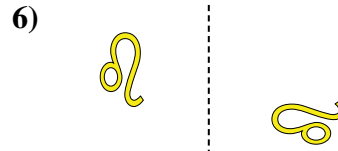
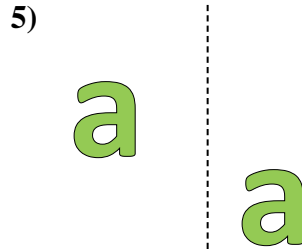
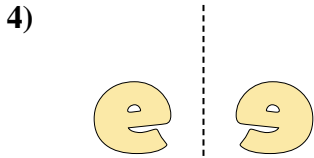
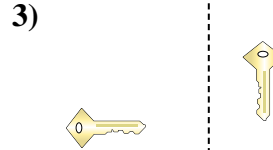
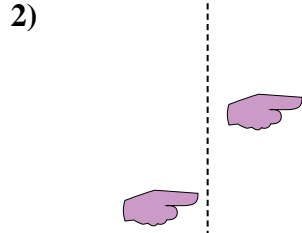
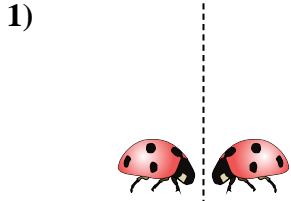
Respuestas



1. _____
2. _____
3. _____
4. _____
5. _____
6. _____
7. _____
8. _____
9. _____
10. _____
11. _____
12. _____
13. _____
14. _____
15. _____



Determinar si la forma se está trasladando (deslizando), rotando (girando) o reflejando (volteando)



Respuestas

1. volteando
2. deslizando
3. girando
4. volteando
5. deslizando
6. girando
7. volteando
8. deslizando
9. girando
10. volteando
11. deslizando
12. girando
13. volteando
14. deslizando
15. girando

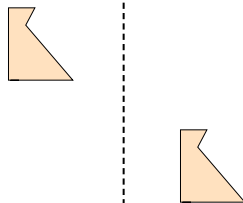


Determinar si la forma se está trasladando (deslizando), rotando (girando) o reflejando (volteando)

1)



2)



3)




1. _____

2. _____


3. _____

4. _____

4)



5)



6)



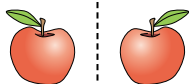
5. _____

6. _____

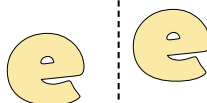
7. _____

8. _____

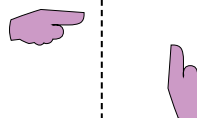
7)



8)



9)



9. _____

10. _____

11. _____

12. _____

10)



11)



12)



13. _____

14. _____



15. _____

13)



14)



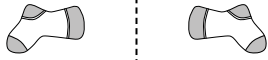
15)



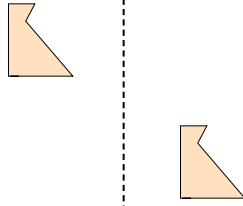


Determinar si la forma se está trasladando (deslizando), rotando (girando) o reflejando (volteando)

1)



2)




3)



4)



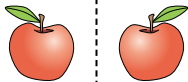
5)



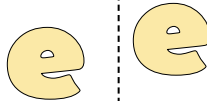
6)



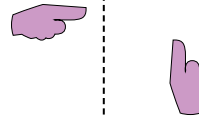
7)



8)




9)



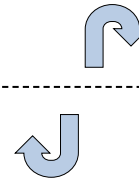
10)



11)



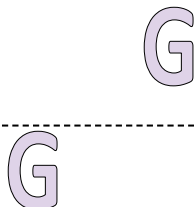
12)



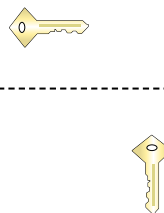
13)



14)



15)



Respuestas

1. **volteando**

2. **deslizando**

3. **girando**

4. **volteando**

5. **deslizando**

6. **girando**

7. **volteando**

8. **deslizando**

9. **girando**

10. **volteando**

11. **deslizando**

12. **girando**

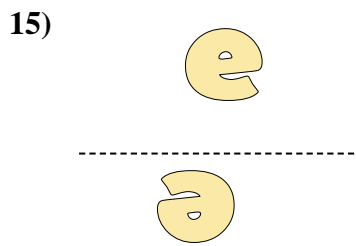

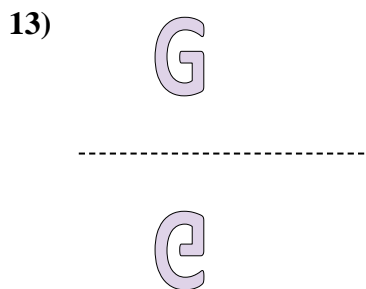
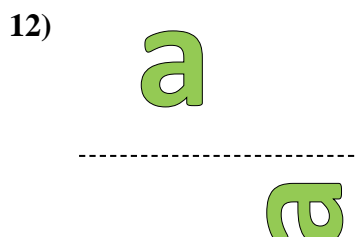
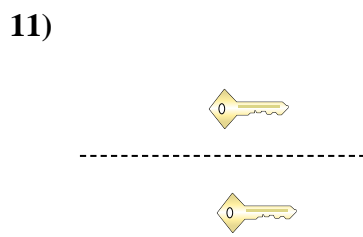
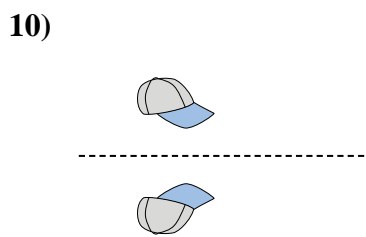
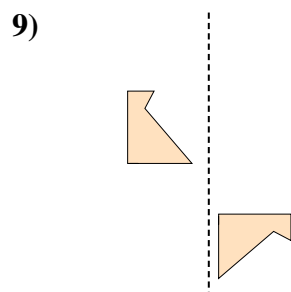
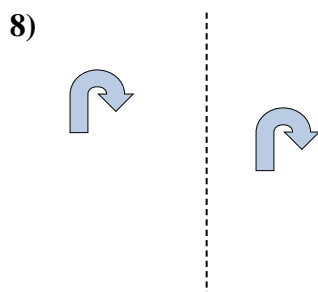
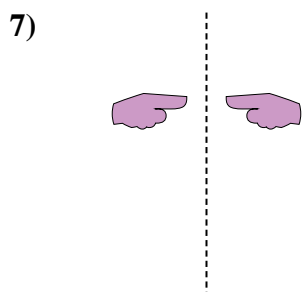
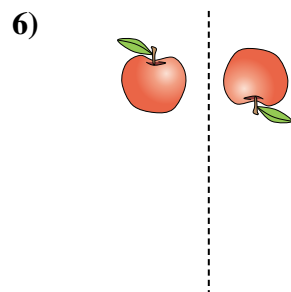
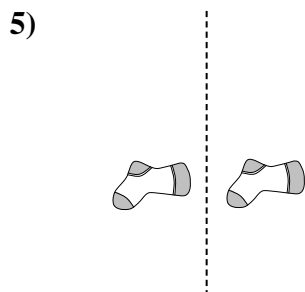
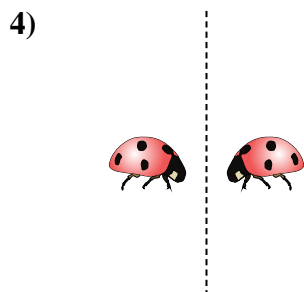
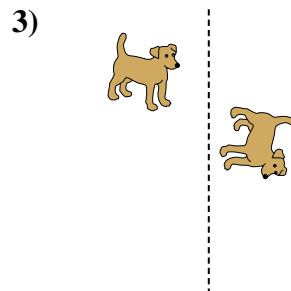
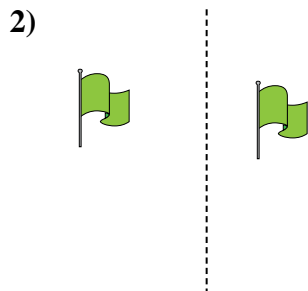
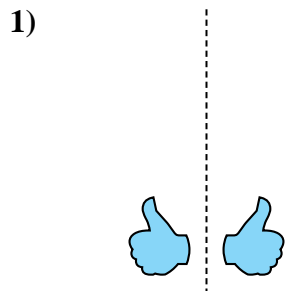
13. **volteando**

14. **deslizando**

15. **girando**



Determinar si la forma se está trasladando (deslizando), rotando (girando) o reflejando (volteando)

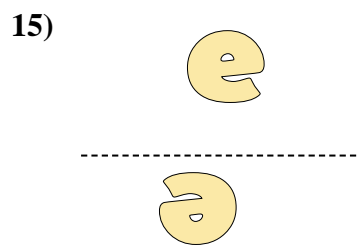

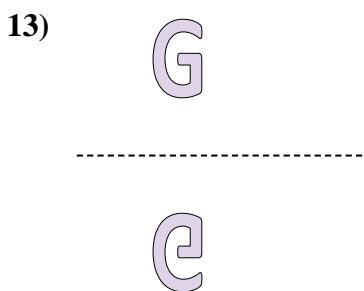
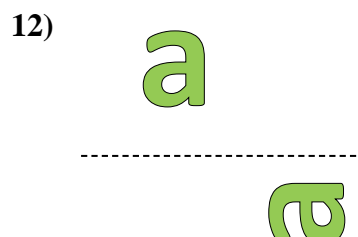
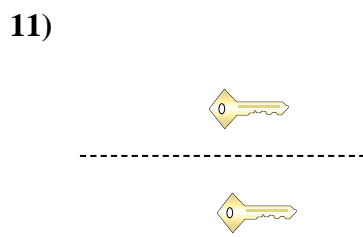
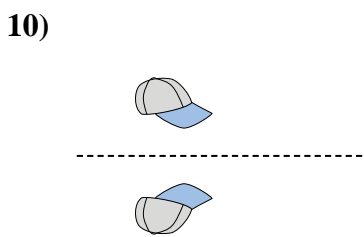
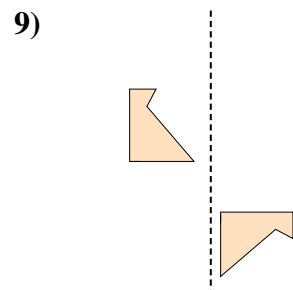
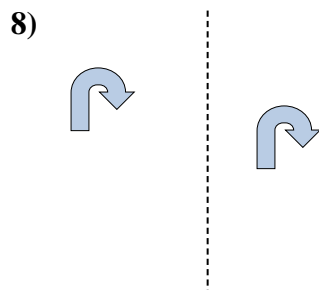
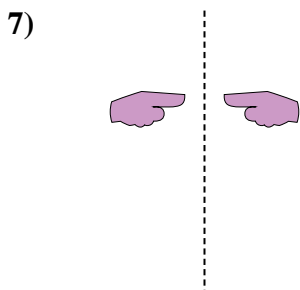
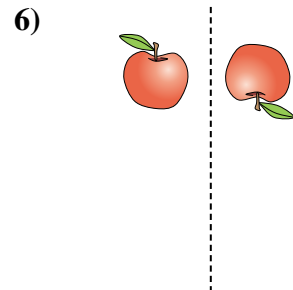
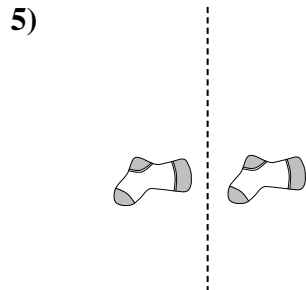
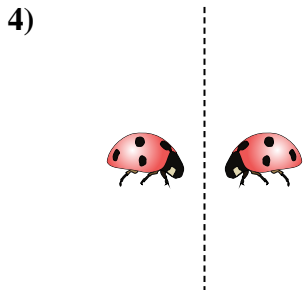
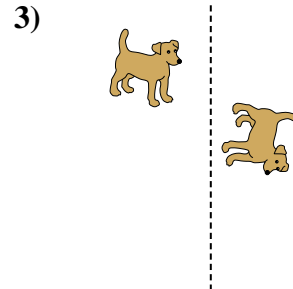
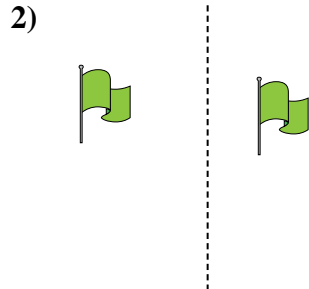
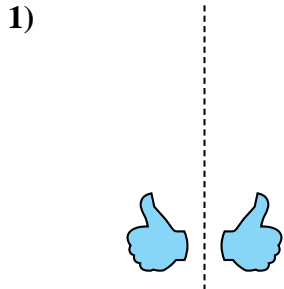


Respuestas

1. _____
2. _____
3. _____
4. _____
5. _____
6. _____
7. _____
8. _____
9. _____
10. _____
11. _____
12. _____
13. _____
14. _____
15. _____



Determinar si la forma se está trasladando (deslizando), rotando (girando) o reflejando (volteando)



Respuestas

1. volteando
2. deslizando
3. girando
4. volteando
5. deslizando
6. girando
7. volteando
8. deslizando
9. girando
10. volteando
11. deslizando
12. girando
13. volteando
14. deslizando
15. girando

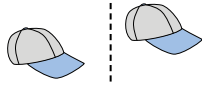


Determinar si la forma se está trasladando (deslizando), rotando (girando) o reflejando (volteando)


1)



2)



3)



1. _____

2. _____


3. _____

4. _____

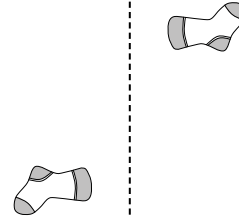
4)



5)



6)



5. _____

6. _____

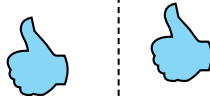
7. _____

8. _____

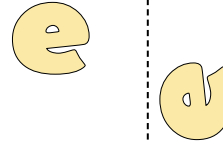
7)



8)



9)



9. _____

10. _____

11. _____

12. _____

10)



11)



12)



13. _____

14. _____

15. _____



13)



14)

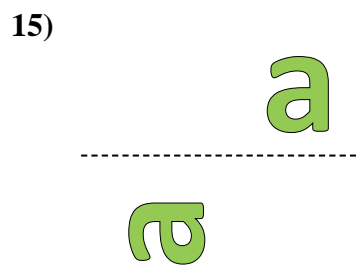
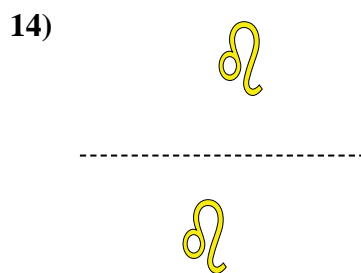
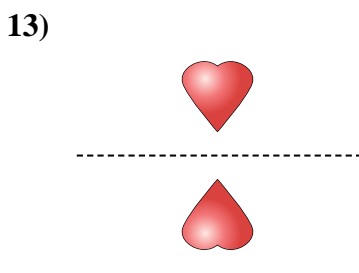
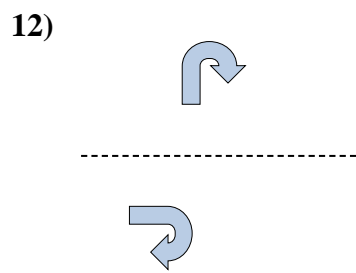
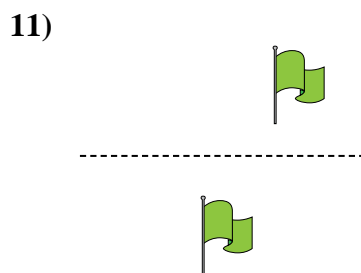
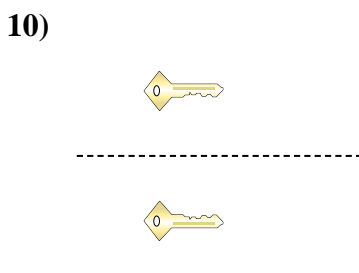
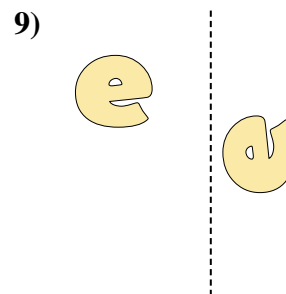
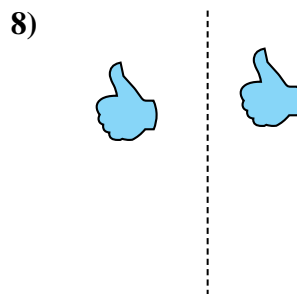
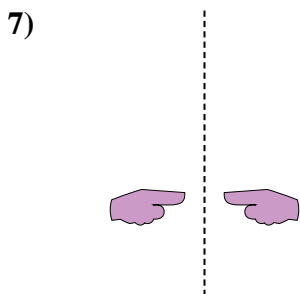
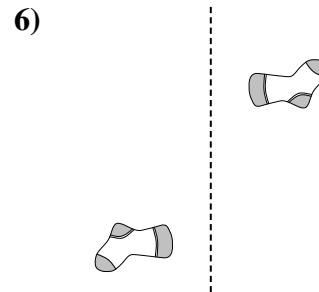
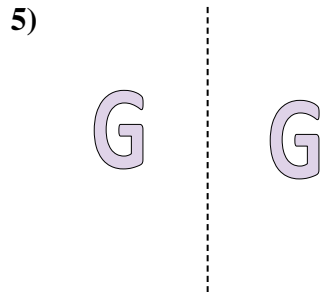
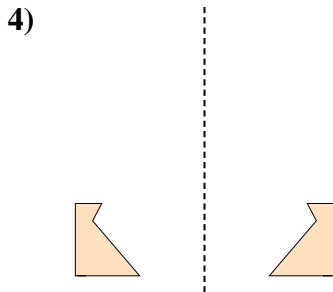
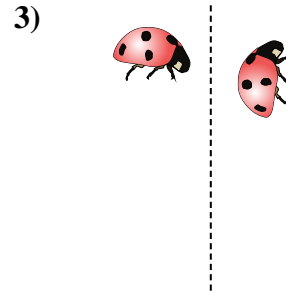
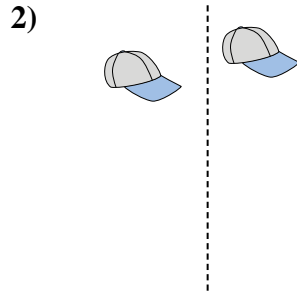
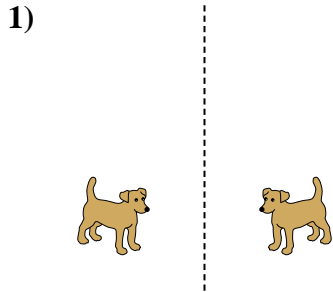


15)





Determinar si la forma se está trasladando (deslizando), rotando (girando) o reflejando (volteando)



Respuestas

1. volteando
2. deslizando
3. girando
4. volteando
5. deslizando
6. girando
7. volteando
8. deslizando
9. girando
10. volteando
11. deslizando
12. girando
13. volteando
14. deslizando
15. girando



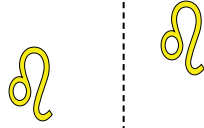
Determinar si la forma se está trasladando (deslizado), rotando (girando) o reflejando (volteando)

Respuestas


1)



2)



3)



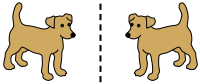
1. _____

2. _____

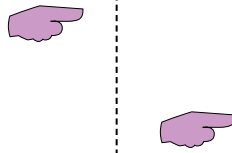
3. _____

4. _____


4)



5)



6)



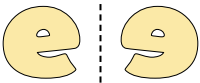
5. _____

6. _____

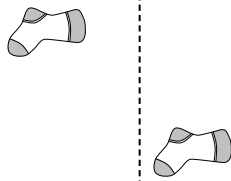
7. _____

8. _____

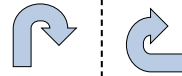
7)



8)



9)



9. _____

10. _____

11. _____

12. _____

10)



11)



12)



13. _____

14. _____

15. _____



13)



14)



15)






Determinar si la forma se está trasladando (deslizando), rotando (girando) o reflejando (volteando)


1)



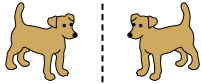
2)



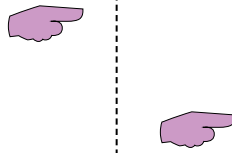
3)




4)



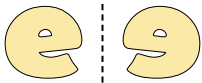
5)



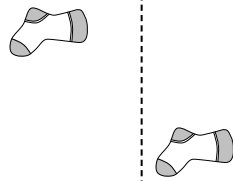
6)



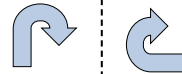
7)



8)



9)



10)



11)



12)



13)



14)



15)



Respuestas

1. **volteando**

2. **deslizando**

3. **girando**

4. **volteando**

5. **deslizando**

6. **girando**

7. **volteando**

8. **deslizando**

9. **girando**

10. **volteando**

11. **deslizando**

12. **girando**

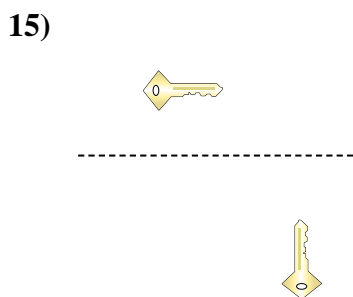
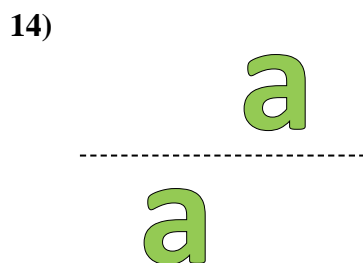


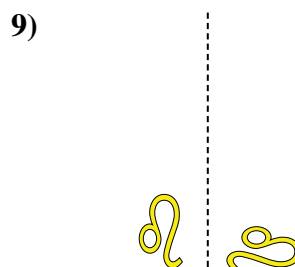
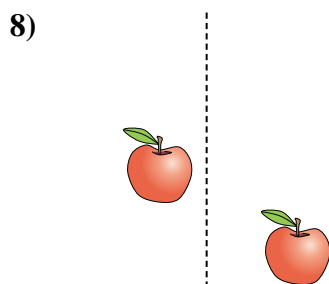
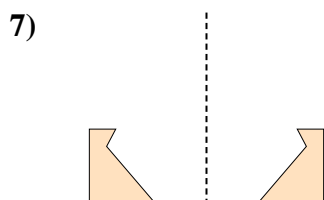
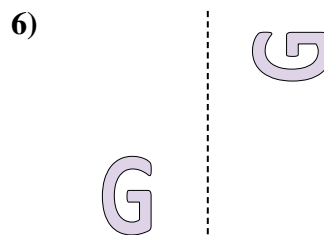

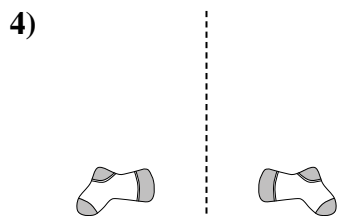


13. **volteando**

14. **deslizando**

15. **girando**



Determinar si la forma se está trasladando (deslizando), rotando (girando) o reflejando (volteando)


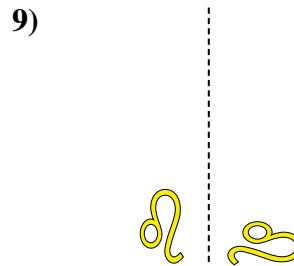
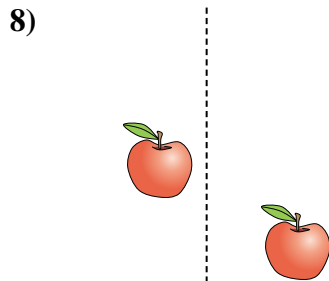
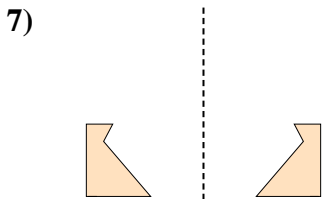
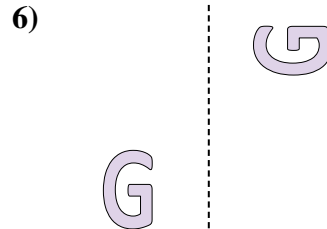

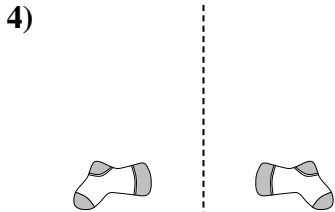



Respuestas

1. _____
2. _____
3. _____
4. _____
5. _____
6. _____
7. _____
8. _____
9. _____
10. _____
11. _____
12. _____
13. _____
14. _____
15. _____



Determinar si la forma se está trasladando (deslizando), rotando (girando) o reflejando (volteando)



Respuestas

1. **volteando**

2. **deslizando**

3. **girando**

4. **volteando**

5. **deslizando**

6. **girando**

7. **volteando**

8. **deslizando**

9. **girando**

10. **volteando**

11. **deslizando**

12. **girando**

13. **volteando**

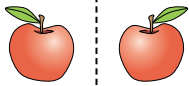
14. **deslizando**

15. **girando**

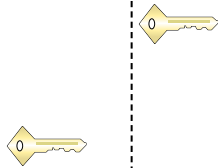


Determinar si la forma se está trasladando (deslizando), rotando (girando) o reflejando (volteando)

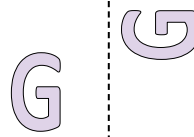
1)




2)



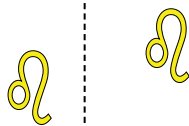
3)




4)



5)




6)



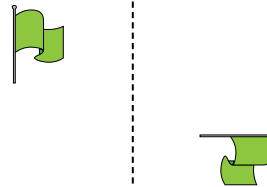
7)



8)



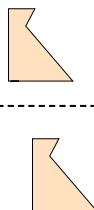
9)




10)




11)




12)



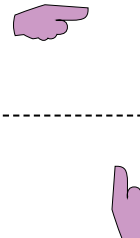
13)



14)



15)

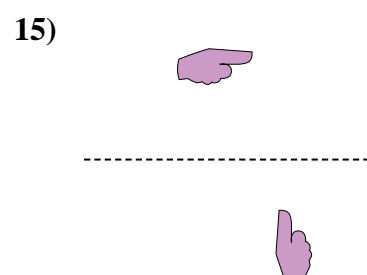
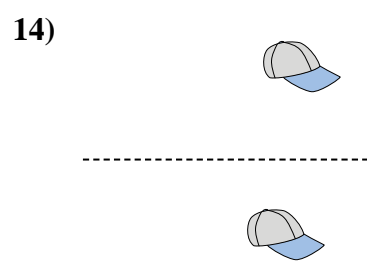
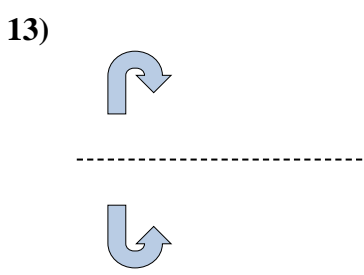
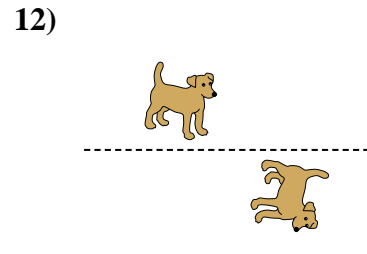
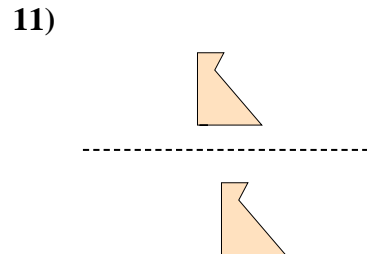
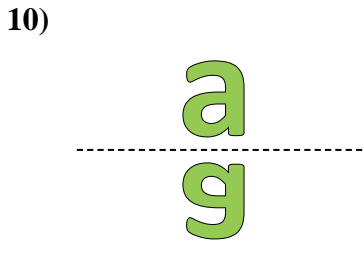
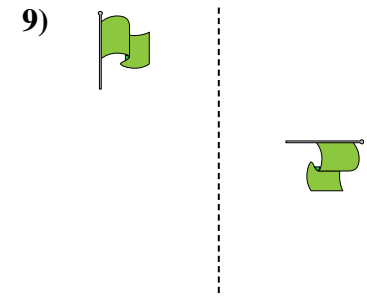
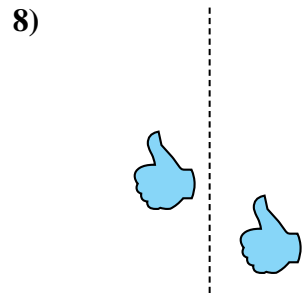
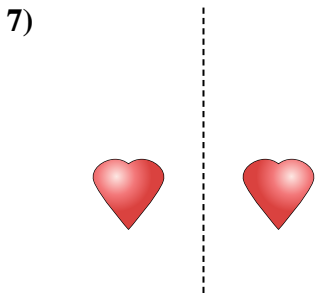
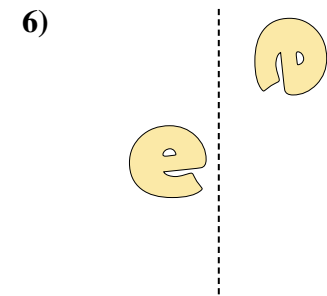
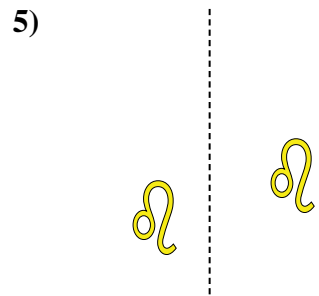
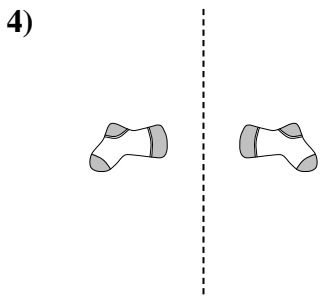
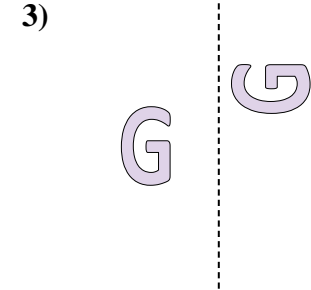
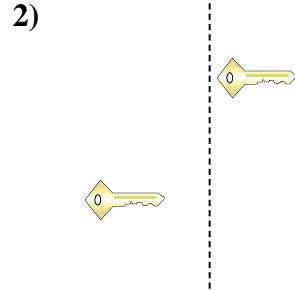
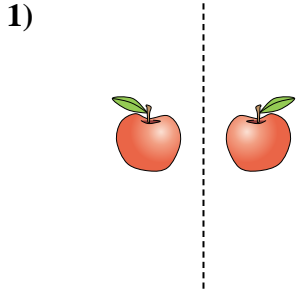


Respuestas

1. _____
2. _____
3. _____
4. _____
5. _____
6. _____
7. _____
8. _____
9. _____
10. _____
11. _____
12. _____
13. _____
14. _____
15. _____



Determinar si la forma se está trasladando (deslizando), rotando (girando) o reflejando (volteando)



Respuestas

1. **volteando**

2. **deslizando**

3. **girando**

4. **volteando**

5. **deslizando**

6. **girando**

7. **volteando**

8. **deslizando**

9. **girando**

10. **volteando**

11. **deslizando**

12. **girando**

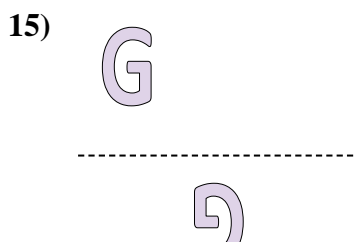

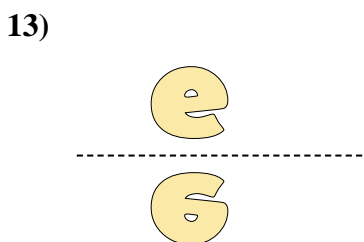
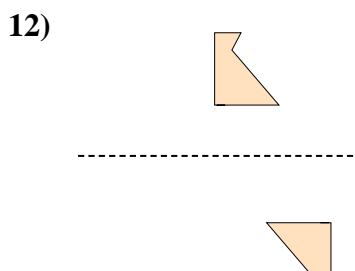
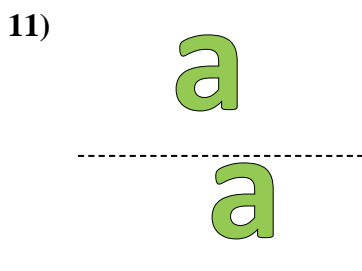
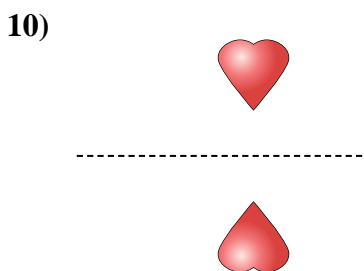
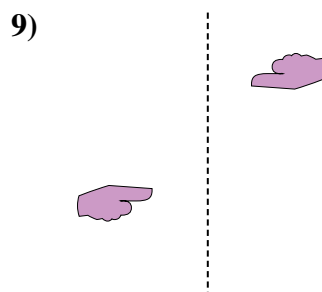
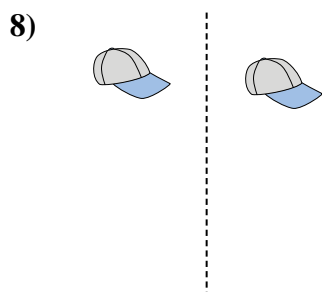
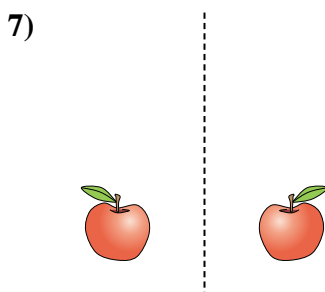
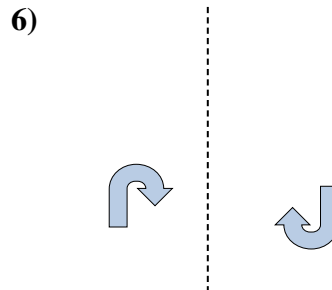
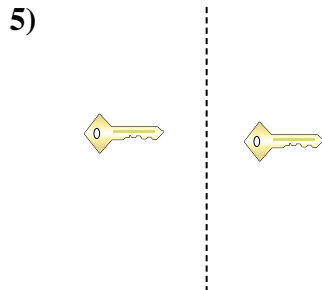
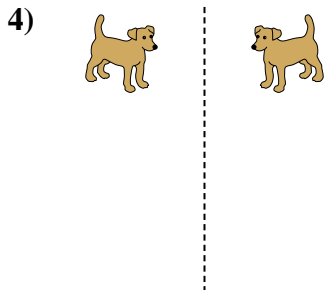
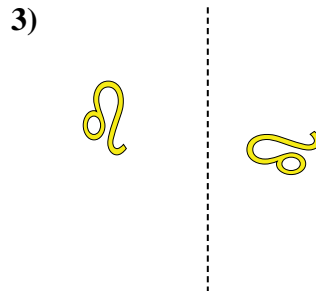
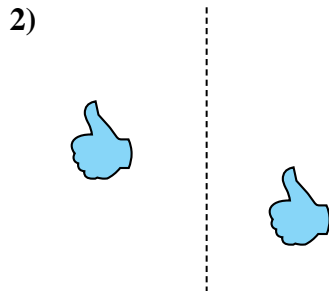
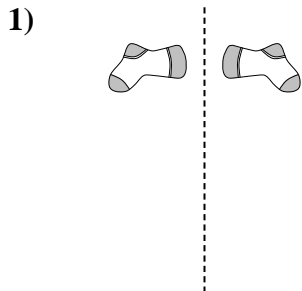
13. **volteando**

14. **deslizando**

15. **girando**



Determinar si la forma se está trasladando (deslizando), rotando (girando) o reflejando (volteando)

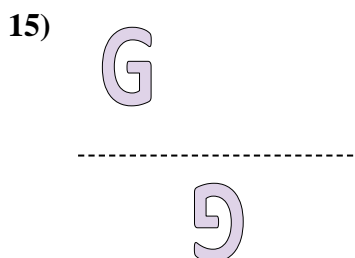

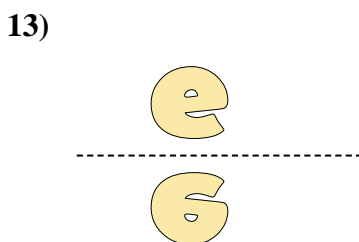
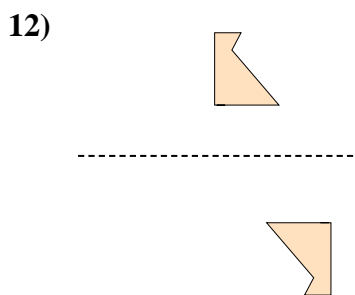
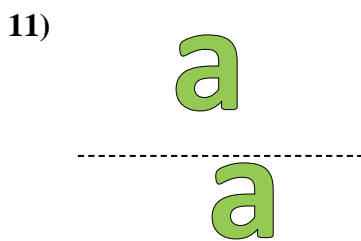
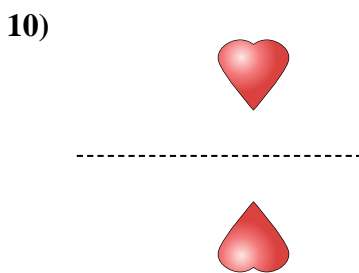
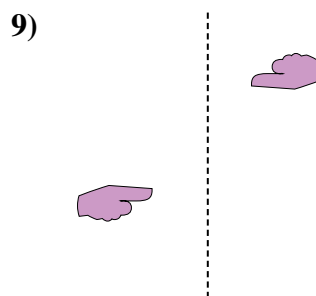
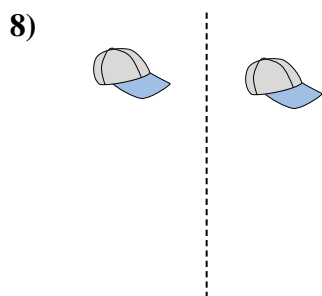

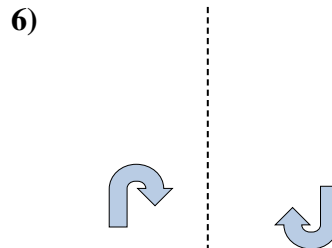
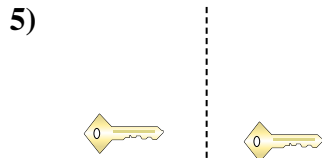
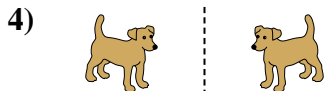
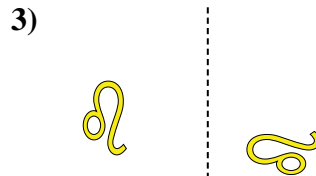



Respuestas

1. _____
2. _____
3. _____
4. _____
5. _____
6. _____
7. _____
8. _____
9. _____
10. _____
11. _____
12. _____
13. _____
14. _____
15. _____



Determinar si la forma se está trasladando (deslizando), rotando (girando) o reflejando (volteando)



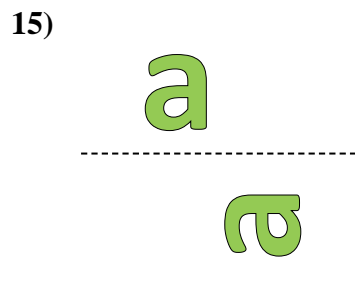
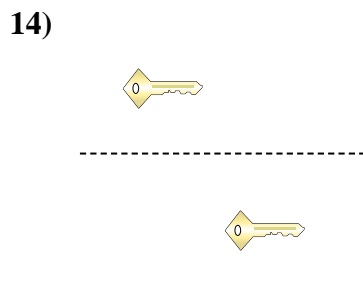
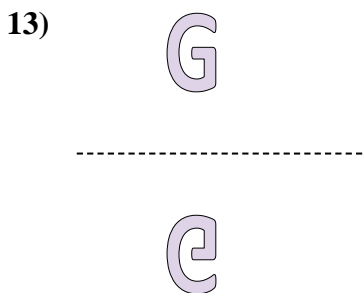
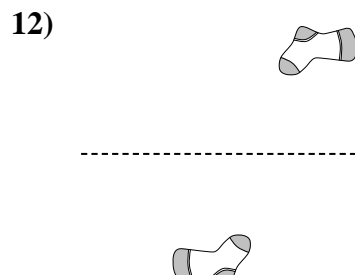
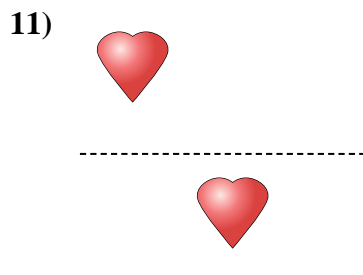
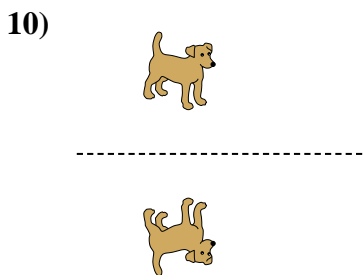
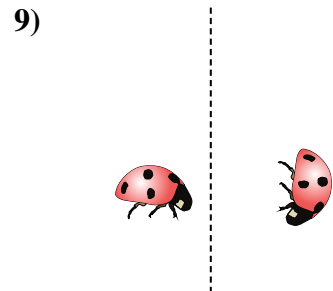
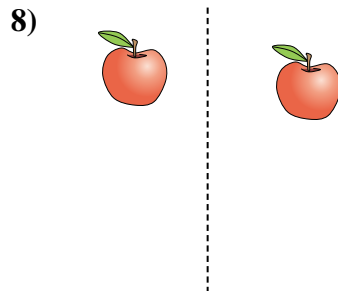
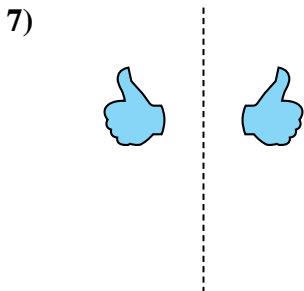
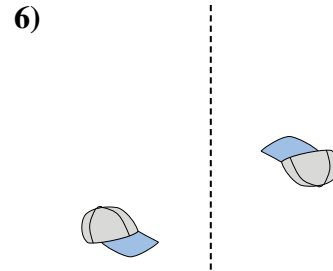
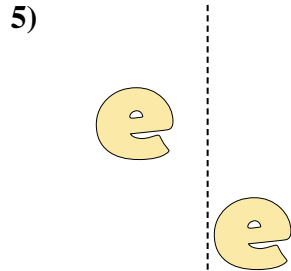
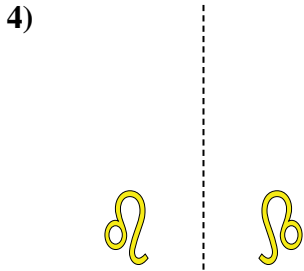
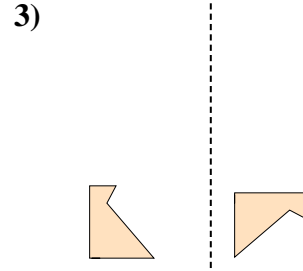

Respuestas

1. volteando
2. deslizando
3. girando
4. volteando
5. deslizando
6. girando
7. volteando
8. deslizando
9. girando
10. volteando
11. deslizando
12. girando
13. volteando
14. deslizando
15. girando



Determinar si la forma se está trasladando (deslizando), rotando (girando) o reflejando (volteando)



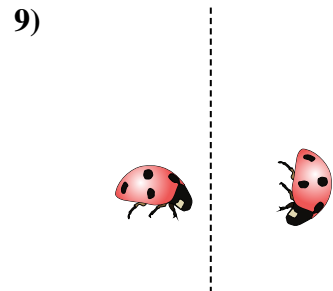
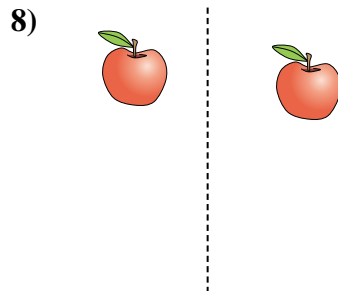
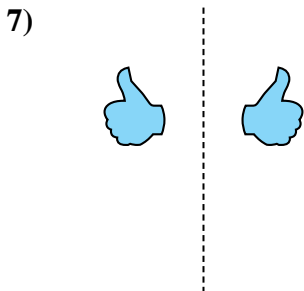
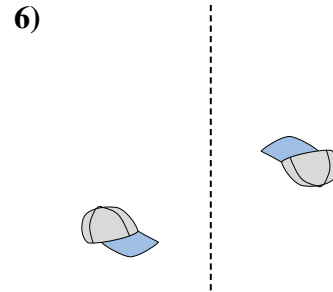
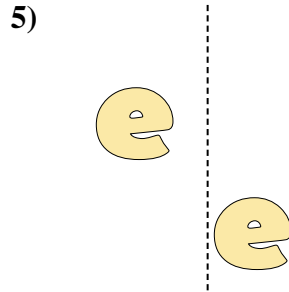
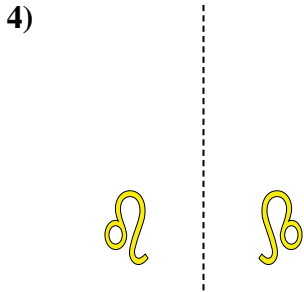
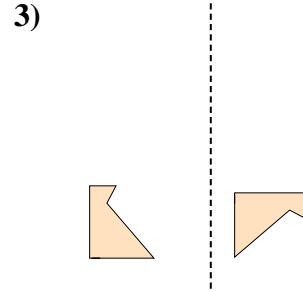
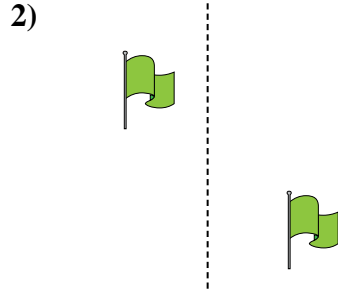
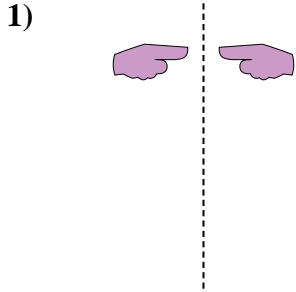
Respuestas



1. _____
2. _____
3. _____
4. _____
5. _____
6. _____
7. _____
8. _____
9. _____
10. _____
11. _____
12. _____
13. _____
14. _____
15. _____



Determinar si la forma se está trasladando (deslizando), rotando (girando) o reflejando (volteando)



Respuestas

1. **volteando**

2. **deslizando**

3. **girando**

4. **volteando**

5. **deslizando**

6. **girando**

7. **volteando**

8. **deslizando**

9. **girando**

10. **volteando**

11. **deslizando**

12. **girando**

13. **volteando**

14. **deslizando**

15. **girando**

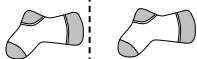


Determinar si la forma se está trasladando (deslizando), rotando (girando) o reflejando (volteando)

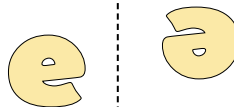
1)



2)



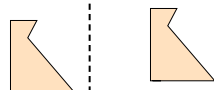
3)



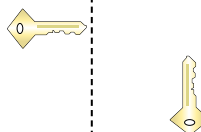
4)




5)




6)



7)



8)



9)



10)



11)



12)



13)



14)



15)



Respuestas

1. _____
2. _____
3. _____
4. _____
5. _____
6. _____
7. _____
8. _____
9. _____
10. _____
11. _____
12. _____
13. _____
14. _____
15. _____

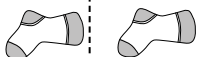


Determinar si la forma se está trasladando (deslizando), rotando (girando) o reflejando (volteando)

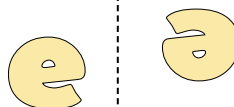
1)



2)



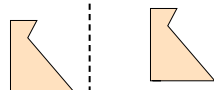
3)



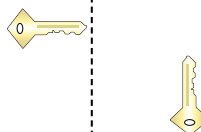
4)




5)




6)



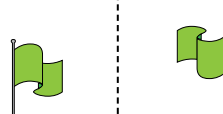
7)



8)



9)



10)



11)



12)



13)



14)



15)



Respuestas

1. volteando
2. deslizando
3. girando
4. volteando
5. deslizando
6. girando
7. volteando
8. deslizando
9. girando
10. volteando
11. deslizando
12. girando
13. volteando
14. deslizando
15. girando