




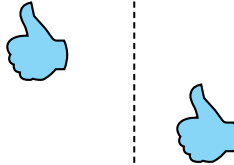
Determinar si la forma se está trasladando (deslizando), rotando (girando) o reflejando (volteando)

**Respuestas**

1)



2)



3)



1. \_\_\_\_\_

2. \_\_\_\_\_

3. \_\_\_\_\_

4. \_\_\_\_\_


4)



5)



6)



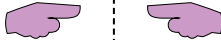
5. \_\_\_\_\_

6. \_\_\_\_\_


7. \_\_\_\_\_

8. \_\_\_\_\_

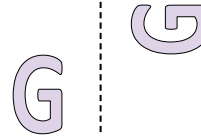
7)



8)



9)



9. \_\_\_\_\_

10. \_\_\_\_\_

11. \_\_\_\_\_

12. \_\_\_\_\_

10)



11)



12)



13. \_\_\_\_\_

14. \_\_\_\_\_

15. \_\_\_\_\_



13)



14)


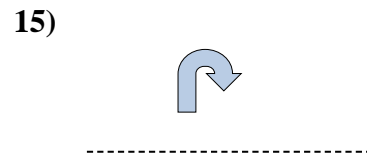
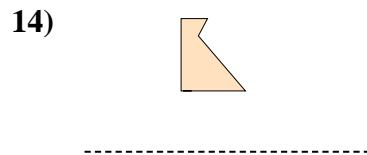
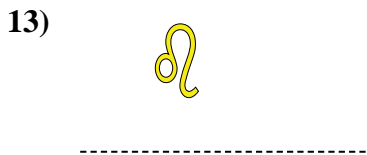
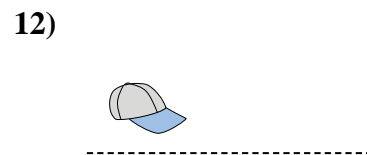
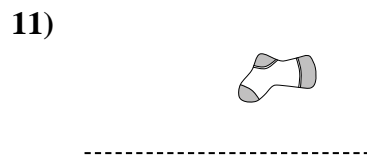
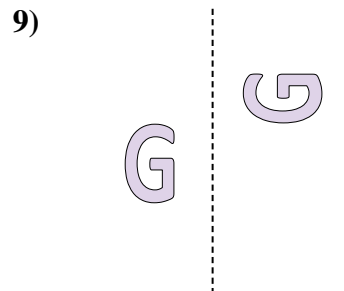
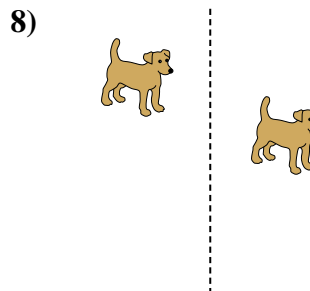
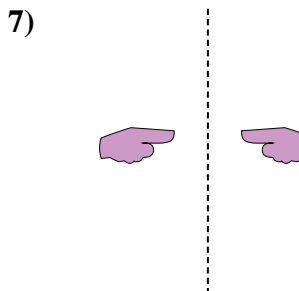
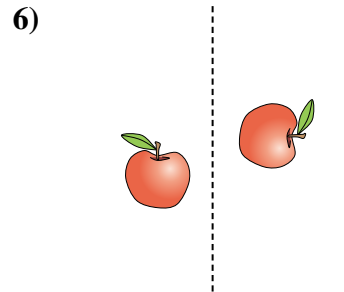
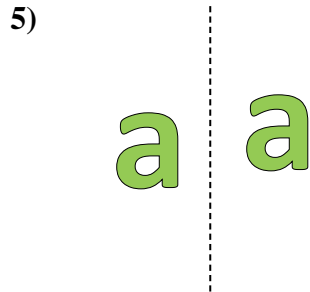
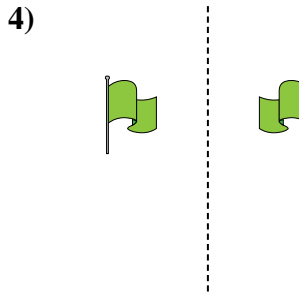

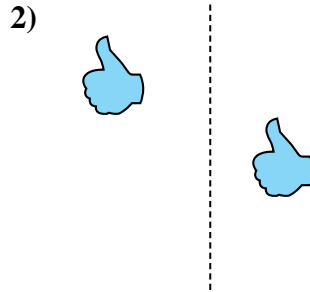
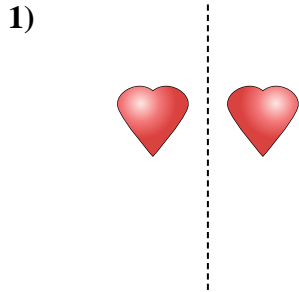


15)





Determinar si la forma se está trasladando (deslizando), rotando (girando) o reflejando (volteando)



Respuestas

1. **volteando**

2. **deslizando**

3. **girando**

4. **volteando**

5. **deslizando**

6. **girando**

7. **volteando**

8. **deslizando**

9. **girando**

10. **volteando**

11. **deslizando**

12. **girando**

13. **volteando**

14. **deslizando**

15. **girando**