



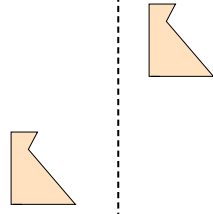
Determinar si la forma se está trasladando (deslizando), rotando (girando) o reflejando (volteando)

Respuestas

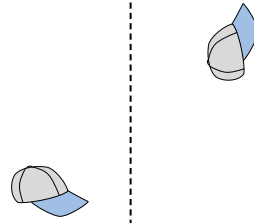
1)



2)



3)




1. _____

4)



5)



6)



2. _____

3. _____

4. _____

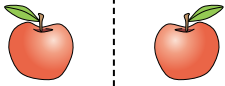
5. _____

6. _____


7. _____

8. _____

7)



8)



9)



9. _____

10. _____

11. _____

12. _____

10)



11)



12)



13. _____

14. _____

15. _____



13)



14)



15)



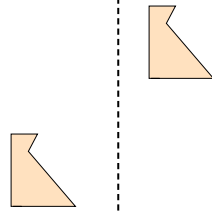


Determinar si la forma se está trasladando (deslizando), rotando (girando) o reflejando (volteando)

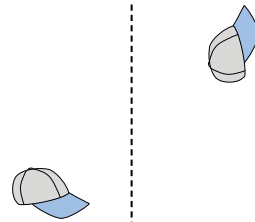
1)



2)



3)



4)



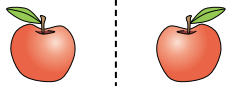
5)



6)



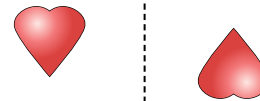
7)



8)



9)



10)



11)



12)



13)



14)



15)



Respuestas

1. **volteando**

2. **deslizando**

3. **girando**

4. **volteando**

5. **deslizando**

6. **girando**

7. **volteando**

8. **deslizando**

9. **girando**

10. **volteando**

11. **deslizando**

12. **girando**

13. **volteando**

14. **deslizando**

15. **girando**