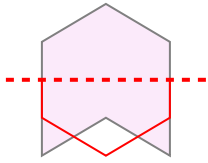




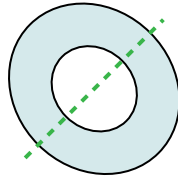


Determinar si la línea a través de cada figura es una línea de simetría.

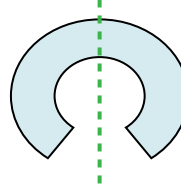
Ej)



1)



2)



Respuestas

Ej. no

1. si

2. si

3. si

4. no

5. si

6. si

7. no

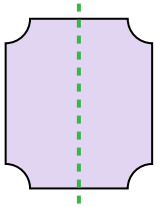
8. no

9. no

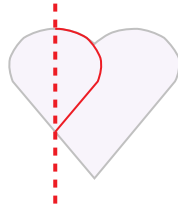
10. si

11. no


3)



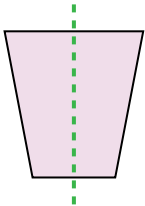
4)



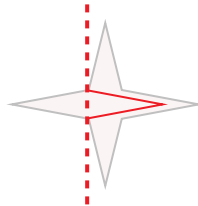
5)



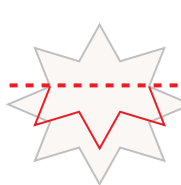
6)



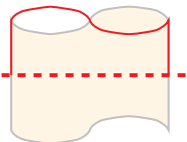
7)



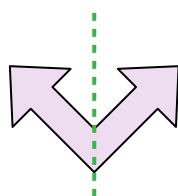
8)



9)



10)



11)

