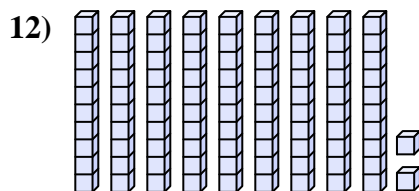
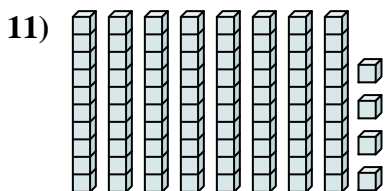
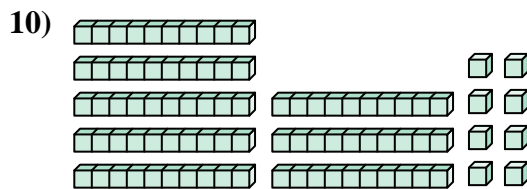
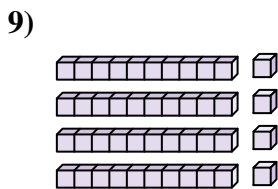
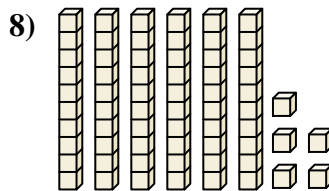
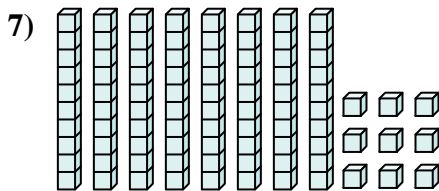
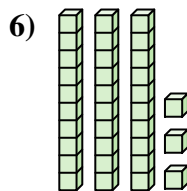
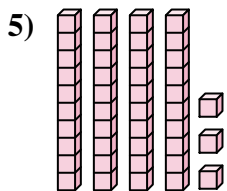
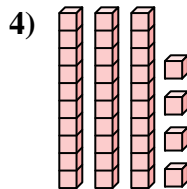
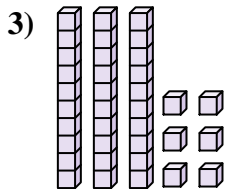
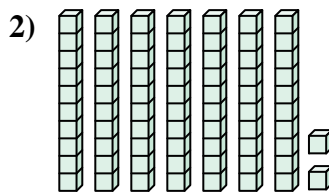
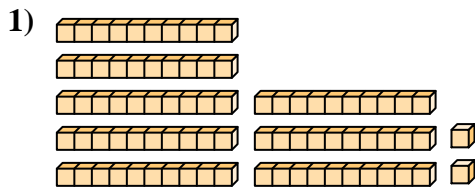




Contar el número total de pequeños bloques.



**Respuestas**

1. \_\_\_\_\_

2. \_\_\_\_\_

3. \_\_\_\_\_

4. \_\_\_\_\_

5. \_\_\_\_\_

6. \_\_\_\_\_

7. \_\_\_\_\_

8. \_\_\_\_\_

9. \_\_\_\_\_

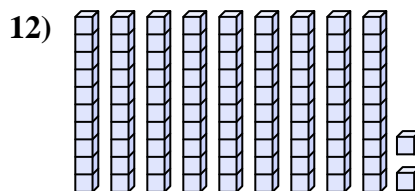
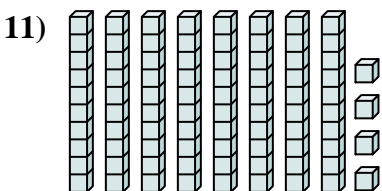
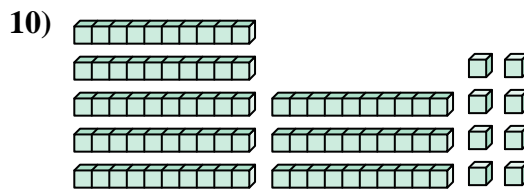
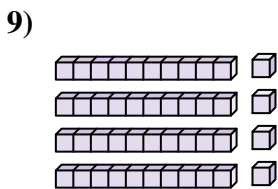
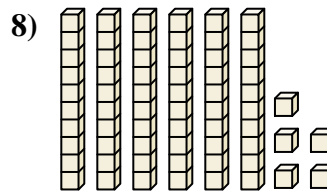
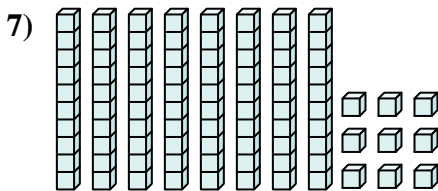
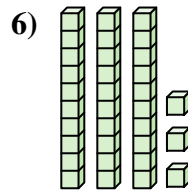
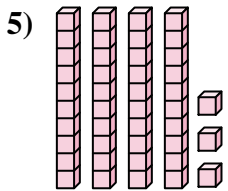
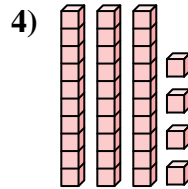
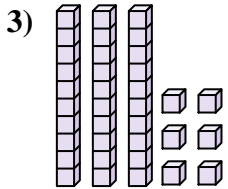
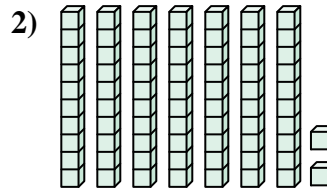
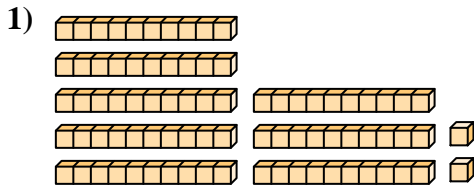
10. \_\_\_\_\_

11. \_\_\_\_\_

12. \_\_\_\_\_



Contar el número total de pequeños bloques.



Respuestas

1. 82

2. 72

3. 36

4. 34

5. 43

6. 33

7. 89

8. 65

9. 44

10. 88

11. 84

12. 92



Contar el número total de pequeños bloques.

33	43	65	72	82
36	44	34	89	88

**Respuestas**

1. \_\_\_\_\_
2. \_\_\_\_\_
3. \_\_\_\_\_
4. \_\_\_\_\_
5. \_\_\_\_\_
6. \_\_\_\_\_
7. \_\_\_\_\_
8. \_\_\_\_\_
9. \_\_\_\_\_
10. \_\_\_\_\_

