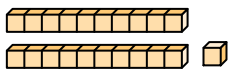


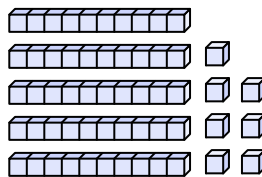


Contar el número total de pequeños bloques.

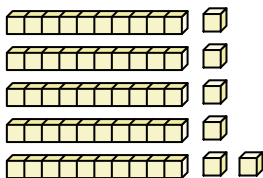
1)



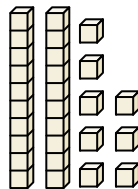
2)



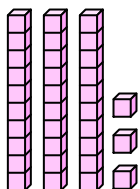
3)



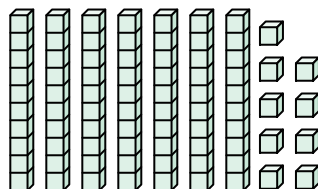
4)



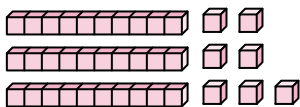
5)



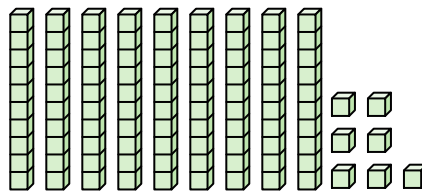
6)



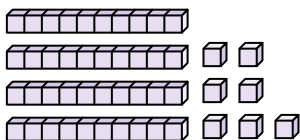
7)



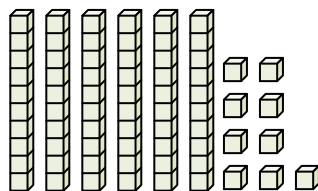
8)



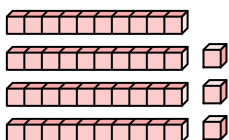
9)



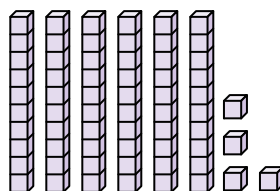
10)



11)



12)



Respuestas

1. _____

2. _____

3. _____

4. _____

5. _____

6. _____

7. _____

8. _____

9. _____

10. _____

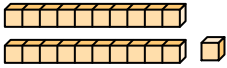
11. _____

12. _____

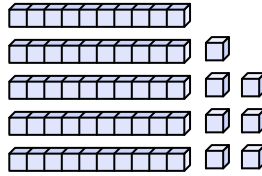


Contar el número total de pequeños bloques.

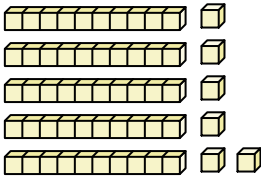
1)



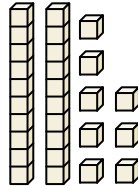
2)



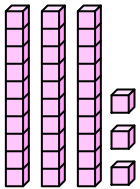
3)



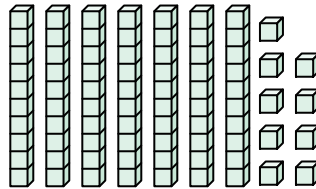
4)



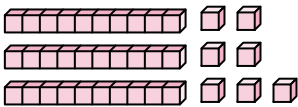
5)



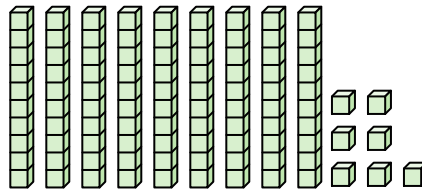
6)



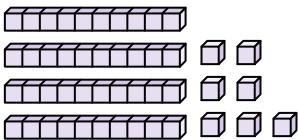
7)



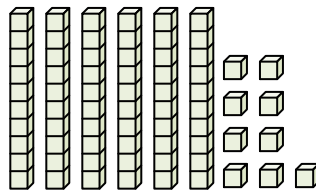
8)



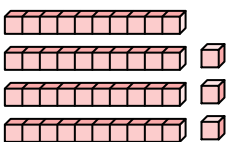
9)



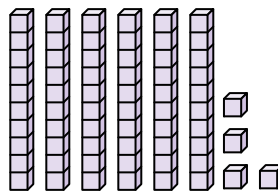
10)



11)



12)



Respuestas

1. 21

2. 57

3. 56

4. 28

5. 33

6. 79

7. 37

8. 97

9. 47

10. 69

11. 43

12. 64



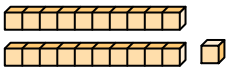
Contar el número total de pequeños bloques.

97	28	33	69	56
57	47	37	79	21

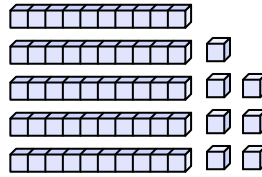
Respuestas

1. _____
2. _____
3. _____
4. _____
5. _____
6. _____
7. _____
8. _____
9. _____
10. _____

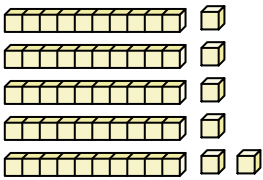
1)



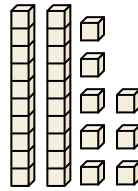
2)



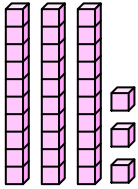
3)



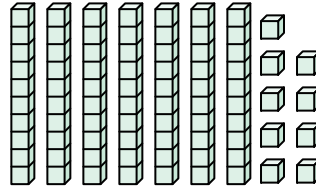
4)



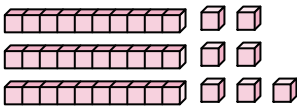
5)



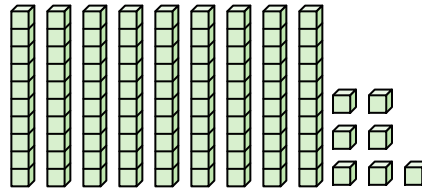
6)



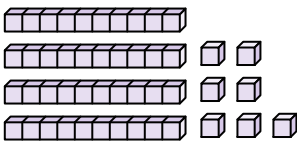
7)



8)



9)



10)

