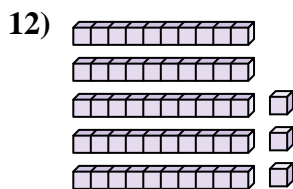
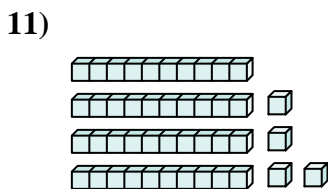
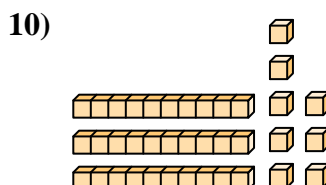
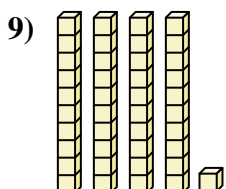
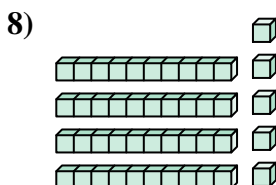
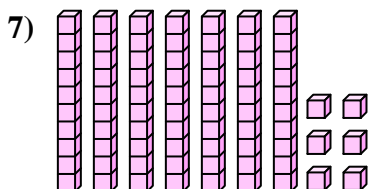
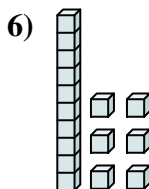
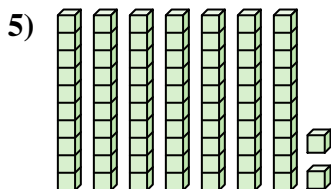
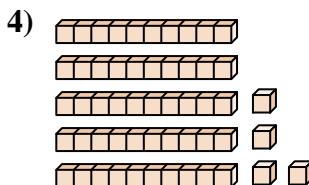
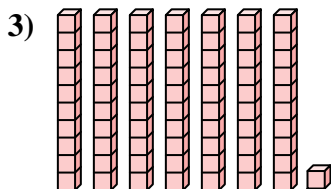
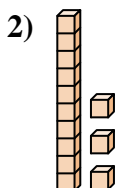
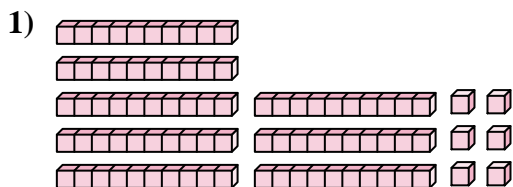




Contar el número total de pequeños bloques.



Respuestas

1. _____

2. _____

3. _____

4. _____

5. _____

6. _____

7. _____

8. _____

9. _____

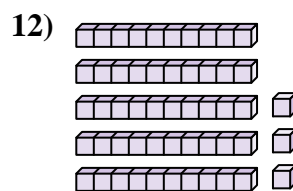
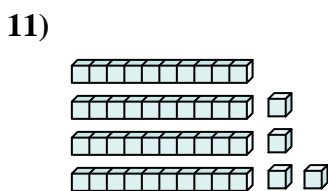
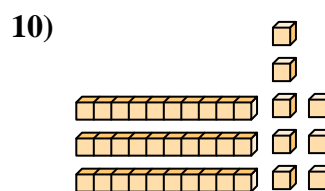
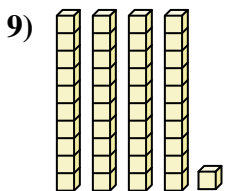
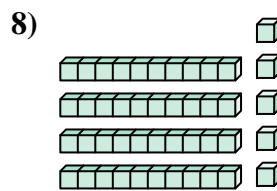
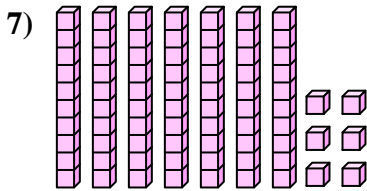
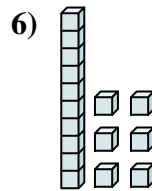
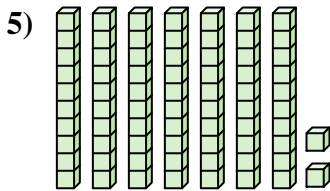
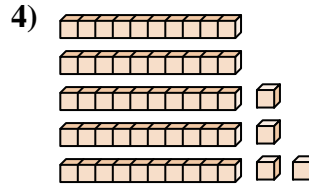
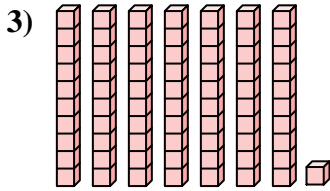
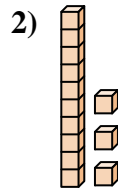
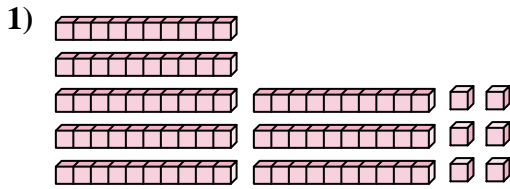
10. _____

11. _____

12. _____



Contar el número total de pequeños bloques.



Respuestas

1. 86

2. 13

3. 71

4. 54

5. 72

6. 16

7. 76

8. 45

9. 41

10. 38

11. 44

12. 53



Contar el número total de pequeños bloques.

86	13	41	71	45
72	16	38	54	76

Respuestas

1. _____
2. _____
3. _____
4. _____
5. _____
6. _____
7. _____
8. _____
9. _____
10. _____

